

Standard 5
Assignment for the month of August, 2025
Social Studies

Q1. Define grassland.

Q2. What is the location of Temperate grasslands?

Q3. Name the different grasslands found in the world and their location.

Q4. Write a short note on the climatic conditions found in temperate grasslands.

Q5 Name the following:

i. Three types of birds found in temperate grassland.

ii. Three types of animals found in the temperate grassland.

iii. Three types of flowers found in temperate grassland.

iv. Three Types of food grown in temperate grasslands.

Q6. Define ranching.

Q7.i. _____ are dominant vegetation in grassland.

ii. The grasslands occupy about _____ of the total land area on the earth.

iii. Livestock farms in _____ & _____ are known as _____.

iv. During the winter season, the _____ helps in retaining moisture in the soil.

v. The _____ of the North America are among the biggest food bowls of the world.

Q8. On a physical map of the world locate the different temperate grasslands and write their names and stick it in your class work copy.

DELHI PUBLIC SCHOOL

MATHS MONTHLY ASSIGNMENT (JULY 2025-26)

1. A truck carries 12,500 kilograms of sand. The sand is to be packed in bags of 2.5 kilograms each. How many bags are needed?
2. The school organises a 5 km run. If a student has already run 3,200 meters, how many more meters does the student need to complete the 5 km?
3. Express **4570 cm** in metres and centimetres.
4. How many millimetres are there in **2.5 metres**?
5. A road is **4 km 125 m** long. How long is it in metres?
6. A water tank holds 5 litres 250 millilitres of water. How many millilitres is that?
7. Ravi walked 1 kilometre 350 metres. How many meters did he walk?
8. A bag weighs 1 kilogram 450 grams. What is its weight in grams?
9. A recipe needs 750 millilitres of milk, but you have a 1-litre bottle. How much milk will be left after using 750 millilitres?
10. A rope of length 4 metres is cut into pieces of 25 centimetres each. How many pieces will you get?
11. A school bus travelled 120 kilometres in 2 hours. What was its speed in kilometres per hour?
12. Express **6750 mL** in litres and millilitres.
13. How many millilitres are there in **2.5 litres**?
14. Convert **9.75 L** into millilitres.
15. A jug contains **3 L 800 mL** of water. Express it in mL.

DELHI PUBLIC SCHOOL, DHANBAD

CLASS V

SUBJECT: SCIENCE

JULY MONTHLY ASSIGNMENT

- I. Write two point of differences between the following:-**
 - 1. Communicable and Non- Communicable Diseases**
 - 2. Kwashiorkor and Marasmus**
 - 3. Goitre and Anaemia**
 - 4. Germs and Vectors**
- II. Define the following terms:-**
 - 1. Vaccination**
 - 2. Immunity**
 - 3. Diabetes**
 - 4. Disease**
- III. Give reasons for the following :-**
 - 1. A green colour square is made on your toothpaste packaging.**
 - 2. Exercise and rest are essential for the body.**
 - 3. Water and roughage are needed by our body.**
 - 4. We must eat a balanced diet.**
 - 5. Vitamins are also known as Protective Food.**

DELHI PUBLIC SCHOOL, DHANBAD

ENGLISH MONTHLY ASSIGNMENT(August)- STD – V

READING SECTION

Q1. Read the following passage carefully and then answer the given questions:-

The Blind Vulture

Once upon a time, there was an old and blind vulture named Taradgava. He lived in the hollow of a tree near the bank of a river. Some other birds also used to live on that tree. They had a soft corner for Taradgava and brought food for him as well. In return for the birds' kindness, Taradgava looked after their fledgling, when they went out to gather food.

One day a cat happened to pass that way. He heard the chirping of the young birds and came near the tree in the hope of catching one. The fledgling sensed danger and started crying out loud. Taradgava, who was guarding the nests, screeched loudly and asked the cat, "Who goes there? Identify yourself!"

The cat thought that the vulture would surely rip him to pieces but soon realized that he was blind. He immediately thought of a clever plan and said, "Oh wise one, I am a cat. It is indeed an honour to meet a mighty bird like you. I have come from a long way. Please accept me as your disciple and give me shelter."

Taradgava was immensely pleased and permitted him to stay in the hollow of the tree with him. The cat ate a fledgling. Soon it became his common practice. The birds suspected Taradgava and killed him. That was the end of gullible Taradgava.

A. Complete the following sentences:-

1. He lived in the -----.
2. One day a cat-----.
3. The fledgling sensed-----.
4. It is indeed an -----.
5. Soon it became-----.

B. Who said to whom?

1. "Who goes there?"-----
2. "Oh wise one....."-----

C. Find the synonyms of the underlined words from the passage:-

1. He looked after the baby birds. -----
2. I am greatly pleased. -----
3. She is my trustworthy friend.

D. Choose the correct options:-

1. Taradgava lived in the

- a. hollow of a tree
- b. hole of a hill
- c. hole of a roof

2. The cat was

- a. very clever
- b. very kind
- c. very helpful

E. Frame meaningful sentences in your own words with:-

- 1. realized-----.
- 2. mighty -----.
- 3. permitted -----.

GRAMMAR

Q2. Write the possessive forms of the following :-

- 1. The shirts of the boys -----
- 2. The feathers of the birds-----
- 3. The school of the students-----
- 4. The burrow of the rabbits-----
- 5. The cars of the men-----

LITERATURE

Q3. Complete the following:-

- 1. The green woods----- with the voice of joy.
- 2. The name of the girls are ---, -----and ---- -
- 3. The name of the poet is -----
- 4. The fields covered with long grasses are called-----

Q4. Make a Word-Tree with:-

- 1. one -----, -----,-----,-----
- 2. air-----,-----,-----,-----

Q5. Build a Word-Family with:-

- 1. showering-----,-----,-----,-----
- 2. harmless-----,-----,-----,-----

COMPETENCY BASED QUESTIONS

Q6. Write whether these pairs of words are synonyms or antonyms:-

- 1. admit, deny-----
- 2. scared, afraid-----
- 3. alike ,same-----

Q7. Choose the correct options:-

1. He ----- the ball high up in the sky.(throw/threw/ throwing)
2. I ----- her crying in the garden sometime ago.(saw/see/sees)
3. The doctor had----- the complicated heart surgery successfully. (do/did/done)

xxxxxx÷÷÷÷xxxxxx÷÷÷÷xxxxxx

Delhi public School
Monthly Assignment of July.
Class 5

प्रश्न 1) अपठित गद्यांश।

मीरा बहन का जन्म इंग्लैंड में हुआ था। गांधी जी के विचारों का उन पर इतना असर हुआ कि वह अपना घर तथा अपने माता-पिता को छोड़कर भारत आ गई और गांधी जी के साथ काम करने लगीं। आजादी के पांच साल बाद उन्होंने उत्तर प्रदेश के एक पहाड़ी गांव, गेंवली में गोपाल आश्रम की स्थापना की। उस आश्रम में मीरा बहन का बहुत सारा समय पालतू पशुओं की देखभाल में बीतता था।

नीचे दिए गए प्रश्नों के उत्तर गद्यांश में से ढूंढ कर लिखें।

१) मीरा बहन का जन्म किस देश में हुआ था?

२) मीरा बहन भारत क्यों आ गईं?

३) आजादी के पांच साल बाद मीरा बहन ने क्या किया?

४) गद्यांश में से ढूंढ कर दो संज्ञा शब्द लिखें।

प्रश्न 2) उचित संज्ञा शब्द लिखकर रिक्त स्थान भरिए।

१) ----- एक पालतू पशु है।

२) ----- भारत का पड़ोसी देश है।

प्रश्न 3) सही सर्वनाम शब्द लिखकर वाक्य दोबारा लिखें।

१) वह लड़के खेल रहे हैं। २) मेरा पिताजी लेखक हैं।

प्रश्न 4) उचित विशेषण शब्द से वाक्य पूरा करें।

१) रीता----- फ्रॉक पहनी है।

२) मोहन----- लड़का है।

प्रश्न 5) लिंग बदले।

१) मोरनी-----

२) शेर-----

प्रश्न 6) वचन बदले

१) तितली-----

२) तिनके-----

प्रश्न 9) विलोम शब्द लिखें।

१) जय x-----

२) गुण x-----

३) भला x-----

४) जन्म x-----

प्रश्न 10) दो दो पर्यायवाची शब्द लिखें।

१) तालाब-----,-----

२) मित्र-----,-----

प्रश्न 11) 'फूल और कांटे' कविता याद करें।

प्रश्न 12) सुलेख पुस्तक की पृष्ठ संख्या 40 से 56 तक पूरा करें।



Delhi Public School,Dhanbad
Monthly Assignment (July)
Sub: AI
STD V



Q1. Fill in the blanks:

- a. _____ are built-in features that make it easy to change the layout and design of your PowerPoint presentation.
- b. _____ let you tweak the theme without changing its overall design.
- c. The _____ in PowerPoint is used to set the default layout and appearance for all the slides in your presentation.
- d. To change the background of the slides, click on _____ tab, in the Customise group, click on _____
- e. _____ option lets you add a single solid colour as the background for your slide
- f. _____ option allows you to apply a pattern of two colours to your slide's background.
- g. PowerPoint has a useful feature called _____, which allows you to visually represent information and ideas using graphics, lists, designs that include text.

Q2. Write the steps to select New Theme Background Styles

- Step 1: Click on the _____ tab.
- Step 2: Click on the More drop-down arrow in the _____ group.
- Step 3: Select _____ from the options.
- Step 4: Choose the _____ you want, and it will be applied to your presentation.

Q3. Write the steps to select New Theme Fonts

- Step 1: Click on the _____ tab.
- Step 2: Click on _____ drop-down arrow in the _____ group.
- Step 3: Select _____ group from the options. A menu with various _____ options will appear.
- Step 4: Choose the _____ you want, and it will be applied to your presentation.

4. Draw the following

a. Slide Master	
b. Solid Fill	
c. Gradient Fill	
d. Picture or Texture Fill	
e. Pattern Fill	
f. Themes	
g. Colors	



Delhi Public School, Dhanbad


Monthly Assignment(July)


Subject: Computer

Std:V



Q1. See the picture and complete the table given below:



Things	Shapes	Tabs	Group
Tree			
Roof			
Windows and Door			
Fence			
Cloud			
Sun			
Rays			
Outline for the banner	 Not to be filled		
WordArt			
3-D Rotation			
Outline colour of the shape			

Q2. See the picture given below and complete the steps.



a. Click on _____ tab

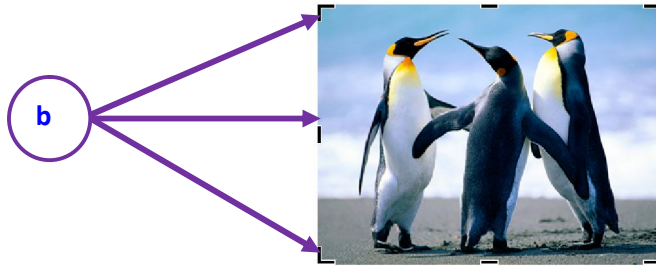
b. Click on _____ Pictures in the _____ group .The _____ dialog box appears with a search box.

c. Type the _____ of the picture you are looking for and press _____ key.

d. Click on the _____. The picture gets selected.

e. Click on _____ button.

Q3. With reference to the given picture below answer the given questions:



a. Which command is used in the above picture?

b. What is (b) known as?

c. Write a short note on the command used for.

Q4. Complete the steps to insert the picture given below



a. Click on _____ tab

b. Click on _____ option in the _____ group .The _____ dialog box appears.

c. Select a _____ to be inserted.

d. Click on _____ button.

Q5. Give answer in short for the following:

a. How many categories of shapes are there? Name any four.

b. Name the Shape formatting options.

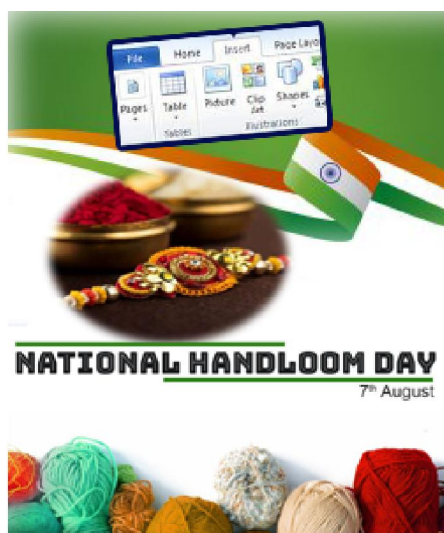
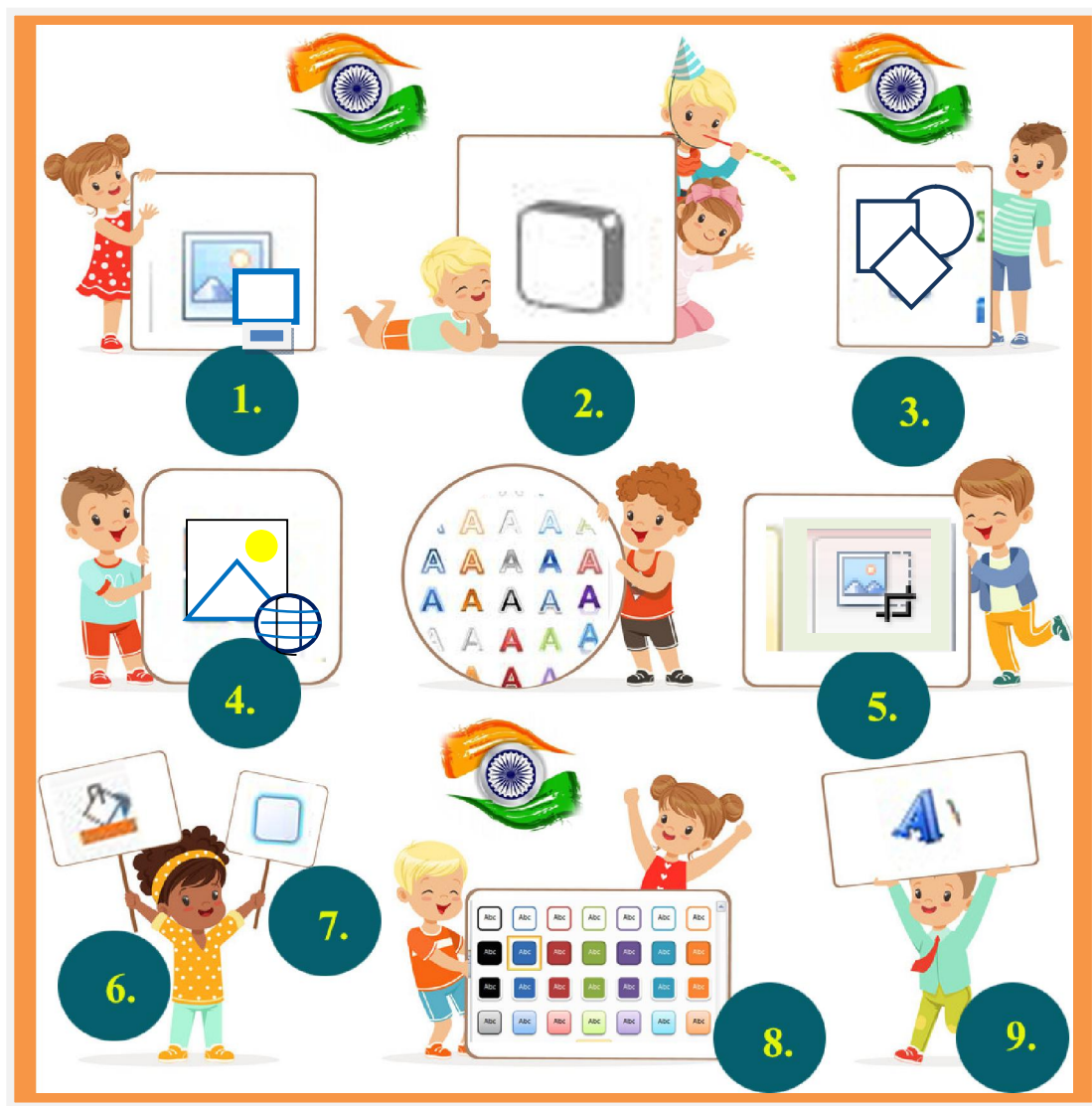
c. Name the option which help you to insert text in the shape.

d. Name the option that is used to write the decorative text in a document.

e. Name the option that helps you to change the color, width or line style of the outline of the text.

f. Name the effect that helps to apply shadow effects to the text.

Q6. Identify the icons:

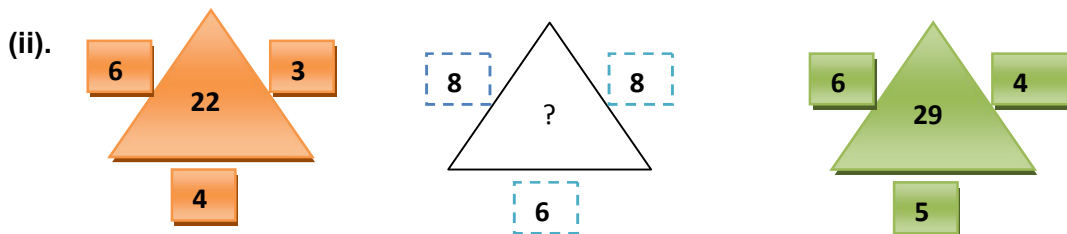




Q1. Answer the following questions:

(i) Arrange the following in a meaningful order.

1. Table 2. Tree 3. Wood 4. Seed 5. Plant
- (a) 2,3,1,4,5 (b) 3,5,4,1,2 (iii) 4,5,2,3,1 (iv) 1,2,3,4,5



- (a) 25 (b) 37 (c) 45 (d) 70

(iii). Look at this series: 7, 10, 8, 11, 9, 12, ... What number should come next?

- A. 7 B. 12 C. 10 D. 13

(iv). Look at this series: 80, 10, 70, 15, 60 ... What number should come next?

- A. 20 B. 25 C. 30 D. 5

(v). Which word does NOT belong with the others?

- A. index B. glossary C. chapter D. book

