

Monthly/ Half Yearly Revision Assignment

Subject: English

Std V

SECTION: A Unseen Comprehension Passage

On 5th September, we celebrate Teacher's Day in honour of the teachers who guide us to make our future bright by giving us proper guidance and knowledge. 5th September happens to be the birthday of a great educationist, Dr S Radhakrishnan, who was the second President of India. This year, Teacher's Day began with a school assembly in the Hall where the Headmistress delivered a speech. After that we gathered in our class, not to study but to enjoy ourselves. The senior class students represented themselves as teachers. Our class students arranged a small party for the teachers who taught us. Then, we had a round of eating and playing games with our teachers. Most of the teachers were very sporting, and we fully enjoyed with them. After all, it was their day to enjoy and have fun.

1. Read the above passage and complete the sentences accordingly:-
 - a) 5th September happens to be the birthday of a great educationist, Dr S Radhakrishnan, who was _____ .
 - b) Our class students arranged a small party for _____ .
2. Tick the correct option:-
 - a) Our teachers give us proper
i) Guidance and knowledge ii) gifts iii) uniforms
 - b) Most of the teachers were very
i) Angry ii) sporting iii) busy

SECTION: B Essay & letter

3. Write an essay on any one of the given topics:-
 - a) Wealth can't buy happiness or
 - b) The positive effects of reading
4. Write an application to your Headmistress regarding your sick leave.
5. Write the plural of the following:-
 - a) radio b) half c) brief d) mouse
6. Rewrite the following group of words using an apostrophe:-
 - a) the tails of dogs. b) the bags of women

7. Underline the common gender and circle the neuter gender:-

- a) The doctor is in the hospital.
- b) The minister was sitting in his helicopter.

8. Read these sentences and state whether they are declarative, imperative, interrogative or exclamatory sentences:-

- a) The Moon revolves around the Earth.
- b) Please shut the door.
- c) How beautiful it is!
- d) Are they your parents?

9. Underline the reflexive pronouns and circle the emphasising pronouns in the following sentences:-?

- a) He went out himself.
- b) I myself cooked for you.
- c) You yourself told me the facts.

10. Fill in the blanks with the correct possessive adjectives given in the brackets:-

- a) That is _____ shirt. (my/ mine)
- b) Is this _____ toys? (our/ours)

11. Choose the correct adjective from the brackets to complete each sentence:-

- a) Amar is the _____ of all the three boys. (Clever/ Cleverest)
- b) Sheila is _____ than Geroge. (elder/older)

12. Fill in the blanks with a, an or the :-

- a) I have read _____ Ramayana.
- b) My father works in _____ university.

13. Circle the transitive verbs and underline their objects:-

- a) The boy dropped his bag.
- b) My friend wants a chocolate.

SECTION: D – LITERATURE

14. Answer the following questions:-

a) What sound does Khare Chacha play for the girls?

b) Why was Arion so famous?

15. Make a word tree of three words with:-

For

16. Make a word family of five words with:-

Creatures

17. Write who said to whom:-

a) "You should find a job soon. "

b) "Nearly 600 kilograms... . "

18. Complete the poem:-

When the _____ laugh with their _____ green,

And the _____ laughs in the merry _____

When Mary and _____ and Emily

With their _____ round mouths _____ 'Ha ha he'!

19. Write true or false for the given statements:-

a) Harekala Hajabba understood only Tulu and Beary languages.

b) Green turtle eats only sea grass and algae

20. Fill in the blanks with the correct words:-

a) Hajabba's village, called _____ , had never had a school.

b) Tulsa wishes she could visit a _____

c) The name of the lawyer was _____.

COMPETENCY BASED QUESTIONS

21. Tick the correct option:-

a) The pronouns they and them may be

i) masculine ii) feminine iii) neuter iv) all three

b) Which letter occurs the most frequently in the following sentence?

THE SUN ALWAYS SETS IN THE WEST.

I) E ii) S iii) T iv) W
XXXXXXXXXXXXXXXXXXXX XXXXXXXXXXXX

MATHS MONTHLY ASSIGNMENT

CLASS - V, SESSION - 2025-26

1) Solve as required:-

(a) $10\text{ kg } 15\text{ g} - 2\text{ kg } 9\text{ g}$ (b) $32\text{ m } 4\text{ cm} + 9\text{ m } 12\text{ cm}$

2) Simplify :-

(a) $8,28,05,219 - 74,39,806 + 42,81,157$

(b) $252 - 30 \times 9 \div 3 + 11$

(c) $15 + 9 \div 3 - [5 \times 3 - \{5 - (8 - 5)\}]$

(d) $625 \div 25 \times 12 \div 2 + 8 - 4$

(e) $16 \div (15 - 8 - 3) + 4$

3) Find out, when:-

(a) Radius = 4.8 cm, find diameter

(b) Diameter = 12.4 cm, find radius

4) Draw one diameter, two chords and one radius in the circle of radius 5.2 cm

5) Find the complementary angles of:- (a) 43° (b) 90°

6) Find the supplementary angles of:- (a) 158° (b) 24°

7) In a right angle triangle, one angle measures 35° . Find the remaining angles.

8) $\angle A = 25^\circ$, $\angle B = 100^\circ$ and $\angle C = 65^\circ$. With these measures, can we draw a triangle? If not, why?

9) Draw an angle of 50° . Name the angles, vertex and arms.

10) convert into degree celsius:- (a) 105°C (b) 220°C

11) Convert into degree fahrenheit:- (a) 104°F (b) 203°D

12) Change into kg, hg and dag :- (a) 7428 dag (b) 3994 dag

13) Divide and verify :- (a) $61304 \div 148$ (b) $34294 \div 274$

14) Find the quotient correct to two decimal places:-

(a) $17.193 \div 7$ (b) $9.823 \div 29$

15) Find the average of first five multiples of 12.

16) Find the average of first ten even numbers.

17) A container content 86 kL 425 L of water in the morning in the evening it was found to have only 38 kL 33 L of water. How much water evaporated during the day?

18) A 1 L bottle of milk was wrongly filled up with 1 L 34 mL of milk. If 66 such bottles were made, find out the quantity of milk gone excess.

19) Anjali started practicing mathematical problems at 6:45 p.m. and continued to 10:10 p.m. How long did she spend in practicing mathematical problems?

20) Rima left for market at 8:48 a.m. and came back at 1:10 p.m. How long did she spend in the market and on the way?

21) LEARN AND PRACTICE TABLES TILL 25.

CLASS – V SCIENCE REVISION ASSIGNMENT

Name : _____ Sec : _____

I. GIVE REASONS:-

- a. Dispersal of seeds is necessary.
- b. Fats are also known as energy-giving food.
- c. In hilly regions, terrace farming is practiced .
- d. The last two pairs of ribs are called floating ribs.
- e. Water is essential for our body.

II. DEFINE THE FOLLOWING TERMS:-

- a. Shelter Belts
- b. Kharif Crops
- c. Pollination
- d. Immunity
- e. Weathering
- f. Deficiency Diseases

III. COMPETENCY BASED QUESTIONS :-

- a. Skull : Brain :: _____ : Heart
- b. Spores : _____ :: Stem Cutting: Rose.
- c. Vitamin A : Carrot :: Vitamin K : _____.
- d. Soil Conservation : _____ :: Soil Erosion : Overrating by Cattle.
- e. Biotic Component : Animals :: Abiotic Component : _____.

IV. ANSWER THE FOLLOWING QUESTIONS:-

- a. Explain the parts of a flower. Draw a well labelled diagram to show the parts of a flower.
- b. Describe the Skeletal structure of a skull.Which organs does it protect?
- c. What are the hazards of overeating?
- d. What fo you mean by Vaccine? Give two examples
- e. What is weathering? How does it help in soil formation?
- f. What is soil conservation? Name the ways by which soil can be conserved?

V. DRAW, LABEL AND COLOUR:-

- a. Parts of a seed
- b. Rib Cage
- c. Bones of Upper and lower limbs
- d. Two examples of food that prevent night blindness.
- e. Weathering

Social Studies Monthly and Revision Assignment

Q1 Fill in the blanks:

1. _____ is an imaginary line that separates the day from night.
2. The Earth rotates from _____ to _____.
3. The axis of the Earth is tilted at an angle of _____ on its _____.
4. _____ was the first to give the model of the sun as the centre of the solar system.
5. _____ are among the most fertile regions of the world.
6. One fourth of the day is adjusted after every _____ years.
7. Most of the weather satellite Orbit in _____.
8. Equinoxes fall on _____ and _____.
9. In the month of December, the _____ pole is tilted towards the sun.
10. Permanently Frozen Ground is called _____.
11. The inner most layer of the earth is called _____.
12. Desert climate is also called _____ climate.
13. _____ has been cradle of many civilizations.
14. The movement of _____ causes earthquakes and volcanic eruptions.
15. _____ is the hottest layer of the atmosphere.
16. The _____ saves us from the ultraviolet radiations of the Sun.
17. Airplanes fly in the _____.
18. _____ of the water on earth is available in saline form.
19. _____ is caused by burning of fossil fuel.
20. Temperature decreases with the increase in _____.

Q2. Give reason;

1. People in Chennai seldom by woolen clothes _____
2. London remains cloudy foggy and damp throughout the year.....
3. Places near the equator are very hot.....
4. Air pressure in coastal areas is more than in hills.....
5. Places near the equator get the highest amount of rainfall.....
6. Chennai Mumbai and Goa have moderate climate where as Delhi has extreme climate.....
7. Days are longer than nights during summers and vice-versa during winters.....

Q3. Define:

1. Ranches
2. Hurricane
3. Cyclone
4. Tundra climate zone
5. Circle of illumination
6. Weather
7. Climate
8. solstice
9. Equinox
10. Biosphere
11. Troposphere
12. Lithosphere

Q4. Draw colour and label;

1. Effects of revolution 2. Composition of air 3. Structure of lithosphere 4. Biosphere 5. Layers of atmosphere

Q5. Name the places where they are found:

1. Velds_____ 2. Downs_____ 3. Prairies_____

4. Savannah_____ 5. Marine West Coast climate zone_____ 6. Humid Sub tropical climatic zone _____

7. Tropical wet climate zone_____. 8. Desert climate zone_____.

Q6 Answer the following questions:

1. What are the features of tropical wet climate?

2. Grasslands among the top food bowls of the world. Why?

3. What is the difference between spring Equinox and Autumnal Equinox?

4. Write three features of lithosphere.

5. What is ozone layer? What is the benefit of this layer?

6. What are the features of troposphere?

7. What do you mean by summer solstice?



Delhi Public School,Dhanbad
Monthly Assignment (July)
Sub: AI
STD V



Q1. Fill in the blanks:

- a. _____ are special visual effects that you can apply to text and objects on a slide.
- b. _____ controls how an object appears on the slide.
- c. _____ highlights key points or objects during your presentation.
- d. _____ controls how an object leaves the slide.
- e. _____ is similar to Emphasis, how the object moves along a set path, like a circle or square.
- f. A _____ symbol appears next to the slide in the slide navigation pane.

Q2. Write the steps to add Animations

Step 1: Open PowerPoint and select the text or image to _____.

Step 2: Click on the _____ tab.

Step 3: In the _____ group, click the _____ button to see a gallery of effects.

Step 4: PowerPoint offers _____ types of animation effects.

Step 5: Choose an _____ according to your choice.

Q3. Write the steps to remove an animation

Step 1: Click on the _____ assigned to the animation you want to remove. The _____ will be highlighted.

Step 2: Press _____ key.

Step 3: You can also remove an _____ from the Animation Pane.

Step 4: Simply click on the _____ effect in the pane and press the _____ key to remove it.

4. Draw and name

a. any four Entrance effects	
b. any four Emphasis effects	
c. any four Exit effects	
d. any four Motion Paths	
e. any two subtle Transition effects	
f. any two Exciting Transition effects	
g. any two Dynamic Content effects	



Delhi Public School, Dhanbad

Revision Assignment(Aug-Sept)

Subject: Computer

Std:V



Q1. Fill in the blanks

- _____ is considered as the first calculating device that was developed around 5000 yrs ago.
- _____ was an improvement of the Pascaline developed by Gottfried W. Leibniz.
- Hardware and software in a computer is controlled by _____ system software.
- _____ software is designed to perform basic maintenance tasks on a computer.
- In _____ orientation, the height of the page is longer than the width.
- _____ is used to add or remove extra space from the left or right margin of the page.
- We can choose a border style from the _____ option in the Borders and Shading dialog box to set an artistic border around the page.
- When we insert a shape, a new _____ tab appears.
- _____ option is used to insert a picture directly from the Internet.

Q2. State whether the following statements are true/false

- Third Generation Computers used transistors as the main component. _____
- UNIVAC I was the first commercial computer. _____
- A backup utility software protects the computer from viruses. _____
- There are four margins in a page. _____
- We can find Header and Footer option in the Design tab. _____
- We cannot insert pictures directly from the Internet. _____
- The resize handles are used to delete an object. _____
- Pictures make a document more attractive. _____

Q3. Match the following:

Column A

a.Shape Effects

b.Napier's Bones

c.IBM 360,ICL 1900,UNIVAC 900

d.Adobe Photoshop,GIMP

e.Norton

f.Header and Footer

g.Page Border

h. X_2

Column B

(i) Third Generation Computers

(ii)Photo Editing Software

(iii)1617

(iv) Antivirus Software

(v)Subscript

(vi)Design Tab

(vii)Insert Tab

(viii) apply shadow effect to the shape.

☐☐☐☐☐☐☐☐

Q4. Tick the correct option

a. Fourth Generation Computers used

(i)VLSI

(ii)Transistors

(iii)AI

b. Analytical Engine was invented in the year

(i)1822

(ii)1837

(iii)1842

c. MITS,Altair,Apple II,IBM PC and CRAY-1 are the examples of _____ Generation computers.

(i)First

(ii)Fourth

(iii)Third

d. _____ software is designed to perform basic maintenance tasks on a computer.

(i)Application Software

(ii)System Software

(iii)Programming Language

e. In _____, the width of the page is longer than the height.

(i)Landscape

(ii) Portrait

(iii)Both of these

f. The key combinations of Superscript is

(i)CTRL+ =

(ii)CTRL+Shift+ =

(iii)CTRL+Alt+ =

g. _____ it is used to write decorative text in a document.

(i)ClipArt

(ii) WordArt

(iii)Pictures

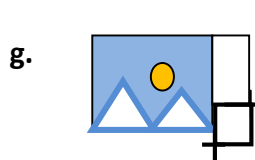
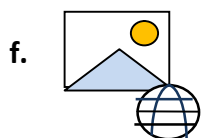
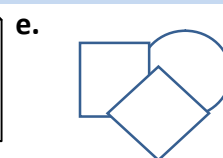


h. This command is used to change the colour,width or line style of the outline of the shape.

(i)Shape Outline

(ii)Shape Fill

(iii)Shape Effects

Q5. Identify the icons:



Q6. Answer the following questions:

- Write any two characteristics of a computer.
- Name two types of an application software.
- What is the use of backup utility software?
- Write the steps to create columns in a document.
- What is a page margin? Name the four margins of a page.
- Write the steps to change the orientation of the page.
- Write the steps to add text in a shape.
- How do you add a Online Pictures in a Word document?
- Write the key combinations for the following
 - Find Navigation Pane
 - To open Find and Replace dialog box

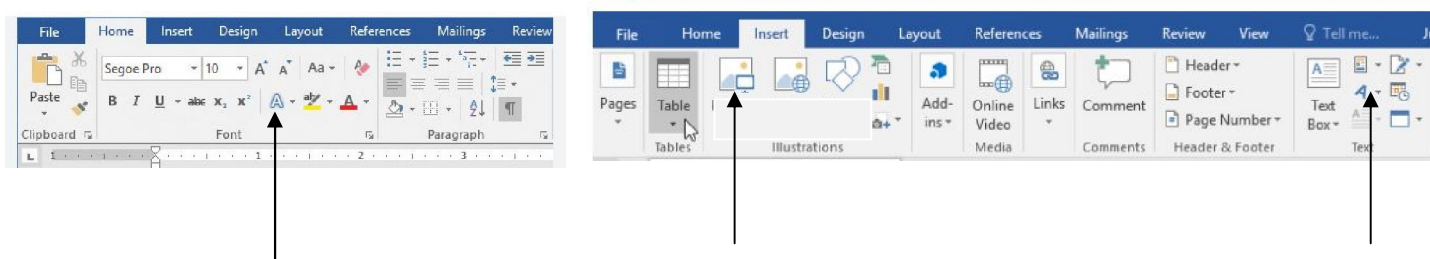
Q7. Write short notes on the following:

- Abacus
- Format Painter
- Cropping
- WordArt
- Shapes
- Portrait
- Page Border
- Utility Software
- Operating Software
- Application Software

Q8. Draw the following:

- Technology used in Third Generation Computers
- Word Processing Software
- Photo Editing Software
- Presentation Software
- Spreadsheet Software
- Page Size
- Page margin
- Antivirus Software
- Borders
- Page Border
- Format Painter
- Superscript
- Find
- Replace
- The first Calculator
- First Calculating device

Q9. Label the following:





10. Competency based questions

a. Find out the word which cannot be made from the letter of the given word "CHANDRAYAAN"

- (i) Andhra (ii) Yatch (iii) Hand (iv) Yarn

b. Which one letter occurs twice in "MOUNTAIN", once in "SAND" but does not occur in "ROAD"

- (i) T (ii) C (iii) O (iv) N

c. In the magic square given below, sum of each row, column or diagonal is same. Find the missing number.

5	?	2
3	5	8
8	2	6

- (i) 10 (ii) 9 (iii) 8 (iv) 7

d. Which of the given option will complete the given pattern. 4F 9I 14L 19 O

- (i) 15L (ii) 20L (iii) 24R (iv) 23P

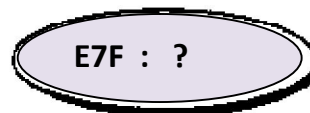
Here we have to find the pattern in which a particular series is based. Tick (✓) from the answer set which comes next.

102	203	304	405
-----	-----	-----	-----

504	703	506	206
-----	-----	-----	-----

- (a) (b) (c) (d)

5. Tick (✓) the right choice.



- (a) E5F (b) F7G (c) E7F (d) E8F



Halfyearly revision Assignment

Subject : HINDI

Class : 5

प्रश्न-1 निम्नलिखित प्रश्नों के उत्तर दें।

- क. करन ने जंगल में ऐसा क्या देखा कि वह पसीना-पसीना हो गया?
- ख. सिपाहियों को देखकर शिशुपाल कुओ6 डर गए?
- ग. नेवला बनकर खुशी से उछलने पर गिरगिट के साथ क्या हुआ?
- घ. अंकित ने रेहान के बेटे को किस तरह बचाया?
- ङ. शास्त्री जी ने राष्ट्र के नाम संदेश में क्या कहा?
- च. अंकित ने रिहान के बेटे को किस तरह बचाया?
- छ. स्कूल से लौटने पर रंजन ने क्या किया?
- ज. न्यायमंत्री ने अपराधी को किस प्रकार दंड दिया?
- झ. कबूतरों को देखकर करन को शरारत सूझी?
- ञ. सम्राट ने शिशुपाल को दरबार में क्यों बुलवाया?

प्रश्न-2 शब्दार्थ लिखें।

कामना, संकेत, सम्मान, सतर्क, दोष, सहपाठी, प्रशंसा, सौभाग्य, स्वार्थ, संग्राम

प्रश्न-3 कविता के माध्यम से रिक्तिपूर्ति करें।

- क. मेह उनपर है ----- एक - सा,
एक-सी ----- पर हवाएँ हैं वहीं।
पर ----- ही यह दिखाता है हमें,
----- उनके एक - से होते नहीं॥
- ख. हम बालक हैं ----- साहसी
आगे बढ़ते -----,
----- सोच और ----- से अपने
नया ----- रचाएँगे।

प्रश्न-4. निम्नलिखित शब्दों से भाववाचक संज्ञा शब्द बनाएँ।

मित्र , निज, धोना, शत्रु, प्रभु, बच्चा, सेवक, स्त्री

प्रश्न-5. लिंग बदलें।

युवक , माली, कवि, धोबी, पति, सिंह, जेठ, पति

प्रश्न-6 वचन बताएँ।

बच्चा, गाथा, सभाएँ, छाते, महिलाएँ, पंखा, गुरु, बात

प्रश्न-7 कारक के विभक्ति चिह्न बताएँ।

कर्ता, करण, संप्रदान, कर्म, संबोधन

प्रश्न-8 विलोम शब्द बताएँ।

उचित, एकता, हर्ष, गुण, मौखिक, लाभ, बलवान, आय

प्रश्न-9 दो पर्यायवाची शब्द लिखें।

मान, बादल, धरती, बिजली, आकाश, पानी वायु, पर्वत

प्रश्न-10. अनेक शब्दों के लिए एक शब्द बताएँ।

जल में रहने वाला, जो सदा सत्य बोलता हो, नभ में रहने वाला, बोलने वाला,
जिसमें शर्म न हो, जो छोटा भाई हो

प्रश्न-11. निम्नलिखित मुहावरों के अर्थ लिखें।

कान भरना, अक्ल का दुश्मन, आँखों का तारा, घी के दिए जलाना, पीठ थपथपाना, खून
खौलना

प्रश्न-12. अनेकार्थी शब्द के अर्थ बताएँ।

कर, पत्र, पर, लाल, गुरु, कुल

प्रश्न-13 किसी एक विषय पर अनुच्छेद लिखें।

कोशिश करने वालों की हार नहीं होती

अथवा

मेले का दृश्य

प्रश्न-14. आपके विद्यालय के सभागार में अंतर्विद्यालय हिंदी वाद-विवाद प्रतियोगिता होने
वाला है। इसके लिए सूचना पत्र लिखें।

प्रश्न 15 स्थानांतरण प्रमाण पत्र हेतु प्रधानाचार्या को प्रार्थना पत्र लिखे।

प्रश्न-16 गद्यांश ध्यानपूर्वक पढ़कर निम्नलिखित प्रश्नों के उत्तर दें।

मेरे देश का नाम भारत है, जो महाराज दुष्यंत एवं शकुंतला के प्रतापी पुत्र “भरत” के नाम पर रखा गया। पहले इसे “आर्यावर्त” कहा जाता था। इस पावन देश में राम, कृष्ण, महात्मा बुद्ध, वर्धमान महावीर आदि महापुरुषों ने जन्म लिया। इस देश में अशोक और अकबर जैसे प्रतापी सम्राट भी हुए हैं। इस देश के स्वतंत्रता संग्राम में महात्मा गांधी, पंडित जवाहर लाल नेहरू, लोकमान्य तिलक, गोपाल कृष्ण गोखले, लाला लाजपत राय, नेताजी सुभाषचंद्र बोस, सरोजिनी नायडू आदि ने कंधे से कंधा मिलाकर संघर्ष किया।

प्रश्न. भारत का नाम किसके नाम पर रखा गया?

प्रश्न. इस देश को पहले किस नाम से जाना जाता था?

प्रश्न विलोम शब्द लिखें। विदेश, मरण

प्रश्न रेखांकित वाक्य में एक विशेषण शब्द खोजकर लिखें।

प्रश्न महाराज का समानार्थी शब्द लिखें।