

Monthly Assignment Class 4

SST

On the given political map of India mark the states that lie in the southern plateau region. Also write their names in the table given below.



STATE	CAPITAL
1	
2	
3	
4	
5	
6	
7	
8	

Match the following.

Column A

1. Thematic maps
2. Snow - covered areas
3. Plains and lowlands
4. Language of the map
5. Mountains

Column B

- c. Rainfall and crops grown in an area
- a. White
- b. Shown in shades of green
- e. Direction and scale
- d. Shown in shade of brown

Q3. Name them.

1. A Drawing of the whole or part of the Earth's surface on a flat surface. _____
2. On a map, plains and lowlands are always shown in shades of _____
3. The most important component of a map. _____
4. A drawing that shows small areas, such as classroom, in detail. _____
5. A book of maps. _____

Q4. Describe the different colours used in a map.

Q5. Why are directions important? What are cardinal direction?

Q6. Think and answer.

Name the types of Map that are required in the following cases.

1. To identify the state that receive the heaviest rainfall in India map.

2. To locate the capital of Nepal and Sri Lanka

Q1. If 1 cm on the map shows 200 km on the ground use this scale to find out the unknown in the table:

Places	On ground(Km)	On Map(Cm)
Delhi to Jaipur	250	
Raigarh to Champa		$\frac{1}{2}$
Goa to Chennai	900	

CLASS – IV SCIENCE JULY ASSIGNMENT

Name : _____ Sec : _____

- I. GIVE REASONS:-
 - a. Incisors are also called cutting teeth.
 - b. Premolars are also called cheek teeth.
 - c. Milk teeth are also known as temporary teeth.
 - d. We should avoid taking too much of sweet eatables.
- II. DEFINE THE FOLLOWING TERMS:-
 - a. Tooth Decay
 - b. Enamel
 - c. Cavity
 - d. Wisdom Teeth
 - e. Digestion
 - f. Saliva
- III. DRAW, LABEL and COLOUR:-
 - a. Human Digestive System
 - b. Types of Teeth
 - c. Structure of a tooth.

Std- IV

July Monthly Assignment

Subject: English

Refer to your English Workbook Chapter 4, “Abraham Lincoln” and do as instructed in the book itself.

READING

A. Answer the following questions:

- 1. Who was Abraham Lincoln?**
- 2. What do you know about Lincoln's education?**
- 3. Why did people find it difficult to defeat Lincoln in wrestling?**
- 4. What did Lincoln do after defeating his opponent in a wrestling match once?**

B. Find words in the passage that means the same as :- (on page no. 24)

- 1. a large number of people gathered together**
- 2. a person that you are playing or fighting against in a game or competition**
- 3. a person who leads a group or a country**

GRAMMAR

A. Circle all the adjectives in these sentences and write their kinds - nos 1 to 6 (page no. 24)

SPELLING

Correctly spell the words in colour and rewrite the passage:(Page 26)

WORD- FAMILY (Page 23, last 3 lines)

Make a Word Family of 4 words with the word-

greatest

COMPETENCY BASED QUESTIONS

(To be done on page no. 27 of the workbook)

- 1. Circle the odd Degree of Comparison :-**
 - a. better b. busier c. less d. least**
- 2. Complete the pattern**

a) AZP123 ; BYQ244 ; CXR365;

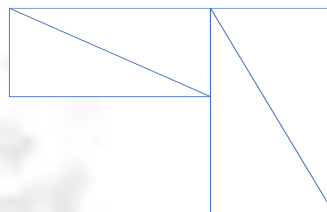
----- ; ----- ; -----

DELHI PUBLIC SCHOOL, DHANBAD

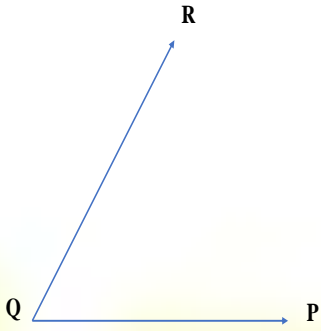
MATHS ASSIGNMENT, JULY – 2024

CLASS – IV

1. Draw a triangle and a quadrilateral and name it.
2. Using the ruler draw line segments of the following lengths:
 - a.) 9 cm
 - b.) 5.7 cm
3. Fill in the blanks:
 - a.) A _____ is an endless straight path that extends in both the directions.
 - b.) A _____ has only one end point.
 - c.) A _____ object has face, edge, and vertex.
 - d.) A _____ has a definite length.
 - e.) A _____ begins at a point called the initial point and extends only in one direction.
4. The radius of a circle is 3 cm. Find its diameter.
5. Name a solid with:
 - a.) No vertex
 - b.) 2 curved edges
6. Tick the correct option:
 - a.) If a circle has a diameter 8 cm, then its radius will be:
 - i. 4
 - ii. 5
 - iii. 3
 - b.) An octagon has _____ sides
 - i. 7
 - ii. 8
 - iii. 6
 - c.) Which solid shape has 12 edges?
 - i. Cone
 - ii. Cylinder
 - iii. Cube
 - d.) A pentagon has _____ sides.
 - i. 5
 - ii. 4
 - iii. 3
7. How many line segments are there in the figure?



8. Write the name of angles with their arms and vertices in the figure below:



Angle _____

Arms _____

Vertex _____

9. Write the name, number of faces, edges and vertices for each of the following:

a.)



Name _____

Face _____

Edges _____

Vertices _____

b.)



Name _____

Face _____

Edges _____

Vertices _____

10. Name a solid with:

a.) 2 Curved Edges

b.) No Vertex



Delhi Public School, Dhanbad
Monthly Assignment (July)
Sub: Computer
STD IV





Q1. Write the full forms of the following primitives

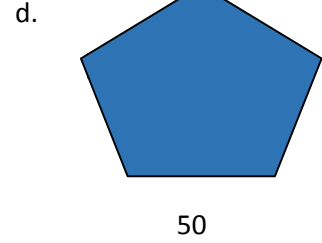

- a. PE _____
- b. PPT _____
- c. PU _____
- d. PD _____

40

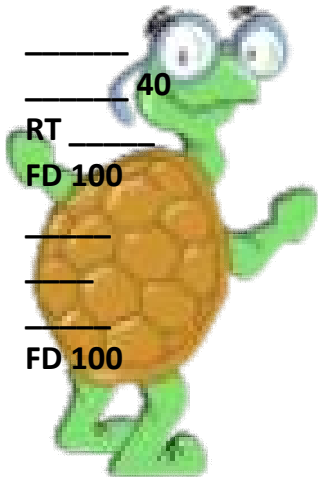
Q2. Use REPEAT command for the following figures:

a.  60 40

b.  80 40



Q3. Fill in the blanks with the commands to complete the given figure:



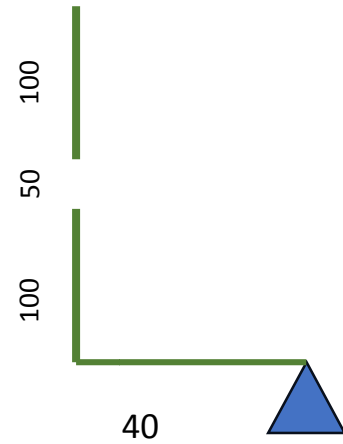
_____ 40

RT _____

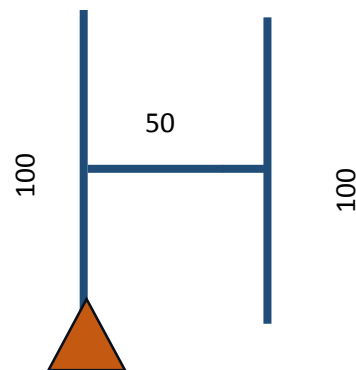
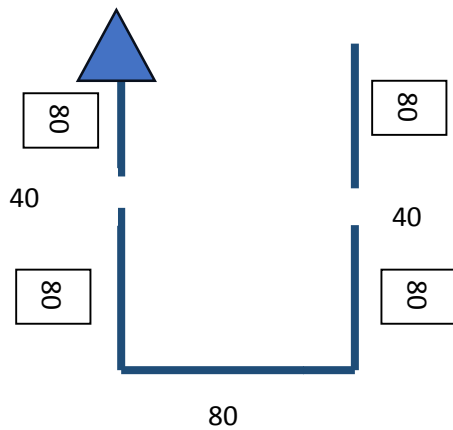
FD 100

FD 100

80



Q4. Explore the directions through LOGO Commands:



I. Name the following:

- 1) Changing the appearance of text.
- 2) Positioning of text on a page.
- 3) Option used to find a particular word or a sentence.
- 4) Option used to replace a particular word with a new one.
- 5) Useful way to determine the start of a new paragraph.

II. Write a short note on:

- a) Alignment
- b) Spelling and Grammar
- c) Undo and Redo

III. Complete the steps:**i) To correct spelling mistakes in the whole document:**

Step 1: Go to the _____ tab and click on the _____ command in the _____ group.

Step 2: Choose the correct option from the _____ list.

Step 3: Open the drop down arrow of the Suggestion and select _____ option to correct spelling of all misspelled words in the entire document.

ii) To indent text:

Step 1: _____ the text to be indented.

Step 2: Click on the _____ tab.

Step 3: Specify the _____ in the _____ group.

III. Draw the following icons:

- | | |
|-------------------------|---------|
| a) Spelling and Grammar | d) Undo |
| b) Find | e) Redo |
| c) Replace | |

V. Complete the patterns given below:

1) 1 1 2 3 5 8 _____ _____

2) 1 4 9 16 _____ _____

VI. Answer the following:

- 1) How many shoes do 5 normal women wear?
- 2) Find the odd one out: 20, 40, 50, 80, 100

Std 4
Hindi - July Assignment

Name:

Sec:

1 निम्नलिखित मुहावरों के अर्थ लिखें।

- क)रंग जमाना
- ख)मुंह की खाना
- ग)पीठ थपथपाना
- घ)आंख लगाना

2 अनेक शब्दों के लिए एक शब्द लिखें।

- क)जो मिट्टी के बर्तन बनाते हो
- ख)जिसने शिक्षा प्राप्त न की हो
- ग) जो पढ़ाता हो
- घ)जो दूसरे देश का हो
- ङ)जो याद रखने योग्य हो

3 निम्नलिखित शब्दों के विलोम शब्द लिखें।

- क) मान
- ख)जीवन
- ग)मानव
- घ)उन्नति
- ङ) स्वाधीन

4 निम्नलिखित शब्दों के दो दो पर्यायवाची शब्द लिखें।

- क) बादल
- ख) नदी
- ग)मनुष्य
- घ)हाथी

5 कविता की पंक्तियां पूरी करें।

- क) देखो सूरज नित्य----- से
किरणों से-----
और चांद भी -----
शीतलता -----
- ख)नदियां भी-----
चाहे पी लो -----
और-----
हरे खेत-----

6 निम्नलिखित शब्दों से वाक्य बनाएं:

क) ईमानदारी:

ख) बाजार:

ग) चालक :

घ) प्रतीक्षा:

ङ) होशियारी:
