

Delhi Public School, Dhanbad

Computer Assignment (April 2025-26)

Name_____ Class 1 Sec_____ Roll no. _____

1.

Circle the correct option

Natural or man made?



NATURAL
MAN MADE



NATURAL
MAN MADE



NATURAL
MAN MADE



NATURAL
MAN MADE



NATURAL
MAN MADE



NATURAL
MAN MADE



NATURAL
MAN MADE



NATURAL
MAN MADE


2.

Natural and Man -made Materials

Directions: Sort the given natural and man-made materials into proper columns. Colour the objects also.

car	cat	lion	tree
ball	bug	pen	rock
desk	shirt	box	dog

Natural	Man-made



3.

Q: Write (N) for Natural Resources and (M) for Man-made things for the following pictures:



()



()



()



()



()



()



()











()



()

4. Tick (✓) the machines run on electricity

 <input type="checkbox"/> CAR	 <input type="checkbox"/> MIXER	 <input type="checkbox"/> TAPE RECORDER
 <input type="checkbox"/> AEROPLANE	 <input type="checkbox"/> FAN	 <input type="checkbox"/> SCOOTER
 <input type="checkbox"/> BUS	 <input type="checkbox"/> CAMERA	 <input type="checkbox"/> WASHING MACHINE

DELHI PUBLIC SCHOOL DHANBAD
ASSIGNMENT FOR THE MONTH OF APRIL 2025
SUB:-EVS

CLASS : I

NAME : _____

SEC : _____

I . Tick (✓) the odd one

- a. Air, water , food , cat.
- b. Sun, moon, earth, pencil.
- c. table, bed, cupboard, tree.
- d. Cow, lamp, man, deer.
- e. Bag, water, toy, clock.

II. State True or False :

- 1. Living things need air. _____
- 2. Non-living things grow. _____
- 3. Non-living things have life. _____
- 4. Table is a man-made thing. _____
- 5. Wood is a non-living thing. _____
- 6. Non-livings need air. _____
- 7. Natural things are found in nature. _____

III. Tick(✓) the correct option and fill in the blank :-

1. Birthday is the day when I was _____

(a)clapping

(b) born

(c) dancing

2. I study in a _____.

(a) Hotel

(b) school

(c) playground

3. I cut a cake on my _____.

(a) Birthday

(b) holiday

IV. Draw and name :-

YOUR FAVOURITE

FRUIT	TOY

V. Write about YOURSELF

(i) My name is _____.

(ii) I am _____ years old.

(iii) My birthday falls on _____.

(iv) My best friend is _____.

(v) I read in _____ school.

DELHI PUBLIC SCHOOL, DHANBAD

English Monthly Assignment (April) 2025-26

Name Class 1 Sec Roll no

Q.1. Match the Naming words to the correct picture:-




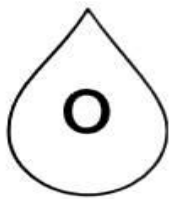



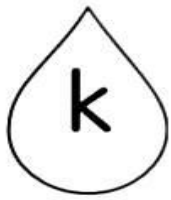
	—	Hospital
	—	Driver
	—	Swing
	—	Girl
	—	Flower
	—	Plate
	—	Horse
	—	Kangaroo
	—	Earth
	—	Bus

Q.2. See the picture and write down the naming words in the correct box.



Name of the Animals	Name of the Things	Name of the Persons	Name of the Place

Q.3. Colour the Vowels green and Colour the Consonants blue :-



Q.4. Look at the picture and answer the following questions.



1) Where are the Kids?

(i) Park		(ii) School
----------	--	-------------

2) How many kids can you spot in the picture?

(i) Nine		(ii) Ten
----------	--	----------



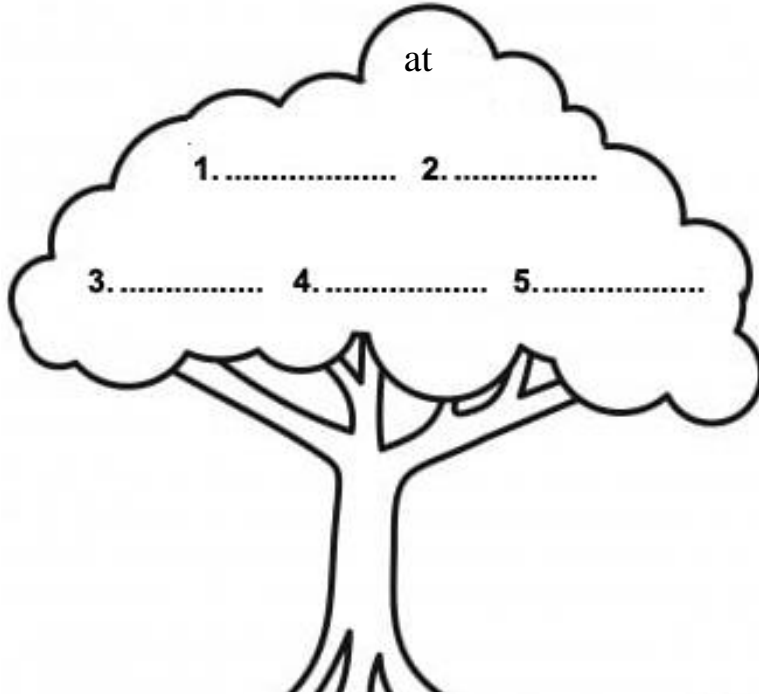
3) How many balloons can you spot in the picture?

(i) Three		(ii) Two
-----------	--	----------

4) Is there a butterfly in the picture?

(i) Yes		(ii) No
---------	--	---------

Q.5 Word Tree with 'At', In, Go




DELHI PUBLIC SCHOOL, DHANBAD
MATHS ASSIGNMENT FOR THE MONTH OF APRIL'2025

Name : _____ Class : 1 _____ Roll No : _____

Counting Caterpillars

Fill in the missing numbers on the caterpillars by counting from 1 to 20




1. Tick (✓) the smaller ball.

☐☐

2. Tick (✓) the bigger duck.

☐☐

3. Tick (✓) the bigger bear.

☐☐

4. Tick (✓) the bigger apple.

☐☐


5. Tick (✓) the smaller animal.

☐☐

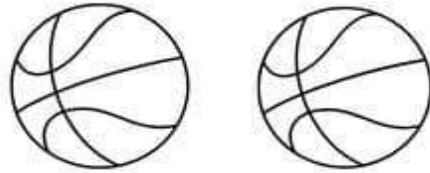
6. Tick (✓) the smaller zebra.

☐☐

Count pictures and circle the correct number.




4 8 5




5 2 1



2 6 3



7 2 3



5 2 4



7 1 0

Write the number that comes after:

- | | | |
|-------------|-------------|-------------|
| a. 4 _____ | c. 15 _____ | e. 10 _____ |
| b. 12 _____ | d. 9 _____ | f. 19 _____ |

Write the number that comes before:

- | | |
|-------------|-------------|
| a. _____ 8 | d. _____ 2 |
| b. _____ 11 | e. _____ 16 |
| c. _____ 19 | f. _____ 7 |

Write the number that comes between:

- a. 8 _____ 10
b. 13 _____ 15
c. 10 _____ 12

Circle the smallest number:

- a. 17 , 15 , 20 , 11
b. 5 , 9 , 8 , 6

Circle the greatest number:

- a. 12 , 16 , 19 , 15
b. 8 , 7 , 10 , 5

DELHI PUBLIC SCHOOL, DHANBAD

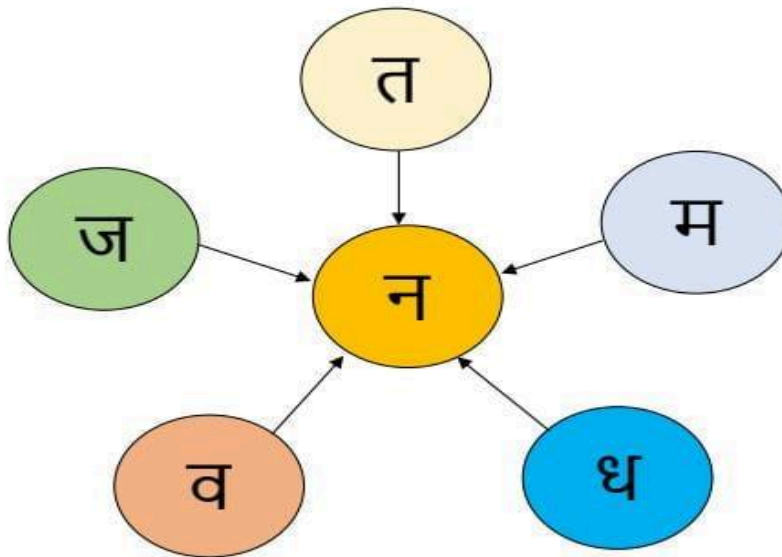
Hindi Monthly Assignment (April'2025-26)

Name : _____ Class/Sec : 1 _____

प्र.1) वर्णमाला पूरी कीजिए -

क			घ	ङ
		ज	झ	
ट		ड		
त	थ			न
प		ब		
	र		व	श
	स		क्ष	
ज़				

प्र.2) नीचे दिए गए वर्णों में 'न' शब्द जोड़कर नए शब्द बनाइए -



1. तन

2.

3.

4.

5.

प्र.3) चित्रों के नाम लिखो -
















प्र.4) सही उत्तर पर गोला लगाइए -



पढ़ना / सुनना



देखना / लिखना



सुनना / पढ़ना



बोलना / लिखना



लिखना / देखना

प्र.5) मिलान करो -

क + प

ब + स

र + थ

घ + र



प्र.6) दिए गए वर्णों को जोड़कर लिखो -

ग + ज =

घ + र =

च + ल =

छ + त =

ज + ग =

श + क =

स + च =

ह + ल =

द + स =

ध + न =

न + ल =

प + त्र =

फ + ल =

य + ज्ञ =

र + थ =

व + न =