

CLASS III

1. Fill in the blanks :-

- a) Plants , animals and human beings are_____ things.
- b) Food gives us _____
- c) Bicycle is a _____ thing .
- d) Plants breathe through _____.
- e) Leaves are the _____ of the plant
- f) Flowers turn into _____.

2. Name them :-

- a) Two main parts of a plant _____,

- b) Two types of roots _____,

- c) Two plants with soft stem _____,

- d) Two plants with weak stem _____,

- e) Two stems that grow below the soil _____,

- f) Two fruits with many seeds._____,

3. Answer the following questions :-

- a) What are the main functions of a stem ?
- b) How are roots of a plant different from the shoot ?
- c) How do plants make their food ?
- d) How do different living things move ?

4. Draw, colour and name :-

- a) A natural non – living things
- b) Parts of a leaf
- c) Parts of a plant

5. Learn the given quotation –

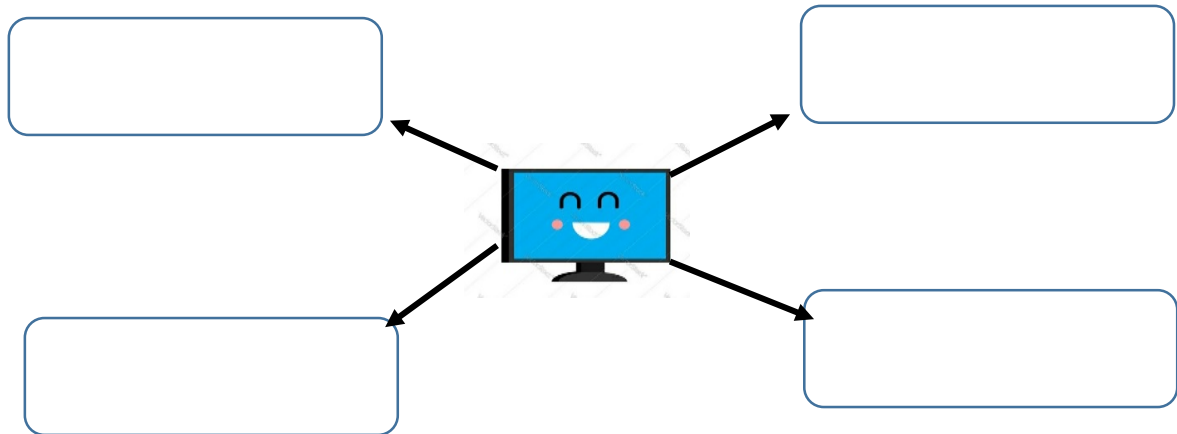
“Be a part of solution, Not a part of pollution “

DELHI PUBLIC SCHOOL, DHANBAD
MONTHLY ASSIGNMENT (April 2025)


Std 3

Name _____ **Sec** _____ **Roll No.** _____

Q1 How people who use computers for long hours are harmfully affected:-



Q2 Complete IPO Cycle related to Printing a Document.



Q3 Write any three Advantages of Computer.

I) _____

II) _____

III) _____

Q4 Write any three disadvantages of Computer.

I) _____

II) _____

III) _____

Q5 Fill the Role of the following

Device	IPO ROLE
1. Keyboard	___Input___
2. CPU	_____
3. Monitor	_____

4. Mouse

5. Printer

6. Webcam

Q6 Fill in the blanks:-

1. _____ is used to give instructions to the computer. (Input/ Output)

2. _____ is where all the processing happens. (CPU / Printer)

3. _____ shows result on the screen. (Monitor / Keyboard)

4. _____ is the example of an input device. (Printer / Mouse)

5. The full form of IPO is _____.

(Input – process – output / Input – Program –Output)

6. _____ is a device that gives printed output. (Printer / Scanner)

7. _____ is the brain of the computer.


8. _____ is used to hear sounds from the computer.

(Speaker / Scanner)

9. The device used to scan pictures into the computer is called _____.

(Scanner / Printer)

Q7 Draw any one Input and Output device and Label it.



प्रश्न 1)-अपठित गद्यांश।

रहीम का पूरा नाम था- अब्दुल रहीम। उनके पिता बैरम खान तुर्किस्तान से आए थे और बादशाह अकबर के संरक्षक थे। पिता की मृत्यु के समय रहीम 5 वर्ष के थे। अकबर ने उनके पालन पोषण की व्यवस्था की। 19 वर्ष की आयु में रहीम ने गुजरात पर विजय प्राप्त की और सूबेदार नियुक्त हुए। प्रसन्न होकर अकबर ने उन्हें अपने नवरत्नों में स्थान दिया। वे अरबी, फारसी और संस्कृत के बहुत बड़े विद्वान थे। उन्होंने ब्रज और अवधि में काव्य रचना की। रहीम ने अपने अनुभव के आधार पर दोहों के माध्यम से ज्ञान की बातें बताईं।

नीचे दिए गए प्रश्नों के उत्तर गद्यांश में से ढूंढ कर लिखें।

- १) रहीम का पूरा नाम क्या था?
- २) पिता के मृत्यु के समय रहीम कितने वर्ष के थे?
- ३) रहीम ने किस भाषा में काव्य- रचना की?
- ४) रहीम के पिता का नाम क्या था?

प्रश्न 2) वाक्य प्रयोग करें।

- १) कुआं -
- २) रुपए -
- ३) शिक्षक-
- ४) मेहनत -
- ५) कमाई -

प्रश्न 3) लिंग बदले।

- १) राजा-
- २) भाई -
- ३) बच्चा -
- ४) पति -

प्रश्न 4) दिए गए भाषाओं के लिपियों के नाम लिखें।

- १) हिंदी -
- २) पंजाबी -
- ३) अंग्रेजी -
- ४) बांग्ला -
- ५) उर्दू -

प्रश्न 5) योग्यता के आधार पर भिन्न शब्दों को छांटें।

- १) कुत्ता गाय बकरी भैंस।
- २) लूडो क्रिकेट कैरम शतरंज
- ३) पंजाबी मराठी राजस्थानी देवनागरी
- ४) नाना नानी दादी चाची।

Delhi Public School
Monthly Assignment Maths
Class - III

1) Fill in the blanks:

- (a) I am the smallest 4 digit number = _____
- (b) The place value of 7 in 1721 is _____
- (c) Four digit numbers have thousand hundred tens and _____
- (d) The standard form of $3000 + 200 + 40 + 2$ is _____
- (e) What comes just before 1001 _____

(2) Solve the following :

- (a) $1958 + 2100$ (b) $7502 - 2934$

3) Write the following numbers in words :

- (a) 9754 (b) 60876

4) Write the numerals of the following :

- (a) four thousand twenty two
- (b) six thousand five hundred fifty five
- (c) Write the missing numbers

1246, _____, 1256, _____, 1266, _____.

5) Competency based questions:

- (a) Which of the following is smallest?
 - (i) 9091 (ii) 9902 (iii) 9993
- (b) Anita has Rs 1038 with her . How would she write 1038 in words ?
- (c) What comes just after 1999?

(d) I am one less than 1100 ?


DELHI PUBLIC SCHOOL, DHANBAD

STD – 3. MONTHLY ASSIGNMENT, APRIL.

SUBJECT – ENGLISH

PICTURE COMPOSITION

Look at the picture carefully and complete the sentences given below:-



Q1. Fill in the blanks:-

1. This is a scene of a _____.
2. The children are _____.
3. A girl is making a _____.
4. A boy is reading a _____.
5. Two boys are playing with a _____.

Q2. Which scene is this ?

Ans. _____

Q3. How many children are there in the park?

Ans. _____.

Q4. How many children are reading books?

Ans. _____.

Q5. Find out the common nouns from the picture and complete the blanks:-

_____, _____, _____, _____, _____

Q6. Write the Proper Nouns of the following Common Nouns:-

boy _____

school _____

monument _____

language _____

river _____

Q7. Competency Based Questions :

a) If pen: poet then needle: _____

i) Paper ii) thread iii) machine

b) If flowers are for pot then garbage for _____.

i). vase ii) dustbin. iii) garden

c) Tick the odd one:

1. i) monument ii) Delhi iii) tiger iv) book

2. i) meet ii) paper. iii) sheet. iv) happy

Q8. Complete pg no. 10. Unjumble the letters, pg no. 11 Fill in the blanks with collective nouns, 2. Complete the sentences pg no. 12 of English Workbook.
