

DELHI PUBLIC SCHOOL, DHANBAD

MATHS ASSIGNMENT (FEBRUARY) 2025-2026

NAME _____ CLASS – 2 _____ ROLL NO. _____



Read the calendar and answer the following questions :-

- 1) How many days are in SEPTEMBER 2026? _____
- 2) How many FRIDAYS are in SEPTEMBER 2026? _____
- 3) How many THURSDAYS are in SEPTEMBER 2026? _____
- 4) What is the day on SEPTEMBER 21? _____
- 5) What is the day on SEPTEMBER 27? _____
- 6) What is the date of second MONDAY? _____
- 7) What is the date of first FRIDAY? _____
- 8) What is the date of third THURSDAY? _____

MATCH :-

☐☐

11:45

☐☐

It's half past eleven.

☐☐

11:30

☐☐

It's a quarter to twelve.

☐☐

04:30

☐☐

It's two o'clock.

☐☐

02:00

☐☐

It's seven o'clock.

☐☐

01:45

☐☐

It's a quarter past five.

☐☐

05:15

☐☐

It's half past four.

☐☐

07:00

☐☐

It's a quarter to two.

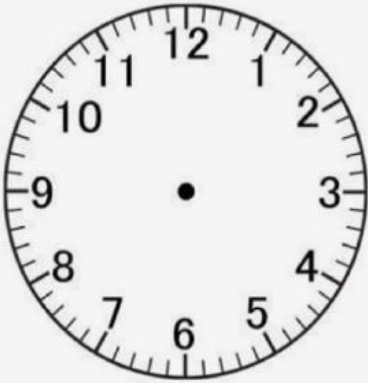
☐☐

09:15

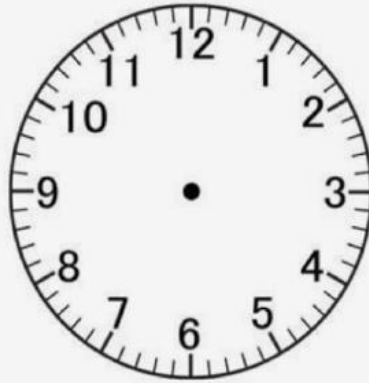
☐☐

It's a quarter past nine.

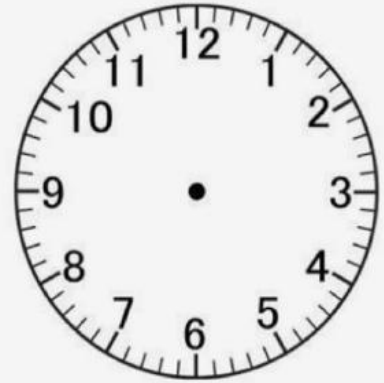
Draw the time shown on each clock.



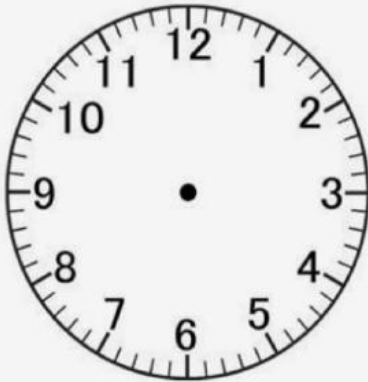
10:00



2:00



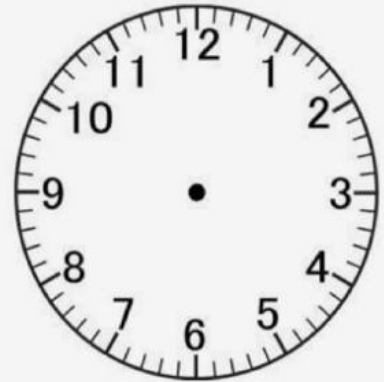
9:00



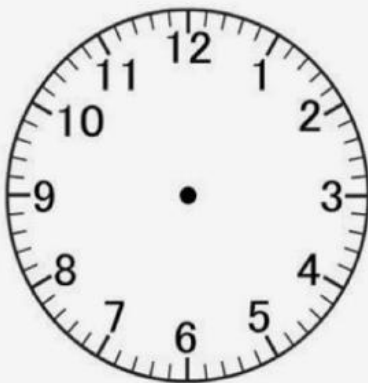
5:00



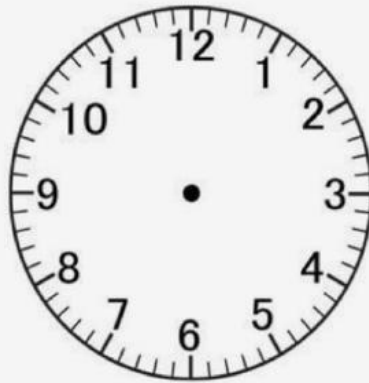
3:00



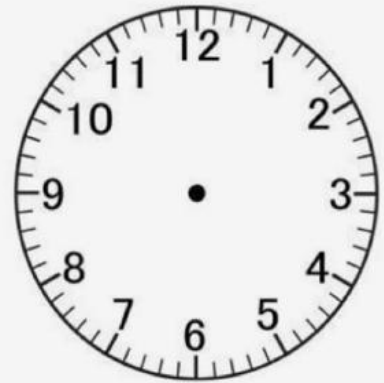
7:00



11:00



6:00



1:00

DELHI PUBLIC SCHOOL, DHANBAD

CLASS – 2, EVS ASSIGNMENT

February -2026

NAME:

SEC:

ROLL NO:

Q1. Name the space explorers:

- a) First astronaut to step on the Moon _____.
- b) First Indian to go into space _____.
- c) First Indian woman to go into space _____.
- d) Indo - American astronaut who completed the longest space flight
_____.

Q2. Tick the correct option:

1. We live on :

- a) the Earth b) the Sun c) the Moon

2. On land there are :

- a) mountains b) forests c) both of these

3. The Moon and the stars cannot be seen during :

- a) the day b) the night c) both of these

4. Clouds move with :

- a) the Sun b) the wind c) the sky

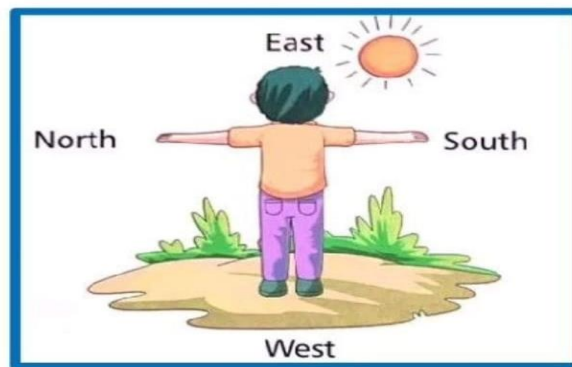
Q3. Write True or False :

- 1. The Sun changes its shape - _____.
- 2. The Moon is hotter than Sun - _____.
- 3. We live on the Moon- _____.

4.The Moon looks different on different days- _____.

5. The stars shine at night- _____.

Q4. Look at the picture and write the answer in one word :



1. How many directions are there in total?	
2. Boy is looking in which direction?	
3. Sun rises from which direction?	
4. Which direction is opposite East?	
5. Which direction is opposite North?	















Separate the given things into day sky and night sky.

rainbow, stars, sun, moon, clouds, kites, aeroplanes,
hot air balloon, birds, black sky.

Day sky

Night sky

Q5. Make your daily routine . Fill in the blanks. Draw the hands of the clock for each time.

	I wake up at <input type="text"/> : <input type="text"/> am / pm	
	I eat breakfast at <input type="text"/> : <input type="text"/> am / pm	
	I go to school at <input type="text"/> : <input type="text"/> am / pm	
	I eat lunch at <input type="text"/> : <input type="text"/> am / pm	
	I play at <input type="text"/> : <input type="text"/> am / pm	
	I eat dinner at <input type="text"/> : <input type="text"/> am / pm	
	I go to bed at <input type="text"/> : <input type="text"/> am / pm	

Q6. In our country , which metropolitan city is in the :

- In the North _____
- In the South _____
- In the East _____
- In the West _____

Computer Monthly Assignment

Std II

1. Fill in the Blanks:-

1. There are around _____ keys on a standard keyboard.
2. The set of Number keys on the right hand side is called the _____.
3. The _____ is the blinking line on the screen.
4. _____ is the longest key on the keyboard.
5. The _____ key is used to type Capital letters.
6. The _____ key is always used in combination with other keys.
7. The _____ key is used to start a new line while typing.
8. A _____ mouse has a LED light under it.
9. Move the mouse while keeping the left button pressed is called _____ a mouse.
10. The _____ tool is use to apply special effects to the drawing.

II. Name some magic effects that do not work on the blank canvas.

b. Name the different actions that can be done by a mouse.

c. Name the twelve special keys of the keyboard.

d. Draw five symbol keys.


e. Draw three shapes of mouse pointer.

FROM mastering coding book:-

See page number 65 and make a paper robot with the help of card board or and hard paper and write five sentence what you want your Robot to do for you.



This is example.



Delhi public school, Dhanbad

ENGLISH ASSIGNMENT

FEBRUARY (2025-26)

Name _____ Class- 2__ Section____

1. Guess the correct word:-

a. Is unable to find :-.....

b. Laugh in a silly way :-.....

c. In all places :-.....

d. Something that is liked more than anything else :-.....

e. Covered completely in some materials :-.....

f. More than what is already there :-.....

2. Make sentences:-

a. Birthday :-
.....

b. Sweets :-
.....

c. Flowers :-
.....

d. Wind :-
.....

e .Cup :-
.....

3. Word Meaning:-

a. Pension :-

b. Clues :-

c. Gossips :-

d Bolt :-

e. Gulp :-

4. Underline the adverb in the following sentences :

a. We must eat our food slowly.

b. The woman spoke loudly.

c. The servant is paid monthly.

d. I can do that easily.

e. The elephant walked slowly.

f. The boys go to school regularly.

g. You must go to bed early.

h. The peacock danced beautifully.

i. You have answered the questions correctly.

Delhi Public School, Dhanbad

Hindi Assignment (Jan'26)

Name -

Class/Sec -

1. निम्नलिखित प्रश्नों के उत्तर एक शब्द में लिखिए।

- क. आम के पेड़ के पड़ोस में कौन-सा पेड़ था?
- ख. नीम का पेड़ कैसा था?
- ग. आम का पेड़ कहाँ था?
- घ. छत्ते पर क्या जमा था?
- ङ. नीम का पेड़ काटने कितने आदमी आए थे?

2. दिए गए शब्दों के समानार्थक शब्द लिखिए।

- क. शहर -
- ख. पेड़ -
- ग. काल -
- घ. घमंड -
- ङ. मदद -

3. दिए गए शब्द समूह के लिए एक शब्द लिखिए।

- क. जो सेना में काम करता हो -
- ख. जो खेती करता हो -
- ग. जो चित्र बनाते हो -
- घ. जो सोने के गहने बनाते हो -
- ङ. जो कपड़े धोता हो -

4. दिए गए वर्ण-विच्छेद से शब्द बनाइए।

क. आ+द्+अ+म्+ई=.....

ख. छ्+अ+त्+त्+आ=.....

ग. त्+उ+म्+ह्+आ+र्+ई=.....

घ. म्+अ+ज्+अ+द्+ऊ+र्+अ=.....

5. योग्यता पर आधारित प्रश्न हल कीजिए। (सोचो और लिखो)

(नम-मन)

क. राही -

ख. नाच -

ग. नदी -

घ. राखी -

ङ. सब -