

**Delhi Public School, Dhanbad**

**STD – V**

**Science Assignment**

**A. DEFINE THE FOLLOWING TERMS:-**

1. Reflex Action
2. Pupil
3. Iris
4. Connecting nerves
5. Olfactory Nerve
6. Neuron

**B. DIFFERENTIATE BETWEEN THE FOLLOWING:-**

1. Sensory Nerves and Motor Nerves
2. Cerebrum and Cerebellum
3. Medulla and Spinal Cord
4. Retina and Cornea

**C. GIVE REASONS:-**

1. Nervous System is known as the Body's Communication System.
2. We immediately withdraw our hands on touching a very hot object.
3. Medulla is also known as the brain stem.

**D. DRAW AND THE GIVEN DIAGRAMS AND WRITE THE FUNCTIONS OF THE PARTS LABELLED:-**

1. Structure of a human brain
2. Internal Structure of a human eye.

English Monthly Assignment ( November)

Std V

Refer to the New Buzzword Workbook chapter 6 “ The Test“ and do as instructed. ( All work to be done in the workbook itself)

**READING**

**A. Complete these sentences.**

**Nos. 1 to 4 on page 37**

**B. Find words in the passage which means the same as-**

- 1. Close attention**
- 2. Far off**
- 3. Alike**

**GRAMMAR**

**A. Tick the correct words to complete these sentences. Nos. 1 to 6 on page 38**

**B. Rewrite these sentences using the tense forms given in the brackets. Nos.**

**1,2,3,5 & 6**

**VOCABULARY**

**Solve this crossword puzzle with the help of the given clues. On page 39**

**SPELLINGS**

**Find five words with a silent n Or w in the grid. Then, write the words beside their meanings. Nos. 1 to 5 on page 41**

**COMPETENCE BASED QUESTIONS**

**1. Complete the pattern**

**CMM, EOO, GQQ, \_\_\_\_\_ , KUU**

**2. In a certain code, PRODUCTION is written as QQPCVEUHPMT. How is**

**ORIENTATION written in that code?**

- A) PQJDOVBSJNO**
- B) PSJFOVSBJNO**
- C) POJDOUBUJPO**
- D) NSHFMVBSJNO**

**3. I am not alive, but I grow, I don't have lungs, but I need air. Who am I?**

**A) mountains**

**B) rivers**

**C) balloons**










XX

## MATHS ASSIGNMENT

- 1) Write first five multiples of 23.
- 2) Which one is divisible by 4 or 8 :- (a) 90432      (b) 796504
- 3) Is 39886 divisible by 7.
- 4) Is 52680 divisible by both 5 or 10 ?
- 5) Write all the prime factors of 252 ?
- 6) Find the HCF of (a) 66 and 198      (b) 16 and 36
- 7) Find the HCF by prime factorization method :-  
(a) 40, 80 and 96      (b) 54 and 114
- 8) find the HCF by long division method :- (a) 549 and 792      (b) 105 and 230
- 9) Find the LCM by prime factorization method :- 75 and 125
- 10) Find the LCM by short division method :- 108, 120 and 132
- 11) Find the greatest number that divides 47, 77 and 89 leaving the remainder 5 in each case.
- 12) A church has 3 bells. One rings after every 3 minutes, the other after every 4 minutes and the third one after every 5 minute. If they will ring together at 08:40 a.m. at what time will they ring together again?




**Q3. Identify the icons:**

- a. 
- b. 
- c. 
- d. 
- e. 
- f. 
- g. 
- h. 
- i. 

**Q4. Answer the following questions:**

- a. What do you understand by the term 'Google Apps'?
- b. Write a short note on the following:  
(i)CC (ii)BCC (iii)Sign out (iv)Google Drive
- c. Write the steps to attach a file to your e-mail.
- d. How will you set up a Gmail account?
- e. Draw and label the various parts of the New message window.
- f. Draw the icons of the following:  
(i)Settings (ii)Attach files (iii)Insert emoji (iv)Compose (v)Inbox (vi)Sent





## Recapitulation

Q1. Find the binary number that is


- a. 1 more than 10011
- b. 2 more than 10010
- c. 1 more than 1000100

Q2. Find the successor of the following (in binary)

- 1.100
- 2.101
- 3.111
- 4.10

Q3. Express the decimal number 4 as a binary number

Q4. Which binary number comes after 111?



## Social Studies Monthly Assignment

### Standard 5

Q1 Fill in the blanks:

- i. People during the Indus valley civilization were fond of\_\_\_\_\_.
- ii. The Indus valley people worshipped Lord\_\_\_\_\_.
- iii. Mohenjo Daro means \_\_\_\_\_.
- iv. The\_\_\_\_\_ tree was worshipped by Harappans.
- v. The engraved rocks found in the \_\_\_\_\_ caves recently in \_\_\_\_\_ district of Kerala indicate Harappan culture.
- vi. Harappan and Mohenjo Daro sites are located in the present day\_\_\_\_\_.
- vii. Indus Valley Civilization flourished from \_\_\_\_\_ to\_\_\_\_\_.
- viii. The \_\_\_\_\_ was the main part of the city.
- ix. Streets were laid out in \_\_\_\_\_ cutting each other at\_\_\_\_\_.
- x. The \_\_\_\_\_ seals of Indus Valley Civilization display the script.
- xi. Harappan had trade relationships with \_\_\_\_\_ and \_\_\_\_\_.
- xii. \_\_\_\_\_ was a dock for the ships to anchor.
- xiii. Mother Teresa was born in \_\_\_\_\_, \_\_\_\_\_ in the year \_\_\_\_\_.
- xiv. Bachendri Pal is the chief \_\_\_\_\_ in \_\_\_\_\_ company.
- xv. Rabindranath was born to \_\_\_\_\_ and \_\_\_\_\_ in the year \_\_\_\_\_.
- xvi. Abode of peace is also known as \_\_\_\_\_.
- xvii. Ashokan era was known as \_\_\_\_\_.
- xviii. Mira died in \_\_\_\_\_.
- xix. Mirabai songs are called \_\_\_\_\_.
- xx. Tagore was called \_\_\_\_\_.

Q2. Answer the following questions:

- i. Who was Mirabai?
- ii. Write a short note on Bachendri Pal.
- iii. Who conferred the title " Blessed Teresa of Calcutta" on whom and why?





**Delhi Public School, Dhanbad**  
**Monthly Assignment (Oct)**  
**Sub: AI**  
**STD V**



**Q1. Fill in the blanks:**

- a. \_\_\_\_\_ is a powerful slide show presentation program designed by Microsoft.
- b. A \_\_\_\_\_ is a single screen of a presentation and every presentation is composed of several slides.
- c. A PowerPoint \_\_\_\_\_ is a pattern or blueprint of a slide or group of slides.
- d. \_\_\_\_\_ can contain layouts, colors, fonts, effects, background styles and even content.
- e. \_\_\_\_\_ are used to control the pace of your presentation and create a better flow between slides.
- f. If you want to animate the objects present in the slide, then use \_\_\_\_\_ category.
- g. A \_\_\_\_\_ is a set of formatting options that are applied to an entire presentation
- h. \_\_\_\_\_ view occupies the full computer screen, exactly the way your presentation will look on a big screen when your audience sees.

**Q2. Write the key combinations with the help of clue provided:**

**CTRL+D   CTRL+N   CTRL+A   CTRL+SHIFT+>   CTRL+SHIFT+<   ESC**

- a. To select all objects \_\_\_\_\_
- b. To create a duplicate slide \_\_\_\_\_
- c. To open a new blank presentation \_\_\_\_\_
- d. To increase a font size \_\_\_\_\_
- e. To decrease a font size \_\_\_\_\_
- f. To start a Slide Show \_\_\_\_\_
- f. To stop a Slide Show \_\_\_\_\_

**Q3. Create a presentation on 'Energy Saving' using theme customization and add pictures related to the topic. Paste 2-3 pictures of the slide.**

SANSKRIT ASSIGNMENT 2024  
SANSKRIT SUB CLASS - V, NOV.

1. शब्दार्थान् लिखत

1. स्तः = । उद्याने = । वने = । तडागे = ।  
गगने = । सारिके = । कन्दुकम् = ।

2. सर्वनाम-शब्देन वाक्यं पूरयत।

[तौ, ते (स्त्री), ते (नपुं), इमौ, इमे (स्त्री), इमे (नपुं) स्तौ, स्त्रे (स्त्री), इमौ]

1. .... पिपीलिके चलतः। .... खरौ चरतः। .... मयूरी मृत्यतः।  
... वायसौ वदतः। फले पततः। .... वल्गुः स्तः।  
... पुस्तके स्तः। .... चटके कूजतः। .... माले स्तः।

3. अनुवादं कुरुत।

1. दो मोर नाचते हैं। 2. दो घोड़े दौड़ते हैं।  
3. वे दो प्यर हैं। 4. वे दो घाते हैं।  
5. ये दो चश्मे हैं।

4. मैलनं कुरुत।

स्तम्भ क

स्तम्भ ख

खादतः

दो लिखते हैं।

हसतः

दो गिरते हैं।

गच्छतः

दो खाते हैं।

लिखतः

दो जाते हैं।

पततः

दो हंसते हैं।