

DELHI PUBLIC SCHOOL DHANBAD

Monthly Assignment (December)

Class-Prep

Name _____ Section _____

Write He / She in the boxes given below :-









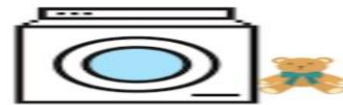








Circle the images where teddy is on the objects



Look at the pictures and circle the correct option :-



he she it



he she it



he she it



he she it



he she it



he she it



he she it



he she it



he she it



he she it



he she it



he she it

Colour the balls with the given colour codes :-



know






things



before



each



DELHI PUBLIC SCHOOL

Hindi Monthly Assignment (December)

Name _____ sec _____

1.

दिए गए शब्द सही मात्रा के नीचे लिखें

औजार कोमल सोना चौकोर रौनक
पौधा गोकुल नौकर मोर दोपहर

ओ की मात्रा	औ की मात्रा

2.

दिए गए विपरीत शब्दों के जोड़े मिलाए:

दिन

आगे

नीचे

सरदी

मोटा

रात

सोना

बैठना

उठना

जागना

पीछे

ऊपर

गरमी

पतला

3.

- सही शब्द चुनकर खाली स्थान में रखिए ।

		चौकीदार
		नौका
		फौजी
		औरत
		पौधा
		नौकरानी
		औषधि

4.

- नीचे दिए गए चित्रों देखकर सही शब्द से मिलाइए -

गोभी टोकरी घोड़ा कोयल रोटी











5. मात्रा लगाएँ :-

	क वा
	न का
	हथ डा
	त लिया
	द ड़
	प धा

6. मिलान करें :-



नैन



पैर



सैनिक



बैल



पैसा

7. सही शब्द पर गोला लगाएँ :-

	बेगूण	बेगन	बैगन
	नेया	नैया	नया
	रेकट	रैकट	रैकेट
	भैंस	भैंश	भेंस
	बेल	वैल	बैल
	पैर	पेर	पर

8. मिलान करें :-

	लौंग
	गौरेया
	भौरा
	पकौड़ा
	गौमाता
	भौकना

Delhi Public School, Dhanbad

Maths Monthly Assignment(December)

Class – Prep

Name..... Sec.....

1) Subtract the following :-

$\begin{array}{r} 2 \\ - 1 \\ \hline \end{array}$	$\begin{array}{r} 3 \\ - 2 \\ \hline \end{array}$	$\begin{array}{r} 4 \\ - 1 \\ \hline \end{array}$	$\begin{array}{r} 5 \\ - 2 \\ \hline \end{array}$
---	---	---	---

$\begin{array}{r} 6 \\ - 3 \\ \hline \end{array}$	$\begin{array}{r} 7 \\ - 6 \\ \hline \end{array}$	$\begin{array}{r} 4 \\ - 2 \\ \hline \end{array}$	$\begin{array}{r} 6 \\ - 5 \\ \hline \end{array}$
---	---	---	---

$\begin{array}{r} 8 \\ - 2 \\ \hline \end{array}$	$\begin{array}{r} 2 \\ - 0 \\ \hline \end{array}$	$\begin{array}{r} 9 \\ - 9 \\ \hline \end{array}$	$\begin{array}{r} 5 \\ - 3 \\ \hline \end{array}$
---	---	---	---

2) Subtract by crossing picture.

 $6 - 3 = \square$

 $7 - 5 = \square$

 $6 - 4 = \square$

 $9 - 7 = \square$

 $10 - 4 = \square$

 $5 - 4 = \square$

3) Table of 7

7	×	1	=	_____
7	×	2	=	_____
7	×	3	=	_____
7	×	4	=	_____
7	×	5	=	_____
7	×	6	=	_____
7	×	7	=	_____
7	×	8	=	_____
7	×	9	=	_____
7	×	10	=	_____

4) Circle the correct answer

$7 \times 1 =$

6 8 7

$7 \times 6 =$

45 42 32

$7 \times 3 =$

18 21 14

$7 \times 7 =$

56 63 49

$7 \times 2 =$

14 16 18

$7 \times 10 =$

80 70 60

DELHI PUBLIC SCHOOL DHANBAD
MONTHLY ASSIGNMENT(December) 2023

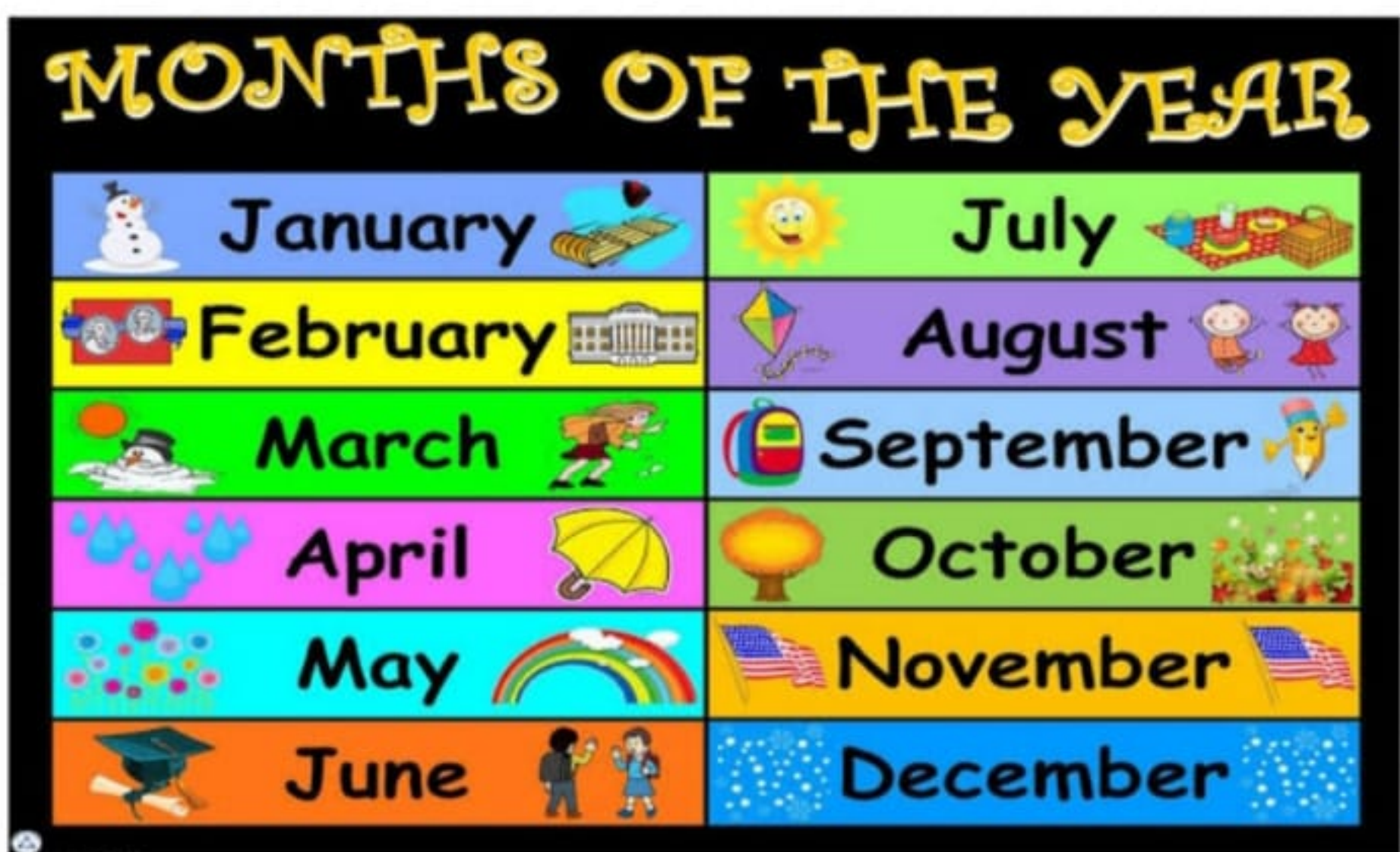
CONVERSATION

CLASS PREP

Name of The Months and Days

1. There are twelve months in a year.
2. There are 365 days in a year.
3. There are seven days in a week.
4. Sunday is the International holiday .

NAME OF MONTHS.



DAYS OF THE WEEK

