

Delhi Public School Dhanbad




January Assignment

Class-Nursery

Name-

Sec-

Match each animal to its young.



WRITE THE FIRST CAPITAL AND CURSIVE LETTER FOR THE GIVEN PICTURE











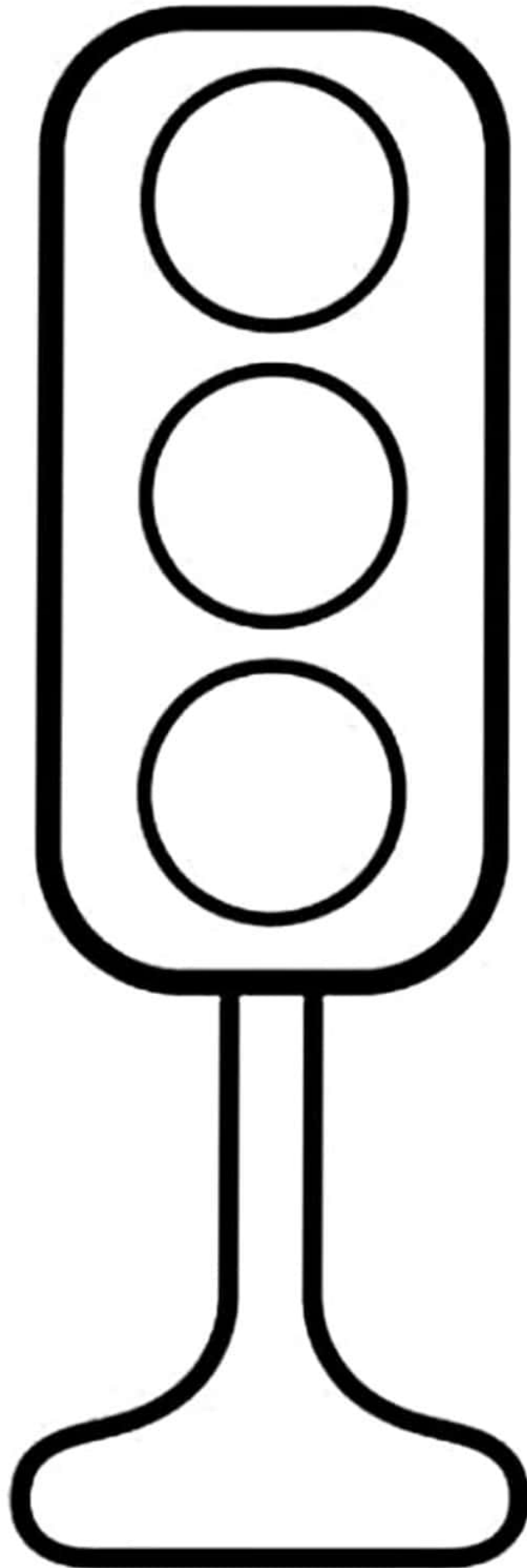








COLOUR THE TRAFFIC LIGHT



Color the pictures that have matching uppercase and lowercase letters.

D d



S s



L l



R r



Draw a line to match each vehicle to where you find them.



Delhi Public School, Dhanbad

Nursery Hindi Assignment '2024

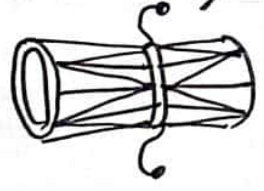
Name: _____

Sec: _____


JANUARY

1. चित्र पहचानें और लिखें:- (पहला अक्षर)





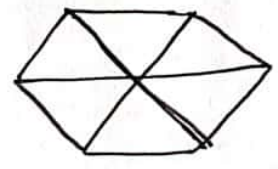









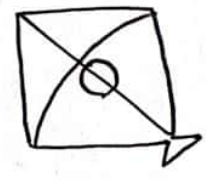
















2. खाली स्थान भरी :-

क ख — — —

च — — — क्ष — —

ट — — — ढ — —

त — — — ह — — न

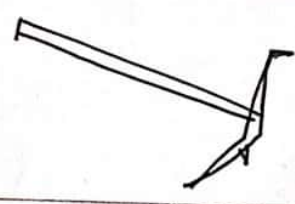
प — — — — — म

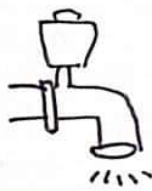
य — — — — — व — —

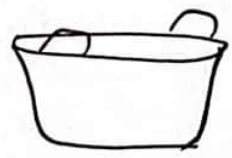
ष — — — क्ष — — श ।

3. चित्र देखकर दो अक्षर का शब्द लिखो :-

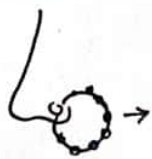



















चित्र देखकर दूँ अक्षर का शब्द लिखो:- (could)
















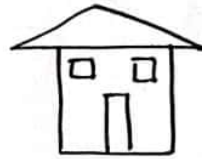


4.

जोड़े मिलाओ :-



नल



घर



जल



जग




फल



बस



हल



रस



Delhi Public School, Dhanbad

English Monthly Assignment (January)

Name _____ Class & Sec- Nursery/ _____

1. Write cursive *a-z*.










Write only 4 letters in each line.

Handwriting practice lines consisting of 15 sets of four horizontal lines (top, middle, bottom, and baseline) for writing cursive letters.

2. Read and underline the "at" words.

Pat is a fat cat.
Pat can see a rat.
The rat is fat like
Pat.
The fat rat sat
on a mat.
Pat sat on the rat.

3. Tick the correct word for each picture.

 bed led	 red fed	 wed web
 yen men	 pen hen	 ten den
 pet jet	 vet net	 met wet

4. Trace the dotted letters and write them in the empty boxes below.

of	oh	on	or	ox	ad	ah
----	----	----	----	----	----	----

of	oh	on	or	ox	ad	ah
----	----	----	----	----	----	----

--	--	--	--	--	--	--

--	--	--	--	--	--	--

am	an	as	at	ax	do	go
----	----	----	----	----	----	----

am	an	as	at	ax	do	go
----	----	----	----	----	----	----

--	--	--	--	--	--	--

--	--	--	--	--	--	--

if	in	is	it	un	up	us
----	----	----	----	----	----	----

if	in	is	it	un	up	us
----	----	----	----	----	----	----

--	--	--	--	--	--	--

--	--	--	--	--	--	--

Delhi Public School, Dhanbad.

Drawing assignment, (January)


Class:- Nursery.

Name:-

Sec:-

See, Draw and Colour it :-


G




H



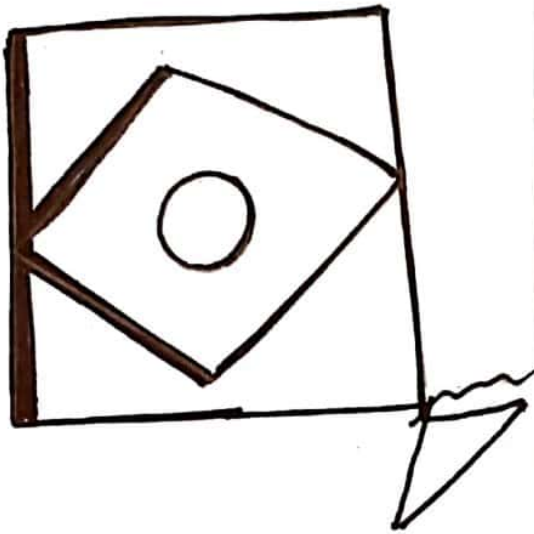
H




J



K



L



Delhi Public School, Dhanbad

Maths Assignment'24 (January)

Name: _____ Nursery/Sec: _____

Q1. Fill in the Missing Numbers: -

1		3				7		9	
	12		14		16		18		20
21	22		24				28		
		33			36		38		40
41	42		44	45		47		49	
51		53					58		60
	62		64		66	67		69	
	72		74	75		77	78		80
81		83		85	86				
	92		94		96		98		100

Q2. Complete the Series:—

73			76		
----	--	--	----	--	--

	25				29
--	----	--	--	--	----

62				66	
----	--	--	--	----	--

89			92		
----	--	--	----	--	--

		61			64
--	--	----	--	--	----

16		18			21
----	--	----	--	--	----

Q3. What comes after:—

97	
----	--

25	
----	--

22	
----	--

51	
----	--

37	
----	--

10	
----	--

80	
----	--

54	
----	--

79	
----	--

59	
----	--

16	
----	--

17	
----	--

6	
---	--

19	
----	--

3	
---	--

15	
----	--

95	
----	--

21	
----	--

47	
----	--

53	
----	--

35	
----	--

31	
----	--

57	
----	--

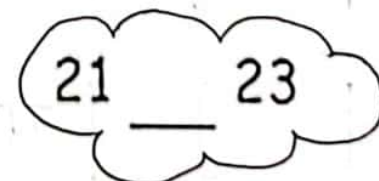
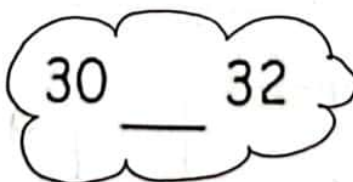
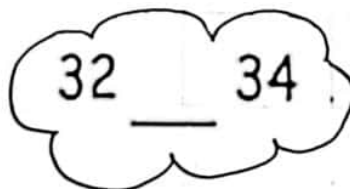
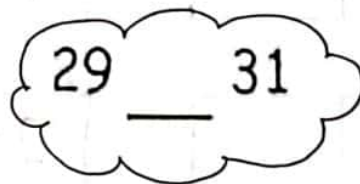
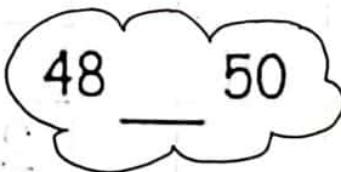


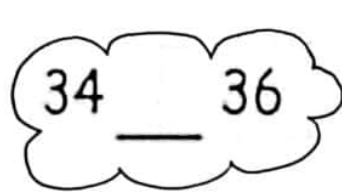

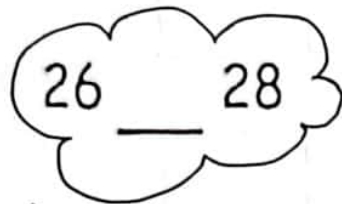

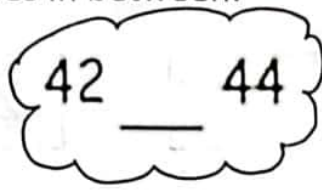

23	
----	--

89	
----	--

76	
----	--

98	
----	--

Q4. What number comes in between:—



Q5. Compare the number. Write the correct symbol. Less than (<), Greater than (>), or equal to(=): —

$3 < 8$

$4 \bigcirc 5$

$7 \bigcirc 8$

$4 \bigcirc 4$

$5 \bigcirc 4$

$9 \bigcirc 6$

$6 \bigcirc 7$

$5 \bigcirc 5$

$7 \bigcirc 5$

$2 \bigcirc 2$

$3 \bigcirc 2$

$9 \bigcirc 9$

$1 \bigcirc 5$

$1 \bigcirc 1$

$6 \bigcirc 6$

$6 \bigcirc 5$

$3 \bigcirc 9$


$6 \bigcirc 2$


$9 \bigcirc 8$

$8 \bigcirc 8$


$9 \bigcirc 4$


Q6. Count and circle the right numbers:—


	11 12 13 14
---	-------------

	12 13 14 15
---	-------------

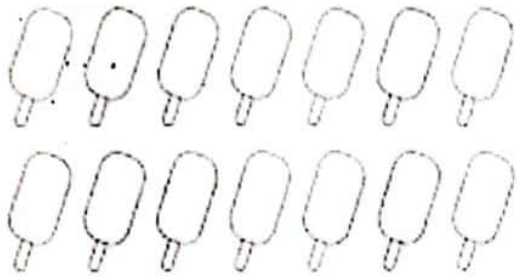
	11 12 13 14
---	-------------

	12 13 14 15
---	-------------

	11 12 13 14
---	-------------

	12 13 14 15
---	-------------

Q7. Count the objects and color the correct number: —




17 13 14



16 15 18




7 9 6



6 7 8



7 6 5



10 9 11