

Delhi Public School Dhanbad

EVS Assignment. January. 2025. Class. – 2.

Name - _____ . Class / Sec - _____ .

1)Write True (T) or Not True (NT) for the given statements:-

- a)The length of the shadow is always the same. _____ .
- b)Sun is a ball of fire and gases. _____ .
- c)Moon has no light of its own . _____ .
- d)The different shapes of moon are called the phases of moon. _____ .
- e)A full moon is nine times brighter than a half moon. _____ .

2)Name the space explorers:-

- a)First astronaut to step on the moon _____ .
- b) First Indian who landed on the moon _____ .
- c) First Indian woman to go into space _____ .
- d) Indo American astronaut who completed the longest space flight _____ .

3.Choose and write correct name for different phases of moon:-

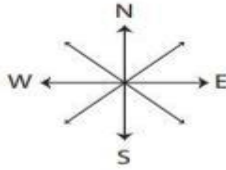














First quarter	Full Moon	Third Quarter	Gibbous	Crescent
---------------	-----------	---------------	---------	----------

4. Write the name of directions:-




Directions

Observe the direction of each arrow and write north, east, south, or west as appropriate.



1) 	2) 	3) 	4) 
5) 	6) 	7) 	8) 
9) 	10) 	11) 	12) 

5. Complete the name of months of the following seasons:-

<p>Write the months. SPRING M__h A_r__ M_y</p> 	<p>Write the months. SUMMER J_n_ J__y A_g__</p> 
<p>Write the months. AUTUMN S__t__b__ O_t__ N__m__</p> 	<p>Write the months. WINTER D_c__ J__r_ F__u__</p> 

Delhi Public School, Dhanbad

Hindi Assignment (January 2025)

Name -

Class/Sec -

1. निम्नलिखित प्रश्नों के उत्तर एक शब्द में लिखिए।

- क. आम के पेड़ के पड़ोस में कौन-सा पेड़ था?
- ख. नीम का पेड़ कैसा था?
- ग. आम का पेड़ कहां था?
- घ. छत्ते पर क्या जमा था?
- ङ. नीम का पेड़ काटने कितने आदमी आए थे?

2. दिए गए शब्दों के समानार्थक शब्द लिखिए।

- क. शहर -
- ख. पेड़ -
- ग. काल -
- घ. घमंड -
- ङ. मदद -

3. दिए गए शब्द समूह के लिए एक शब्द लिखिए।

- क. जो सेना में काम करता हो -
- ख. जो खेती करता हो -
- ग. जो चित्र बनाते हो -
- घ. जो सोने के गहने बनाते हो -
- ङ. जो कपड़े धोता हो -

4. दिए गए वर्ण-विच्छेद से शब्द बनाइए।

क. आ+द्+अ+म्+ई=.....

ख. छ्+अ+त्+त्+आ=.....

ग. त्+उ+म्+ह्+आ+र्+ई=.....

घ. म्+अ+ज्+अ+द्+ऊं+र्+अ=.....

5. योग्यता पर आधारित प्रश्न हल कीजिए। (सोचो और लिखो)

(नम-मन)

क. राही -

ख. नाच -

ग. नदी -

घ. राखी -

ङ. सब -

DELHI PUBLIC SCHOOL, DHANBAD
MONTHLY ASSIGNMENT (January 2025)

Std 2

Name _____ Sec _____ Roll No. _____

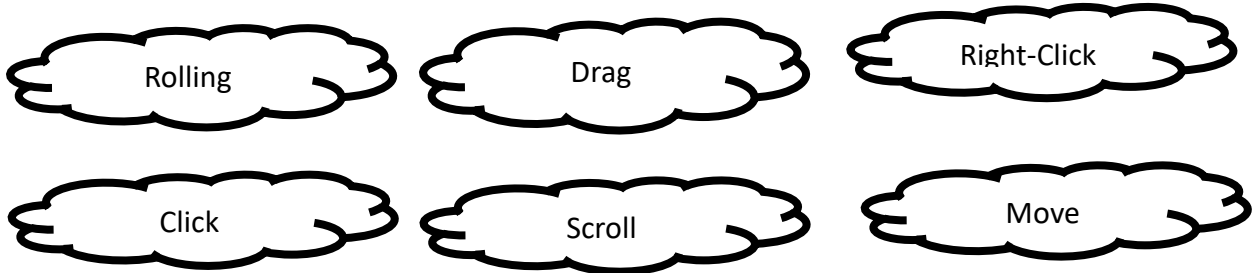
1Q. Write the steps to start a computer.

Step 1: _____

Step 2: _____

Step 3: _____

2Q. Colour the clouds with your favourite colour by identifying the five actions of a mouse.



3Q. Which option is used to open a saved file?

4Q. Fill in the blanks:-

a. The shortcut command to open an existing Paint file is _____.

b. The shortcut command to save a Paint file is _____.

c. To save any changes in the opened file, click on the Save button present on the _____ side of the Title bar.

5Q Jumble Words: -

a) hessurb _____ b) yoncra _____

c) kermar _____ d) tixe _____

e) lesswire _____ f) toplap _____

DELHI PUBLIC SCHOOL, DHANBAD

CLASS – 2, ENGLISH ASSIGNMENT

JANUARY 2025

Name-.....

Class/ Sec-.....

Q1. a) "Yes please, I would!" Who said these words?

b) "Mmm, that's an interesting dance," Who said these words to whom?

Q2 Frame sentences:

a. Piece – _____

b. Dance- _____

c. Roar _ _____

d. Music_ _____

Q 3. Write the meanings of the following words:

1. swing:
2. wandered off:
3. shrieked:
4. squawked:

Q4. Complete the words with 'ee' or 'ea'.

1. P__ nut.
2. Sp__ ch.
3. Fr__
4. Scr__ n.
5. Pl__ se.


Q5. Fill in the blanks with suitable prepositions. Choose from the help box.



On , in , near, between , under

- The cat is sitting _____ the chair.
- The books are _____ the table.
- The shoes are _____ the table.
- The clock is _____ the table.
- The dog is sitting _____ the box.
- The table is _____ the chair and the box.
- The chair is _____ the table.

Q6. Make a word tree with word “at”.



Mathematics Assignment

Std II

1. Fill in the blanks:-

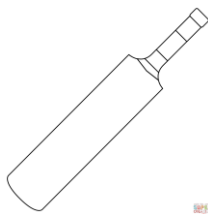
- a) We measure the length in _____ and _____.
- b) 1 meter = _____ centimeter.
- c) We measure weight in _____ and _____.
- d) 1 Kilogram = _____ gram.
- e) Liquids are measured in _____ and _____.
- f) 1 day = _____ hour.
- g) 1 year = _____ days
- h) 1 week = _____ days
- i) 60 minutes = _____ hour
- j) 1 leap year = _____ days

II. Add the following:-

a) 80 cm	c) 39cm
+ 14 cm	+ 26cm

b) 66 cm	d) 73 cm
+ 44 cm	+ 19 cm

III. Write the unit to weigh the given object:-



IV. Subtract the following:-

a) 98cm	b) 82 cm	c) 66 cm	d) 20 cm
--15 cm	--17 cm	--51 cm	--08 cm
_____	_____	_____	_____
_____	_____	_____	_____

V. Draw the clock and show the time:-

- 1) 10:15 2) 6:45 3) 4:30

VI Word problems:-

1. A bucket has 15 L of water, I used 8 L of water for cooking. What quantity of water is still left in the bucket?
2. I have 100 grams of millet in my storage, I added more 500 grams in it .What quantity I have now in my storage?
3. A cat is 22 cm long. It grows 20 cm more. How long is the cat now?

VII. Write the table of 16 and 17.

IX. Write the name of months having 30 days.

X. Write the date, month and year in which you were born.