



DELHI PUBLIC SCHOOL, DHANBAD

MONTHLY ASSIGNMENT

APRIL, 2026

1
2
3

Name : _____ Section : _____

SUBJECT: MATHEMATICS

STD-II

Q1. Write the number names of the following numbers:

- 1) 14 - _____
- 2) 55 - _____
- 3) 40 - _____



Q2. Write the following numbers in descending order:

95 10 80 81 66 40

58 81 59 63 51 62

Answer: _____



Q3. Encircle the numbers that are odd:

71, 99, 73, 80, 58, 84, 66, 67, 62



Q4. Write the place value of digits:

35		89		73		99	
T	O	T	O	T	O	T	O

Q5. Compare and write $>$, $<$ or $=$:

- 1) 18 ○ 81 2) 63 ○ 63 3) 40 ○ 14



DELHI PUBLIC SCHOOL, DHANBAD
CLASS – 2, COMPUTER ASSIGNMENT
APRIL (2026-2027)

NAME: _____ SEC: _____ ROLL NO: _____

Section A : Fill in the Blanks

Use the words in the box to fill in the blanks:

Data | Electricity | Human | Monitor | Input

- 1) A computer is a machine that runs on _____.
- 2) A computer never gets tired, unlike a _____.
- 3) Information that we put into a computer is called _____.
- 4) The _____ looks like a television screen.
- 5) Entering instructions into the computer is known as _____.

Section B : Match the Following

Part	Function
1. Keyboard	A. Used to take a copy on paper
2. Mouse	B. Used to type letters and numbers
3. CPU	C. Helps us to point at things on
the	screen

4. Printer

D. Does all the calculations

Section C : Fun Activity

Rearrange the jumbled letters to find the names of computer parts:

USOME : _____

EYBKOADR : _____

EPRTINR : _____

RMINOTE : _____



DELHI PUBLIC SCHOOL, DHANBAD

CLASS – 2, EVS ASSIGNMENT









APRIL (2026-2027)

NAME: _____ SEC: _____ ROLL NO: _____

Q1. Rearrange the letters to find the names of body parts.

1. E A R _ _ _
2. A R T E H _ _ _ _
3. C N E K _ _ _ _
4. N D A H _ _ _ _
5. S E G L _ _ _ _

Q2. Write internal organs and External organs in the boxes given below.

			
			
Internal organs	External organs		

















Q 3. State True (T) or False (F):

1. We always feel the same emotions _____
2. Heart pumps blood to all parts of the body _____
3. We have two lungs to breathe _____
4. Rose is a thorny plant _____
5. Bottle gourd grows on the ground _____

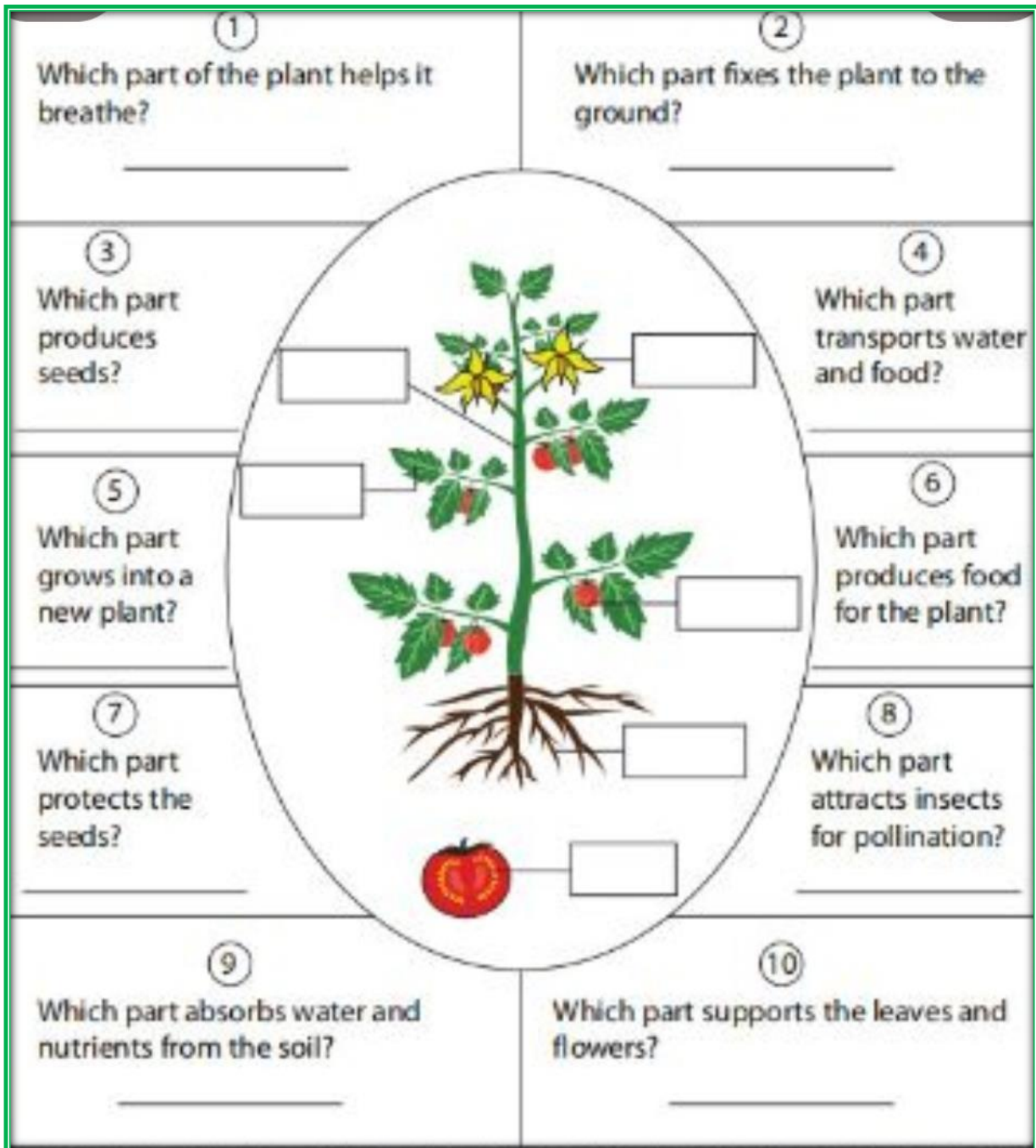
Q4 .Encircle the odd one out:

1. Brinjal, Spinach, Rose, Coriander.
2. Lungs, Nose, Ears, Skin.
3. Sad, Happy, Angry, Sitting.

Q5. Tick the correct type of plants:

Trees	 <input type="checkbox"/>	 <input type="checkbox"/>	 <input type="checkbox"/>	 <input type="checkbox"/>
Shrubs	 <input type="checkbox"/>	 <input type="checkbox"/>	 <input type="checkbox"/>	 <input type="checkbox"/>
Herbs	 <input type="checkbox"/>	 <input type="checkbox"/>	 <input type="checkbox"/>	 <input type="checkbox"/>
Climbers	 <input type="checkbox"/>	 <input type="checkbox"/>	 <input type="checkbox"/>	 <input type="checkbox"/>

Q6. Write the correct plant part to answer each question. Label the plant using numbers corresponding to the functions of the parts.



1 Which part of the plant helps it breathe?

2 Which part fixes the plant to the ground?

3 Which part produces seeds?

4 Which part transports water and food?

5 Which part grows into a new plant?

6 Which part produces food for the plant?

7 Which part protects the seeds?

8 Which part attracts insects for pollination?

9 Which part absorbs water and nutrients from the soil?

10 Which part supports the leaves and flowers?

Let's learn about PLANTS!

Did you know that over 85% of plant life is found in the ocean?



DELHI PUBLIC SCHOOL, DHANBAD



Class 2 | Subject: English

ASSIGNMENT – (APRIL 2026-27)

NAME: _____ SEC: _____ ROLL NO: _____

1. Underline the nouns in the given sentences:

- a) The cat is sleeping on the mat.
- b) We are going to the park.
- c) An apple a day keeps the doctor away.
- d) The boy is reading a book.

2. Frame Sentences:

- a) Play - _____
- b) Help - _____
- c) Careful - _____

3. Match the opposites:

hot

high

big

strong

up

win

empty

beautiful

right

start

ugly

finish

lose

left

low

cold

small

full

weak

down

Q4. Colour the proper noun (Blue) and common noun in (yellow).



Q5. Write two words that rhymes with the given word.















a) Cake : _____ , _____

b) Hat: _____ , _____

c) Small: _____ , _____

d) Bell: _____ , _____

Q6. Write the plural form.

singular		plural	
	fox		
	bush		
	snake		
	sandwich		
	cow		
	tree		
	dress		



DELHI PUBLIC SCHOOL, DHANBAD

CLASS – 2, HINDI ASSIGNMENT

APRIL (2026-2027)

NAME: _____ SEC: _____ ROLL NO: _____

1. कविता पूरा करें ।

हे प्रभु !हम _____ फूल,
_____ दिखाओ करें जो _____।
तुम हो दयालु ,तुम हो प्यारे,
- के _____।
हम अपनाएँ सच्चाई,
कभी न भूलें _____।
सूरज-सा _____ लाएँ,
चंदा-सी _____ पाएँ।
दुनिया में खुशबू फैलाएँ,
_____ का हम बल बन जाएँ।

2. नीचे दिए गए चित्र को पहचान कर खाली स्थान में सही उत्तर चुनकर लिखें।



खेल	मज़ा	गेंद	पार्क	दो
-----	------	------	-------	----

1. यह एक है।
2. लड़का पार्क में रहा है।
3. लड़के के पास एक है।
4. वह कुत्तों के साथ खेल रहा है।
5. लड़के को बहुत आ रहा है।

3. ए और ऐ की मात्रा वाले शब्दों को अलग-अलग स्थानों पर लिखो ।

सवेरा ,तेल , थैला ,रेल ,मेज़ ,कैमरा वेल ,हैरान

ए की मात्रा वाले शब्द	ऐ की मात्रा वाले शब्द

4. नीचे दिए गए शब्दों की सहायता से वाक्य पूरी कीजिए।

टोपी, तबला, तोता, चिमटा, पुस्तक, बारिश, गाजर, घर

1. _____ हो रही है। 
2. खरगोश _____ खा रहा है। 
3. _____ पहन कर जाओ। 
4. रोहित _____ बजा। 
5. रमन _____ चल। 
6. कमल _____ पढ़ता है। 
7. _____ पेड़ पर बैठा है। 
8. अब्दुल _____ ला। 