

DELHI PUBLIC SCHOOL, DHANBAD

Monthly Assignment April (2026-27)

Subject :- Environment Science

Class :- 1

Name : _____

Date : _____

(i) **All About Myself**

1. My name is _____.
2. I am a boy/girl _____.
3. I am _____ years old.
4. I study in class _____.
5. My class teacher's name is _____.
6. My father's name is _____.
7. My mother's name is _____.
8. The name of my school is _____.
9. My favourite food is _____.
10. I like to play _____.



(ii) Circle the living things and put a cross (x) on non-living things

- Dog , Table , Tree , Car , Baby , pencil , Bird , Rock

(iii) Fill in the blanks

1. Living things need_____ to breathe. (Air / Water)
2. A_____ can grow. (Baby / Doll)
3. A_____ cannot move on its own. (Fish / Car)
4. Plants grow from a_____. (Seed / Leaf)

(iv) Sort the following into Natural or Man-made

- (Water , Pencil , Moon , Phone , River , Paper)
- Natural :_____.
- Man-made :_____.

(v) True or False

1. A chair can eat food.[True / False] _____
2. Fish live in water. [True / False] _____
3. A toy car can grow. [True / False] _____

(vi) Draw and write the name of your favourite:

1. Food	2. Vegetable
3. Toy	4. Animal

Delhi public school, Dhanbad

MATHS ASSIGNMENT


APRIL (2026-27)

Name _____ Class- 1__ Section__

1.

Counting Caterpillars

Fill in the missing numbers on the caterpillars by counting from 1 to 20

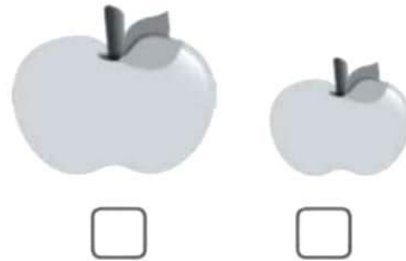


2.


1. Tick (✓) the smaller ball.




4. Tick (✓) the bigger apple.




2. Tick (✓) the bigger duck.




5. Tick (✓) the smaller animal.



3. Tick (✓) the bigger bear.




6. Tick (✓) the smaller zebra.

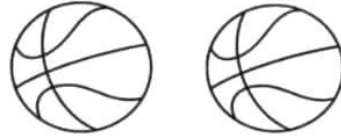


3.

Count pictures and circle the correct number.




4 8 5




5 2 1



2 6 3



7 2 3



5 2 4



7 1 0

Delhi Public School, Dhanbad
Computer Monthly Assignment '26 (April)
Class - 1

Name - _____ Sec - _____

A. Tick the correct option :

Which of the following is a machine?

- (a)  (b)  (c) 

Which of the following needs electricity?

- (a)  (b)  (c) 

Which of the following needs our effort to work?

- (a)  (b)  (c) 

Which of the following is a computer?

- (a)  (b)  (c) 

B. Match the following :

Objects



Description

● (a) Used for typing

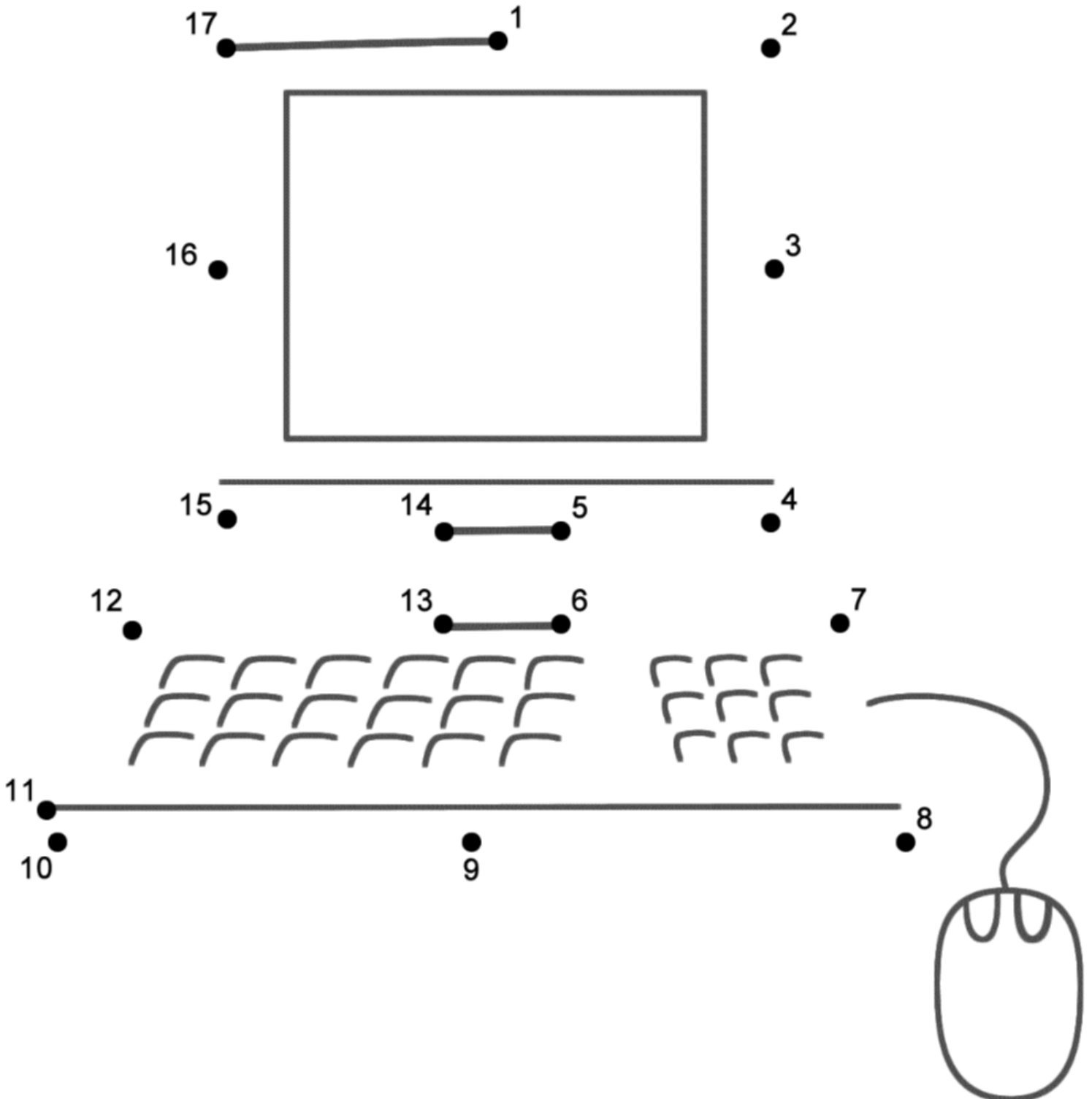
● (b) Used for riding

● (c) used for work and study

C. Write ' E ' for machines that run on electricity and ' F ' for machines that run on fuel.



D. Join the dots sequentially with numbers to complete the picture . Also colour the picture



DELHI PUBLIC SCHOOL, DHANBAD
MONTHLY ASSIGNMENT (APRIL) 2026-27

SUBJECT-ENGLISH

CLASS : I

NAME : _____

SEC : _____

- I. Colour the vowels **GREEN** and the consonants **BLUE** in each row :-

K M U R E

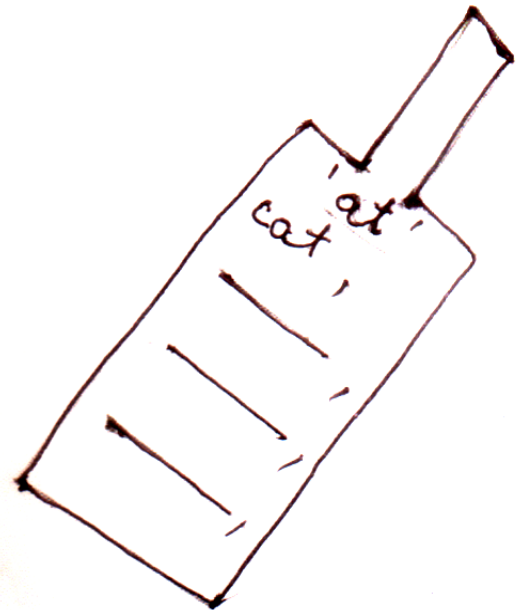

A N O S T

I Z Y C D

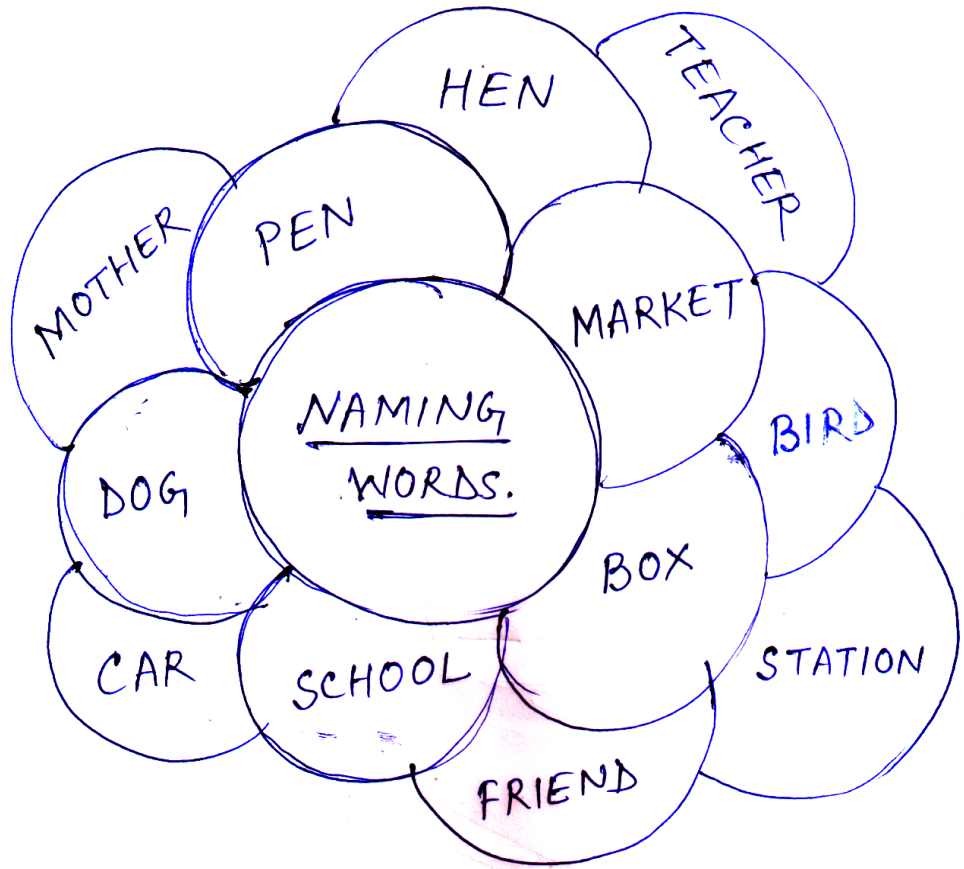
H E F J L

P U W I A

II. Make words with ot, un, en, at.



III. See the naming words and place them in the correct box :-



Name of Animal	Person	Place	Thing

IV. Fill in the missing vowels :-

(a , e, i, o, u)


a) b _____ k



b) _____ egg



c) fl _____ w _____ r



d) _____ c _____ cr _____ m



e) p _____ n c _____ l



f) l _____ f



g) _____ mbr _____ ll _____



DELHI PUBLIC SCHOOL ,DHANBAD

MONTHLY ASSIGNMENT APRIL (2026-27)

CLASS -1

Name ----- sec-----

1. सही स्वर पर गोला लगाओ।

	ऊ	इ	ई	अ
	अ	उ	ऊ	इ
	आ	ई	ऊ	इ
	आ	अ	ऊ	इ

2. व्यंजन

क		ग		ङ
	छ		झ	ञ
ट		ड		ण
	थ		ध	
प		ब		म
य		ल	व	ष
स		क्ष		श्र

3. मिलान करें।

1. नल
2. फल
3. कप
4. मगर
5. शहद
6. शरबत
7. अदरक
8. माला
9. बारिश
10. पहिया



4. अक्षर जोड़ी शब्द बनाओ।

क + म + ल =



स + इ + क =



म + ट + र =



ब + त + ख =



श + ह + द =



न + म + क =



भ + व + न =



प + द + क =

