

Delhi Public School, Dhanbad
English Holiday Assignment
Std V



See the above picture composition and do as instructed:-

A. Look and Answer – Comprehension

1. What is the weather like in the picture?

2. What are “The family” doing on the blue mat?

3. Name one animal you can see in the picture.

4. What does the sign "Please don't litter" tell us?

B. Parts of Speech – Grammar Focus*

1. Write 3 common nouns and 2 proper nouns from the picture.

2. Find 3 action words from the picture.

3. Write 2 adjectives from the picture.

C. Vocabulary & Observation*

1. Find and write 3 words related to *sports* from the picture.

2. Find and write 3 words related to *nature* from the picture.

D. Speaking & Thinking – NEP Experiential Activity

1.*Think*: If you were in this park, what would you do?

2. Value: Why should we not litter in the park?

Comprehension Passage

The Lighthouse Keeper's Promise

On a rocky coast in Kerala, there stood an old lighthouse. For 30 years, Mr. Joseph had been its keeper. Every evening, without fail, he climbed 120 steps to light the lamp. The bright beam guided ships safely through the stormy sea.

One night, a fierce storm hit the coast. The wind howled, and rain lashed against the lighthouse walls. The electricity went off, and the lamp stopped working. Mr. Joseph knew that without the light, ships could crash on the rocks.

He grabbed a lantern and climbed up again, though he was tired and his knees ached. He kept the lantern burning all night, waving it from the top so that passing ships could see it. By morning, the storm had passed, and two ships had safely passed by.

When the villagers thanked him, Mr. Joseph simply said, “A promise is a promise. I promised to keep the light burning.” His story spread, and the children of the village learned that responsibility and courage matter more than comfort.

A. Answer the following questions*

1. Where was the lighthouse located?

2. What was Mr. Joseph’s job?

3. What lesson do the children learn from his story?

B. Choose the correct answer

1. The lighthouse beam helped to guide * _ * _.

a) birds b) ships c) trains

2. The word “fierce” in the passage means

a) calm b) weak c) violent

3. Mr. Joseph climbed the lighthouse even though he was

a) happy b) tired c) bored

C. Vocabulary & Grammar*

1. Find a *synonym* for “safely” from the passage.

2. Find one *adverb* and one *adjective* from the second paragraph. _____

D. Critical Thinking & Values – NEP 2020*

1. Why do you think Mr. Joseph called it “a promise”?

2. What qualities of Mr. Joseph would you like to follow in your life?

Competency Based Questions:-

1. Choose the correct sentence.

- a) She go to school daily.
- b) She goes to school daily.
- c) She going to school daily.

2. Which word describes a happy feeling?

- a) Angry
- b) Joyful
- c) Bitter

3. Choose the correct punctuation mark:

What a beautiful flower__

- a) .
- b) ?
- c) !

4. Which is a naming word (noun)?

- a) Run
- b) Beautiful
- c) Teacher

5. Choose the polite sentence.

- a) Give me water.
- b) Please give me some water.
- c) Water now!

CREATIVE WRITING

Write a paragraph on

The Day I Found A Secret Superpower

Prompt: One hot summer morning you woke up with new Superpower it could be talking to animals, becoming invisible or making plants grow faster

- What are your Superpowers?
- How did you use it during your vacation?
- Would you like to keep this power after the holidays?
Why?

Write in the blank space

Answer the following question

Q1. What moral lesson have you learnt from Cousin Tribulation's Story?

Q2. Write few lines on Abraham Lincoln

Q3. Learn the poem:

A Parent's Prayer and
Paper Boat

Q4. The Holiday Reading Challenge :My top book pick for you

- "Grandma 's bag of Stories" by Sudha Murty .
- The Blue Umbrella: Ruskin Bond
- Mr . Penguin and the Lost Treasure : Alex T.Smith
- Tips : Aim to read 15 -20 pages a day . That finishes most of these in 1-2 weeks without feeling like homework .

Q5. Create a slam book, paste pictures of your favourite time spent during the holidays, the places you visit and your review.

Note: All answers to be written on the printout of the assignment

XXXXXXXXXXXXXXXXXXXX

दिल्ली पब्लिक स्कूल , धनबाद झारखंड
ग्रीष्मावकाश गृहकार्य
विषय: हिंदी
कक्षा: 5

प्रश्न 1-नीचे दिए गए प्रश्नों के उत्तर कम शब्दों में दें।

- क) 'सदाचार' शब्द किन दो शब्दों से मिलकर बना है?
- ख) समुद्र तट के एक भाग में कौन रहता था?
- ग) 'हम नन्हे- नन्हे बच्चे हैं' कविता में बच्चे किससे नाता जोड़ने की बात करते हैं?
- घ) कविता में बच्चे क्या निभाने का संकल्प करते हैं?

प्रश्न 2: रिक्त स्थान भरिए

(क) संज्ञा

कोष्ठक में दिए गए शब्दों में से सही संज्ञा शब्द चुनकर रिक्त स्थान भरिए।
(विद्यालय, पुस्तक, नदी, बच्चा, फूल)

1. गंगा एक पवित्र _____ है।
2. मेरे पास हिंदी की एक सुंदर _____ है।
3. बगीचे में रंग-बिरंगे _____ खिले हैं।
4. राम एक होशियार _____ है।
5. हमारा _____ बहुत बड़ा है।

(ख) सर्वनाम

उचित सर्वनाम भरिए।
(मैं, तुम, वह, हम, वे)

1. _____ रोज़ समय पर विद्यालय जाते हैं।
2. _____ मेरा मित्र है।
3. _____ अपना गृहकार्य पूरा करता हूँ।

4. _____ बहुत अच्छे खिलाड़ी हो।

5. _____ पार्क में खेल रहे हैं।
(ग) विशेषण

उचित विशेषण भरिए।

(मीठा, लंबा, सुंदर, मेहनती, ठंडा)

1. आम बहुत _____ होता है।

2. रीना एक _____ छात्रा है।

3. हिमालय बहुत _____ पर्वत है।

4. ताजमहल एक _____ इमारत है।

5. सर्दियों में _____ पानी अच्छा लगता है।

प्रश्न 3 : अपठित गद्यांश

रवि एक परिश्रमी छात्र है। वह प्रतिदिन सुबह जल्दी उठता है। विद्यालय जाने से पहले अपना गृहकार्य पूरा करता है। उसे पेड़-पौधों से बहुत प्रेम है। वह अपने घर के सामने लगे पौधों को पानी देता है। रवि अपने मित्रों की भी सहायता करता है। सभी शिक्षक उससे बहुत प्रसन्न रहते हैं।

प्रश्न:

1. रवि कैसा छात्र है?

2. रवि सुबह क्या करता है?

3. रवि किससे प्रेम करता है?

4. रवि पौधों को क्या देता है?

5. सभी शिक्षक रवि से क्यों प्रसन्न रहते हैं?

6. भाग – 3 : शब्द भेद पहचानिए।

नीचे दिए गए शब्दों के सामने लिखिए कि वे संज्ञा, सर्वनाम या विशेषण हैं।

- I) मोहन _____
II) वह _____
III) लाल _____
IV) नदी _____
V) हम _____
VI) मीठा _____

प्रश्न 4- रचनात्मक गतिविधि।

राष्ट्रीय पशु 'बाघ' का सुंदर सा चित्र या पोस्टर बनाइए और सुंदर अक्षरों में पांच वाक्य लिखिए।

प्रश्न 5-प्रतिदिन एक पेज सुलेख लिखें।

प्रश्न 6-" हम नन्हे -नन्हे बच्चे हैं" कविता सस्वर याद करें।

DELHI PUBLIC SCHOOL, DHANBAD
MATHS SUMMER HOLIDAY ASSIGNMENT – 2026-27
CLASS – V

Q1. Write using Roman numerals:

50	52	55	58	60	66	69	70	71

Q2. Fill in > , < or = .

a. $42 + 16$ XLVIII

b. $240 \div 3$ LXXX

Q3. Write in the short form:

a. $4000000 + 500000 + 30000 + 7000 + 500 + 10 + 9 =$ _____

b. $60000000 + 2000000 + 500000 + 90000 + 7000 + 200 + 20 + 5 =$ _____

Q4. Write in the expanded form:

a. 7,27,09,613 _____

b. 62,26,719 _____

Q5. Write in figures:

a. Two hundred thousand nine hundred and seventy-eight _____

b. Six million three hundred thousand four hundred and seventeen _____

Q6. Write in figures:

a. Two million eighty-four thousand seven hundred and seventy-seven

b. Eighty-three million five hundred and twenty-nine thousand one hundred and one

Q7. Write the number names using the international system of numeration.

a. 57235471 _____

b. 495381025 _____

Q8. Write four consecutive numbers that come after.

a. 5,84,00,703 _____, _____, _____, _____

b. 66,03,95,000 _____, _____, _____, _____

Q9. Fill in:

a. In 64083275 , the digit in the crores place is _____, and that in the ten lakhs place is _____.

b. In 3090500, the place value of 3 is _____, and that of 9 is _____.

Q10. Write the place value of the given digits:

a. 25,43,59,008

2 _____ 5 _____ 4 _____ 3 _____

b. 39,04,80,560

3 _____ 9 _____ 4 _____ 8 _____

Q11. Write the smallest and the largest numbers:

a. 456259, 397430, 99999, 467823, 348737

Smallest _____ Largest _____

- b. 672841, 7685126, 6789508, 765932, 683493

Smallest _____ Largest _____

Q12. Write in descending order:

- a. 642589, 439571, 649700, 780900, 643826

Q13. Write in ascending order:

- a. 43600000, 54500000, 21814121, 32718396, 36122481

Q14. Find the largest 7-digit number that is divisible by 3331.

Q15. Find the smallest 6-digit number that is divisible by 436.

Q16. Simplify: $7829 - 15 \text{ of } 50 \div 25 \times 132 - 2824 + 865$

Q17. Solve:

- a. Find the number which when divided by 256 gives 652 as quotient and no remainder.
b. Find the dividend when the divisor = 88, the quotient = 2470 and the remainder = 25.

Q18. Solve:

- a. The price of a book is Rs. 364. What is the price of 245 such books?
b. The price of a toy is Rs. 86. How many of these can a shopkeeper buy with Rs. 3000.

Q19. The difference of two numbers is 2,11,265. The bigger number is 50,02,000. Find the smaller number.

Q20. A man bought a piece of land for Rs. 8,53,760. He spent Rs. 15,46,920 to build a house on it. After that he sold the house for Rs. 30,00,000. How much money did he gain?

Q21. Multiply:

- a. 65743 by 3682
b. 21659 by 1506

Q22. Divide:

- a. $310752 \div 96$
b. $215798 \div 215$

Q23. Simplify:

- a. $180 + 2 \times (100 - 64)$
b. $3 - \{(38 + 12) \div (98 - 73)\}$

Q24. Arrange in columns and add:

- a. 72560814 and 9483526

Q25. Subtract:

- a. 340789 from 2001005

NOTE: Solve all the Questions in your Class Work Copy

STD. 5 SCIENCE SUMMER HOLIDAY ASSIGNMENT

I) Fill in the blanks:-

- a) _____ are excellent swimmers .
- b) Reptiles are _____ blooded animals .
- c) _____ and _____ change matter's form .
- d) _____ give birth to live babies .
- e) Grouping living things based on their features is called _____ .

II) Name two types of –

- a) Seed leaves - _____, _____
- b) Venation _____, _____
- c) Non- Flowering Plants - _____, _____
- d) Solids _____, _____ .
- e) Types of changes _____, _____

(III) Critical thinking questions :-

- a) **Why does the ice melt faster if we stir it ?**
- b) **Where does the "fog" on the outside of a cold soda can come from?**

(IV) Competency based questions :-

- 1. Why does water take the shape of the glass in which it is poured?
- 2. A book keeps its shape when placed on a table. Which state of matter does it belong to? Why?
- 3. Ice, water, and steam are all forms of the same substance. How are they different?
- 4. Why does juice spill if the glass falls, but a pencil does not?

(V) Application-Based Questions

- 1. Riya kept ice cubes outside on a hot day. After some time, they turned into water. What change took place?
- 2. Why does steam rise from hot tea ?
- 3. Your mother keeps water in the freezer to make ice. What change happens to the water?

(VI) OBSERVE AND CLASSIFY : Physical (P) OR (C) for Chemical Change

- 1. Melting a chocolate bar in your hand . _____
- 2. Rust forming on a bicycle left in the rain . _____
- 3. Breaking a glass tumbler by accident . _____
- 4. Baking a cake in the oven . _____

- Which of the above changes can be reversed ?
- Which ones cannot ?
- What clues help you decide ?

(VII) POINTS TO PONDER :-

1. What is Science?
 Science is the study of the natural world around us.
 It helps us understand:
 → Earth
 → Plants
 → Animals
 → Space
 → Energy & Matter
 Science explains **how** things work and **why** they happen.

2. Branches of Science

- Physics**
 - Study of energy, force, light, sound, motion
 - Example: Why objects fall down
- Chemistry**
 - Study of substances and their changes
 - Example: Mixing substances, reactions
- Biology**
 - Study of living things
 - Plants, animals, humans

3. Scientific Method (Steps of Science)

- Observation** - Notice something
- Question** - Ask why/how
- Hypothesis** - Make a guess
- Experiment** - Test it
- Conclusion** - Final answer

Science is based on **facts and experiments**.

4. Importance of Science

- Makes life **easy & comfortable**
- Helps in **technology & inventions**
- Improves **health & medicine**
- Solves **everyday problems**

5. Science in Daily Life

- Cooking
- Electricity
- Transport
- Mobile phones
- Medicines

Science is **everywhere** around us!

6. Good vs Bad Use of Science

✓ Good Use	✗ Bad Use
Medicines	Pollution
Machines	Weapons
Communication	Overuse of technology

We must use science wisely.

7. Key Points to Remember

- Science is based on **observation & experiments**.
- It helps us understand the **world**.
- It is useful in **daily life**.
- It should be used for **good purposes**.

(VIII) DRAW, COLOUR AND LABEL :-

- A physical change .
- A chemical change .
- An example of solid ,liquid and gas .

HAPPY HOLIDAYS



DELHI PUBLIC SCHOOL, DHANBAD,
SESSION- 2026-27
Holiday Assignment

Subject: Social Studies

Class 5

Name: _____ Class & Sec.: _____ Roll No.: _____ Date: _____

Topic: 1. Earth – Continents, Oceans
2. Globes

Part A – Fill in the Blanks

1. The Earth has _____ continents.
2. The largest continent is _____.
3. The smallest continent is _____.
4. The Pacific Ocean is the _____ ocean in the world.
5. A globe is a model of the _____.
6. India is located in the continent of _____.
7. The _____ Ocean lies between Africa and Australia.
8. The North Pole and South Pole are shown on a _____.
9. The Atlantic Ocean separates _____ and Europe.
10. The Earth is _____ in shape.

Part B – True or False

1. Asia is the largest continent. _____
2. There are four oceans on Earth. _____
3. Australia is both a country and a continent. _____
4. A globe gives a flat picture of Earth. _____
5. Antarctica is covered with ice. _____
6. The Indian Ocean is named after India. _____
7. Europe is south of Africa. _____
8. Maps and globes help us study the Earth. _____

Part C – Answer in One Word

1. Largest ocean: _____
2. Coldest continent: _____
3. Model of the Earth: _____
4. Continent where Egypt is located: _____
5. Ocean near India: _____
6. The line dividing Earth into two halves: _____

Part D – Match the Following

Column A

1. Asia
2. Australia
3. Antarctica
4. Globe

Column B

- a. Smallest continent
- b. Covered with ice
- c. Largest continent
- d. Model of Earth

Part E – Logical Reasoning

1. Why is a map better than a globe for studying the Earth?
2. Why is Antarctica not suitable for farming?

Part F – Short Answer Questions

1. Name the seven continents.
2. Name the five oceans.
3. What is a globe?
4. Write two differences between a map and a globe.

Part G – Map Activity

On an outline world map:

1. Label the seven continents and five Oceans. Colour each continent with different colours.
2. Draw any one continent and decorate it.

Part I – Fun Activity

Solve the Riddle

1. I am the largest continent. Who am I? _____
2. I am the coldest continent. Who am I? _____
3. I am the biggest ocean. Who am I? _____

Learn it. Know your Rights

The following Articles present in the Constitution of India provide the children of India the following rights-

1. Article 14 : All children are equal
2. Article 15 : No Discrimination
3. Article 21 : Right to live safely
4. Article 21A : Right to Education
5. Article 23 : No forced labour
4. Article 24 : No child labour
5. Article 39 : Healthy growth
6. Article 45 : Early childhood care.

Teacher's Signature: _____

Parent's Signature: _____

DELHI PUBLIC SCHOOL, DHANBAD
HOLIDAY ASSIGNMENT CLASS – V

A. Fill in the Blanks

1. Excel is a _____ program.
2. A workbook contains one or more _____.
3. The intersection of a row and a column is called a _____.
4. Rows are numbered and columns are identified by _____.
5. The active cell is surrounded by a _____ border.

B. True or False

1. Excel is used to perform calculations.
2. Columns are numbered in Excel.
3. A worksheet is made up of rows and columns.
4. Cell A1 is located in Column A and Row 1.
5. You cannot save an Excel file.

C. Multiple Choice Questions

1. Which software is used to create spreadsheets?
a) Paint b) Excel c) Word d) PowerPoint
2. What is the first cell in a worksheet?
a) B1 b) A1 c) A2 d) C1
3. Which key is used to move to the next cell?
a) Shift b) Enter c) Tab d) Esc
4. A group of worksheets is called a:
a) Document b) Workbook c) Folder d) Database

D. One Word Answers

1. First cell in a worksheet - _____
2. Horizontal line of cells - _____
3. Vertical line of cells - _____
4. Excel file - _____

5. Selected Cell - _____

E. Very Short Answer Questions

1. How many worksheets are there in a workbook?
2. Which symbol starts a formula in Microsoft Excel?
3. What is the extension of an Excel file?
4. Name any two uses of Excel.
5. Which bar displays formulas?

F. Short Answer Questions

1. What is Microsoft Excel?
2. What is a worksheet?
3. What is a cell address?
4. What is the difference between a row and a column?
5. What is a workbook?

G. Competency Based Questions

A student enters the following data:

A1= Name

B1=Class

C1= Marks

A2= Rahul

B2=5

C2=92

Questions:

- a) What is the address of the cell containing Rahul?
- b) Which cell contains Marks?
- c) Which column contains Class?
- d) Which row contains Rahul's Information?

G. Practical Activity

Create a marksheet in Excel for five subjects. Enter marks out of 100 and calculate the total and average.

H. Project Work

Prepare a monthly expense sheet for your family using Excel with columns for Date, Item, Amount, and Total.

Class 5
AI Assignment
May '26

All work should be done in your lab manual (project copy)

Topic: Tables in MS Word 2016

I. Fill in the Blanks

1. A table is a grid of horizontal _____ and vertical columns.
2. The intersection of a row and a column is called a _____.
3. To combine two or more cells into a single cell, we use the _____ option.
4. The _____ key is used to move the cursor to the next cell in a table.
5. In MS Word 2016, the Table button is present under the _____ tab.

II. Match the Following

Column A	Column B
1. Insert Above	A. Changes the background color of cells
2. Split Cells	B. Adds a new row directly on top
3. Shading	C. Erases specific borders or gridlines
4. Table Eraser	D. Breaks a single cell into multiple cells
5. Delete Column	E. Removes a vertical line of data cells

III. True or False

- 1. You cannot change the border color of a table after creating it.
(_____)**
- 2. The 'Insert Table' dialog box allows you to specify the exact number of rows. (_____)**
- 3. Columns run horizontally across the computer screen.
(_____)**
- 4. You can insert pictures inside the cell of an MS Word table.
(_____)**
- 5. The 'Merge Cells' option is found under the Home tab.
(_____)**

IV. Short Answer Questions

- 1. Write down the steps to insert a table using the Grid method in MS Word 2016.**
- 2. What is the difference between splitting a cell and merging a cell?**

V. Draw and Label

- 1. Draw a blank grid of a table containing 3 rows and 4 columns.**
- 2. Use an arrow to point to and label one Row, one Column, and one Cell on your drawing.**

 Holiday Assignment – French (Class 5)

 **Q1. Trouvez l'intrus. Entourez le mot qui n'a pas le son.**

(Circle the word that does not have the same sound)

a) Son O

pomme  orange  fenêtre  chocolat 

b) Son I

iglou  image  orange  kiwi 

c) Son A

salade  tomate  ananas  frigo 

 **Q2. Écrivez en français** 

a comme _____

i comme _____

m comme _____

y comme _____

v comme _____

 **Q3. Classement des mots. Remettez ces mots dans l'ordre alphabétique.**

(Write in alphabetical order neatly)

a) chat, drapeau, pomme, ami, banane

b) bleu, rouge, noir, vert, jaune

c) lapin, rat, chien, tigre, zèbre


 **Q4. Collez 4 choses françaises**

(Paste or draw any 4 French things)

 **Q5. Lexique (Vocabulary)**


nous – we

comment – how

avion  – aeroplane

chat  – cat

garçon  – boy

mère  – mother

père  – father

frère  – brother


français – French

café  – coffee

thé  – tea

lune  – moon

montre  – watch

leçon  – lesson

forêt  – forest

hôtel  – hotel

 **Q6. Présentation**

 **Self Introduction in French:**


Je m'appelle _____.


J'ai huit ans.

J'étudie en classe 5.

Mon école s'appelle Delhi Public School Dhanbad.

Q7. Les Salutations


Bonjour – Hello 

Salut – Hi 

Bon après-midi – Good afternoon 



Bonsoir – Good evening 

Bonne nuit – Good night 

Merci – Thank you 

Au revoir – Goodbye 

Presentation Tips (IMPORTANT)

- ✓ Use different colours for each question 
- ✓ Draw borders and boxes
- ✓ Use sketch pens / crayons 
- ✓ Add small drawings near words
- ✓ Keep handwriting neat and big.