

DELHI PUBLIC SCHOOL, DHANBAD


Monthly Assignment (JULY 2025)

SUBJECT - COMPUTER

CLASS 1

Name - _____ Section: _____

Q1. Match parts of a computer with the names.



1.

A. Keyboard



2.

B. Monitor



3.

C. Printer



4.

D. CPU



5.

E. Mouse



6.

F. Speakers

Q2. Name any four parts of the computer.

a. _____

b. _____

c. _____

d. _____

Q3. Circle the odd one out.

a. Monitor – Keyboard – Apple

b. Mouse – CPU – Chair

c. Speaker – Printer – Banana

Q4. Choose the correct answer and fill in the blanks.

CPU, Keyboard, Mouse, Monitor, Speaker
--

a. We use a _____ to type.


b. The _____ shows us pictures and videos.

c. We use the _____ to point and click.


d. The _____ is called the brain of the computer.

e. The _____ gives us sound.


Q5. Fill the missing letters.




M__N__T__R



K__Y__O__R__



C__U



M__U__E

DELHI PUBLIC SCHOOL, DHANBAD

EVS ASSIGNMENT(JULY) 2025-2026

CLASS : 1

NAME : _____

SEC : _____

I. Fill in the blanks :-

a) A _____ teaches students.

b) _____ keeps our money safe.

c) I smell flower with my _____.

d) We should _____ and be _____

to our helpers.

e) A _____ protects people.

II. Match Community helpers .

Police officer

Fire house

Firefighter

Handcuffs

Doctor

Chalk or White board marker

Teacher

Stethoscope

III. Name the people who make things.


- a) A _____ builds houses.
- b) A _____ makes pots.
- c) A _____ makes things with iron.
- d) A _____ makes things with wood.
- e) A _____ stitches clothes.

IV. State True or False :

- a) A person who cannot hear is deaf.
- b) We have ten sense organs.
- c) Food, water, rest and exercise help our body to become strong.
- d) We breathe with our skin.
- e) A blind person cannot see.

V.

Write a few healthy habits



DELHI PUBLIC SCHOOL, DHANBAD

Monthly English Assignment (July) 2025-26

Name Class 1 Sec Roll no

Q.A) Match the words with the correct describing word

A	B
1) blue	a) chocolate
2) tall	b) Sky
3) pretty	c) mouse
4) green	d) man
5) sweet	e) dress
6) small	f) leaf
7) round	g) sun
8) yellow	h) ball
9) red	i) milk
10) hot	j) rose

Q.B) Circle the describing words in the following sentences.

- a) A spider has eight legs.
- b) Diya is a lovely girl.
- c) Rohan bought a red car.
- d) Rita has curly hair.


e) I like sweet candies.

f) Tommy is fat.

g) The elephant is big.

h) The grass is green.

Q.C) Word Tree



Q.D) Look at the pictures and fill in the blanks with the correct describing words.

open, short, fat, hot, tall, wide, huge, small, round

1) This is a _____ tower.

2) The tea is _____.

3) These kittens are _____.

4) The road is _____.

5) The lady has _____ hair.

6) The earth is _____.

7) The pig is _____.

8) The box is _____.

9) The dinosaur is _____.



Delhi public school, Dhanbad
Hindi Assignment, July 2025-26
Class - 1

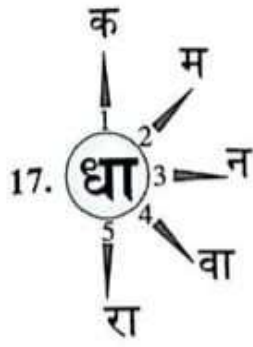
Name - _____ Section- _____

Q1.

आ की मात्रा – सही शब्द पर गोला लगाओ

	माला	शाला	भाला
	जाल	हाथ	भात
	माना	दाना	जाना
	नाग	झाग	भाग
	गधा	गदा	सदा
	थाना	भाना	गाना

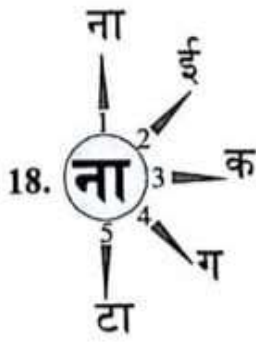
Q2. शब्द बनाओ :-



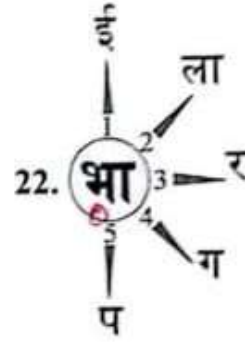
1. धाक
2. _____
3. _____
4. _____
5. _____



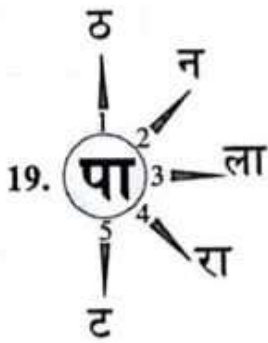
1. बाल
2. _____
3. _____
4. _____
5. _____



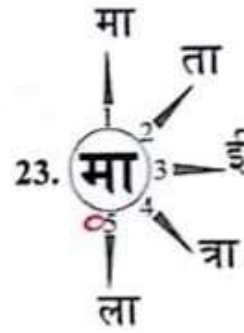
1. नाना
2. _____
3. _____
4. _____
5. _____



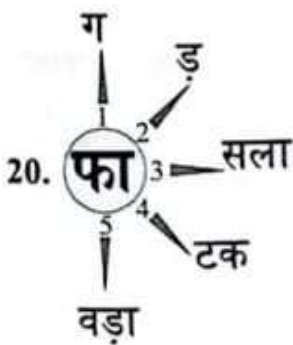
1. भाई
2. _____
3. _____
4. _____
5. _____



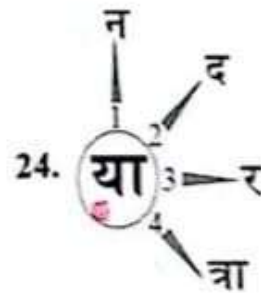
1. पाठ
2. _____
3. _____
4. _____
5. _____



1. मामा
2. _____
3. _____
4. _____
5. _____



1. फाग
2. _____
3. _____
4. _____
5. _____



1. यान
2. _____
3. _____
4. _____

Q3. वाक्य बनाओ

1. राजा –

2. किताब –

3. इमली –

4. बच्चा –

5. गाना –

Q4.

क)

"इ" की मात्रा वाले 5 शब्द लिखिए

1. _____
2. _____
3. _____
4. _____
5. _____

ख)

"आ" की मात्रा वाले 5 शब्द लिखिए

1. _____
2. _____
3. _____
4. _____
5. _____

DELHI PUBLIC SCHOOL DHANBAD

Monthly Assignment (JULY 2025)

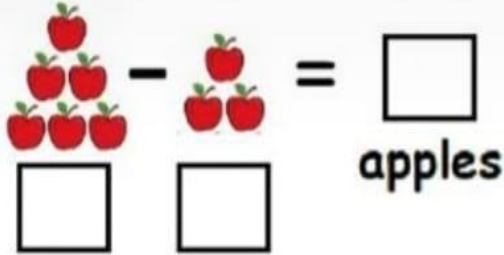
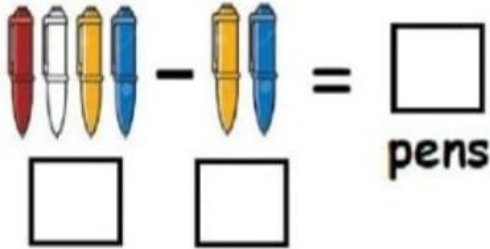
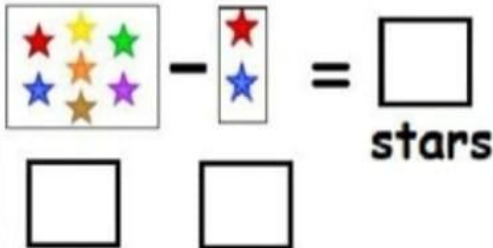
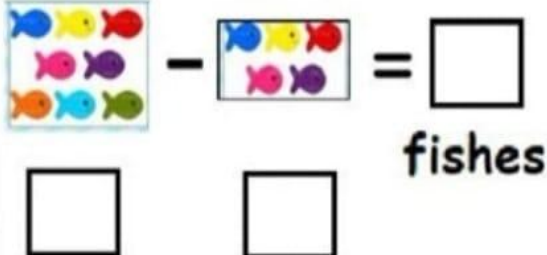
SUBJECT- MATHS

NAME.....

CLASS - 1

SEC.....

Q-1. Solve the following word problems :- :

1) Jack has 6 apples. He gives 3 apples to Bella. How many apples are left with Jack?	 $\boxed{} - \boxed{} = \boxed{}$ apples
2) There are 4 pens in a box. Tia takes out 2 pens from the box. How many pens are left in the box?	 $\boxed{} - \boxed{} = \boxed{}$ pens
3) Sam has 7 stars. He gives 2 stars to Ben. How many stars are left with Sam?	 $\boxed{} - \boxed{} = \boxed{}$ stars
4) There are 8 fishes in a pond. 5 fishes swim away. How many fishes are left in the pond?	 $\boxed{} - \boxed{} = \boxed{}$ fishes

Q.2. Subtract :-

$$\begin{array}{r} 9 \\ - 5 \\ \hline \end{array}$$

$$\begin{array}{r} 9 \\ - 2 \\ \hline \end{array}$$

$$\begin{array}{r} 9 \\ - 4 \\ \hline \end{array}$$

$$\begin{array}{r} 9 \\ - 1 \\ \hline \end{array}$$

$$\begin{array}{r} 9 \\ - 3 \\ \hline \end{array}$$

$$\begin{array}{r} 8 \\ - 7 \\ \hline \end{array}$$

$$\begin{array}{r} 8 \\ - 5 \\ \hline \end{array}$$

$$\begin{array}{r} 8 \\ - 3 \\ \hline \end{array}$$

$$\begin{array}{r} 8 \\ - 6 \\ \hline \end{array}$$

$$\begin{array}{r} 8 \\ - 4 \\ \hline \end{array}$$

$$\begin{array}{r} 7 \\ - 3 \\ \hline \end{array}$$

$$\begin{array}{r} 7 \\ - 2 \\ \hline \end{array}$$

$$\begin{array}{r} 7 \\ - 4 \\ \hline \end{array}$$

$$\begin{array}{r} 7 \\ - 6 \\ \hline \end{array}$$

$$\begin{array}{r} 7 \\ - 5 \\ \hline \end{array}$$

$$\begin{array}{r} 6 \\ - 4 \\ \hline \end{array}$$

$$\begin{array}{r} 6 \\ - 3 \\ \hline \end{array}$$

$$\begin{array}{r} 6 \\ - 2 \\ \hline \end{array}$$

$$\begin{array}{r} 6 \\ - 5 \\ \hline \end{array}$$

$$\begin{array}{r} 6 \\ - 1 \\ \hline \end{array}$$

$$\begin{array}{r} 9 \\ - 9 \\ \hline \end{array}$$

$$\begin{array}{r} 9 \\ - 7 \\ \hline \end{array}$$

$$\begin{array}{r} 8 \\ - 1 \\ \hline \end{array}$$

$$\begin{array}{r} 8 \\ - 2 \\ \hline \end{array}$$

$$\begin{array}{r} 9 \\ - 8 \\ \hline \end{array}$$

$$\begin{array}{r} 7 \\ - 1 \\ \hline \end{array}$$


$$\begin{array}{r} 6 \\ - 0 \\ \hline \end{array}$$

$$\begin{array}{r} 4 \\ - 2 \\ \hline \end{array}$$


$$\begin{array}{r} 5 \\ - 3 \\ \hline \end{array}$$

$$\begin{array}{r} 3 \\ - 2 \\ \hline \end{array}$$


Q.3. Count and subtract by striking out the picture :-




$$6 - 4 =$$




$$8 - 7 =$$



$$3 - 0 =$$



$$5 - 4 =$$



$$4 - 1 =$$

Q.4. Subtract using your finger :-

$$7 - 2 = \square$$

$$6 - 5 = \square$$

$$6 - 3 = \square$$

$$2 - 2 = \square$$

$$9 - 5 = \square$$

$$4 - 3 = \square$$

$$10 - 3 = \square$$

$$9 - 7 = \square$$

$$8 - 1 = \square$$

$$7 - 3 = \square$$

$$5 - 0 = \square$$

$$3 - 1 = \square$$