

DELHI PUBLIC SCHOOL, DHANBAD

Maths Assignment (July 2023)

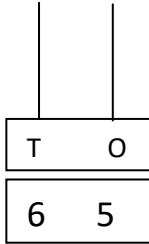
NAME _____

STD – 1

SEC - _____.

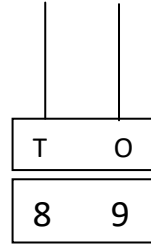
Q1) Draw the correct number of beads on each abacus.

a)



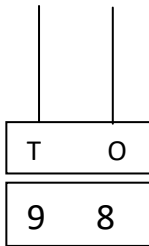
65 = tens and ones

b)



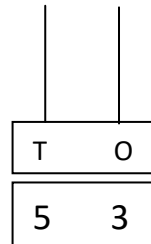
89 = tens and ones

c)



98 = tens and ones

d)



53 = tens and ones

Q2) Write one less and one more :-

LESS

MORE

a) _____ 72 _____

b) _____ 83 _____

c) _____ 50 _____

d) _____ 97 _____

Q3) Write the tens and ones in the form of numbers.

a) 2 tens and 7 ones

b) 4 tens and 0 one

c) 8 tens and 9 ones

d) 6 tens and 5 ones

e) 9 tens and 2 ones

Q4) Write the following numbers in the expanded form :-

a) 65 = _____ tens and _____ ones = _____ + _____

b) 73 = _____ tens and _____ ones = _____ + _____

c) 49 = _____ tens and _____ ones = _____ + _____

d) 27 = _____ tens and _____ ones = _____ + _____

e) 18 = _____ ten and _____ ones = _____ + _____

Q5) Put >, < or = sign.

a) 69 73











b) 84 47

c) 82 82

d) Sixty five Eighty five

e) Thirty three Sixty three

Q6) Match with Ordinal Numbers

1. 	•	•Second	6. 	•	•Tenth
2. 	•	•Third	7. 	•	•Eighth
3. 	•	•Fifth	8. 	•	•Sixth
4. 	•	•First	9. 	•	•Ninth
5. 	•	•Fourth	10. 	•	•Seventh

Q7) Circle the biggest number.

- a) 38, 42, 19, 72
- b) 57, 66, 48, 39
- c) 68, 14, 73, 86
- d) 28, 17, 27, 13

Q8) Cross the smallest number

- a) 47, 57, 67, 37
- b) 12, 52, 62, 10
- c) 83, 97, 77, 16
- d) 96, 46, 56, 76

DELHI PUBLIC SCHOOL ,DHANBAD

STD 1 English Assignment (July 23)

NAME - _____

ROLL NO - _____ SEC - _____

Circle the pronoun that can replace the underlined words.

1) Charles puts the books on the table.

- a. It
- b. Me
- c. Us
- d. He

Personal pronouns are short words that replace the names of people and animals.

2) The children are making a snowman.

- a. Me
- b. We
- c. They
- d. You

3) Mom put the pie on the table.

- a. Me
- b. She
- c. You
- d. Them



4) Monique sings beautifully.

- a. She
- b. He
- c. We
- d. They

5) James has two cats.

- a. They
- b. Them
- c. We
- d. He

★ Use "an " before the word which begins with vowel sound.

★ Use " a " before the word which begins with consonant sound.



___ ball



___ owl



___ ant



___ girl



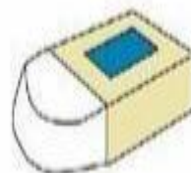
___ tree



___ ice-cream



___ fox



___ eraser



___ umbrella



___ ship

A noun is the name of a person, animal, place or a thing.



Put the nouns into the correct box.

tiger teacher shop book doctor
pen beach elephant school dog
boy bag computer park dad
cat



Person

Animal



Place



Thing



Delhi Public School Dhanbad

Computer Assignment. Class 1. July 2023

Name - _____

Class /Sec - _____

Q1) Answer the following:-

a)What can you type using a computer?

_____.

b)Which computer part is called its brain?

_____.

Q2) Write T for true and F for false statement:-

1)The CPU box is inside the CPU _____.

2)A Mouse has a screen like TV _____.

3) There are two types of monitors _____.

4)A computer is made up of many parts_____.


Q3) Rearrange the letters and write the correct word:-

TOMINRO _____.

BRDOAEYK _____.

Q4) Write the name of the following parts of a computer :-

And colour the picture given below :-



DELHI PUBLIC SCHOOL, DHANBAD

EVS Assignment (July) 2023

NAME _____ CLASS 1 SEC _____ Roll No. _____

1.

Identify the animals and take them to their homes:



Coop



Aquarium



Burrow



Kennel



Tree



Den

2. Choose the correct answer from the box and write under the picture

classroom

school hall

library

canteen

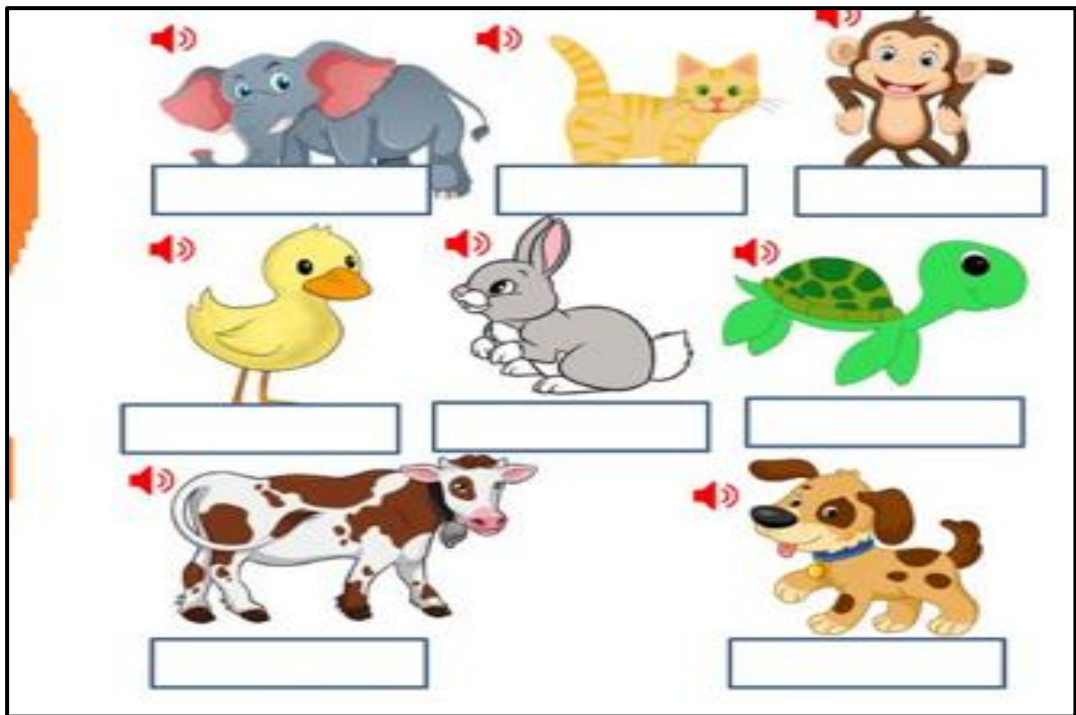
field

computer room



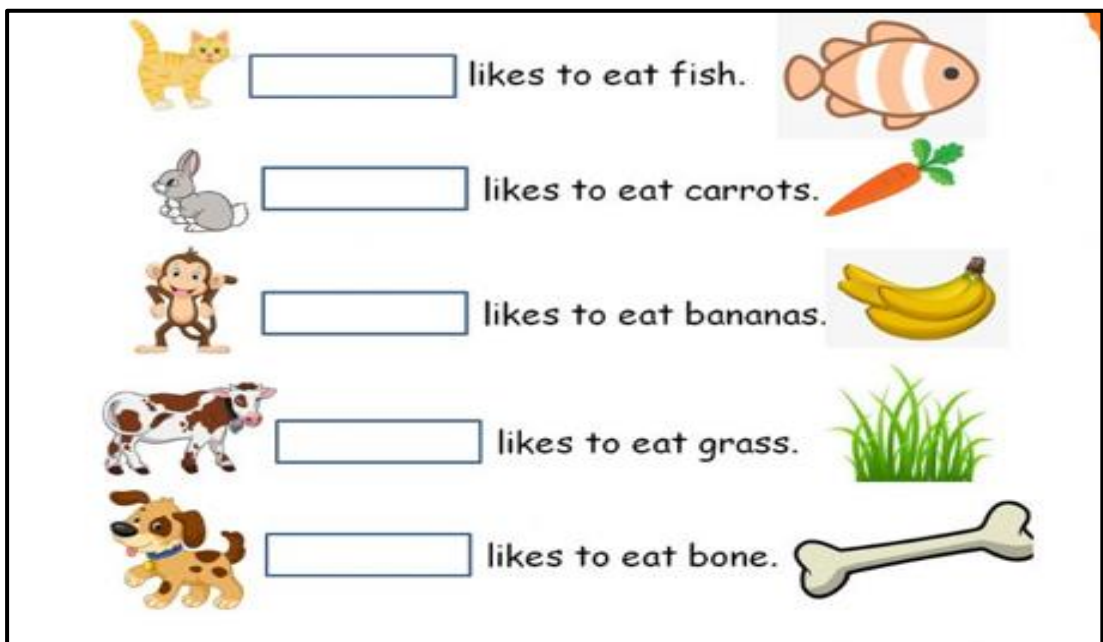
3. Name the animals.

turtle, cat, cow, elephant, monkey, duck, dog, rabbit



4. What do animals like to eat?

Monkey, Rabbit, Cow, Cat, Dog



DELHI PUBLIC SCHOOL, DHANBAD

MONTHLY ASSIGNMENT – JULY (2023 -24)

CLASS – 1 _____

SUBJECT - HINDI

Name - _____ Roll No - _____

प्र1. सही रंग का नाम लिखकर वाक्य पूरे करो -

क) दूध का रंग _____ होता है।

ख) संतरे का रंग _____ होता है।

ग) आसमान का रंग _____ होता है।

घ) पत्ते का रंग _____ होता है।

प्र2. सही स्थान पर उ (७) की मात्रा लगाओ -

मध

...

पश

...

गरू

...

तम

...

गण

...

पत्र

...

यवा

...

शत्र

...

प्र3.नीचे दिए गए चित्रों को देखें और सही विकल्प पर (✓) का निशान लगाएँ -



प्र4. ऊ की मात्रा लगाकर शब्द पूरे करो -

र + ू + प =	<input type="text"/>
फ + ू + ल =	<input type="text"/>
स + ू + र + ज =	<input type="text"/>
प + ू + र + ब =	<input type="text"/>
म + ज + द + ू + र =	<input type="text"/>
क + ब + ू + त + र =	<input type="text"/>

प्र5. चित्रों के नाम लिखो -

बुढ़िया	झूला	गुलाब जामुन	नृप	धनुष	कबूतर
तृण	भालू	मृग	फूल	झुमका	वृक्ष



















