

DELHI PUBLIC SCHOOL, DHANBAD

Monthly Assignment (February)

Class- Prep Subject - Drawing


Name - _____ Sec- _____

1. Colour the picture of ' A School '




2. Colour the ' WINTER SEASON SCENE '

In winter season, the nights are cold and long and days are short.



3.Colour the ' Traffic Scene '



DELHI PUBLIC SCHOOL DHANBAD
MATHS MONTHLY ASSIGNMENT (FEBRUARY)

CLASS-PREP

NAME: _____

SEC: _____

Write the numbers in standard form

Thirty-seven

Forty-eight

Ninety-nine

Fifteen

Sixty-one



Write the numbers in word form

66 _____

74 _____

49 _____

37 _____

10 _____



Write the missing letter

20: Two__ty

88: Eighty-eig__t

15: Fi__teen



Number Names

Circle the Correct Number for Each Word

❶ twenty-two	20	22	12
❷ fifty-seven	57	67	07
❸ one	1	03	19
❹ sixty	06	60	16
❺ forty-eight	48	80	84
❻ seventy-nine	70	79	97
❼ fifty-three	52	58	53
❽ twenty	20	23	02
❾ zero	01	100	0
❿ thirty-three	33	30	13

TABLE OF NINE

Nine	Nine
$9 \times 1 = 9$	$9 \times 1 =$
$9 \times 2 = 18$	$9 \times 2 =$
$9 \times 3 = 27$	$9 \times 3 =$
$9 \times 4 = 36$	$9 \times 4 =$
$9 \times 5 = 45$	$9 \times 5 =$
$9 \times 6 = 54$	$9 \times 6 =$
$9 \times 7 = 63$	$9 \times 7 =$
$9 \times 8 = 72$	$9 \times 8 =$
$9 \times 9 = 81$	$9 \times 9 =$
$9 \times 10 = 90$	$9 \times 10 =$
$9 \times 11 = 99$	$9 \times 11 =$
$9 \times 12 = 108$	$9 \times 12 =$

Circle the correct answer:

$9 \times 1 =$ 9 1 10	$9 \times 6 =$ 45 54 56	$9 \times 3 =$ 24 27 28
$9 \times 7 =$ 63 64 65	$9 \times 2 =$ 18 16 14	$9 \times 10 =$ 90 110 99
$9 \times 12 =$ 108 120 125	$9 \times 9 =$ 63 81 72	$9 \times 5 =$ 40 55 45
$9 \times 8 =$ 75 70 72	$9 \times 11 =$ 77 99 88	$9 \times 4 =$ 36 35 32

NUMBER NAMES FROM 91-100

Number Name	
Ninety one	
Ninety two	
Ninety three	
Ninety four	
Ninety five	
Ninety six	
Ninety seven	
Ninety eight	
Ninety nine	
Hundred	

DELHI PUBLIC SCHOOL, DHANBAD

Monthly Assignment (February)

Class - Prep Subject - Conversation

Name - _____ Sec- _____


HEALTH AND HYGIENE

- We should take bath everyday.
- We should trim our nails regularly.
- We should always wear clean clothes.
- We should always eat healthy food.
- We should not eat junk food.
- We should drink plenty of water.
- We should exercise regularly.
- We should brush our teeth twice a day.
- We should wash our hands before and after meals.
- We should take proper sleep.
- We should keep our surroundings neat and clean.

Full text: 0



DRINK LOTS OF
WATER



EAT FRUITS



BRUSH
DAILY



CLEAN



EAT HEALTHY
FOOD

EXERCISE
DAILY



WASH
HANDS



BATH DAILY

HEALTH
AND
HYGIENE

PARY RUSTAGI
30
29

ENGLISH MONTHLY ASSIGNMENT (FEBRUARY 2024) CLASS - PREP

NAME- SECTION -

1) Tick the correct answer -

Are these ice cream?



YES

NO

Is this healthy for you?



YES

NO

Are these cookies?



YES

NO

Is this unhealthy for you?



YES

NO

Are these popcorn?



YES

NO

Is this unhealthy for you?



YES

NO

2) Look at the picture and Circle the correct option.



fl

tr

fr



fl

sl

sp



gr

pr

dr



tr

gr

fr



ch

sk

cl



str

dr

cr

3) Answer the following with "YES" or "NO".

1. Is this a mango?

.....



2. Is this a bus?

.....



3. Is this a girl?

.....



4. Is this a book?

.....



5. Is this a toothbrush?

.....



4. Fill in the missing letters and complete the word. -



ush



ee



op



ock



__ice



__oth



__ed



__eeve

5. Fill in the box with the missing letters.-

fr

or

fl



ozen



ag



uit



og



ower




y

gr

or

gl



obe



ove



ape



ocery



ass



ass

DELHI PUBLIC SCHOOL


Hindi Monthly Assignment

Name.....Sec.....

1.

आ (I) की मात्रा वाले शब्द - चित्र देख कर लिखें

4




2.

ई (I) की मात्रा वाले शब्द - चित्र देख कर लिखें



30



3.

आ (i) की मात्रा वाले शब्द को सही चित्र से मिलायें

	<div>कार</div>	
	<div>आठ</div>	
	<div>आम</div>	
	<div>हाथ</div>	
	<div>अनार</div>	
	<div>बादल</div>	
	<div>गाजर</div>	
	<div>जहाज</div>	
	<div>टमाटर</div>	
	<div>जानवर</div>	

4. ए की मात्रा लगाएं

	कला
	ठला
	पड़
	तल
	सब

5.

इ (ि) की मात्रा – सही शब्द पर गोला लगाओ

	दमाग	दिमाग	दीमाग
	तील	तल	तिल
86	छियासी	छीयासी	छयासी
	निसान	निशाना	नशाना
	दिप	दीप	दीपा
	बीच्छू	बीच्छु	बिच्छू

6.

ए (ं) की मात्रा वाले शब्द - चित्र देख कर लिखें

		
<div></div>	<div></div>	<div></div>
		
<div></div>	<div></div>	<div></div>
13		
<div></div>	<div></div>	<div></div>