

**DELHI PUBLIC SCHOOL , DHANBAD**  
**MONTHLY ASSIGNMENT (SEPTEMBER – 2023)**

**SUBJECT – HINDI**

**Name : ..... Class : 1 ..... Roll No : .....**

**प्र 1. चित्रों के नाम लिखो –**

**गोभी टोकरी घोड़ा कोयल रोटी**



\_\_\_\_\_



\_\_\_\_\_



\_\_\_\_\_



\_\_\_\_\_



\_\_\_\_\_

प्र 2. वर्णों को जोड़कर लिखो -

न + ो + ट = .....

श + ो + र = .....

ज + ो + क + र = .....


झ + ो + प + ड + ी = .....

व + ो + ट + र = .....

म + न + ो + ह + र = .....

ख + र + ग + ो + श = .....

प्र 3. सही शब्द पर गोला लगाओ –



गेला

गोला

गौल



खोपड़ी

खोपडि

खोपढी



कोला

कोअला

कोयला



टोकरि

टोकरी

टोकडा



गोभि

गौभी

गोभी

प्र 4. सही शब्दों का मिलान करो -

एक

अनेक



तितली

बकरियाँ



गिलहरी

चिड़ियाँ



बकरी

तितलियाँ



चिड़िया

कलियाँ



कली

गिलहरियाँ

NAME \_\_\_\_\_

Roll No. \_\_\_\_\_

SEC - \_\_\_\_\_.

## **Write have or has**

I \_\_\_\_\_ a fish.

You \_\_\_\_\_ two dogs.

He \_\_\_\_\_ a blue car.

Mary \_\_\_\_\_ a bike.

We \_\_\_\_\_ a computer.

They \_\_\_\_\_ pencils.

Fred \_\_\_\_\_ a X-Box

John and Mary \_\_\_\_\_ a cat.

Peter and Fred \_\_\_\_\_ a hamster

My dad \_\_\_\_\_ a red ball.

Choose from the following words to fill the gaps in the sentences.



fish

sheep

shed

shop

shut

1. The ..... were on the hills.
2. The shop was ..... for the day.
3. Mum went to the ..... to get some ham.
4. There were six ..... in the tank.
5. Dad got his toolbox from the .....



Draw two pictures to include the words in the box.

fish ship shell

shop cash dish

# True or false?

Sandt eller falsk?

True

False




This is a dog



This is a bird



This is a snake




This is a parrot



This is a horse



This is a rabbit



This is a bird



This is a hamster



Choose from these  
verbs:  
sitting, chases, pick,  
eat, mixes, came, walk,  
told, looks, reads

Use a verb to complete each sentence.

1) The cat \_\_\_\_\_ the mouse.

2) The painter \_\_\_\_\_ the colors.

3) The children \_\_\_\_\_ to the park.

4) The slide \_\_\_\_\_ slippery.



5) The teacher \_\_\_\_\_ the class a story.

6) Mom \_\_\_\_\_ the kids to \_\_\_\_\_ up their toys.

7) My friend \_\_\_\_\_ to my house after school.

8) Cathy and Emily \_\_\_\_\_ apple pie while \_\_\_\_\_ at  
the table.

---



# Use of 'Is, Am and Are'

## A. Choose the correct option:

1. Karan \_\_\_\_\_ my friend.  
a) is b) are c) you
2. Roses \_\_\_\_\_ beautiful.  
a) are b) am c) is
3. I \_\_\_\_\_ a singer.  
a) you b) for c) am
4. This \_\_\_\_\_ my bag.  
a) are b) am c) is
5. We \_\_\_\_\_ students.  
a) are b) am c) is



## B. Fill in the blanks with 'am', 'is' or 'are':

1. We \_\_\_\_\_ players.
2. You \_\_\_\_\_ a singer.
3. These \_\_\_\_\_ pretty flowers.
4. She \_\_\_\_\_ my sister.



**Delhi Public School Dhanbad**

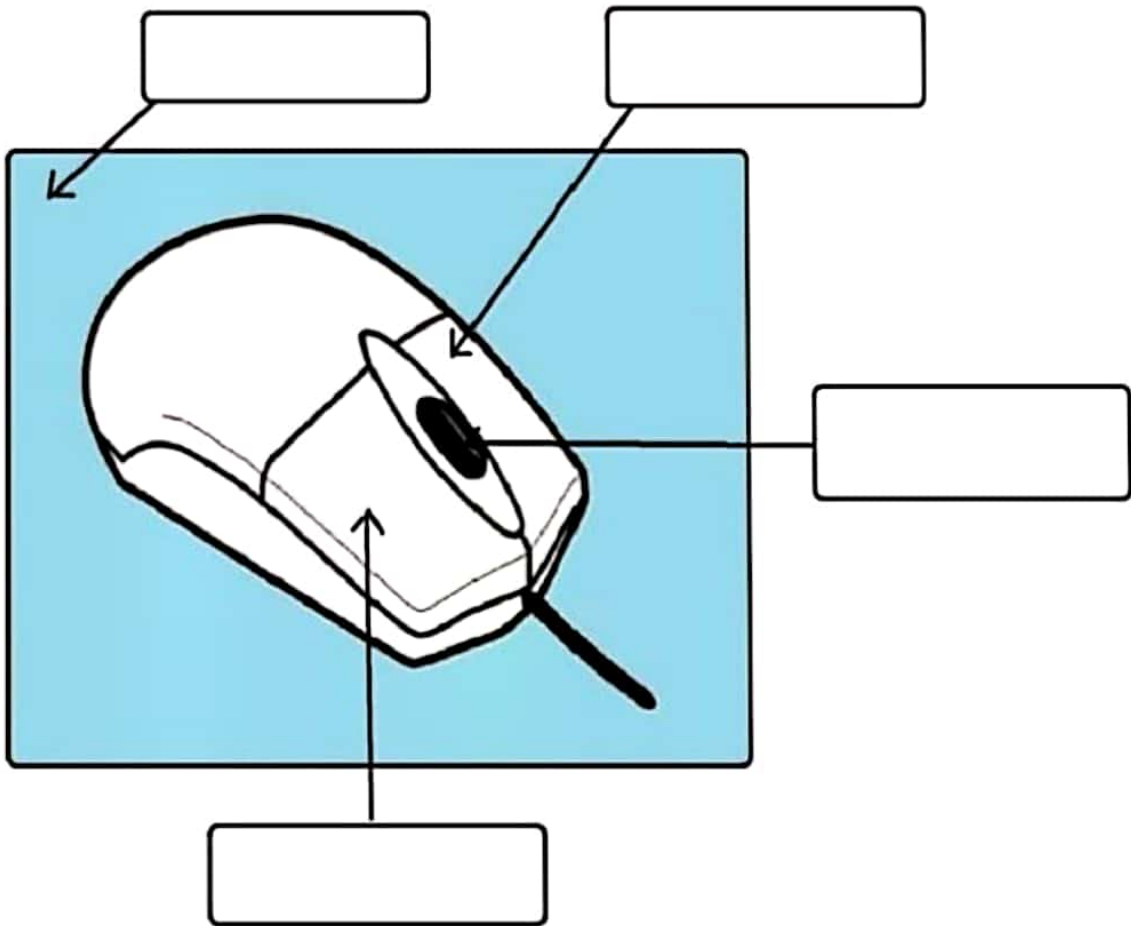
**Computer Assignment Class – 1 September 23**

Name - \_\_\_\_\_.

Class / Sec - \_\_\_\_\_.

**Computer Mouse - Activity**

Label the parts of computer mouse and color it.



. Match the following:



Listen to music



Type a document



Play games

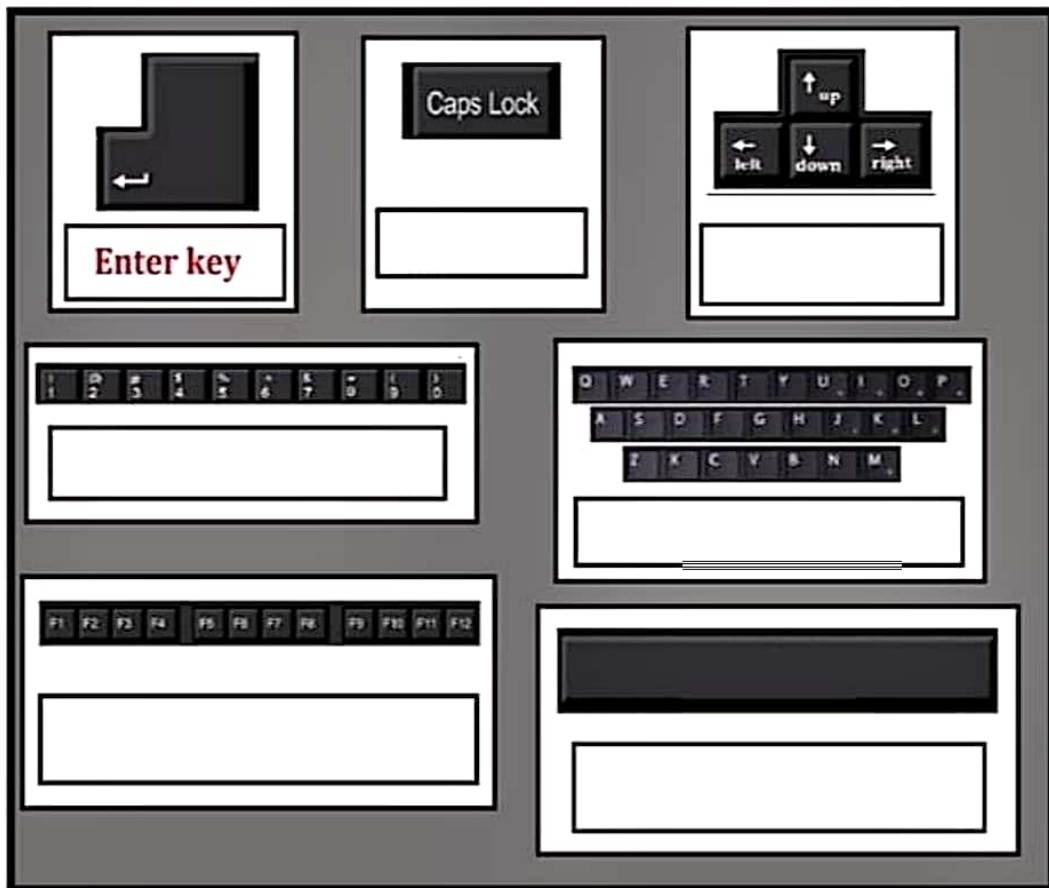
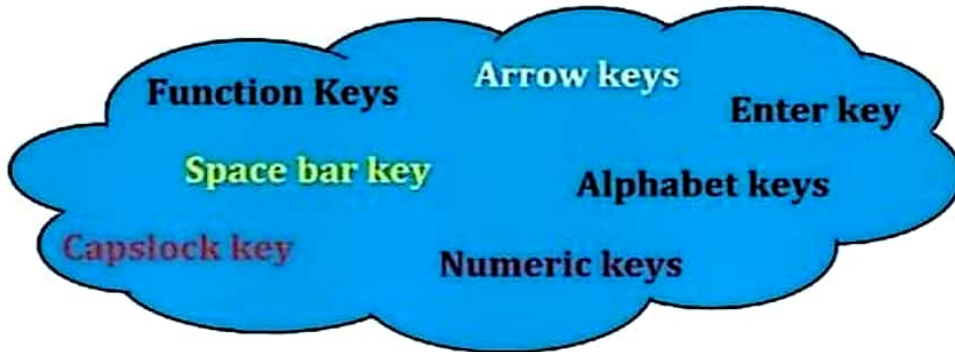


Send Email



Browse Internet

Label the following keyboard parts using the given cloud.



---

**Write computer or human .**

Who can only work when instructed? <input type="text"/>	<input type="text" value="Human"/> <input type="text" value="Computer"/>
Who need food to get energy? <input type="text"/>	<input type="text" value="Human"/> <input type="text" value="Computer"/>
Who needs electricity? <input type="text"/>	<input type="text" value="Human"/> <input type="text" value="Computer"/>
Who have feeling? <input type="text"/>	<input type="text" value="Human"/> <input type="text" value="Computer"/>
Who do many things at the same time? <input type="text"/>	<input type="text" value="Human"/> <input type="text" value="Computer"/>

# DELHI PUBLIC SCHOOL, DHANBAD

## MATHS MONTHLY ASSIGNMENT (SEPTEMBER- 2023)

Name \_\_\_\_\_

class 1

Sec- \_\_\_\_\_

Q1. Write the number names of:-

a) 23 \_\_\_\_\_

b) 16 \_\_\_\_\_

c) 35 \_\_\_\_\_

d) 47 \_\_\_\_\_

e) 58 \_\_\_\_\_

f) 31 \_\_\_\_\_

g) 37 \_\_\_\_\_

h) 53 \_\_\_\_\_

i) 10 \_\_\_\_\_

j) 28 \_\_\_\_\_

k) 69 \_\_\_\_\_

l) 44 \_\_\_\_\_

m) 61 \_\_\_\_\_

Q2. Complete the Tables.

a)  $5 \times 7 =$

f)  $2 \times 8 =$

b)  $3 \times 6 =$

g)  $4 \times 10 =$

c)  $5 \times 2 =$

h)  $6 \times 4 =$

d)  $3 \times 3 =$

i)  $4 \times 5 =$

e)  $2 \times 10 =$

j)  $6 \times 8 =$

Q3. Add the following

a)  $\begin{array}{r} \text{T O} \\ \text{O} \\ 46 \\ + 34 \\ \hline \end{array}$

b)  $\begin{array}{r} \text{T O} \\ \text{O} \\ 29 \\ + 48 \\ \hline \end{array}$

c)  $\begin{array}{r} \text{T O} \\ \text{O} \\ 55 \\ + 35 \\ \hline \end{array}$

d)  $\begin{array}{r} \text{T O} \\ \text{O} \\ 87 \\ + 07 \\ \hline \end{array}$

e) T O

$$\begin{array}{r} \bigcirc \\ 6 \quad 8 \\ +1 \quad 2 \end{array}$$

f) T O

$$\begin{array}{r} \bigcirc \\ 4 \quad 5 \\ +4 \quad 6 \end{array}$$

Q4. Subtract the following

a) T O

$$\begin{array}{r} \bigcirc \quad \bigcirc \\ 7 \quad 5 \\ -2 \quad 8 \end{array}$$

d) T O

$$\begin{array}{r} \bigcirc \quad \bigcirc \\ 4 \quad 2 \\ -1 \quad 9 \end{array}$$

b) T O

$$\begin{array}{r} \bigcirc \quad \bigcirc \\ 5 \quad 0 \\ -2 \quad 5 \end{array}$$

e) T O

$$\begin{array}{r} \bigcirc \quad \bigcirc \\ 5 \quad 3 \\ -3 \quad 8 \end{array}$$

c) T O

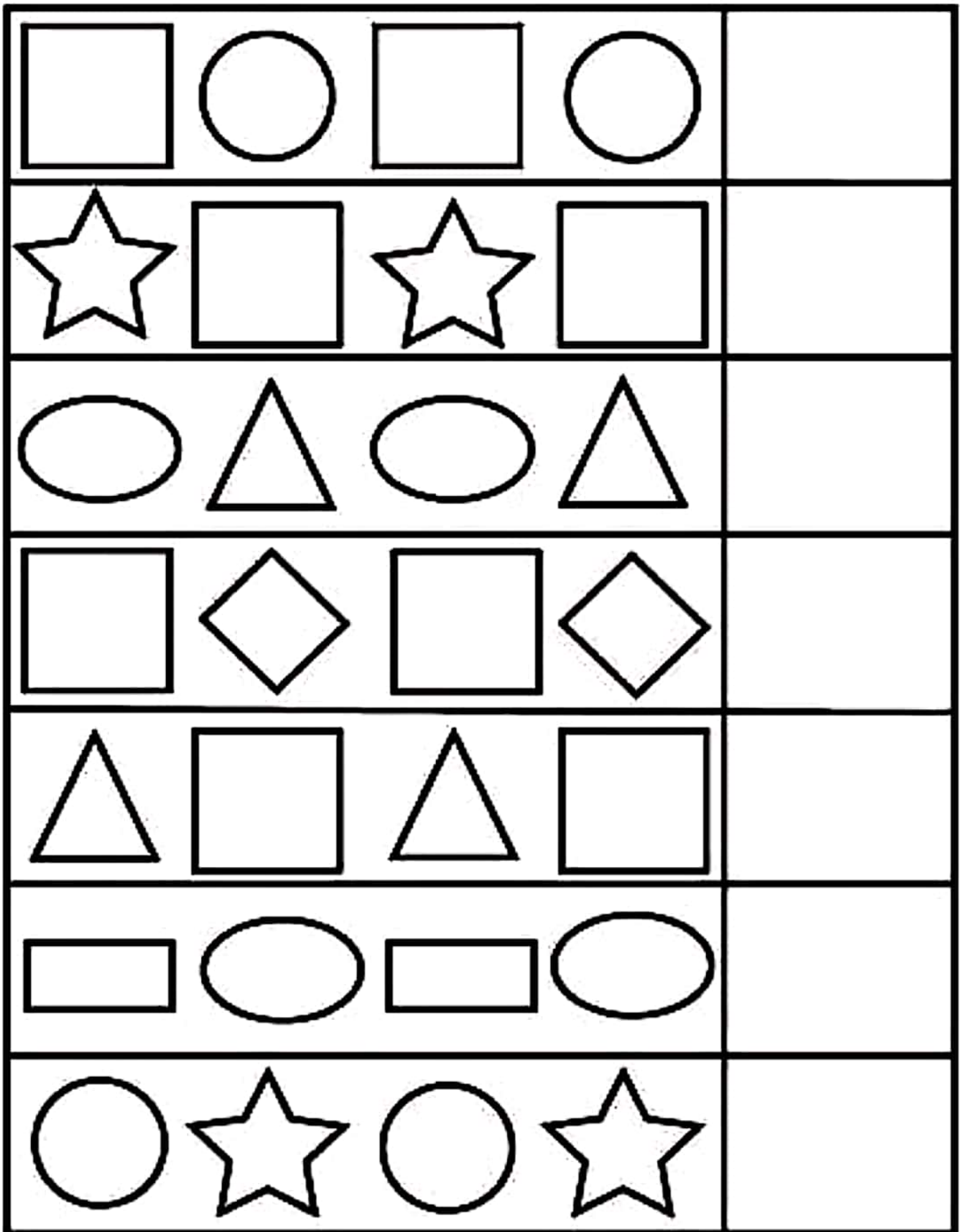
$$\begin{array}{r} \bigcirc \quad \bigcirc \\ 4 \quad 4 \\ -1 \quad 7 \end{array}$$

f) T O

$$\begin{array}{r} \bigcirc \quad \bigcirc \\ 6 \quad 7 \\ -4 \quad 9 \end{array}$$



Q5. Draw` the shape that comes next.



DELHI PUBLIC SCHOOL DHANBAD

EVS Monthly Assignment (September)

Name \_\_\_\_\_ Class 1 Sec \_\_\_\_\_ Roll no. \_\_\_\_\_

1. Identify the given pictures, choose the correct option from the box and write in the given space below the pictures.

Well	Rain	River	Sea	Lake
Drinking	Washing clothes	Cleaning	Cooking	Washing Utensils



2. Colour the Summer clothes in Yellow and Winter clothes in Blue.












3. Circle these sources of water from the word box.

LAKE, RIVER, POND, WELL, STREAM, RAIN, OCEAN

A	R	I	V	E	R	G
H	L	J	T	A	N	K
W	E	L	L	I	N	L
T	P	O	N	D	C	Q
I	L	A	K	E	V	U
P	G	Q	E	A	T	J
O	C	E	A	N	R	T
L	M	R	A	I	N	G
G	S	T	R	E	A	M
Q	E	K	N	W	E	V

4. Draw a line to match the clothes and weather.

5. Match the pictures to the words.



bathroom



kitchen



dining room



bedroom



hallway



garden