

DELHI PUBLIC SCHOOL, DHANBAD

February Computer Assignment

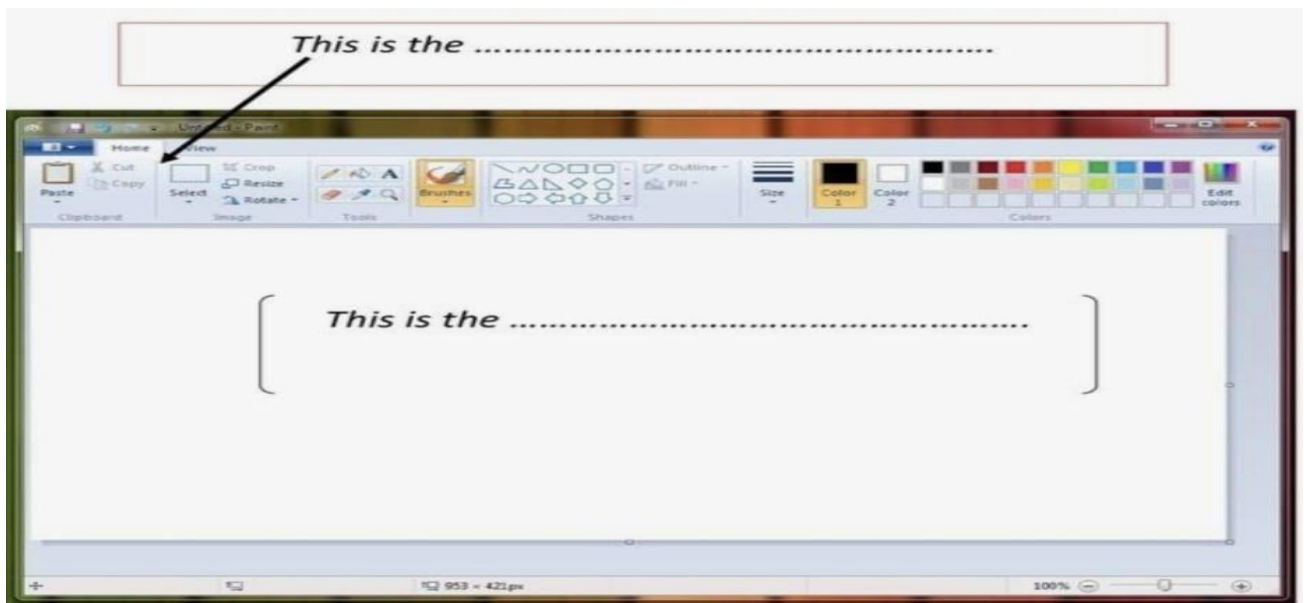
Subject :- Computer

Class :- 1

Name : _____

Date : _____

i. Name the parts of the MS Paint window



ii. Name the following MS Paint tools.



iii. Fill in the blanks

1. The _____ tool is used to draw freehand lines. (Pencil / Eraser)
2. We use the _____ tool to fill color in a shape. (Color / Fill with color)
3. The _____ tool is used to erase mistakes. (Eraser / Pencil)
4. The white blank area where we draw is called the _____.
(Drawing area / Ribbon)
5. The tool used to draw a straight line is the _____ tool. (Line / Curve)

iv. Answer the following questions

1. Which tool is used to draw freehand?
Ans _____
2. Which tool is used to erase mistakes?
Ans _____
3. Where do you find the colors?
Ans _____
4. Which tool is used to fill color in a shape?
Ans _____
5. The _____ is the white area where we draw?






v. Match the following tools with their function.

- | | |
|------------------|------------------|
| • Pencil Tool | Draws boxes |
| • Eraser Tool | Selects colors |
| • Rectangle Tool | Draws thin lines |
| • Color Palette | Removes mistakes |

vi. Write True or false

1. We cannot draw shapes in MS Paint. ☐
2. The “color box” is used to select color. ☐
3. MS Paint is used for writing letters. ☐
4. The pencil tool is used for freehand drawing. ☐
5. the “curve” tool is used to draw straight lines only. ☐

vii. Write the names of following shapes

DELHI PUBLIC SCHOOL, DHANBAD
MONTHLY ASSIGNMENT OF THE MONTH OF
FEBRUARY - 2026

SUBJECT-ENVIRONMENTAL STUDIES

STD : I

NAME : _____

SEC : _____

I. Fill in the blanks :-

(a) The leaves of many trees turn _____
in _____ season.

(b) We use _____ , _____ and
_____ in summers.

(c) The rainy season is also called _____.

(d) The weather is very pleasant in _____
Season.

(e) Hot and dry winds are called _____.

(f) The moon is _____than the sun.

(g) Stars _____ in the sky at night.

II. State True (✓) or false (X) :-

- (a) We work at night and sleep during the day.**
- (b) Days are hot in summer.**
- (c) There is snowfall in some places in winter.**
- (d) Moon is bigger than the sun.**
- (e) Temperature tells us how hot or cold a day is.**

III. Give short answers :-

1. Which is the brightest star in the sky ?

Ans :- _____

2. Whose light does the moon reflect ?

Ans. _____

3. What causes change in weather ?

Ans. The _____ **and**
_____.


IV. Match the columns :-

- | | |
|--------------------|----------------------|
| (a) Rain | (1) Drinking |
| (b) Sun | (2) Heaters |
| (c) Water | (3) big ball of fire |
| (d) Winter | (4) Raincoat |
| (e) Butterfly | (5) Summer season |
| (f) Cotton Clothes | (6) nectar |

V. Name the objects in the sky and draw them :-

Cont.....

Draw objects found in the sky -













DELHI PUBLIC SCHOOL, DHANBAD

English assignment (February 2026)


Name _____ Class- I Section _____

A) Fill in the blanks with these or those.

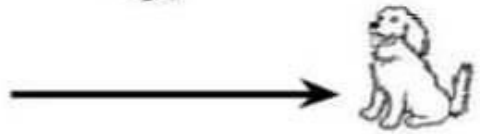
1. _____ are cats. → 
2. _____ are dogs. → 
3. _____ are apples. → 
4. _____ are bags. → 
5. _____ are rockets. → 
6. _____ are ducks. → 
7. _____ are kites. → 
8. _____ are hats. → 
9. _____ are boys. → 
10. _____ are houses. → 

B) Fill in the blanks with this or that.


1. _____ is a cat.



2. _____ is a dog.



3. _____ is an apple.



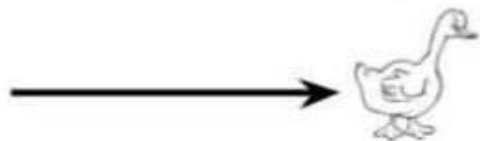
4. _____ is a bag.



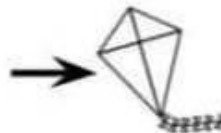
5. _____ is a rocket.



6. _____ is a duck.



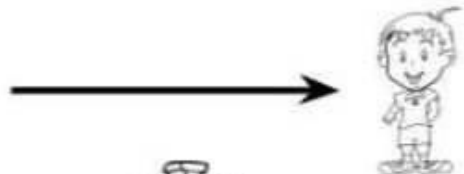
7. _____ is a kite.



8. _____ is a hat.



9. _____ is a boy.



10. _____ is a house.



C) Complete the sentences using the correct Prepositions: In, On, Under.

1. The cat is _____ the table.



2. The book is _____ the desk.



3. The ball is _____ the box.



4. The toy is _____ the bed.



6. The spoon is _____ the bowl.



7. The blanket is _____ the bed.



D) Read the passage and answers the question:-

Ben

Ben has two pets. He has 2 dogs. His dogs are Tim and Mutt. Tim is black and Mutt is brown. Ben takes them to the park. He runs and plays with them. They have fun.



1) Who is the character in the story?

A.
.....

2) What kind of pets does Ben have?

A.
.....

3) What are the names of Ben's dogs?

A.
.....

4) Pick out four: (from the passage)

Noun

Verb







Adjectives

DELHI PUBLIC SCHOOL, DHANBAD

Hindi Monthly Assignment (February 2026-27)

Name : _____ Class : 1 _____

प्र क) मिलान करो -



५

४

३

२

१

०

प्र ख) खाली स्थान भरो -

1.सितंबर	_____	नवंबर
2.मार्च	अप्रैल	_____
3.सोमवार	_____	बुधवार
4.जनवरी	_____	मार्च
5.अप्रैल	मई	_____
6.बुधवार	_____	शुक्रवार
7._____	सितंबर	अक्टूबर
8._____	सोमवार	मंगलवार

प्र ग) विलोम शब्द -

ऊपर x _____

आगे x _____

अच्छा x _____

दिन x _____

जीत x _____

सच x _____

गंदा x _____

बड़ा x _____

जीत x _____

काला x _____

प्र घ) एक - अनेक

. बेटा ↔ _____

. लड़का ↔ _____

. ताला ↔ _____

. तारा ↔ _____

. सारा ↔ _____

. हमारा ↔ _____

. मेरा ↔ _____

. जूता ↔ _____

प्र ड) नीचे दिए गए गद्यांश को पढ़कर पूछे गए प्रश्नों के उत्तर दीजिए -

एक बार एक छोटी सी तितली बाग में
इधर - उधर फूलों पर मँडरा रही थी।
तितली के पंख बहुत कोमल और रंग -
बिरंगे थे। उस के छः पैर थे। तितली
फूलों का रस पी रही थी। तितलियाँ बच्चों
को बहुत अच्छी लगती हैं। तितलियाँ
बागों की शोभा बढ़ाती हैं। सचमुच,
तितली बाग की रानी कहलाती है।



तितली कहाँ मँडरा रही थी?

तितली के पंख कैसे होते हैं?

बाग की रानी कौन कहलाती है?

तितली के कितने पैर थे?

Delhi public school, Dhanbad

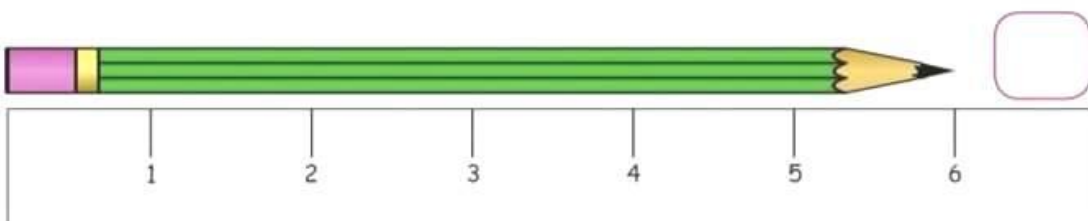
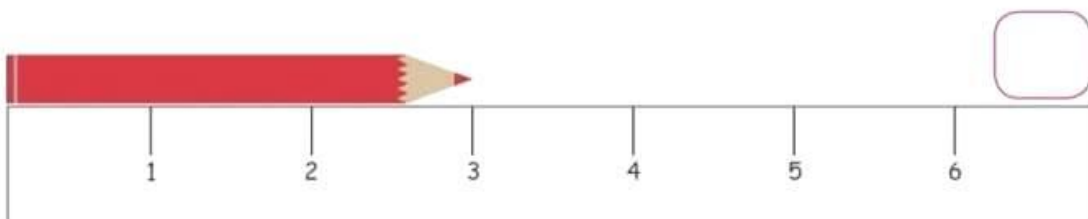
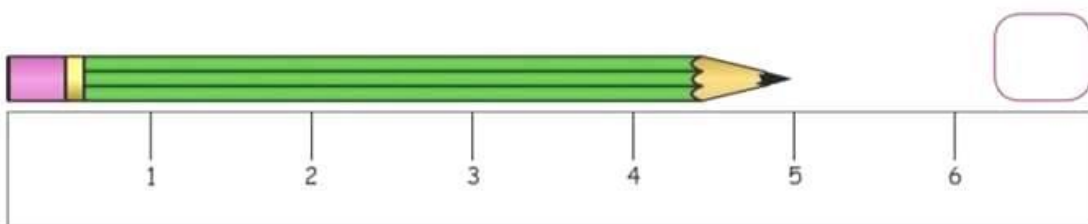
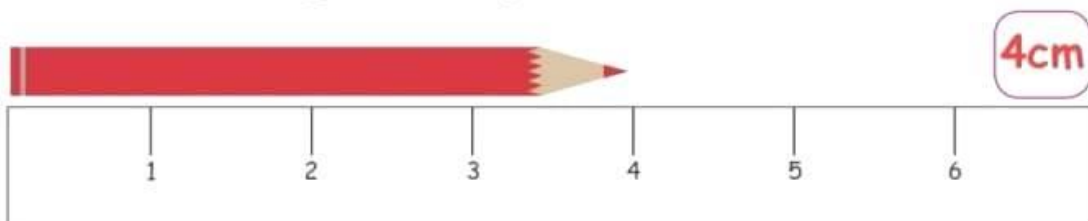
MATHS ASSIGNMENT

FEBRUARY (2025-26)

Name _____ Class- 1__ Section__

Measure the length of the object:











1. Measure the length of each pencil (in cm.) and write in the box.



2.

13 TIMES TABLE


Choose the correct answer.

 $13 \times 5 =$ <div><input type="text" value="65"/></div> <div><input type="text" value="45"/></div>	 $13 \times 2 =$ <div><input type="text" value="26"/></div> <div><input type="text" value="39"/></div>
 $13 \times 10 =$ <div><input type="text" value="91"/></div> <div><input type="text" value="130"/></div>	 $13 \times 9 =$ <div><input type="text" value="117"/></div> <div><input type="text" value="81"/></div>
 $13 \times 1 =$ <div><input type="text" value="13"/></div> <div><input type="text" value="18"/></div>	 $13 \times 7 =$ <div><input type="text" value="26"/></div> <div><input type="text" value="91"/></div>
 $13 \times 6 =$ <div><input type="text" value="54"/></div> <div><input type="text" value="78"/></div>	 $13 \times 4 =$ <div><input type="text" value="65"/></div> <div><input type="text" value="52"/></div>
 $13 \times 3 =$ <div><input type="text" value="39"/></div> <div><input type="text" value="13"/></div>	 $13 \times 8 =$ <div><input type="text" value="104"/></div> <div><input type="text" value="130"/></div>

3.

Tick the object as directed.

Thinnest



Shortest



Lightest



4.

