

DELHI PUBLIC SCHOOL, DHANBAD

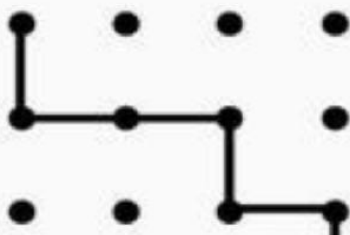
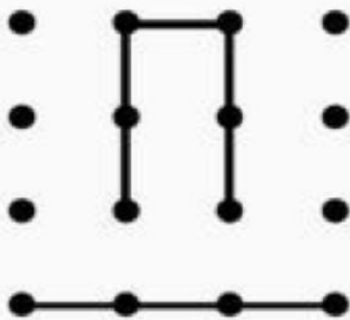
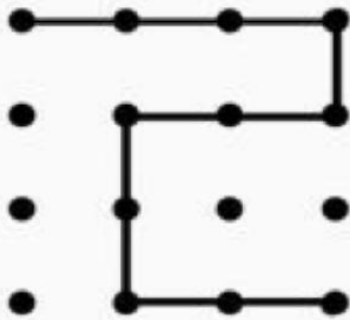
COMPUTER ASSIGNMENT (JANUARY) 2024-2025

NAME _____ CLASS – 1 _____ ROLL NO. _____

CODING

Q1.




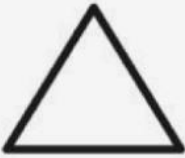
Carefully examine the given patterns.
Draw the same patterns on the empty tables on the side.




Q2.










At the first table, shape is given for each letter.
In the second table, draw and paint the shapes corresponding
to the letters.


A	
B	
C	
D	


B	
D	
A	
C	


Q3. Let's examine the example. Let's show the row and column of the figure. And write the coordinates according to the example.


	1	2	3	4	5	6	7
A							
B							
C							
D							
E							
F							

 : 1 , B

 : ,

 : ,

 : ,

 : ,

 : ,

DELHI PUBLIC SCHOOL

MONTHLY ASSIGNMENT (JANUARY 2025)

SUB : ENGLISH

STD : I

NAME : _____

SEC : _____

I . Write the names of five(5) flowers and their colours :-

flowers

colours

1.

1.

2.

2.

3.

3.

4.

4.

5.

5.

II. Write the names of creatures that make these sounds :-

a. Buzz ! Buzz ! _____

b. Quack ! Quack ! _____

c. Caw ! Caw ! _____

d. Meow ! Meow ! _____

e. Cheep ! cheep ! _____

III. Match the opposites :-

Close

new

Day

light

Old

wet

Small

open

Inside

night

Long

stop

Dry

big

Sad

outside

Heavy

short

Start

happy

IV. Draw and colour 4 (four) pictures whose name begins with a vowel sound . Also name the pictures.

1. _____ 2. _____

3. _____ 4. _____

V. Write the correct describing word

a. A _____ rose.

b. A bunch of _____ grapes.

c. A _____ man.

d. _____ hair.

e. A _____ car.

Big, long

red,

Sweet,

Fat

DELHI PUBLIC SCHOOL, DHANBAD

HINDI ASSIGNMENT (JANUARY) 2024-25

Name _____ Class1 Sec. _____ Roll no. _____

(क) निम्नलिखित शब्दों के उल्टे अर्थवाले शब्द लिखो।

- 1) दिन X
- 2) मीठा X
- 3) ऊँची X
- 4) मोटी X
- 5) बड़ा X
- 6) सफेद X
- 7) आगे X
- 8) ऊपर X
- 9) दाएँ X

(ख) निम्नलिखित शब्दों के दो-दो पर्यायवाची लिखो।

- 1) आग,
- 2) आँख,
- 3) जल,
- 4) राजा,
- 5) सूर्य,
- 6) आकाश,
- 7) पृथ्वी,
- 8) घर,

(ग) विशेषण चुनकर उन्हें रेखांकित कीजिए।

नाटा	घड़ी	लंबा	खट्टा	पंखा	कमीज
हरि	घास	चालाक	दही	सुंदर	सच्चा
हीरा	असली	औरत	वफादार	सिपाही	पाँच

(घ) रेखा खींचकर सही जोड़े मिलाइए –

- | | |
|---------|-----------|
| 1) काली | a. तोता |
| 2) लाल | b. आसमान |
| 3) ऊनी | c. सेब |
| 4) हरा | d. वस्त्र |
| 5) नीला | e. भैंस |

(ङ.) वाक्य बनाओ –

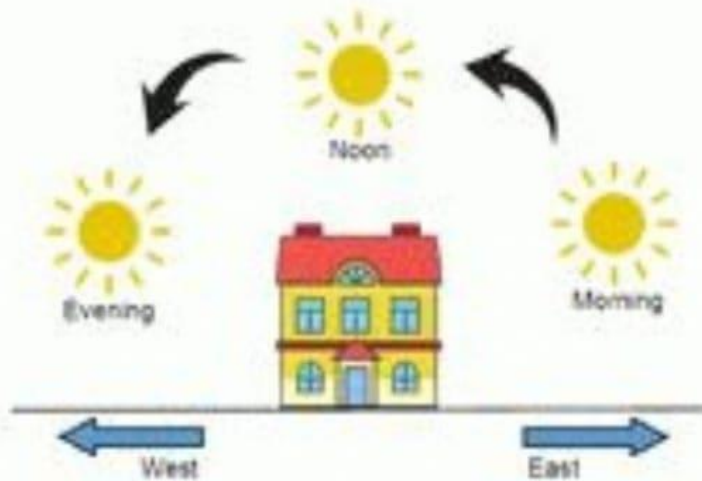
- | | | |
|----------|---|-------|
| (1) आम | – | _____ |
| (2) भैया | – | _____ |
| (3) छः | – | _____ |
| (4) रंग | – | _____ |
| (5) मॉल | – | _____ |

DELHI PUBLIC SCHOOL, DHANBAD

EVS ASSIGNMENT (JANUARY) 2024-2025

NAME _____ CLASS – 1 _____ ROLL NO. _____

Q1.



Word bank:

morning evening sun moon afternoon

Every _____, the sun rises in the east.

By the _____, the sun is high in the sky.

In the _____, the sun sets in the west.

At night, we cannot see the _____.

We see the _____ instead.

Q2.



Stop

Wait

Go

The red light says _____

The yellow light says _____

The green light says _____

Q3. MATCH THE FOLLOWING:

Road Sign



Children crossing

Pedestrian crossing

Traffic light

Turn right

Stop

No entry

Turn left

Go straight



Q4. COLOUR IT:

Earth



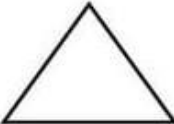
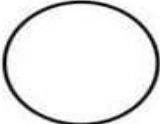



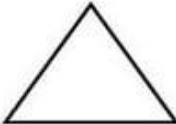






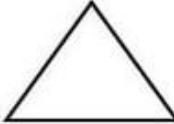



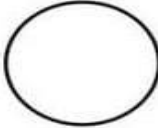

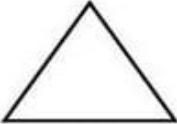






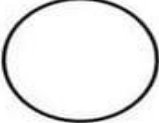


DELHI PUBLIC SCHOOL, DHANBAD

Maths Monthly Assignment (January'2025)

Name: _____ Class :1 _____ Roll No : _____

Q1. Identify and colour the correct shape –

Circle				
Rectangle				
Square				
Star				
Heart				
Triangle				
Oval				

Q2. Mixed Tables –

$12 \times 4 = \underline{\hspace{2cm}}$	$13 \times 8 = \underline{\hspace{2cm}}$
$11 \times 9 = \underline{\hspace{2cm}}$	$10 \times 6 = \underline{\hspace{2cm}}$
$9 \times 8 = \underline{\hspace{2cm}}$	$8 \times 7 = \underline{\hspace{2cm}}$
$7 \times 3 = \underline{\hspace{2cm}}$	$6 \times 5 = \underline{\hspace{2cm}}$
$4 \times 2 = \underline{\hspace{2cm}}$	$5 \times 5 = \underline{\hspace{2cm}}$
$3 \times 8 = \underline{\hspace{2cm}}$	$2 \times 6 = \underline{\hspace{2cm}}$
$13 \times 4 = \underline{\hspace{2cm}}$	$12 \times 2 = \underline{\hspace{2cm}}$

Q3. Write the number names –

100- _____

121 - _____

117 - _____

130 - _____

Q4. Write the value of each coin and currency note –



₹

₹



₹

₹



₹

₹

Q5. Go through the calendar of December'2019 given below and answer the questions –

December						2019
Mon	Tue	Wed	Thu	Fri	Sat	Sun
						1
2	3	4	5	6	7	8
9	10	11	12	13	14	15
16	17	18	19	20	21	22
23	24	25	26	27	28	29
30	31					

a. The day on which Christmas falls is _____.

b. 29th December is a _____.

c. How many Thursdays are there in the given calendar? _____

d. What day on the calendar is December 23? _____

e. The PTM is on second Saturday of December. What is the date?
