

HALF YEARLY REVISION ASSIGNMENT

CLASS V

SUB: SCIENCE

A. Name the following:-

1. The muscles which are under our control.
2. The disease caused due to the deficiency of Vitamin D.
3. It helps the body to absorb Calcium .
4. The seeds that have two cotyledons are called.
5. The construction along river banks to protect flooding of fields.

B. Correct the given statement:-

1. The skeleton is made up of 234 bones.
2. Infectious diseases are also called non- communicable diseases.
3. Femur is the shortest bone in our body..
4. The vertebral column has 33 small bones.
5. Physical exercise makes our body strong but unhealthy.

C. Define the following terms:-

1. Soil Conservation
2. Pasteurisation
3. Pollination
4. Vegetative Reproduction
5. Vaccination
6. Communicable Diseases
7. Monocotyledons

D. Draw, label and color the following diagrams:-

1. Parts of a Flower
2. Rib Cage
3. Types Of Muscles
4. A rich source of :- a. Body- building Food, b. Iodine, c. Vitamin D

E. Give reasons for the following:-

1. Good quality seeds should be selected for sowing.
2. The last two pairs of ribs are called floating ribs.
3. Carbohydrates are also known as energy-giving food.
4. Birds have hollow bones.
5. Seeds and fruits are scattered away from the parent plant.

F. Competency Based Questions:-

1. _____ : roots ::: sugarcane : stem.
2. Shoulder Joint : Movable Joint :: _____ : Immovable Joints.
3. Ploughing of hill sides : Soil Erosion :: _____ : Soil Conservation.
4. _____ : Calcium :: Goiter: Iodine.
5. Deficiency of Vitamin C : Scurry :: _____ : Night Blindness.

Delhi Public School, Dhanbad

Half Yearly Revision Assignment

Class- 5

Subject- Hindi

1. निम्नलिखित प्रश्नों के उत्तर दें।

- क. सम्राट ने शिशुपाल को दरबार में क्यों बुलाया?
- ख. अंकित ने रिहान के बेटे को क्यों बचाया?
- ग. बुद्धि स्त्री ने किस सच्चा हीरा बताया और क्यों?
- घ. करण ने जंगल में ऐसा क्या देखा कि वह पसीना- पसीना हो गया?
- ङ. रंजन कैसा लड़का था?

2. शब्दार्थ लिखिए।

प्रगति, विशेष, स्वदेश, सौभाग्य, घमासान, साहसी, अचंभा, प्रशंसा, हिदायत, बाधा, निपुण।

3. कविता की पंक्तियां पूरी कीजिए।

- क. हम.....हैं.....साहसी
आगे बढ़ते जाएंगे
.....सोच और.....से अपने
नया.....इतिहास रचाएंगे।
धुन के..... मन के सच्चे
मां हम छोटे-छोटे बच्चे,
विद्या, बुद्धि..... दे दो
करें.....हम अच्छे अच्छे।
- ख. हैं.....तेते जगह में एक ही
एक ही.....उन्हें है पालता
रात में उनपर..... चांद भी,
..... ही सी चांदनी है डालता।

4. किसने किससे कहा?

- क. "आप चिंता न कीजिए मेरे रहते कोई आपका बाल भी बांका नहीं कर सकता।"
- ख. "बस दो मिनट में उठता हूं।"

5. निम्नलिखित भाषा के लिपियों के नाम बताएं।

मराठी, पंजाबी, अंग्रेजी, संस्कृत

6. सही गलत का निशान लगाइए।

वर्णों के सार्थक मेल को लिपि कहते हैं।

रूढ़ शब्द दो या दो से अधिक शब्दों के मेल से बने हैं।

7. रेखांकित संज्ञा शब्दों के भेद बताएं।

क. हमें ईमानदारी से कार्य करना चाहिए।

ख. जापान एक विकसित देश है।

8. दिए गए शब्दों के तत्सम शब्द लिखें।

आग घी सांप नींद

9. लिंग बताएं।

श्रीमती पुजारी पंडित कवयित्री

10. भाववाचक संज्ञा बनाएं।

दानव बूढ़ा सच वीर

11. रेखांकित कारकों के भेद बताएं।

क. पिताजी बाजार से तरबूज लाए।

ख. कपड़े छत पर सुखा दो।

12. कम से कम शब्दों में उत्तर दें।

क. कारक के कितने भेद हैं?

ख. वाक्य की जिस संज्ञा पर क्रिया का प्रभाव पड़े उसे क्या कहते हैं?

13. विलोम शब्द लिखिए।

आशा, मौखिक, धर्म, धूप, उपकार, उन्नति

14. दो- दो पर्यायवाची शब्द लिखिए।

सूरज, आग, वायु, पेड़

15. अनेक शब्दों के लिए एक शब्द लिखिए।

जो पढ़ने योग्य हो

जो सदा सत्य बोलते हो

जल में रहने वाला

नभ में रहने वाला
जो पढ़ने योग्य हो

16. अनेकार्थी शब्द के अर्थ लिखिए।

पत्र, कुल, कर, पर, गुरु, बाल

17. श्रुतिसम भिन्नार्थक शब्द लिखिए।

क. दिन- ख.समान

दीन- सामान

ग. अचार- घ.पिता

आचार- पीता

18. दिए गए मुहावरों के अर्थ लिखिए।

अपना उल्लू सीधा करना

अक्ल का दुश्मन

आंखों का तारा

घी के दिए जलाना

19. किसी एक विषय पर निबंध लिखिए।

संगति अथवा देश प्रेम

20. ग्रीष्मावकाश में किसी पर्वतीय स्थल पर अपने मित्र को साथ ले जाने का निमंत्रण पत्र लिखिए।

21. अपठित गद्यांश

एक गांव था। जिसका नाम मायापुर था। वह गांव बहुत सुंदर था। उस गांव के किनारे एक विशाल जंगल था। उसे जंगल में बहुत सारे जंगली पशु पक्षी रहते थे। एक दिन की बात है, एक लकड़हारा लड़कियां काटकर जंगल के रास्ते अपने गांव लौट रहा था। तभी रास्ते में अचानक उसे एक शेर मिला। शेर बोला, "देखो, भाई। मुझे सुबह से कोई शिकार नहीं मिला है और मुझे बहुत तेज भूख लगी है। मैं तुम्हें खाकर अपनी भूख मिटाऊंगा।"

क. गांव का नाम क्या था?

ख. उसे गांव के किनारे क्या था

ग. जंगली पशु पक्षी कहां रहते थे

घ. विलोम शब्द लिखिए।

गांव, तेज

इ. गद्यांश से दो विशेषण शब्द चुनकर लिखिए।

MATHS REVISION ASSIGNMENT

CLASS- V

1) Find the sum of 46297, 2305648 and 1290

2) Convert : (a) 3.29 m into mm (b) 8.13 L into mL (c) 7 km 43 m into km

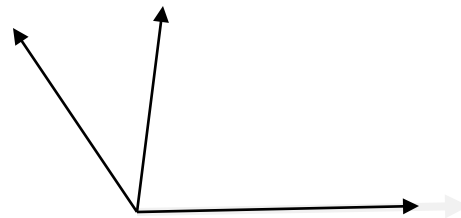
3) Classify each of the following angle as acute, obtuse, right or reflex angle:

a) 270° b) 18° c) 90° d) 135°

4) Find the complement of : (a) 29° (b) 83°

5) Find the supplement of : (a) 115° (b) 175°

6) Write the name of all angles by giving names:



7) Subtract: 1 hr 45 min 49 sec from 10 hrs 31 min 19 sec

8) Draw a circle of radius 5.5 cm. Construct a chord, a diameter and a radius in it.

9) Find the average of all odd numbers between 20 and 30.

10) Convert CLXVIII into Hindu Arabic System

11) Divide : a) 79823 by 71 b) 86295 by 98

12) In $\triangle PMQ$, $\angle P = 55^\circ$, $\angle M = 65^\circ$, find $\angle Q$

13) Simplify : (a) $5 \times 12 \div 4 - 6 + 9$ (b) $24 \div 8 \times 3 + 41 - 2$

14) Add : (a) 7 weeks 4 days and 11 weeks 4 days

15) Find the average of first six multiples of 9

16) Ricky's mother bought 8.5 L of cooking oil. If each litre costs ₹ 102.35, how much did she spend?

17) Himu leaves home at 8:45 a.m. and reaches school at 10:20 a.m. How much time he took to reach school?

18) In a right angled triangle, one angle measures 35° . Find the remaining angles.

COMPETENCY BASED QUESTIONS:

- 1) In Indian Place Value, 27 million is written as _____
- 2) If you drink 175 mL of juice everyday. How many litres of juice will you drink in a week?
- 3) Find the average of 10.004, 10.04, 10.4 and 10
- 4) The smallest three digit number which is even and multiple of 3 =
(a) 270 (b) 103 (c) 207 (d) 424
- 5) You have 45 pencils and distribute among your three friends. How many each one will get?
- 6) Find the average of numbers from 1 to 10.
- 7) Largest four digit number formed from the given digits ---- 1, 0, 9, 8, 5
- 8) Largest and smallest number formed from the given digits ---- 2, 0, 8, 4, 6, 1



Delhi Public School, Dhanbad

Revision Assignment(Aug-Sept)

Subject: Computer

Std:V



Q1. Fill in the blanks

- _____ is considered as the first calculating device that was developed around 5000 yrs ago.
- _____ was an improvement of the Pascaline developed by Gottfried W. Leibniz.
- Hardware and software in a computer is controlled by _____ system software.
- _____ software is designed to perform basic maintenance tasks on a computer.
- In _____ orientation, the height of the page is longer than the width.
- _____ is used to add or remove extra space from the left or right margin of the page.
- We can choose a border style from the _____ option in the Borders and Shading dialog box to set an artistic border around the page.
- When we insert a shape, a new _____ tab appears.
- _____ option is used to insert a picture directly from the Internet.

Q2. State whether the following statements are true/false

- Third Generation Computers used transistors as the main component. _____
- UNIVAC I was the first commercial computer. _____
- A backup utility software protects the computer from viruses. _____
- There are four margins in a page. _____
- We can find Header and Footer option in the Design tab. _____
- We cannot insert pictures directly from the Internet. _____
- The resize handles are used to delete an object. _____
- Pictures make a document more attractive. _____

Q3. Match the following:

Column A

a. Shape Effects

b. Napier's Bones

c. IBM 360, ICL 1900, UNIVAC 900

d. Adobe Photoshop, GIMP

e. Norton

f. Header and Footer

g. Page Border

h. X₂

Column B

(i) Third Generation Computers

(ii) Photo Editing Software

(iii) 1617

(iv) Antivirus Software

(v) Subscript

(vi) Design Tab

(vii) Insert Tab

(viii) apply shadow effect to the shape.

Q4. Tick the correct option

a. Fourth Generation Computers used

(i) VLSI

(ii) Transistors

(iii) AI

b. Analytical Engine was invented in the year

(i) 1822

(ii) 1837

(iii) 1842

c. MITS, Altair, Apple II, IBM PC and CRAY-1 are the examples of _____ Generation computers.

(i) First

(ii) Fourth

(iii) Third

d. _____ software is designed to perform basic maintenance tasks on a computer.

(i) Application Software

(ii) System Software

(iii) Programming Language

e. In _____, the width of the page is longer than the height.

(i) Landscape

(ii) Portrait

(iii) Both of these

f. The key combinations of Superscript is

(i) CTRL+ =

(ii) CTRL+Shift+ =

(iii) CTRL+Alt+ =

g. _____ it is used to write decorative text in a document.

(i) ClipArt

(ii) WordArt

(iii) Pictures

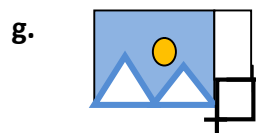
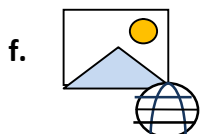
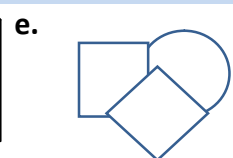


h. This command is used to change the colour, width or line style of the outline of the shape.

(i) Shape Outline

(ii) Shape Fill

(iii) Shape Effects

Q5. Identify the icons:



Q6. Answer the following questions:

- a. Write any two characteristics of a computer.
- b. Name two types of an application software.
- c. What is the use of backup utility software?
- d. Write the steps to create columns in a document.
- e. What is a page margin? Name the four margins of a page.
- f. Write the steps to change the orientation of the page.
- g. Write the steps to add text in a shape.
- h. How do you add a Online Pictures in a Word document?
- i. Write the key combinations for the following
 - (i) Find Navigation Pane
 - (ii) To open Find and Replace dialog box

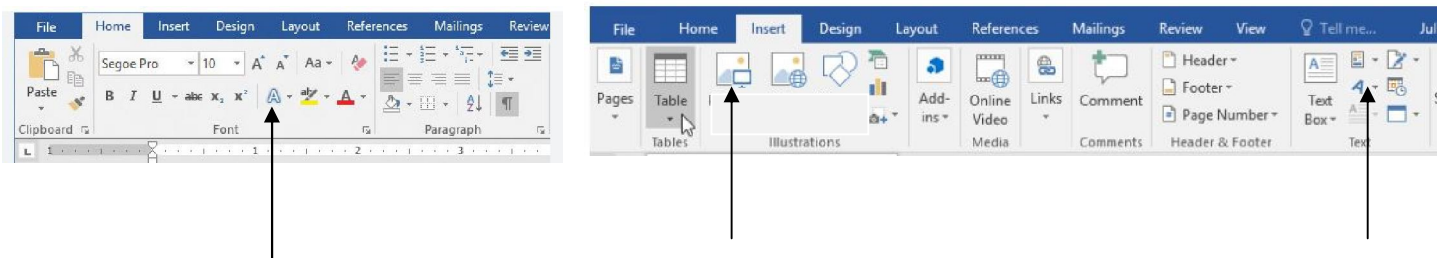
Q7. Write short notes on the following:

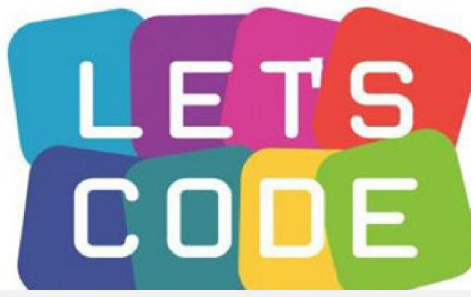
- a. Abacus
- b. Format Painter
- c. Cropping
- d. WordArt
- e. Shapes
- f. Portrait
- g. Page Border
- h. Utility Software
- i. Operating Software
- j. Application Software

Q8. Draw the following:

- (a) Technology used in Third Generation Computers
- (b) Word Processing Software
- (c) Photo Editing Software
- (d) Presentation Software
- (e) Spreadsheet Software
- (f) Page Size
- (g) Page margin
- (h) Antivirus Software
- (i) Borders
- (j) Page Border
- (j) Format Painter
- (k) Superscript
- (l) Find
- (m) Replace
- (n) The first Calculator
- (o) First Calculating device

Q9. Label the following:





10. Competency based questions

a. Find out the word which cannot be made from the letter of the given word "CHANDRAYAAN"

- (i) Andhra (ii) Yatch (iii) Hand (iv) Yarn

b. Which one letter occurs twice in "MOUNTAIN", once in "SAND" but does not occur in "ROAD"

- (i) T (ii) C (iii) O (iv) N

c. In the magic square given below, sum of each row, column or diagonal is same. Find the missing number.

5	?	2
3	5	8
8	2	6

- (i) 10 (ii) 9 (iii) 8 (iv) 7

d. Which of the given option will complete the given pattern. 4F 9I 14L 19 O

- (i) 15L (ii) 20L (iii) 24R (iv) 23P

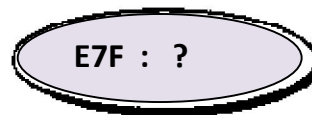
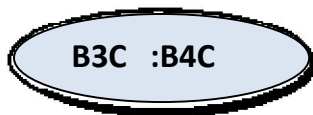
Here we have to find the pattern in which a particular series is based. Tick (✓) from the answer set which comes next.

102	203	304	405
-----	-----	-----	-----

504	703	506	206
-----	-----	-----	-----

- (a) (b) (c) (d)

5. Tick (✓) the right choice.



- (a) E5F (b) F7G (c) E7F (d) E8F



Std 5

SST Revision cum Monthly Assignment

Q1 Fill in the blanks:

- i. The word Pacific means _____.
- ii. In the month of July August & September the _____ is pointed towards the sun.
- iii. _____ affects the amount of rainfall received by a region.
- iv. The extraction of _____ product has been the major source of economic growth of desert nations like Saudi Arabia & Kuwait.
- v. _____ grassland is found in South Africa.

Q2 Write T for true and F for false statement:

- i. Cowboys in South America are called gauchos.
- ii. The deserts cover 1/5th part of the total land area of the Earth.
- iii. Equator is the biggest gainer of Sunlight.
- iv. The shortest day occurs on 25th December which is called the Winter solstice.
- v. Portuguese explorer, Ferdinand started his journey from Seville, in Spain, in 1915.

Q3 Define: circumnavigation , grid , equinox , summer solstice , humidity , pastures

Q4. Give reason:

- i. Grasses are the dominant vegetation of the temperate grasslands.
- ii. Animals are reared in temperate grassland.
- iii. Camels are the important means of transport in deserts
- iv. Freezing treeless zone of the Earth
- v. Deserts have huge variation between the day and night temperature.
- vi. February has 29 days in a leap year.

Q5. Draw and label:

- i. Important lines of latitude and longitude on a globe.
- ii. Diagram to show Equinox and solistice
- iii. Diagram to show rotation of the earth and revolution of the earth around the sun
- iv. Three major Climatic Zones: Torrid, Temperate and Frigid Zone

Q6. On the world map show location of:

- i. Two hot deserts
- ii. Two cold deserts
- iii. Temperate grasslands of South America, Central Africa and Australia and write their names.

Q7 Competency based questions:

- i. Veld: South Africa :: _____ : Hungary
- ii. Namib desert: South Africa :: Sahara Desert : _____
- iii. Prime Meridian : Zero degree :: International Date line : _____

Q8 Answer the following questions:

- i. Name the countries that come under the temperate grassland region?
- ii. Describe in detail the climatic conditions in the hot deserts?
- iii. What are the factors affecting weather?
- iv. Write a short note on Winter solstice.
- v. Define Equinox and state its importance.

Monthly Assignment (August & September 2023)

English - Std V Revision Assignment

Q1. Read the following passage and then answer the questions-

A hedgehog gathers leaves. It carries them in its mouth makes a pile. The animal is making a winter nest. It will soon hibernate. That means it will go into a long, deep sleep. Some hedgehogs live in places where winter is extremely cold. Food is hard to find. Hedgehogs eat a lot of food in autumn. They store fat in their bodies. When the animals hibernate, they live off the extra fat. During their long winter sleep, the animals use very little energy. They don't move. Their body temperature drops. Their hearts beat slowly and they breathe very slowly too. When the weather gets warmer in March or April, the hedgehogs are hungry. They leave their nests to eat again.

A) Complete the sentences:-

- I. It carries them in its mouth _____
- II. When the animals hibernate, they live _____

B) Tick the correct options:-

- I. The hedgehogs live in places where winter
 - a) Is not very cold
 - b) is extremely cold
 - c) is very cold
- II. During their long winter sleep, the animals use
 - a) Lots of energy
 - b) lots of fat
 - c) very little energy

Q2. Change the Genders :-

- I. Mare-----
- II poetess-----

Q3.State whether the following statements are declarative, imperative, interrogative or exclamatory:-

I. What a lovely flower!

II. Please open the door.

III.He is my cousin.

Q4. Fill in the blanks with having verbs:-

- I. My friends _____ neat and clean houses.
- II. Rahul _____ a pet dog.
- III. We _____ a test tomorrow.

Q5. Answer the following questions:-

- I. How did mother partridge race the fox?
- II. What are Jurassic animals?

Q6. Make a Word-Tree with:-

For - _____, _____, _____

Q7. Build a Word-Family with:-

Responsibility-----, -----,-----

Q8. Who said to whom?

- I. "I wish you could have come with us."
- II. "Don't listen to him."
- III. "Very uncomfortable for the Dormouse."

Q9. Complete the poem:-

Just a _____ hand extended

Out to one who's _____

Just the will to _____ or _____ ,

This will make you someone's _____.

Q10. Competency Based Question:-

- I. Circle the odd ones out
 - a) The Ramayana, The Telegraph, Blackboard
 - b) Beautiful, dance , cry
- II. Tick the correct choice:-
 - a) Your grandmother's husband is your
 - i. Father. ii. Grandfather. iii. Great grandfather

XX

अर्द्धवार्षिक परीक्षाधारित 2023-24
प्रश्नपत्रम् - कक्षा-5, संस्कृतम्

1. रिक्तस्थानानि पूरयत 5.
(मात्रा, त्रयोदश, व्युत्पत्ति, त्रैतीय, अजोगवाह)
क. स्वर — होते हैं। ख. व्यंजन — होते हैं। 5.
2. वर्णविच्छेदं कुरुत।
क. गुरुः —। ख. दान्तः —। 5.
3. उचितं विकल्पं चिनुत। 5.
क. 'गदा' कैसा शब्द है?
(i) पुल्लिङ्गम् (ii) स्त्रीलिङ्गम् (iii) नपुंसकलिङ्गम्
ख. 'पुस्तकानि' किस वचन में है?
(i) एकवचन (ii) द्विवचन (iii) बहुवचन
4. संस्कृतेन लिखत। 5.
क. दो भौरे —। ख. मेढक —।
ग. हिरण —। घ. दो पेड़ —।
5. अर्थ लिखत। 5.
क. वाटिका — ख. आज्ञा —।
ग. सरमा — घ. शैटिका —।
6. संस्कृत शब्दं लिखत।
क. दो खाते हैं। —।
ख. सब नमस्कार करते हैं —।
7. अर्थ लिखत।
क. इमानि —। ख. त्वम् —।
ग. ताः —। घ. अहम् —।