

**DELHI PUBLIC SCHOOL DHANBAD**

**Computer Assignment Class 1 November 23**

Name - \_\_\_\_\_

Class / Sec - \_\_\_\_\_.

**1) Write True or False for the given statements:-**

- 1) A pendrive is circular in shape. \_\_\_\_\_.
- 2) Memory card is used to type on a computer. \_\_\_\_\_.
- 3) We cannot store our work in a computer. \_\_\_\_\_.
- 4) Hard disk is fixed inside a CPU box. \_\_\_\_\_.



**2) Fill in the blanks :-**

- a) \_\_\_\_\_ is usually fixed inside a mobile phone.
- b) \_\_\_\_\_ is so small in size that we can carry it in our pockets.
- c) \_\_\_\_\_ is a storage device that is fixed inside the CPU box.

**3) Name two storage devices:-**

- 1) \_\_\_\_\_.
- 2) \_\_\_\_\_.

Label the following storage devices using given clue box.



Clue box...

- pen drive
- floppy disk
- CD / DVD
- Hard Disk
- ROM
- memory card

**Directions:** Identify and match each computer term.



1.

A. Keyboard



2.

B. Monitor



3.

C. Printer



4.

D. CPU



5.

E. Mouse



6.

F. Speakers

# Delhi Public School, Dhanbad

## Maths Assignment

November (2023-24)

Name..... Class-1 Sec.....

**Q A) Write the number names of:-**

A. 85 \_\_\_\_\_

B. 72 \_\_\_\_\_

C. 56 \_\_\_\_\_

D. 45 \_\_\_\_\_

E. 67 \_\_\_\_\_

F. 98 \_\_\_\_\_

G. 33 \_\_\_\_\_

H. 100 \_\_\_\_\_

I. 20 \_\_\_\_\_

J. 11 \_\_\_\_\_

**Q2) Mixed Tables :**

a.  $2 \times 5 =$       g)  $5 \times 1 =$       m)  $8 \times 9 =$       s)  $11 \times 2 =$

b.  $2 \times 8 =$       h)  $5 \times 8 =$       n)  $8 \times 3 =$       t)  $11 \times 7 =$





c.  $3 \times 9 =$       i)  $6 \times 6 =$       o)  $9 \times 5 =$       u)  $12 \times 5 =$

d.  $3 \times 3 =$       j)  $6 \times 2 =$       p)  $9 \times 7 =$       v)  $12 \times 9 =$



e.  $4 \times 2 =$       k)  $7 \times 4 =$       q)  $10 \times 5 =$

f.  $4 \times 8 =$       l)  $7 \times 6 =$       r)  $10 \times 10 =$

Q3) Complete the pattern by drawing:-



Q4) Circle the picture that comes next in each picture pattern:



Delhi Public School, Dhanbad  
English Assignment (November) 2023

Class1

Name: \_\_\_\_\_

Roll: \_\_\_\_

Fill in the blanks with the correct nouns.

cake	sun	hair
car	elephant	doctor

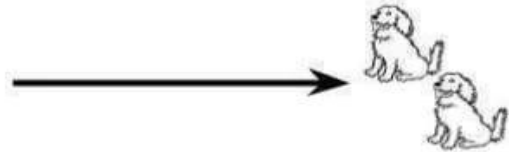
1. An \_\_\_\_\_ has a trunk.
2. That red \_\_\_\_\_ is new.
3. Sara has long \_\_\_\_\_.
4. Mother bakes a \_\_\_\_\_.
5. The \_\_\_\_\_ is shining.
6. That man is a \_\_\_\_\_.

Fill in the blanks with **These** or **Those**.

1. \_\_\_\_\_ are cats.



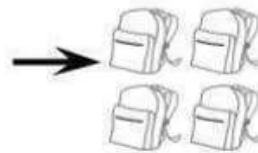
2. \_\_\_\_\_ are dogs.



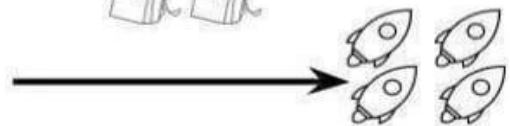
3. \_\_\_\_\_ are apples.



4. \_\_\_\_\_ are bags.



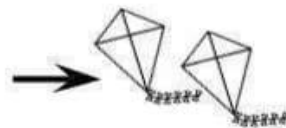
5. \_\_\_\_\_ are rockets.



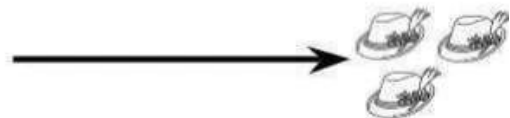
6. \_\_\_\_\_ are ducks.



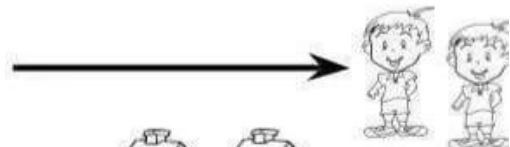
7. \_\_\_\_\_ are kites.



8. \_\_\_\_\_ are hats.



9. \_\_\_\_\_ are boys.



10. \_\_\_\_\_ are houses.





Read the sentences and put in is or am.

1. I \_\_\_\_\_ a girl.



2. She \_\_\_\_\_ in the car.

3. I \_\_\_\_\_ a big boy.



4. She \_\_\_\_\_ playing in the park.

5. He \_\_\_\_\_ reading a book.



6. It \_\_\_\_\_ thin.

7. I \_\_\_\_\_ a pilot.



8. The girl \_\_\_\_\_ sleepy.

9. The dog \_\_\_\_\_ sleeping on my bed.



10. The cow \_\_\_\_\_ black and white.

Choose the correct pronoun and write it on the line.

He She It They

1. \_\_\_\_ is a palm tree.



2. \_\_\_\_ play in the hay.



3. \_\_\_\_ can make pancakes.



4. \_\_\_\_ go to school together.



5. \_\_\_\_ has a big hat.



6. The elephant will not get wet.  
\_\_\_\_ has a red umbrella.



7. \_\_\_\_ is a doctor.



8. \_\_\_\_ likes to ride the bike.



9. \_\_\_\_ keep the garden clean together.












DELHI PUBLIC SCHOOL, DHANBAD

EVS Assignment November( 2023-24)

Name \_\_\_\_\_ Class 1 Sec \_\_\_\_\_ Roll no \_\_\_\_\_

1. Unscramble the names of the animals and colour the pictures.

maelc		<input type="text"/> <input type="text"/> <input type="text"/> <input type="text"/> <input type="text"/>
erde		<input type="text"/> <input type="text"/> <input type="text"/> <input type="text"/>
nloi		<input type="text"/> <input type="text"/> <input type="text"/> <input type="text"/>
woc		<input type="text"/> <input type="text"/> <input type="text"/>
tlepaneh		<input type="text"/> <input type="text"/> <input type="text"/> <input type="text"/> <input type="text"/> <input type="text"/> <input type="text"/> <input type="text"/>
eorsh		<input type="text"/> <input type="text"/> <input type="text"/> <input type="text"/> <input type="text"/>
odg		<input type="text"/> <input type="text"/> <input type="text"/>
tac		<input type="text"/> <input type="text"/> <input type="text"/>
rofg		<input type="text"/> <input type="text"/> <input type="text"/> <input type="text"/>


2.

## What do plants need to grow?


Color the pictures. Match each picture with the correct word



sun



air



soil



water

3.

**A. Choose the correct option.**

1. Which of the following is all around us.

- a. Air      b. Shoes      c. Ice      d. Box

2. Which of these does not get its shapes from air?

- a. Tyre      b. Balloon      c. Tree      d. Football

3. Which of the following doesn't need air to breathe.

- a. Sun      b. Monkey      c. Plants      d. Human

4. Which of these is true about air.

- a. It has weight      b. It give shapes to things  
c. Makes objects move      d. All of these

**B. Fill in the blanks.**

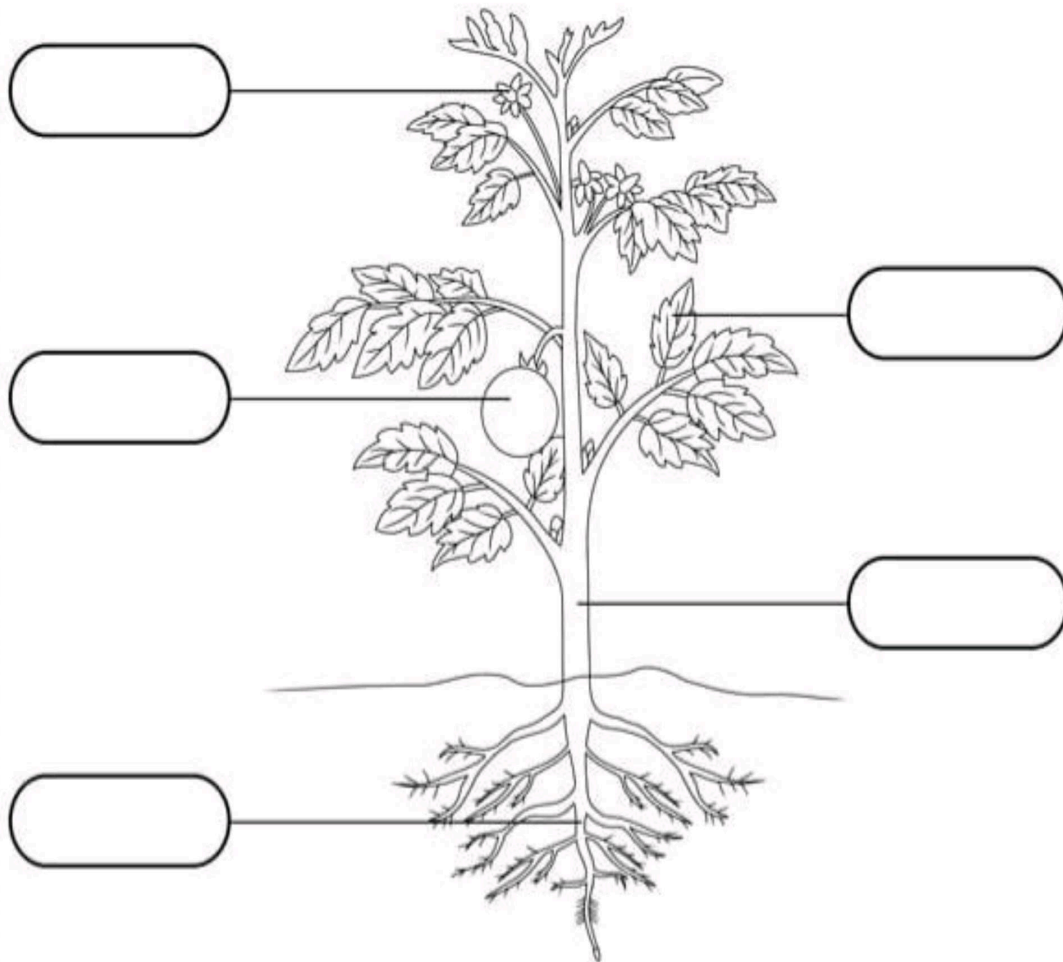
a. Moving air is called \_\_\_\_\_ (rain/wind)

b. We can \_\_\_\_\_ air (see/feel)



4.

# Label the Parts of a Plant



## Word Box

Flower

Fruit

Stem

Leaf

Root

# DELHI PUBLIC SCHOOL, DHANBAD

## HINDI MONTHLY ASSIGNMENT (NOVEMBER 2023–24)

Name : \_\_\_\_\_ Class : 1 \_\_\_\_\_ Roll No : \_\_\_\_\_

प्र 1. मिलान करो –

सूँड



ऊँट



मूँछ



कुआँ



चाँद




साँप

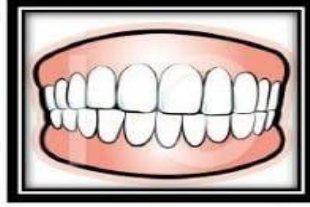


प्र 2. दिए गए शब्दों में से सही नाम चुनिए -

चाँद	दाँत	कुँआ
आँख	अँगूठी	मूँछ




\_\_\_\_\_



\_\_\_\_\_



\_\_\_\_\_



\_\_\_\_\_



\_\_\_\_\_



\_\_\_\_\_



-----



-----

दुःख  
प्रातः  
नमः

-----



-----



प्र 3. रेखांकित शब्द का पर्यायवाची लिखकर वाक्य फिर से लिखो -

क) मेरी माता बाजार गई है।

\_\_\_\_\_

ख) जंगल में सभी जानवर हैं।

\_\_\_\_\_

ग) मदन सदन तक चला।

\_\_\_\_\_

घ) बाग से फूल मत तोड़।

\_\_\_\_\_

ङ) इस वृक्ष पर सेब लगे हैं।

\_\_\_\_\_

प्र 4. क्रिया वाले चित्रों पर (✓) का निशान लगाओ -



तोता



रोना



भौकना



झंडा



सेब



बैठना



चलना



उड़ना



भिंडी








प्र 5. दिए गए शब्दों के दो - दो पर्यायवाची शब्द चुनकर लिखो -

1. गृह

2. वृक्ष

3. माता

4. मकान

5. भगवान

6. मैया

7. तरु

8. प्रभु

(i) पेड़ -



(ii) ईश्वर -



(iii) घर -



(iv) माँ -