

DELHI PUBLIC SCHOOL, DHANBAD

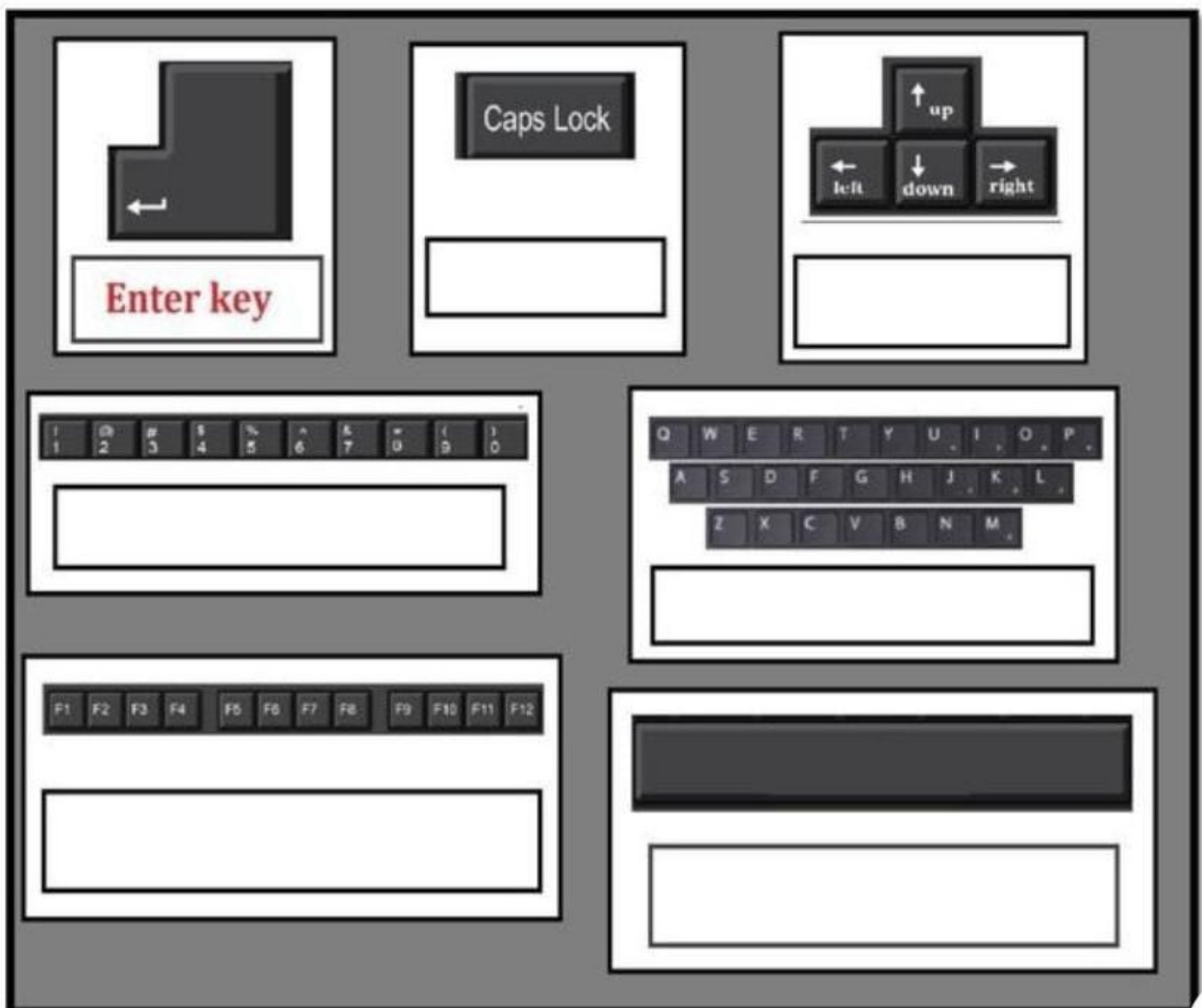
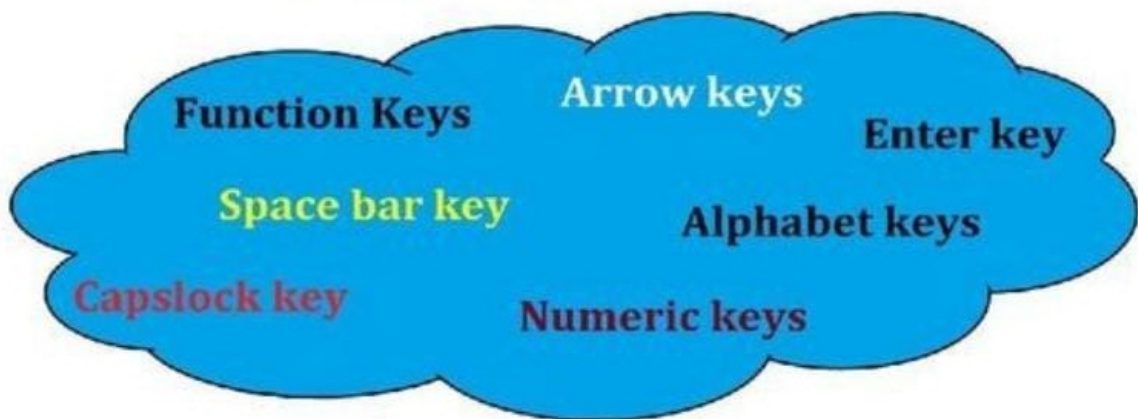
Monthly Assignment (September 2025)

SUBJECT – COMPUTER CLASS 1

Name : _____

Date : _____

I. Label the following keyboard parts using the given cloud.



II. Fill in the blanks with the correct words.

two keys Enter spacebar keyboard

- a) we need a _____ to write on a computer.
- b) You can type by pressing _____ on a keyboard.
- c) The longest key on the keyboard is called the _____.
- d) There are _____ sets of number keys.
- e) The _____ key is pressed to move the next line.

III. Answer the following:-

- a) Which key help you to correct mistakes?

ans:- _____

- b) What is the use of spacebar key?

ans:- _____

- c) What key is used to move to a new line?

ans:- _____

IV. Unjumble the letters to form words using the hints given below.


- a) URCROS _____

Hint : This is the blinking line you see on your screen.

- b) YSEK _____

Hint : We can type on a computer by pressing these.

V. Look at the picture carefully and colour.




a. Alphabet keys–Red

b. Both sets of number keys–Blue

c. Enter key–Green

d. Space bar–Yellow

VI. Label the parts of a computer.



DELHI PUBLIC SCHOOL, DHANBAD
ASSIGNMENT FOR THE MONTH OF
SEPTEMBER- 2025

SUBJECT-EVS

STD : I

NAME : _____

SEC : _____

I. FILL IN THE BLANKS :

- a) We _____ using both our hands and legs.
- b) We wear cotton clothes in _____ Season.
- c) I am _____ years old.
- d) _____ houses are mostly found in villages.
- e) School children wear _____.
- f) We live in our homes with our _____.
- g) A _____ room is a place where we store things.

II. Circle the odd one out :-

a) Summer , cloudy, winter, monsoon.

b) Eye, wrist, ear, nose.

c) Brother, mother, friend, father.

d) Kitchen, Bedrooms, dinning room , roof.

e) Singing, reading, crying, dancing.

III. Given below is a list of items found in the house. Put them in the room where they are found.

**Pillow, bed, tap, blender,
bucket, lamp, television,
tub, sofa, carpet,
refrigerator, soap, gas
burner**

DRAWING ROOM	BED ROOM	KITCHEN	BATH ROOM

IV. Match the columns :-

Column A

1. Kitchen
2. A good house
3. Pucca house
4. Lion
5. Houses in dry places

Column B

- a) Bungalow
- b) Den
- c) where food is cooked
- d) flat roof
- e) is neat and clean

V. Draw 3 things we use in Rainy season.

Umbrella	Raincoat
gumboots	

DELHI PUBLIC SCHOOL, DHANBAD

English Assignment (September 2025-26)

Name Class- I Sec

A) Write the opposites of:

1) Sad ×

.....

6) Up ×

.....

2) Fast ×

.....

7) Left ×

.....

3) Tall ×

.....

8) Boy ×

.....

4) Rich ×

.....

9) True ×

.....

5) Open ×

.....

10) New ×

.....

B) Fill in the blanks with suitable pronouns.

1) is a dog. (It / We)

2) are my friends. (She / They)

3) is an amazing singer. (We / He)

4) are my teachers. (It / They)

5) is a sunny day. (She / It)

6) Visit the park often. (They / It)

7) am doing my homework. (I / We)

8) are running very fast. (You / I)

9) am playing Ludo. (We / I)

10) am ten years old. (I / They)

C) Fill in the blanks using “am, is or are”

1) He a pilot.

2) I a student.

3) They friends.

4) We in the class

5) Water precious.

6) You sad today.

7) Trees our wealth.

8) I from India.

9) Your shirt clean.

10) My bag very old.

D) Read the story and answer the questions.



LARRY THE FROG

Larry is a frog. Larry is green with brown spots. He loves to play in the pond. Sometimes Larry catches flies. He likes to eat flies for dinner. After Larry catches flies, he hops around the pond.

1) Answer the following questions.

(a) Who is Larry ?

Ans.

(b) What colour is Larry ?

Ans.

(c) Where does Larry love to play ?

Ans.

(d) What does Larry catch ?

Ans.

(e) What does Larry like to eat for dinner ?

Ans.

(f) What does Larry do after he catches flies ?

Ans.

2) Write 'T' or 'F'

(a) Larry is a bird. []

(b) Larry is brown with green spots. []

(c) Larry loves to sing. []

(d) Larry likes to eat mango for dinner. []

DELHI PUBLIC SCHOOL, DHANBAD


HINDI MONTHLY ASSIGNMENT (SEPTEMBER' 2025-26)

Name : _____ Class : 1 _____

प्र1. चित्र पहचानो -

करेला, मृग, पृथ्वी, बेल, गृह, वृक्ष













प्र2. सही शब्द पर नीले रंग से गोला करो -

1. कृपया / क्रपया
2. तृण / ब्रण
3. किसक / कृषक
4. केल / केला
5. जलबी / जलेबी

प्र3. रिक्त स्थान भरों -

1. _____ ने दहाड़ लगाई | (चिड़िया / शेर)
2. रमन _____ पर चढ़ | (रेल / खेल)
3. सबने जादू का _____ देखा | (मेला / खेल)
4. दिनेश _____ जला | (सवेरे / लालटेन)
5. हमने _____ में सरकस देखा | (मेले / ठेले)
6. कमला मेरी _____ है | (सहेली / सवेरा)
7. सबने _____ खाए | (सेब / पानी)
8. _____ रात में चमकता है | (नदी / चाँद)
9. मोर के _____ सुंदर होते हैं | (पैर / पंख)
10. _____ एक नदी है | (गंगा / नहर)

प्र4. सही उत्तर को लाल रंग से रेखांकित कीजिए -

- | | | | |
|-------------------|--------|-------|----------|
| 1. फल का नाम - | आम | गुलाब | पालक |
| 2. शरीर का अंग - | किताब | रुपया | हाथ |
| 3. रंग का नाम - | जलेबी | लाल | भिंडी |
| 4. फूल का नाम - | कपड़ा | गुलाब | हरा |
| 5. सब्जी का नाम - | गोभी | पीला | गुड़िया |
| 6. शहर का नाम - | ताजमहल | राँची | आँख |
| 7. चीज़ का नाम - | खिलौना | बाग | शरबत |
| 8. मिठाई का नाम - | नमक | गाजर | रसगुल्ला |

प्र5. दो फलों के चित्र बनाकर उनमें रंग भरो और उनका नाम लिखो -

--	--

प्र6. दो फूलों के चित्र बनाकर उनमें रंग भरो -

--	--

प्र7. दो सब्जियों के चित्र बनाकर उनमें रंग भरो -

--	--

Delhi public school, Dhanbad

Maths Assignment (September) 2025-26

Name _____ Class- 1__ Section____

1.Complete the patterns :



— — — —



— — — —



— — — —



— — — —

2. Subtraction :

$$\begin{array}{r} 9 \\ -1 \\ \hline \end{array}$$

$$\begin{array}{r} 7 \\ -3 \\ \hline \end{array}$$

$$\begin{array}{r} 10 \\ -4 \\ \hline \end{array}$$

$$\begin{array}{r} 8 \\ -2 \\ \hline \end{array}$$

$$\begin{array}{r} 6 \\ -4 \\ \hline \end{array}$$

$$\begin{array}{r} 5 \\ -5 \\ \hline \end{array}$$

$$\begin{array}{r} 7 \\ -3 \\ \hline \end{array}$$

$$\begin{array}{r} 10 \\ -6 \\ \hline \end{array}$$

$$\begin{array}{r} 10 \\ -8 \\ \hline \end{array}$$

$$\begin{array}{r} 8 \\ -3 \\ \hline \end{array}$$

$$\begin{array}{r} 9 \\ -2 \\ \hline \end{array}$$

$$\begin{array}{r} 6 \\ -1 \\ \hline \end{array}$$

$$\begin{array}{r} 8 \\ -6 \\ \hline \end{array}$$

$$\begin{array}{r} 10 \\ -3 \\ \hline \end{array}$$

$$\begin{array}{r} 7 \\ -6 \\ \hline \end{array}$$

$$\begin{array}{r} 4 \\ -2 \\ \hline \end{array}$$


$$\begin{array}{r} 7 \\ -5 \\ \hline \end{array}$$

$$\begin{array}{r} 8 \\ -3 \\ \hline \end{array}$$

$$\begin{array}{r} 5 \\ -3 \\ \hline \end{array}$$


$$\begin{array}{r} 10 \\ -9 \\ \hline \end{array}$$

3. Colour the Shapes :



Count the shapes in the above picture.









4) Mixed Tables

1) $4 \times 4 =$ -----

2) $6 \times 5 =$ -----

3) $5 \times 5 =$ -----

4) $6 \times 8 =$ -----

5) $4 \times 9 =$ -----

5) Write in Expanded form

1) $23 =$ _____ $+$ _____

2) $46 =$ _____ $+$ _____

3) $51 =$ _____ $+$ _____

4) $30 =$ _____ $+$ _____

5) $12 =$ _____ $+$ _____