

# DELHI PUBLIC SCHOOL, DHANBAD









Monthly Assignment (October 2025)

Subject – Computer Class 1

Name : \_\_\_\_\_

Date : \_\_\_\_\_

I. 🖱️ Tick( ✓ ) DO's and Cross( ✗ ) DONT's in the box provided.

|   |  |
|---|--|
| <br><b>Litter and Remove or disconnect any cable.</b>    | <br><b>Report any problems with the computer to the teacher.</b> |
| <br><b>Sit down and wait for teacher's instruction.</b> | <br><b>Remove or take any item away from the computer lab.</b> |
| <br><b>Insert any objects into the computer.</b>       | <br><b>Sit properly in front of the computer.</b>              |
| <br><b>Take food or drinks into the lab.</b>           | <br><b>Shut down the computer properly.</b>                    |

## II. Answer the following questions :-

1) Name the three main parts of a computer mouse?

Ans:- \_\_\_\_\_

2) What is the small arrow on the monitor called?

Ans:- \_\_\_\_\_

3) What is the part of mouse used to move pages up or down?

Ans:- \_\_\_\_\_

## III. Tick( ✓) the correct answers :-

1. Buttons on the keyboard are called.

a) Keys ( )      b) Pointer ( )

2. These keys are marked with English alphabet from A to Z.

a) Number keys ( )      b) Alphabet keys ( )

3. The delete key erases the text.

a) Left side ( )      b) Right side ( )

## IV. Fill in the blanks using the words in the box :-

|         |       |     |            |
|---------|-------|-----|------------|
| Monitor | Mouse | CPU | Electronic |
|---------|-------|-----|------------|

1. A computer is an \_\_\_\_\_ machine.

2. The \_\_\_\_\_ display and shows what is happening in the computer.

3. The \_\_\_\_\_ is used to click, drag and paint at items on the computer screen.

4. The \_\_\_\_\_ is the brain of the computer and it is the place where all the work is done.

**v. Circle (T) if the sentence is true and (F) if the sentence is false.**

- |  |   |   |
|--|---|---|
| 1. Computer work very fast .                           | T | F |
| 2. We can eat or drink near computer.                  | T | F |
| 3. Keyboard is a part of the computer.                 | T | F |
| 4. We can play with computer cables.                   | T | F |
| 5. A computer can store a large amount of information. | T | F |

**vi. Identify the different parts of the mouse. From the word bank below, drag and the correct answer.**

|              |             |
|--------------|-------------|
| Body         | Right Click |
| Scroll Wheel | Left Click  |



**DELHI PUBLIC SCHOOL, DHANBAD**  
**ASSIGNMENT FOR THE MONTH OF**  
**OCTOBER 2025**

SUBJECT-ENVIRONMENTAL STUDIES

STD : I

NAME : \_\_\_\_\_

SEC : \_\_\_\_\_

**I. Fill in the blanks :-**

a) We go to school to \_\_\_\_\_,  
\_\_\_\_\_ and \_\_\_\_\_.

b) We study in a \_\_\_\_\_.

c) A good house is \_\_\_\_\_ and  
\_\_\_\_\_.

d) Some animals live both on \_\_\_\_\_  
and in \_\_\_\_\_.

e) \_\_\_\_\_ are eaten by lizards.

f) \_\_\_\_\_ is a place where students  
can buy food in a school.

g) The \_\_\_\_\_ is the head of the school.

**II. Unscramble the letters to find the names of things you see in your classroom.**

A T L B E \_\_\_\_\_

S U D T B I N \_\_\_\_\_

A H C L K \_\_\_\_\_

K B O O S \_\_\_\_\_

D P C U B A R O \_\_\_\_\_

I H C A R \_\_\_\_\_

P T I C U R S E \_\_\_\_\_

C L I P N E \_\_\_\_\_

C L O U O R S \_\_\_\_\_

G B A S \_\_\_\_\_

**III. Draw any four things that you see in your classroom OR school.**

[illegible]

**IV. Write short answers :**

(1) What is the name of your school ?

Ans : The name of my school is \_\_\_\_\_

\_\_\_\_\_

(2) How can you keep your school clean ?

Ans : I can keep my school clean by \_\_\_\_\_

\_\_\_\_\_

(3) Where is the annual function of your school held ?

Ans : The annual function of my school is held in the

\_\_\_\_\_

\_\_\_\_\_

# DELHI PUBLIC SCHOOL, DHANBAD

## English Assignment (October) 2025

Name ..... Class- I Sec .....

---

A) Fill in the blanks with has or have.

- 1) My father ..... brown hair.
- 2) She ..... a dog.
- 3) We ..... no class today.
- 4) The teachers ..... a meeting after school.
- 5) The rainbow ..... seven colours.
- 6) Our school ..... a big auditorium.
- 7) Tina ..... black eyes.
- 8) A rabbit ..... a pink rose.
- 9) I ..... many toys.
- 10) Do you ..... extra pencil ?

B) Rearrange the given words to make sentences. The first word starts with a Capital letter. Use the words given in brackets.

1) blue / a / I / shirt (has/have).

Ans. ....

2) brother / big / bag / a / my (has/have).

Ans. ....

3) new / sister / a / dress / my (has/have).

Ans. ....

4) hair / she / curly (has/have).



Ans. ....

5) green / tree / leaves / the / (has/have).

Ans. ....

6) pet / dog / a / she (has/have).

Ans. ....

7) pink / I / umbrella / a (has/have).

Ans. ....

8) wheels / two / a / bicycle. (has/have).

Ans. ....

C) Make sentences with :-

1) milk

.....  
.....  
.....

2) happy

.....  
.....  
.....

3) umbrella

.....  
.....  
.....

4) school

.....  
.....  
.....

5) father

.....

.....

.....

6) friends

.....

.....

.....

7) puppy

.....

.....

.....

8) pencil

.....

.....

.....

9) market

.....

.....

.....

10) holiday

.....

.....

.....

**DELHI PUBLIC SCHOOL, DHANBAD**  
HINDI MONTHLY ASSIGNMENT (OCTOBER'2025-26)

Name : \_\_\_\_\_ Class : 1 \_\_\_\_\_

प्र1. सही शब्द पर गोला लगाओ -

|   |      |       |       |
|---|------|-------|-------|
|    | घोढा | घोड़ा | घौड़ा |
|    | डोलक | ढोलक  | ढोलेक |
|  | ओस   | औस    | ओश    |
|  | भोजण | भौजन  | भोजन  |
|  | तौता | तोता  | तोटा  |
|  | धोबी | धोवी  | धोभी  |

प्र2. चित्र देखकर शब्द पूरे करो -



\_\_\_\_\_ जन



\_\_\_\_\_ ट



\_\_\_\_\_ टी



\_\_\_\_\_ ल



\_\_\_\_\_ ट



\_\_\_\_\_ र



\_\_\_\_\_ कर



\_\_\_\_\_ करी



\_\_\_\_\_ टर



\_\_\_\_\_ पी

प्र3. दिए गए वाक्यों को पढ़कर पूछे गए प्रश्नों के सही उत्तर दें -

आज सोमवार है ।

मोना आओ ।

सोहन आओ ।

खरगोश को देखो ।

खरगोश को गाजर खिलाओ ।

तोता खरगोश का मित्र है ।

उसे भी गाजर खिलाओ ।



क) दिए गए वाक्यों में सप्ताह के किस दिन का उल्लेख किया गया है?

उ. \_\_\_\_\_

ख) दिए गए वाक्यों में कौन से दो जानवर हैं?

उ. \_\_\_\_\_

ग) खरगोश क्या खाता है?

उ. \_\_\_\_\_

घ) दिए गए वाक्यों में से दो व्यक्तियों के नाम चुनकर लिखो?

उ. \_\_\_\_\_

ङ) खरगोश का मित्र कौन है?

उ. \_\_\_\_\_

प्र4. उचित संज्ञा शब्द चुनकर रिक्त स्थानों की पूर्ति करो -

|       |         |         |
|-------|---------|---------|
| घड़ी  | मिठाई   | हरियाली |
| साड़ी | चिड़िया | मोर     |

क) मुझे \_\_\_\_\_ अच्छी लगती है

ख) माँ ने आज लाल रंग की \_\_\_\_\_ पहनी है

ग) मेज़ पर \_\_\_\_\_ रखी है।

घ) पेड़-पौधों से \_\_\_\_\_ छा जाती है।

ङ) \_\_\_\_\_ के पंख बहुत सुंदर होते हैं।

च) पेड़ पर \_\_\_\_\_ का घोंसला है।

प्र5. ओ की मात्रा वाले शब्दों को रेखांकित लगाओ -

क) रोहन मेरा छोटा भाई है ।

ख) धोबी को कपड़े दे दो ।

ग) हाथ धोकर पकौड़े खा लो ।

घ) सदा सच बोलो ।

ङ) अदिति झूला झूल रही है ।

च) मुंबई एक बहुत बड़ा शहर है ।

छ) राजा महल में रहता है ।

# Delhi public school, Dhanbad

## Maths Assignment (October) 2025-26

Name \_\_\_\_\_ Class- 1\_\_ Section\_\_\_\_

1.

Arrange the numbers in ascending order

37 48 62 79 26



23 65 38 49 54

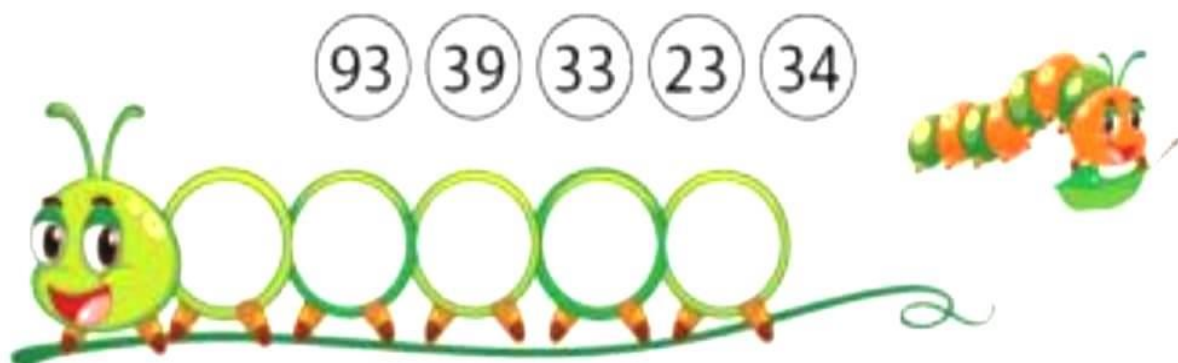


51 45 66 83 73



2.

Arrange the numbers in descending order



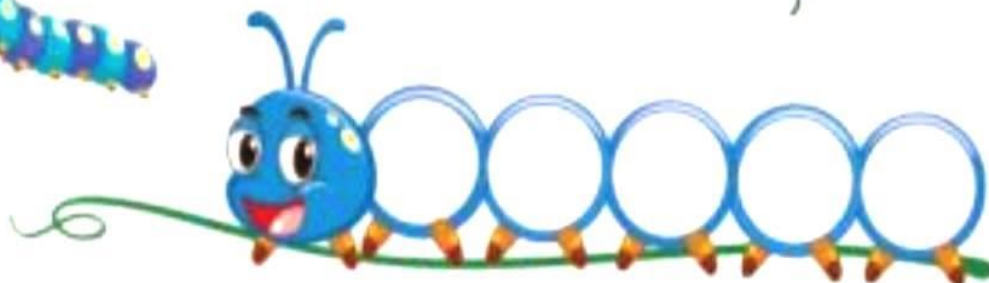
93 39 33 23 34



54 17 27 39 44



64 86 68 78 98





### 3. Addition

$$\begin{array}{r} 24 \\ + 47 \\ \hline \end{array}$$

$$\begin{array}{r} 15 \\ + 45 \\ \hline \end{array}$$

$$\begin{array}{r} 29 \\ + 26 \\ \hline \end{array}$$

$$\begin{array}{r} 17 \\ + 77 \\ \hline \end{array}$$

$$\begin{array}{r} 43 \\ + 29 \\ \hline \end{array}$$

$$\begin{array}{r} 62 \\ + 18 \\ \hline \end{array}$$

$$\begin{array}{r} 29 \\ + 27 \\ \hline \end{array}$$

$$\begin{array}{r} 76 \\ + 16 \\ \hline \end{array}$$

$$\begin{array}{r} 29 \\ + 47 \\ \hline \end{array}$$

$$\begin{array}{r} 41 \\ + 49 \\ \hline \end{array}$$

$$\begin{array}{r} 14 \\ + 66 \\ \hline \end{array}$$

$$\begin{array}{r} 24 \\ + 27 \\ \hline \end{array}$$

$$\begin{array}{r} 51 \\ + 29 \\ \hline \end{array}$$

$$\begin{array}{r} 33 \\ + 48 \\ \hline \end{array}$$

$$\begin{array}{r} 48 \\ + 15 \\ \hline \end{array}$$

$$\begin{array}{r} 39 \\ + 48 \\ \hline \end{array}$$

$$\begin{array}{r} 48 \\ + 22 \\ \hline \end{array}$$

$$\begin{array}{r} 31 \\ + 29 \\ \hline \end{array}$$

$$\begin{array}{r} 25 \\ + 66 \\ \hline \end{array}$$

$$\begin{array}{r} 69 \\ + 16 \\ \hline \end{array}$$

4.

**Write the Number.**

1. thirty \_\_\_\_\_

2. thirty -seven \_\_\_\_\_

3. thirty-one \_\_\_\_\_

4. thirty-eight \_\_\_\_\_

5. thirty-five \_\_\_\_\_

5.

**Write the Number Name.**

1. 34 \_\_\_\_\_

2. 30 \_\_\_\_\_

3. 33 \_\_\_\_\_

4. 39 \_\_\_\_\_

5. 32 \_\_\_\_\_