

DELHI PUBLIC SCHOOL, DHANBAD

CLASS V

SCIENCE JULY ASSIGNMENT

NAME : _____ SEC : _____ ROLL NO. _____

I. DEFINE THE FOLLOWING TERMS:-

1. Vaccination –
2. Infectious Diseases –
3. Vectors -

II. GIVE REASONS FOR THE FOLLOWING:-

1. Non-communicable Diseases are also called Deficiency Diseases.
2. Proteins are also known as Body-building food.

III. COMPETENCY BASED QUESTIONS:-

1. Iron : _____ :: Iodine : Goitre.
2. Healthy Skin : Vitamin A :: Proper functioning of nervous system: _____.
3. Sleeping Sickness : Mosquito bite :: _____ : Through air.

IV. DRAW NEATLY A WELL LABELLED DIAGRAM OF THE FOLLOWING:-

1. Any 2 rich sources of Energy giving food.
2. A rich source of - Calcium, Vitamin C, Vitamin D, Phosphorous.

Delhi Public School, Dhanbad

English Monthly Assignment (July)

Std V

Refer to your English Workbook chapter 3 & chapter 4 and do as instructed in the book itself.

1. GRAMMAR A. Tick the correct words to complete these sentences:- nos. 1 to 6
2. B. Complete these sentences with the correct reflexive pronouns. Nos. 1 to 6
3. VOCABULARY A. Circle the correct homophones in each pair of sentences. Nos. 1 to 5
4. B. Complete these sentences with the correct forms of have and take. Nos. 1 to 6

Chapter 4.

COMPRESSION:

5. Choose the correct answers. Nos. 1 to 5

6. GRAMMAR: A. Identify the highlighted words as Main verbs(M) or auxiliary verbs (A). Nos. 1 to 6
7. B. Tick the correct words to complete these sentences. Nos 1 to 6
8. VOCABULARY : Complete these sentences with the antonyms of the words in the box. Nos. 1 to 6
9. SPELLINGS: Tick the correct spellings. Nos. 1 to 10.

Class 5

July'23 Monthly Assignment

Social Studies

Q1. Give short answer:

- a. Name 2 polar deserts.
- b. Desert areas lie between which two latitudes in the northern as well as southern hemisphere.
- c. Deserts are classified in how many types? Name them.
- d. Name two cold deserts found in China.
- e. Name the major climatic zones found on Earth.

Q2 Give reason :

a. The higher we go the cooler it becomes

b. Camels are the most common means of transportation in deserts.

c. Ocean currents affect the climate of a place

d. Plants in deserts have no leaves or very few leaves

Q3 Define

- a. Humidity
- b. climate
- c. weather

Q4. Name :

- a. Two animals found in deserts
- b. Two birds found in deserts
- c. Two plants found in deserts

Q5 Name the factors that affect the climate of a place.

DELHI PUBLIC SCHOOL, DHANBAD

MATHS ASSIGNMENT JULY-2023

CLASS – V

1. The daily earnings of a worker in a factory during a week are:
Rs. 126, Rs. 132, Rs. 105, Rs. 110, Rs. 150, Rs. 85, Rs. 104
Find his average daily earning.
2. Find the average of first six multiples of 7.
3. Find the average of 3, 0.3, 0.03, 0.003, and 0.0003.
4. Find the average of all odd numbers between 30 and 40.
5. The day time temperatures recorded over 5 consecutive days in October were 14.6°C , 15.2°C , 15.8°C , 16.1°C , and 16.3°C . Find the average temperature.
6. Convert to 12-hour clock time.
 - a.) 1530 hours
 - b.) 2250 hours
7. Add 4h 32 min 15 s and 3 h 21 min 35 s
8. Sonu slept at 9:45 p.m. and woke up at 6:40 a.m. For how long did Sonu sleep?
9. Subtract 15 years 9 months from 21 years.
10. Find the time interval between 7:25 a.m. and 4:10 p.m.?

DELHI PUBLIC SCHOOL

HINDI ASSIGNMENT FOR THE MONTH OF JULY

CLASS – 5

प्रश्न-1. नीचे लिखे वाक्यों में उचित सर्वनाम शब्द भरिए।

- क. ----- गृहकार्य कर रही हूँ।
ख. ----- कल कहाँ जा रहे हैं?
ग. घर के बाहर ----- खड़ा है।
घ. ----- मेहनत करेगा ----- सफल होगा।
ङ. आज ----- से मिलने ----- आ रहा है?

प्रश्न-2. नीचे लिखे शब्दों के वचन बदलिए।

- क. दवा - -----
ख. हाथी - -----
ग. पुस्तक - -----
घ. चिड़िया - -----

प्रश्न-3. अशुद्ध शब्दों को शुद्ध करके लिखें।

- क. अजाद - -----
ख. परिक्षा - -----
ग. दवाईयाँ - -----
घ. वधु - -----

प्रश्न-4. नीचे लिखे वाक्यों में उचित विभक्ति को लिखें।

- क. उसके पिता ने कहा ----- बाहर बहुत ठंड है।
ख. सोहन ----- कुर्ता नीला है।
ग. प्रतिदिन दाँतों ----- साफ करना चाहिए।
घ. वहाँ रमेश ----- पुस्तकें रखीं हैं।

प्रश्न-5. योग्यता पर आधारित प्रश्नों के उत्तर दें।

- क. कलम - लिखने का काम
चाकू - -----
ख. साल में आता है एक बार, लगता हमको है त्योहार,
केक काटते खुशी मनाते, हमें मिलते खूब उपहार



Delhi Public School, Dhanbad


Monthly Assignment(July)


Subject: Computer

Std:V



Q1. See the picture and complete the table given below:



Things	Shapes	Tabs	Group
Tree			
Roof			
Windows and Door			
Fence			
Cloud			
Sun			
Rays			
Outline for the banner	 Not to be filled		
WordArt			
3-D Rotation			
Outline colour of the shape			

Q2. See the picture given below and complete the steps.

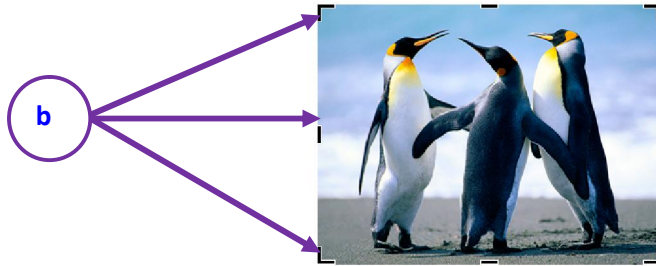


- Click on _____ tab
- Click on _____ Pictures in the _____ group .The _____ dialog box appears with a search box.
- Type the _____ of the picture you are looking for and press _____ key.

d. Click on the _____ . The picture gets selected.

e. Click on _____ button.

Q3. With reference to the given picture below answer the given questions:



a. Which command is used in the above picture?

b. What is (b) known as?

c. Write a short note on the command used for.

Q4. Complete the steps to insert the picture given below



a. Click on _____ tab

b. Click on _____ option in the _____ group .The _____ dialog box appears.

c. Select a _____ to be inserted.

d. Click on _____ button.

Q5. Give answer in short for the following:

a. How many categories of shapes are there? Name any four.

b. Name the Shape formatting options.

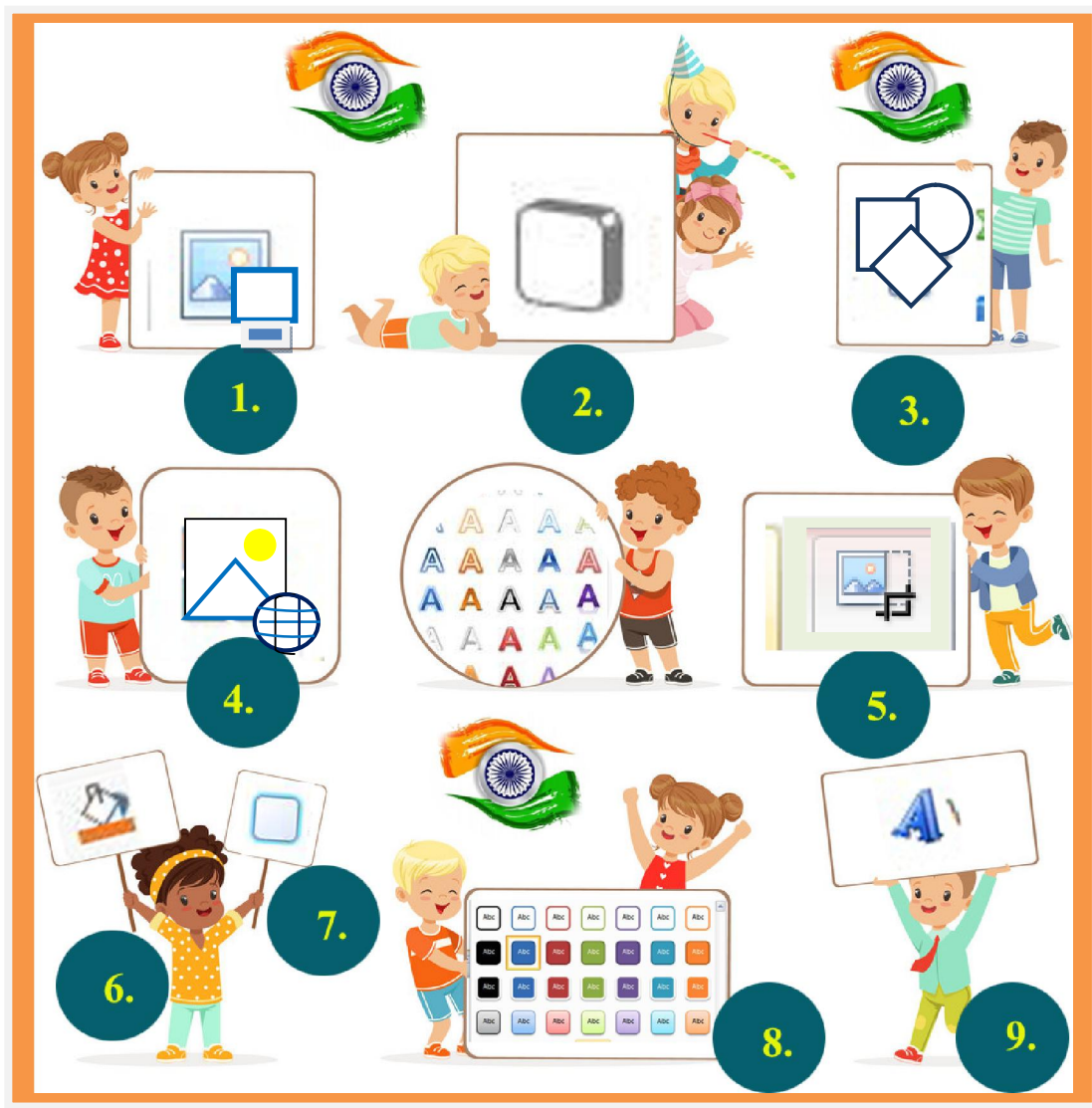
c. Name the option which help you to insert text in the shape.

d. Name the option that is used to write the decorative text in a document.

e. Name the option that helps you to change the color, width or line style of the outline of the text.

f. Name the effect that helps to apply shadow effects to the text.

Q6. Identify the icons:

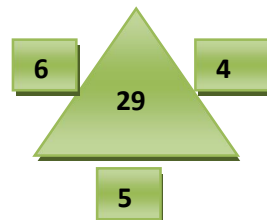
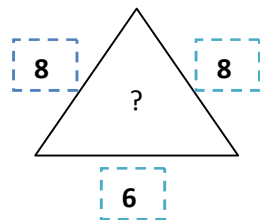
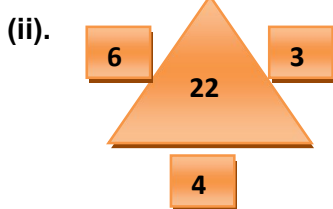




Q1. Answer the following questions:

(i) Arrange the following in a meaningful order.

1. Table 2. Tree 3. Wood 4. Seed 5. Plant
- (a) 2,3,1,4,5 (b) 3,5,4,1,2 (iii) 4,5,2,3,1 (iv) 1,2,3,4,5



- (a) 25 (b) 37 (c) 45 (d) 70

(iii). Look at this series: 7, 10, 8, 11, 9, 12, ... What number should come next?

- A. 7 B. 12 C. 10 D. 13

(iv). Look at this series: 80, 10, 70, 15, 60 ... What number should come next?

- A. 20 B. 25 C. 30 D. 5

(v). Which word does NOT belong with the others?

- A. index B. glossary C. chapter D. book



जुलाई - मासिक गृहकार्यम् 2023-24

कक्षा-पञ्चमी, संस्कृतम्

निम्नलिखितानि त्रिषु वचनेषु लिखत।

एकवचनम्

द्विवचनम्

बहुवचनम्

1. कमल

2. पाटल

3. आम्र

4. पुस्तक

5. पर्ण

6. चक्र

7. गृहजन

8. गृह

9. वलय

10. पुष्प