


# DELHI PUBLIC SCHOOL

## Monthly Assignment (August) Class - Prep. Sub - English

Name \_\_\_\_\_ Sec \_\_\_\_

### 1. Complete the sentence with This/That

1) \_\_\_\_\_ is a ruler.



2) \_\_\_\_\_ is a book.



3) \_\_\_\_\_ is a pencil.



4) \_\_\_\_\_ is a schoolbag.



5) \_\_\_\_\_ is a rubber.



### 2. Match the animals with their home



Shed



Stable




Sty




Coop

### 3. Write A/ An

\_\_\_ apple 

\_\_\_ kite 

\_\_\_ pen 

\_\_\_ car 


\_\_\_ orange 


\_\_\_ elephant 


\_\_\_ chair 

\_\_\_ shirt 


\_\_\_ desk 

\_\_\_ rabbit 

\_\_\_ umbrella 

\_\_\_ egg 

\_\_\_ giraffe 

\_\_\_ eraser 

### 4. Look at these pictures.



Q. Complete the sentences with correct Plurals.

a. There are two \_\_\_\_\_.





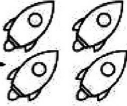

b. There are three \_\_\_\_\_.

c. There are four \_\_\_\_\_.

d. There are five \_\_\_\_\_.

e. There are six \_\_\_\_\_.

## 5. Write These/ Those

1. \_\_\_\_\_ are cats. → 
2. \_\_\_\_\_ are dogs. → 
3. \_\_\_\_\_ are apples. → 
4. \_\_\_\_\_ are bags. → 
5. \_\_\_\_\_ are rockets. → 
6. \_\_\_\_\_ are ducks. → 

## 6. Jumbled words

1. TAB -
2. PAC -
3. APM -
4. KOB0 -
5. IFSH -

# DELHI PUBLIC SCHOOL, DHANBAD

## MATHS MONTHLY ASSIGNMENT August

CLASS. PREP 2025. - 26



Greater than

&

Less than



Put the greater than or less than symbol in the circle to make the number sentence true.

$3 \bigcirc 5$

$7 \bigcirc 8$

$1 \bigcirc 9$

$2 \bigcirc 1$

$4 \bigcirc 6$

$7 \bigcirc 8$

$5 \bigcirc 6$

$3 \bigcirc 7$

$2 \bigcirc 3$

$4 \bigcirc 2$

$5 \bigcirc 1$

$9 \bigcirc 2$

$5 \bigcirc 3$


$2 \bigcirc 4$


$6 \bigcirc 3$





# Mixed Tables


$3 \times 4 =$  


$2 \times 6 =$  


$5 \times 3 =$  


$5 \times 7 =$  


$4 \times 2 =$  


$3 \times 3 =$  


$2 \times 9 =$  


$2 \times 7 =$  


$4 \times 4 =$  

$4 \times 6 =$  

$5 \times 9 =$  

$5 \times 5 =$  

$3 \times 7 =$  

$2 \times 3 =$  

# Before, After and Between

Fill in the numbers Before, After and Between

\_\_\_\_, 9

2, \_\_\_\_, 4

5, \_\_\_\_

\_\_\_\_, 4

4, \_\_\_\_, 6

7, \_\_\_\_

\_\_\_\_, 5

6, \_\_\_\_, 8

6, \_\_\_\_

\_\_\_\_, 10

3, \_\_\_\_, 5

2, \_\_\_\_

\_\_\_\_, 6

9, \_\_\_\_, 11

8, \_\_\_\_

\_\_\_\_, 7

5, \_\_\_\_, 7

9, \_\_\_\_

\_\_\_\_, 3


7, \_\_\_\_, 9

3, \_\_\_\_

\_\_\_\_, 8

1, \_\_\_\_, 3

4, \_\_\_\_





# Missing Numbers 21 - 60

Fill in the missing numbers.

**Forward Counting 21 to 50**

21

23

25

27

30

32

34

36

39


41

43

47

50

Count backwards from 20 to fill in the missing numbers of the series.



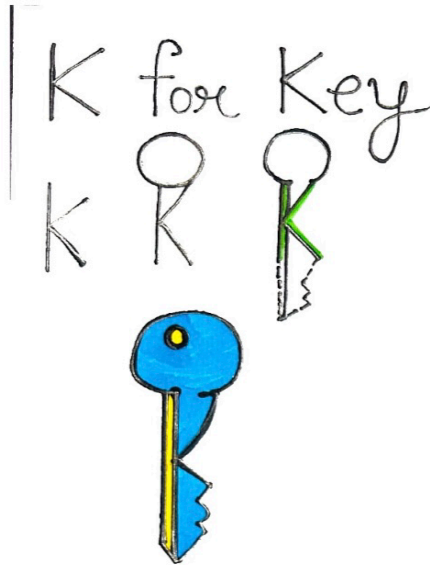


**DELHI PUBLIC SCHOOL, DHANBAD**  
**MONTHLY ASSIGNMENT (AUGUST))2025**



**CLASS - PREP**

**NAME - \_\_\_\_\_ SECTION- \_\_\_\_**

**DRAW AND COLOUR THE PICTURES BY FOLLOWING  
THE STEPS GIVEN**



M for Mouse



N for Net



**Colour the picture**

**A Rainy Day** 🌧️





**Draw the pictures with the alphabets A, C, F and H**

