

DELHI PUBLIC SCHOOL, DHANBAD

COMPUTER ASSIGNMENT (OCTOBER) 2024-2025

NAME _____ CLASS – 1 _____ ROLL NO. _____

Q. CHOOSE THE CORRECT ANSWER AND WRITE IN THE BLANKS.

- 1) Mouse is a _____ device.
a) clicking b) pointing
- 2) A mouse has _____ buttons.
a) 2 b) 3
- 3) Mouse is used for _____
a) typing b) playing games
- 4) The small arrow on screen is called _____
a) mouse pointer b) keys
- 5) _____ is an input device.
a) Monitor b) Mouse

Q. Answer the following questions in one word:

a. How many alphabet keys are there on a keyboard?

Ans. _____

b. How many number keys are there on a keyboard?

Ans. _____

Q. Write the missing letters:

a. K _ Y B _ A _ D

b. E _ T _ R

c. M _ N I _ O R

d. C _ M P _ T _ R

e. C U _ S _ R

f. N _ M B _ R

Matching - Computer Parts

Directions: Identify and match each computer term.



1.

A. Keyboard



2.

B. Monitor



3.

C. Printer



4.

D. CPU



5.

E. Mouse



6.

F. Speakers

DELHI PUBLIC SCHOOL
MONTHLY ASSIGNMENT (OCTOBER)
SUB : ENGLISH

NAME : _____ SEC : _____

(1) Fill in the missing letters of ACTION

WORDS :

a) W R _____ T _____ N G

b) E _____ T _____ _____ G

c) J _____ M _____ I _____ G

d) S _____ _____ G _____ _____ G

e) D _____ N C _____ _____ G

f) R E _____ D _____ _____ G

g) C O _____ K _____ _____ G

h) R U _____ _____ I N _____

(2) Re-write the sentences using Capital

letters and full stop where ever needed :-

(a) my grand parents live in Delhi

(b) I love to have ice cream

(c) anil and rohan love sports

(d)I help my brother in doing his home
Work

(e) alka eats a mango

(3) Match the opposites :-

Big

stand

Hard

small

Night

Out

Tall

Hot

Come

stop

In

Day

Sit

soft

Dry

go

Cold

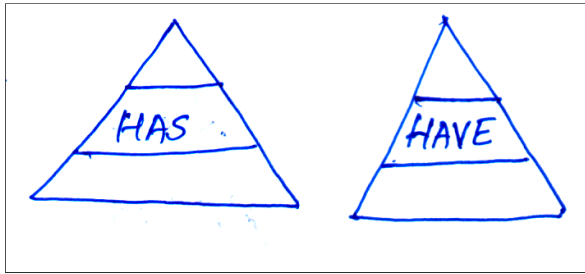
short

Start

Wet

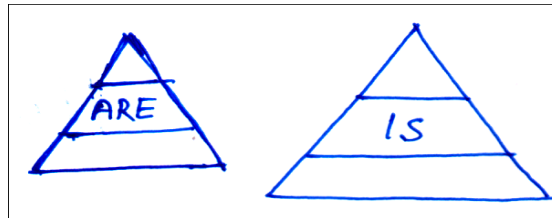
(4) Read the sentences and colour the triangles with the correct words.

(a) I



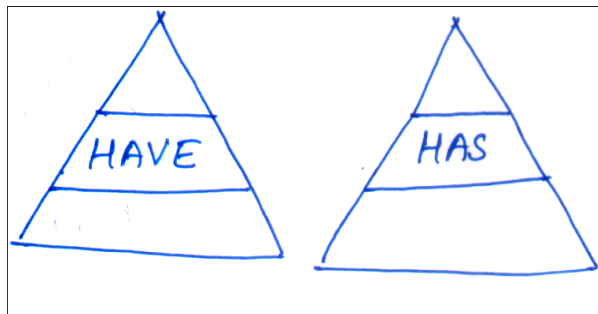
a new bag.

(b) They



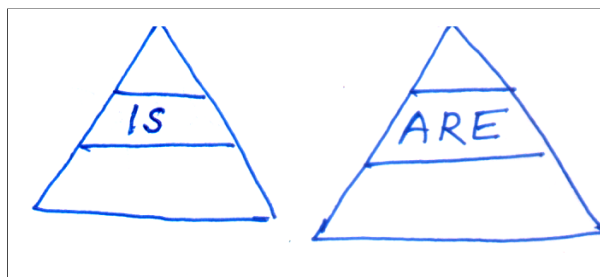
playing.

(c) she



a doll.

(d) He



my friend.

DELHI PUBLIC SCHOOL, DHANBAD

EVS ASSIGNMENT (OCTOBER) 2024-2025









NAME _____ CLASS – 1 _____ ROLL NO. _____

Q. FILL IN THE BLANKS:

Hospital, bank, park , doctor, neighbourhood, postbox, fireman, school,
green grocer , policeman

1. We go to the _____ when we are sick.
2. Letters are posted in a _____.
3. A place where children go to play _____.
4. The _____ protects us from thieves and robbers.
5. The _____ examines the patients and gives medicine.
6. The _____ puts off the fire.
7. I go to the _____ to study.
8. We buy green vegetables and fruits from _____.
9. Our neighbours and the places around our house form our _____.
10. We keep our money and jewellery in a _____.

Animal Homes


	An <input type="text"/> is a house for an ant.	
	A <input type="text"/> is a house for a bee.	
	A <input type="text"/> is a house for a spider.	
	A <input type="text"/> is a house for a rabbit.	

How Many?

I have _____ hands



I have _____ eyes



I have _____ ears



I have _____ mouth



I have _____ nose



I have _____ legs



I have _____ fingers



I. Tick the correct answer

1. Which plant has thorns?
 - a. Grass
 - b. Spinach
 - c. Cactus
2. Which tree has no branches?
 - a. Mango
 - b. Neem
 - c. Coconut
3. Which of the following is a plant product?
 - a. Perfume
 - b. Milk
 - c. Wool
4. _____ needs support to grow upwards
 - a. Trees
 - b. Climbers
 - c. Shrubs
5. Which part of the plant makes food?
 - a. Fruit
 - b. Leaves
 - c. Root

II. Give 2 examples of following parts of the plants we use as food

1. Stem _____
2. Root _____
3. Leaves _____
4. Seeds _____
5. Flowers _____

III. Match the following

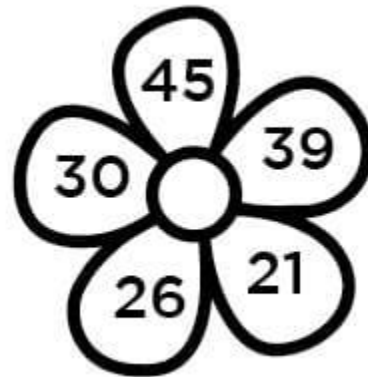

- | | |
|----------------|--------|
| 1. Cauliflower | seed |
| 2. Green peas | stem |
| 3. Sugarcane | flower |
| 4. Carrot | leaf |
| 5. Spinach | fruit |
| 6. Mango | root |

DELHI PUBLIC SCHOOL, DHANBAD


MATHS MONTHLY ASSIGNMENT (OCTOBER' 2024 -25)

Name: _____ Class: 1 _____ Roll NO: _____

Q1. Colour the petal with the biggest number in each flower -



Q2. Colour the smallest balloon in each bunch -



Q3. Mixed Tables –

$6 \times 4 = \underline{\hspace{2cm}}$

$10 \times 9 = \underline{\hspace{2cm}}$

$9 \times 5 = \underline{\hspace{2cm}}$

$2 \times 3 = \underline{\hspace{2cm}}$

$8 \times 8 = \underline{\hspace{2cm}}$

$4 \times 2 = \underline{\hspace{2cm}}$

$5 \times 6 = \underline{\hspace{2cm}}$

$3 \times 7 = \underline{\hspace{2cm}}$

$6 \times 2 = \underline{\hspace{2cm}}$

Q4. Write the number names for the given numbers –

11- _____

17 - _____

89 - _____

92 - _____

66 - _____

73 - _____

Q5. Add on the number line –



$$4 + 5 = \underline{\hspace{2cm}}$$



$$3 + 2 = \underline{\hspace{2cm}}$$

Q6. Put $>$, $<$ or $=$ sign –

$$31 \underline{\hspace{1cm}} 25$$

$$39 \underline{\hspace{1cm}} 43$$

$$46 \underline{\hspace{1cm}} 38$$

$$50 \underline{\hspace{1cm}} 37$$

$$37 \underline{\hspace{1cm}} 39$$

$$26 \underline{\hspace{1cm}} 22$$

$$41 \underline{\hspace{1cm}} 41$$

$$50 \underline{\hspace{1cm}} 80$$

Q7. Arrange the numbers in ascending order –

30	34	75	46	25	49

40	39	57	75	44	10

Q8. Arrange the numbers in descending order –

90	40	65	30	50	10

69	99	47	15	58	3

Q9. Subtract on the number line –



$$8 - 6 = \underline{\hspace{2cm}}$$



$$9 - 6 = \underline{\hspace{2cm}}$$

Q10. Match the following –

second	•	•	10th
fourth	•	•	1st
fifth	•	•	2nd
ninth	•	•	5th
first	•	•	4th
tenth	•	•	9th

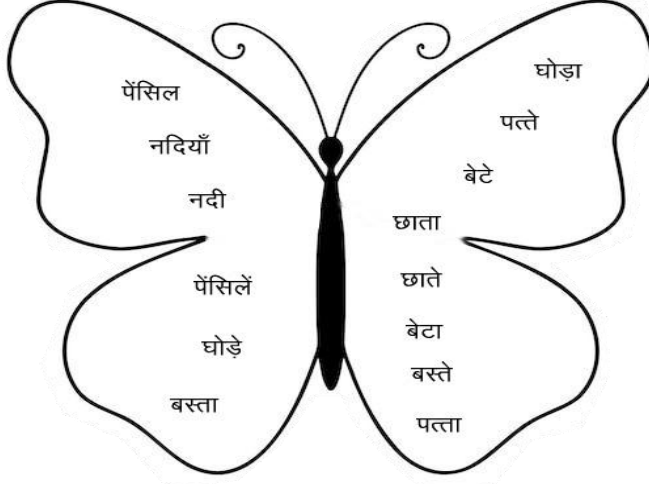
Q11. Fill in the blanks –

- 1) 15 comes before _____ .
- 2) _____ comes after 19.
- 3) _____ comes between 10 and 12.
- 4) 8 comes before _____ .
- 5) 19 comes after _____ .

DELHI PUBLIC SCHOOL, DHANBAD
HINDI ASSIGNMENT
OCTOBER (2024-2025)

Name- Class I Sec-

क) तितली में से एक-अनेक शब्द छाँटकर सही स्थान पर लिखें-



एक	अनेक
1.	1.
2.	2.
3.	3.
4.	4.
5.	5.

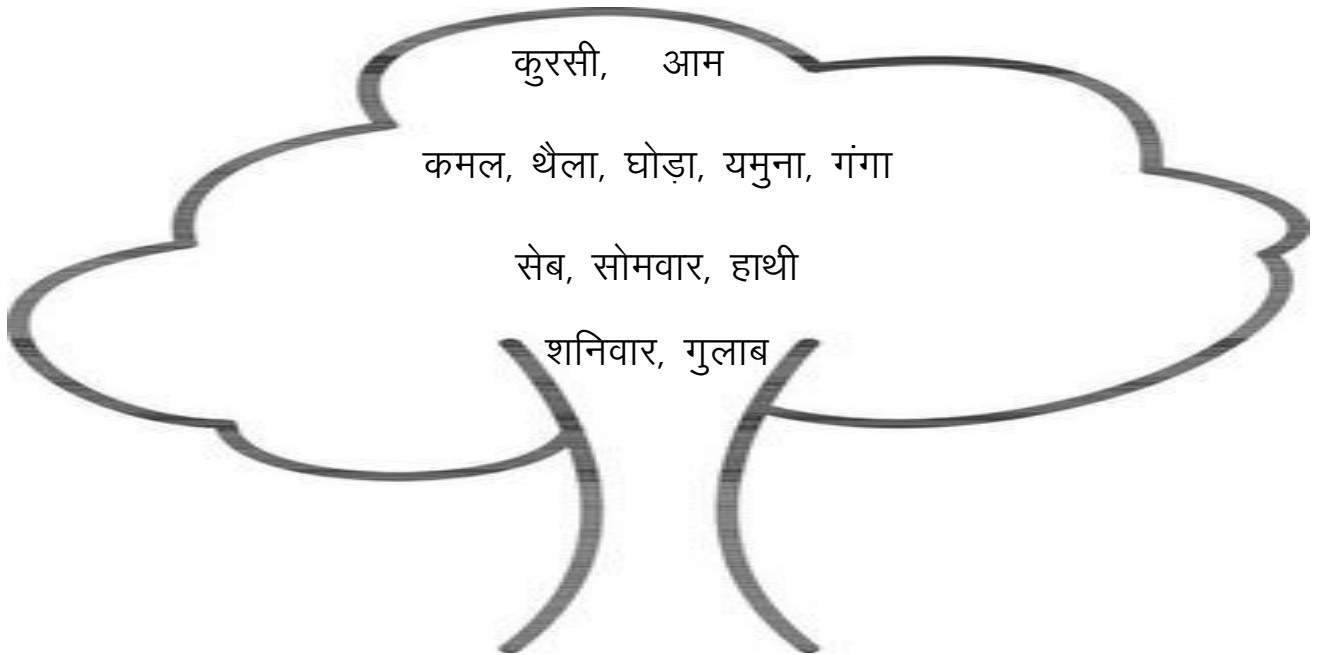
ख) लिंग बदलें -

1) मोर	-	6) पुत्री	-
2) दादा	-	7) बकरा	-
3) नानी	-	8) मामी	-
4) धोड़ा	-	9) धोबिन	-
5) भाई	-	10) मुरगी	-

ग) मिलता-जुलता शब्द लिखें।

- 1) मोल, तोल -
- 2) भैया, नैया -
- 3) खेल, बेल -
- 4) सुनना, बुझना -
- 5) खील, चील -
- 6) काम, जाम -

घ) पेड़ पर लिखे नामों को सही जगह पर लिखो -



वस्तुओं के नाम -	फलों के नाम -
पशुओं के नाम -	फूलों के नाम -
नदियों के नाम -	दिनों के नाम -