

SECTION A: COMPRESSION PASSAGE

Once there lived a carpe named Kashi.He had a five year old son. His name was Vasu. Kashi's father Ramu was too old and he also stayed with them. Kashi began to think that his father was of no use to him because he was too old to do any work .Kashi always spoke angrily to his father.One day Kashi gave food on a mud plate to his father .Being too old Ramu was not able to hold the **mud plate**. He dropped it down and broke it Kashi became very angry and scolded his father. Vasu observed this. The next day Kashi gave a new mud and went out to work. When he came back he saw the new mud plate also broken into pieces. He scolded his father badly and warned him, 'old man, if you break the next plate also there will be no food for you .'Vasu was listening to his father's words. The next day, in the evening ,when he came back home, he saw his son doing some work with his carpentry tools. He was surprised to see this and happily went near him, and asked Vasu, 'What are you doing, my son?' Vasu replied, ' Dad, I am making a plate of wood for you. When you become old I will give you this wooden plate so that you will not break it and I need not send you out of the house.' Kashi realised his mistake and apologized to his father for his mistakes. He never ill treated his father after that.

1. Read the above passage and complete the sentences:-
 - a) Kashi always spoke angrily _____.
 - b) The next day,in the evening,when he came back home,he saw his son doing some _____.
2. Tick the correct choice:-
 - a) Kashi gave his father a plate made of
 - i) Wood ii) mud. iii) steel
 - b)Vasu was ___ years old
 - i) six. ii) five. iii) four

SECTION B: ESSAY/ NOTICE/LETTER

3. Writ a notice regarding your lost story book.

SECTION C: GRAMMAR

4. Change the following into Simple Past Tense:-
 - a) He is playing the guitar.
 - b) It is raining heavily.
5. Change the following sentences into the past continuous tense:-
 - a) They are sitting near the river.
 - b) I drink hot milk
6. Fill in the blanks with the simple future form of the verbs:-
 - a)I _____ in the park.
 - b) They _____ the cricket match.

SECTION D: LITERATURE

1. Answer the following questions:-
 - a) What is Vallam Kalli ?Where is it held and when?
 - b) How did the snow make things more difficult ?
2. Make a word tree of 4 words with:- so
3. Make a word family of 4 words with:- autographed
4. Write who said to whom:-
 - a) " I've been so frightened you can't think."
 - b) "So what about this super ICC team?"

5. Write true or false for the given statements:-

- a) Only Prahlad, Newton and I set foot on Martian soil.
- b) 2017 is certainly a good year for Smriti.

6. Fill in the blanks with suitable words:-

- a) Smriti 's been selected to play for a team called _____ heat.
- b) In Bengal they prefer their _____ dahi.

7. Complete the poem:-

Faster than _____, faster than _____,
Bridges and _____, _____ and ditches;
And _____ along like _____ in a _____,
All _____ the meadows the _____ and _____:
All of the _____ of the _____ and the plain
Fly as _____ as _____ rain;

SECTION D: COMPETENCY BASED QUESTIONS

8. i) It is an adverb

- a) sleep b) students
- c) steadily

ii) It is a Modal verb

- a) Must b) run. c) must

iii) Circle the odd one out:-

bedsheet, tablecloth, bedridden, bedcover

iv) Complete the pattern:-

112AAP, 224BBQ, 336CCR, _____

Learn all essays, letter and notice done in class.

XXXXXXXXXXXXXXXXXXXXXXXXXXXX



Delhi Public School, Dhanbad

Monthly Assignment(January)

Subject: Computer

Std:V



Q1. Fill in the blanks:

- _____ option is used to create additional text placeholders in a slide.
- _____ option is used to change the alignment of the text between top and bottom edges of the placeholder.
- _____ a presentation means to apply backgrounds to the slides, to animate the text, pictures, shapes and other objects in our presentation.
- Transition is a special effect used to _____.
- _____ background style adds a shaded slide background.
- Dial-up connection uses a _____ to connect a computer to the Internet.
- A _____ is a collection of data or information.

Q2. State whether the following statements are true or false:

- Deleted files are stored in Recycle Bin and can be restored. _____
- We can copy files in the same folder. _____
- A person who uses the internet is called a digital person. _____
- Instagram is a photo and video and sharing social networking service. _____
- We can modify the slide background using Change Background option. _____
- It is possible to insert WordArt in a slide. _____

Q3. Match the following:







A

- Page Up
- CTRL+End
- Format Background
- Shaded Background
- FYI
- :-D

B

- Design Tab
- For Your Information
- Gradient Fill
- key to move to the last slide
- Laughing
- key to move to the previous slide

Q4. Identify the Icons:

- a. 
- b. 
- c. 
- d. 
- e. 
- f. 

Q5. Choose the correct option from the given choices:

- a. _____ is the default text direction
(i) Horizontal (ii) Vertical (iii) Stacked
- b. _____ is used to insert ready-made geometric shapes in a slide.
(i) WordArt (ii) Shapes (iii) Pictures
- c. _____ option is used to set a picture as a background.
(i) Gradient (ii) Solid (iii) Picture
- d. _____ is an online Internet service that facilitates the people to build social relationship
(i) Internet (ii) Social Networking (iii) YouTube
- e. The short cut key for cut option is
(i) CTRL+X (ii) CTRL+C (iii) CTRL+V
- f. The files or folder that we delete, move to the
(i) ThisPC (ii) Recycle Bin (iii) Start Button

Q6. Answer the following questions:

- a. Write the steps to add additional text in your slide.
- b. What is the use of built-in Templates in PowerPoint.
- c. How will you apply transition effect on the slide?
- d. Write the steps to apply a theme to a presentation.
- e. What is an E-mail id? Name its parts
- f. Differentiate between dial up connection and Broadband connection
- g. Define a file and a folder.

Q7. Write a short note on the following:

- a. This PC b. Restoring a file c. Align Text d. Slide Transition e. Social Networking f. E-mail Id
- g. emoticon h. Acronyms

Q8. Draw the following

- a. Text Box b. Align Left c. Text Direction d. Align Text e. Pictures f. Insert Table g. Online Pictures

h.Insert SmartArt Graphic i.Insert Video j.Shapes k.Sticking out tongue l.shocked m. any four social networking sites n. Word file

Q9. Write the key combinations for the following:

- a.cut
- b.copy
- c.paste
- d.To create a new folder
- e. Insert a new slide
- f.Align Right
- h.Justify
- i.key to move to the first slide

Q10. Write the full forms of the following:

- a.ISP
- b.MTNL
- c.BSNL
- d.Modem
- e.DSL
- f.BTW
- g.LOL
- h.2QT
- i.e-mail
- Comp

Q11. Competency Based Questions

1. Find the missing element: GHY, IJX, KLW, _____

A) MNO B) MNU C) MNV d) MNW

2. In a certain code, COMPUTER is written as DPNQVUFS. How is MONITOR written in that code?

(A) NPOJKL (B) NPOJUPS (C) RRSTUVWXYZ

3. If KNIFE is coded as 65137 and SAT is coded as 924, how is KITE coded?

a) 5427 b) 5724 c) 6147 d) 4761

4. In a certain code language 'go there' is written as 'LO PO' and 'stay there' is written as 'MO PO'. Find the code for 'there'

(i) LO (ii) PO (iii) MO (iv) GO

5. Find the missing number: Hint: Follow row-wise or column-wise

(i) 126 (ii) 146 (iii) 136 (iv) 156

4	32	4
8	145	9
5	?	11

DELHI PUBLIC SCHOOL

MATHS REVISION ASSIGNMENT- CLASS V

FEBRUARY – 2024

- Write the following in short form:
 - $50 + 6 + \frac{2}{100} + \frac{6}{1000}$
 - $900 + 90 + 9 + \frac{1}{10} + \frac{9}{100}$
- Convert the following fractions into decimals:
 - $\frac{13}{10}$
 - $\frac{351}{100}$
- Fill in the blanks:
 - The smallest composite number is _____.
 - _____ is the only even prime number.
 - Each prime number has exactly _____ factors.
 - The largest 2-digit prime number is _____.
 - _____ is neither a prime nor a composite number.
- Multiply 3.129 by 153
- Arrange in ascending order:
 - 32.05, 18.941, 9.01, 101.3, 50.75
 - 80.32, 80.712, 80.9, 80.548, 80.143
- Out of 1500 students of a school, only 50% passed. How many students failed?
- Solve:
 - $9.879 = 9 \times \text{_____} + 8 \times \text{_____} + 7 \times \text{_____} + 9 \times \text{_____}$
- Write the decimal for each of the following fractions:
 - $\frac{5}{10}$
 - $\frac{8345}{1000}$
- The HCF of two numbers is 12 and their LCM is 180. If one of the numbers is 36, find the other.
- Arrange $\frac{11}{13}, \frac{3}{13}, \frac{5}{13}, \frac{7}{13}$ in descending order.
- What can be the greatest capacity of a measuring jar that can be filled a number of times to measure 18 L and 27L?
- Find the greatest number that will divide 24 and 56 without leaving a remainder.
- What percent is 5mm of 2cm?
- Find the HCF and LCM of 270 and 450.
- Fill in the blanks with $>$, $<$, or $=$
 - $\frac{3}{10}$ _____ $\frac{7}{15}$
 - $\frac{11}{6}$ _____ $\frac{12}{5}$
- Find the area of a rectangle of length 15 cm, and breadth 11 cm.

17. Arrange $\frac{2}{7}, \frac{2}{13}, \frac{2}{5}, \frac{2}{11}$ in ascending order.

18. Write three fractions equivalent to $\frac{2}{9}$.

19. Compare $3\frac{4}{5}$ and $2\frac{5}{6}$

20. Find the volume of a cube whose side length is 21 cm.

21. Write first two multiples of 15.

22. Find the difference: $15.06 - 3.15$

SST class 5
Monthly Assignment

Q1 Name the person/party who gave the slogan

- a. " Purna Swaraj" _____
- b. " First they ignore you, then they ridicule you, then they fight you and then you win" _____
- c. "Give me blood and I will give you freedom"
- d. " Do or Die"
- e. "Swaraj is my birth right and I shall have it."

Q2 Answer the following questions:

- a. Name the two groups in which Indian National Congress got divided .
- b. Name the "Black Act"
- c. Name three important leaders of radical group
- d. Name two person who launched khilafat movement
- e. Name two revolutionaries.

Q3 Name the :

- a. movement launched by Indian National Congress against the partition of Bengal.
- b. Name the person who composed vande matram.
- c. Name the movement launched by Gandhiji to disobey Laws peacefully.
- d. Name the movement launched by Gandhiji which led to Dandi March.
- e. Name the movement during which Gandhiji asked the people to " Do or Die"
- f. Name the person who inaugurated the Parliament Building and when?

Q4 Define:

- a. boycott b. mutiny c. nationalism d. secular e. electoral college

Q5 Name the important dates:

- a. India became independent in _____
- b. Gandhiji was born in in _____
- c. Partition of Bengal _____
- d. Reunion of Bengal _____
- e. Mohan Das Karamchand Gandhi returned to India from South Africa _____
- f. Jallianwala Bagh massacre _____
- g. Demand of Purna Swaraj by Indian National Congress _____

- h. Number of members in Lok Sabha_____
- i. Members nominated by President of India to Rajya Sabha._____
- j. Council of states is known as_____
- k. _____ lays down the right to vote for all Indian citizens.
- l. India was considered as the _____ in the fifteenth century.

Q6. Identify the pictures given below:



Q1. DEFINE:-

- a. Eclipse
- b. Neuron
- c. Screw
- d. Satellite
- e. Natural Calamity

Q2. GIVE REASONS:-

- a. Nervous System is called Body's Communication System.
- b. Medulla is also known as Brain Stem.
- c. It is easier to push a heavy bag up a ramp than carrying it up a staircase.
- d. Life is not possible on moon.

Q3. Competency Based Questions:-

- a. Iris : _____ : : Pupil : Hole in the eye
- b. _____ : Wood :: Translucent Object: Frosted Glass.
- c. Lava : Hot molten material outside the earth's crust:: _____ : Hot molten material inside the earth's crust.
- d. Too much water along the banks of the river: _____ :: Scarcity of water and food : Famine.
- e. Memory and Thinking : _____ :: Reflex Action : Spinal Cord.

Q4. DRAW, LABEL AND COLOUR:-

- a. Solar Eclipse and Lunar Eclipse
- b. Internal structure of an eye.
- c. Structure of Brain
- d. An example of : Screw, Wedge, Inclined Plane, Second Class Lever.

Delhi Public School, Dhanbad

Class-5 Hindi Revision Assignment

1. निम्नलिखित प्रश्नों के उत्तर लिखिए।

- क. मामा जी ने बच्चों को हवा कैसे दिखाई?
- ख. जल के भीतर दूसरा ताजमहल कहां से आया?
- ग. तनीषा ने किसको पत्र लिखा है और क्यों?
- घ. ताजमहल किसने और क्यों बनवाया था?
- ङ. सौरभ के किस व्यवहार से लोगों को हंसी आ जाती था?

2. शब्दार्थ-

- क. पराजित करना
- ख. स्मरण
- ग. कृतज्ञता
- घ. आश्रय
- ङ. रोशनी
- च. प्रबंध
- छ. महसूस
- ज. मृदुल

3. कविता की पंक्तियां पूरी कीजिए।

ऐसे थे..... कि.....

..... की सीमा पाने

.....किरण- सी.....खोल

.....तारक.....के दाने

4. किसने किससे कहा -

- क. "हमारे साथ स्टेशन चलोगे।"
- ख. हां, हवा की अपनी कोई गंध नहीं होती। "
- ग. "आपको बाबूजी बुला रहे हैं।"
- घ. "यह कोई जादू का खेल नहीं है।"
- ङ. "आप बताइए ना! क्या पापा कभी लौटकर नहीं आएंगे?"

5. सही विकल्प के सामने सही का निशान लगाए।

- क. खाने में सबसे स्वादिष्ट क्या था

शाही पनीर पुलाव बादाम का खीर

ख. मामा जी ने बच्चों को किसके बारे में बताया था।

हवा पानी पृथ्वी

ग. बादशाह शाहजहां की बेगम का क्या नाम था ?

सलमा मेहताब मुमताज

घ. हमें पॉलिथीन के स्थान पर किसका प्रयोग करना चाहिए ?

कपड़े का थैला कागज का बैग दोनों

6. रेखांकित विशेषण संख्यावाचक हैं या परिणामवाचक ?

- a) चाय में थोड़ी चीनी डाल दीजिए।
- b) उसके पास बहुत समान है।
- c) मेले में बहुत लोग आए थे।
- d) मेरे कई दोस्त इस विद्यालय में पढ़ते हैं।

7. नीचे दिए गए वाक्यों में क्रिया का रूप अकर्मक है या सकर्मक?

- a) मैं अभी खाना नहीं खाऊंगा।
- b) रमा धीरे चलती है।
- c) नौकर ने कपड़े धोए।
- d) मैं दोस्तों के साथ घूमने गया।

8. दिए गए वाक्यों के काल बताइए।

- a) वह तैर रहा है।
- b) कल तक फूल मुरझा जाएंगे।
- c) तुम कल घूमने गए थे।
- d) शायद कल वर्षा होगी।
- e) मैं पढ़ रहा हूँ।

9. निम्नलिखित विराम चिन्हों के नाम लिखिए।

क. (!)

ख. (:)

ग. (“ “)

घ. (?)

ङ. (.)

च. (|)

10. विलोम शब्द लिखिए।

क. चलx.

ख. पठित

ग. उच्च x

घ. अमृतx

ङ. बंधन x

च. शुभx

छ. आयात x

ज. जटिलx

11. दिए गए शब्दों के दो दो पर्यायवाची लिखिए।

आंख, कपड़ा, अतिथि, राजा, घर

12. दिए गए अनेक शब्दों के एक शब्द लिखिए।

क. कविता लिखने वाला

ख. जो प्रतिदिन हो

ग. जो वर्ष में एक बार हो

घ. जो पहले ना पढ़ा गया हो

ङ. जो छोटा भाई हो

13. दिए गए मुहावरों के अर्थ लिखिए।

क. फुला ना समाना

ख. पीठ थपथपाना

ग. पहाड़ टूट पड़ना

घ. हवा से बातें करना

ङ. मुंह की खाना

14. श्रुति समभिन्नर्थक शब्द लिखिए।

a) अन्य-

अन्न

- b) ग्रह-
गृह-

15. अनेकार्थी शब्द के अर्थ बताएं।

- a) पद-
b) बाल-
c) आम -
d) दल -
e) अंबर-
f) वर-

16. योग्यता पर आधारित प्रश्न हल कीजिए।

क. अंधेरे में बैठी है एक रानी सर पर है आग और तन पर है पानी।

ख. बाहर से हराअंदर पीले मोती के दाने लोग हैं इसके दीवाने।

ग. दिखने में वह काला है

और जलने पर लाल,

फेंकने पर है वह सफेद

खोलो बच्चों उसका भेद ।

घ. बच्चा सच्चा कच्चा योग्यता

ङ. हंसना नाचना गाना चलना ओणम

17. किसी एक विषय पर अनुच्छेद लिखें।

जैसी करनी वैसी भरनी या अच्छा स्वास्थ्य

18. मित्र को जन्मदिन पर बधाई पत्र लिखिए।

19. गद्यांश पढ़कर नीचे दिए गए प्रश्नों का उत्तर दीजिए।

महान गणितज्ञ यूक्लिड'एस बहुत सरल स्वभाव के थे। जब भी कोई उनके पास किसी तरह की जानकारी लेने आता, तो वे उत्साह पूर्वक उसे सब कुछ बताते थे। इससे उन्हें संतोष मिलता था। एक दिन यूक्लिड' से एक लड़के ने ज्यामिति पढ़ने का आग्रह किया। यह प्रस्ताव उन्होंने सहज रूप से स्वीकार कर लिया। लड़का काफी प्रभावशाली था। एक दिन लड़के ने कहा-“इस प्रमेय को पढ़ने से मुझे क्या लाभ होगा?” यह सुनते यूक्लिड'एस नाराज हो गए। और अपनी नौकर से बोले- “ इसे एक ओवल (यूनानी सिक्का) दे दो, क्योंकि यह विद्या हासिल करने में कम, धन कमाने में अधिक रुचि रखता है।”

- a) महान गणितज्ञ यूक्लिड का कैसा स्वभाव था ?
b) उन्हें संतोष की अनुभूति कब होती थी?
c) लड़के ने यूक्लिड से क्या आग्रह किया था?
d) लड़के के किस विचार से यूक्लिड नाराज हो गए?
e) ” संतोष” तथा “ रुचि” के विलोम शब्द लिखिए ।