

# Delhi Public School

## Class-2 Hindi Assignment

### 1. निम्नलिखित प्रश्नों के उत्तर लिखिए।

- क. चुनमुन चिड़िया ने कालू कोए से क्या लाने के लिए कहा?
- ख. कालू कौआ डॉक्टर के पास क्यों गया?
- ग. दोनों बिल्लियां क्यों लड़ रही थीं?
- घ. चीटियां क्या कर रही थीं?

### 2. सही शब्द चुनकर रिक्त स्थान भरिए।

मिल-जुलकर, सर, झगड़, परिश्रमी

- क. रानी चींटी बहुत ..... थी।
- ख. सभी चीटियां ..... रहती थी।
- ग. बिल्लियां आपस में .....रही थीं।
- घ. रानी चींटी की बात सुनकर दोनों बिल्लियों ने ..... झुका लिया।

### 3. बहुवचन शब्द बनाइए।

- क. चींटी .....
- ख. रानी .....
- ग. बिल्ली .....
- घ. रोटी .....
- ङ. दान .....

### 4. अशुद्ध शब्दों को शुद्ध करके लिखिए।

- क. परीश्रमी .....
- ख. चीनि .....
- ग. शिघ्र .....
- घ. भुरी .....

### 5. योग्यता पर आधारित प्रश्न हल कीजिए।

- क. सोमवार के बाद कौन सा दिन आता है। .....
- ख. पक्षी आकाश में उड़ते हैं, तो मगरमच्छ कहां रहते हैं। .....
- ग. कौन सा पेड़ लंबा है और फल भी देता है। .....
- घ. कौन है जो रहता आकाश में पर हर दिन आकार बदलता है? .....
- ङ. सर्दी के बाद कौन सा मौसम आता है? .....



# Computer Monthly Assignment

## Std II

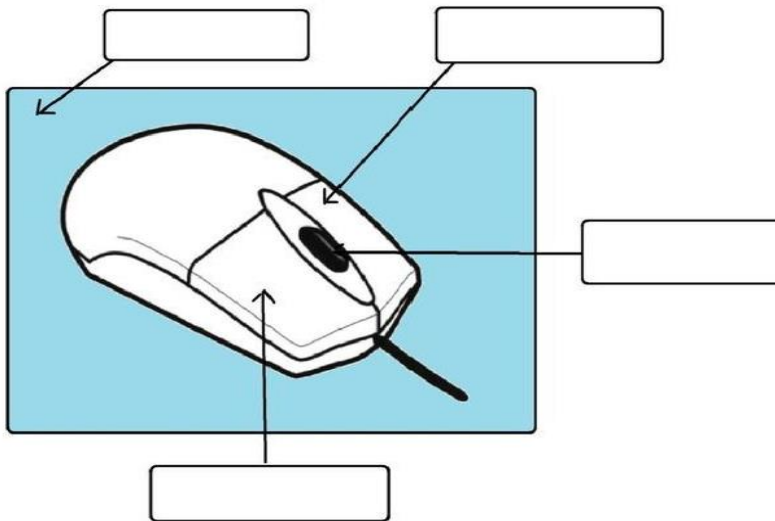
### 1. Fill in the blanks:-

1. A \_\_\_\_\_ mouse is not attached to the CPU Box, it works through signals.
2. The Pad on which you keep the mouse is called the \_\_\_\_\_.
3. \_\_\_\_\_ invented the first computer mouse. It was made of \_\_\_\_\_.
4. Move the mouse while keeping the left button pressed is called \_\_\_\_\_ a mouse.
5. The short cut menu is also known as \_\_\_\_\_ menu.

### 2. Draw three shapes of mouse pointer.



### 3. Label the parts of the computer mouse and colour it.



### Rewrite the following:-

The different actions can be done using the computer mouse are:-

**Click, Double click, Drag, and Right click, Scroll.**

---

---

---

---



**Monthly Assignment**  
**December**

Name : \_\_\_\_\_ Roll :\_\_

**Class :2 Sub:English**

Q1. Answer the following questions.

1 ) Why did mother Goat have to go out ?

\_\_\_\_\_  
\_\_\_\_\_.

2) What did Boris and Emma see from their hiding place?

\_\_\_\_\_  
\_\_\_\_\_.

Q2) Who said to whom?

“Now I can eat the little goats”

\_\_\_\_\_.

“ I can't swim”

\_\_\_\_\_.

Q3) Frame meaningful sentences.

Strong : \_\_\_\_\_

\_\_\_\_\_.

Promise :

\_\_\_\_\_

\_\_\_\_\_.

Q4) Fill in the blanks with am, is, are, was, were.

I \_\_\_\_\_ in another city for three years.

They \_\_\_\_\_ in Mumbai last month.

My father \_\_\_\_\_ a doctor.

She \_\_\_\_\_ at the party last night.

Q5) Underline the **past time** form of verb.

Mr. Gupta helped the poor.

The girl sang a song.

He watched television.

I slept for two hours.



# DELHI PUBLIC SCHOOL, DHANBAD

STD II EVS MONTHLY ASSIGNMENT (DECEMBER-23)

NAME \_\_\_\_\_ SEC \_\_\_\_\_ ROLL NO. \_\_\_\_\_

## FILL IN THE BLANKS

- 1) Air contains \_\_\_\_\_ in the form of water vapours.
- 2) People who cannot talk or hear communicate through \_\_\_\_\_ language.
- 3) A \_\_\_\_\_ helps us to know the direction of the wind.
- 4) \_\_\_\_\_ was sent down a telephone line for the first time in 1876, the year the phone was invented.
- 5) When wind blows gently, it is called \_\_\_\_\_.
- 6) The first electronic mail or e-mail was sent in 1972 by \_\_\_\_\_.
- 7) Dirty air is called \_\_\_\_\_ air.
- 8) \_\_\_\_\_ through internet is the fastest way of sending mails.
- 9) We must cover our \_\_\_\_\_ and \_\_\_\_\_ while coughing or sneezing.
- 10) \_\_\_\_\_ Is the fastest means of communication.

## WHO AM I

- 1) I am the audio means of mass communication. You can only hear me. \_\_\_\_\_
- 2) I am a special doctor. I treat diseases which are caused due to polluted air. \_\_\_\_\_
- 3) I am everywhere and you feel it when I move. I help you to breathe. \_\_\_\_\_

4) I am the audio-visual means of mass communication.

\_\_\_\_\_

### UNSCRAMBLE THE WORDS

- 1) EPOLEVNE \_\_\_\_\_
- 2) MUNITIONCACOM \_\_\_\_\_
- 3) ENTEPHOLE \_\_\_\_\_
- 4) LUTPOIONL \_\_\_\_\_
- 5) ZEEBRE \_\_\_\_\_

### QUESTION / ANSWER

1) Write any three important features of air.

Ans \_\_\_\_\_  
\_\_\_\_\_  
\_\_\_\_\_

2) Name the instrument used to find the direction of the wind.

Ans \_\_\_\_\_

3) What is storm ?

Ans \_\_\_\_\_  
\_\_\_\_\_  
\_\_\_\_\_


4) Name any four channels which broadcasts specially educational programmes.

Ans \_\_\_\_\_  
\_\_\_\_\_


5) What is the STD code of your city ?

Ans \_\_\_\_\_

**Draw a diagram showing air has weight.**



**Draw, name and colour any two means of mass communication.**



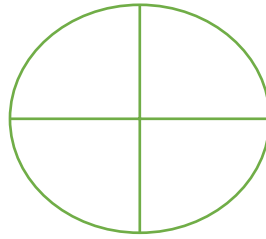


**DELHI PUBLIC SCHOOL, DHANBAD**  
**MATHS ASSIGNMENT ( DECEMBER ) 2023-2024**


NAME \_\_\_\_\_ CLASS – 2 \_\_\_\_\_ ROLL NO. \_\_\_\_\_

Q1. Shade the figures to show the given fraction.


$\frac{2}{4}$



$\frac{1}{3}$



$\frac{3}{4}$




$\frac{1}{2}$



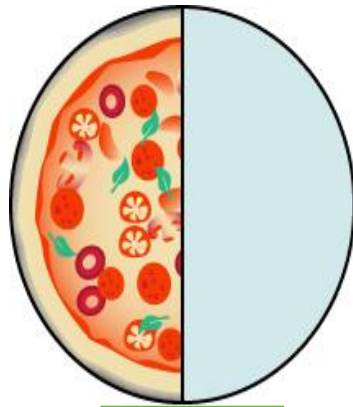
$\frac{3}{6}$



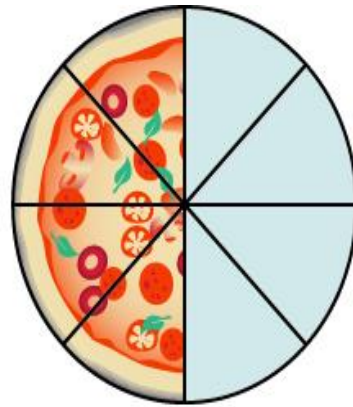
$\frac{1}{4}$



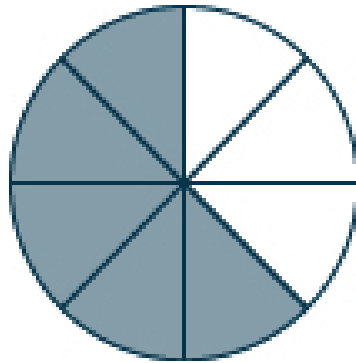
Q2. What fraction of each has been shaded?



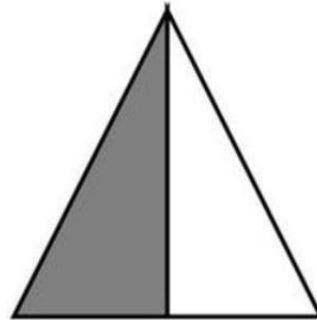
(a)



(b)



(c)



(d)



(e)



(f)