

Computer Assignment – July 2024-25
Class II

Name _____ Sec _____ Roll no. _____

Q1. Data in the computer is stored in the form of:

- A) fields b) cards c) files

Q2. A folder inside a folder is called a:

- A) deep folder b) extra folder c) sub folder

Q3. Which finger should you use to give space?

- A) little finger b) index finger c) thumb

Q4 Match the following columns:

Column A	Column B
i) You use the Backspace key to	a) Keyboard shortcuts for various tasks
ii) Paint files are saved with	b) Rename the file
iii) The F2 key on keyboard is used to	c) Delete text on screen
iv) Brushes and pencils are the tools of	d) .png extension
v) Word application has many	e) Paint applications

Q5 Draw and color

1) Two Input Devices

2) Two Output Devices

Hindi Assignment - July

Name -

class - 2

Roll -

1. सोचो और लिखो

औषधीय महत्व वाले किन्हीं पांच पेड़ों के नाम लिखिए।

i)

ii)

iii)

iv)

v)

2. समान तुक वाले शब्द लिखिए।

i) पानी -

ii) वायु -

iii) अब -

iv) घर -

v) छाया -

3. समान अर्थ वाले शब्द लिखिए।

i) शरीर -

ii) शुद्ध -

iii) पानी -

iv) स्नान -

v) वायु -

4. दिए गए प्रश्नों के उत्तर एक शब्द में लिखिए।

क. पेड़ हमें कैसी वायु देता है?

.....

ख. हम किस त्यौहार पर अपना घर फूलों पत्तियों से सजाते हैं?

.....

ग. कौन पेड़ पौधों के बारे में बहुत कुछ जानती थी?

.....

घ. कविता और मीनू कौन थीं?

.....

ङ. हमें फल सब्जियां कौन देते हैं?

.....

5. योग्यता पर आधारित प्रश्नों को हल कीजिए।

क. गोल-गोल चेहरा पेट से रिश्ता गहरा। (रोटी, कपड़ा)

ख. बिना तेल के जलता है,

पैर बिना वह चलता है।

उजियारे को बिखरा कर,

अंधियारे को दूर करता है।(सूरज,किताब)

ग. बरसात में याद दिलाए पानी धूप में काम आए। (छाता जूता)

घ. देखने में वह काला है,

और जलने पर लाल।

फेंकने पर है वह सफेद,

खोलो बच्चों उसका भेद। (कोयला, लड्डू)

Delhi Public School Dhanbad

EVS Assignment. Class 2. July 24

Name - _____.

Class /Sec - _____.

1) Give one word for the following statement:-

a) Tiny living thing that can make you sick . _____.

b) The position in which we set our body. _____.

c) A place where we learn many good things. _____.

d) A place where lots of good books are kept. _____.

e) A healthy meal which keeps our body fit. _____.

2) Name any two:-

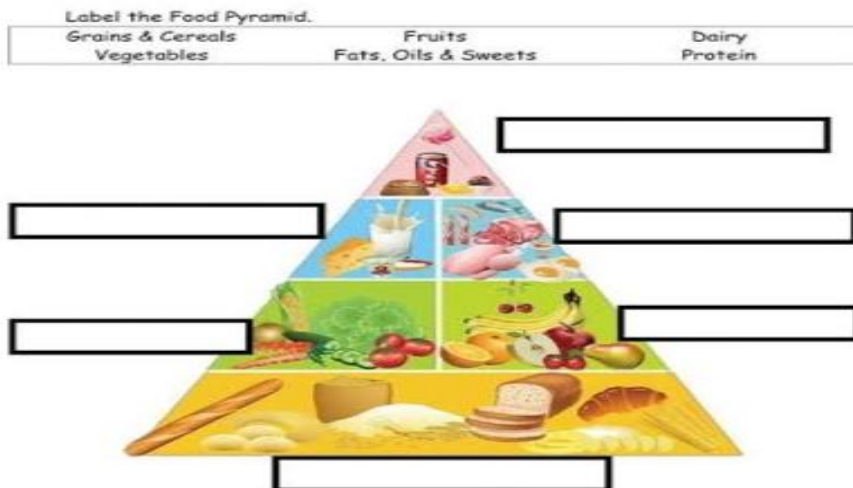
a) Food that give us energy :- _____, _____.

b) Food products made from milk:- _____, _____.

c) Food that helps us to grow _____, _____.

d) Food we get from plants:- _____, _____.







3) Complete the food pyramid. (Competency Based)



4 Tick the correct option:-









Healthy or Unhealthy?

Look at each food. Check healthy or unhealthy, whichever is appropriate.

1) 	<input type="checkbox"/> healthy <input type="checkbox"/> unhealthy	2) 	<input type="checkbox"/> healthy <input type="checkbox"/> unhealthy
3) 	<input type="checkbox"/> healthy <input type="checkbox"/> unhealthy	4) 	<input type="checkbox"/> healthy <input type="checkbox"/> unhealthy
5) 	<input type="checkbox"/> healthy <input type="checkbox"/> unhealthy	6) 	<input type="checkbox"/> healthy <input type="checkbox"/> unhealthy

5) Write P for plants products and A for animals products:

A. Write **P** for foods we get from plants and **A** for foods we get from animals:

			
<input type="checkbox"/>	<input type="checkbox"/>	<input type="checkbox"/>	<input type="checkbox"/>
			
<input type="checkbox"/>	<input type="checkbox"/>	<input type="checkbox"/>	<input type="checkbox"/>

6) Choose the correct answer and write in the given box:-

- a) _____ fits the pipe. (Plumber/ Fireman)
- b) _____ guards the house. (Postman/ Watchman)
- c) _____ bakes the cake. (Driver/Baker)
- d) _____ grows crops. (Farmer/ Grocer)

7) Tick the correct statement and cross the wrong one:-

- a) We should brush our teeth daily. _____.
- b) We should litter our neighbourhood. _____.

DELHI PUBLIC SCHOOL, DHANBAD
CLASS – 2, ENGLISH ASSIGNMENT
JULY (2024-2025)

NAME:

SEC:

ROLL NO:

Q1. Fill in the blanks with correct articles a/an/the.

- My sister has _____ pencil box .
- There is _____ orange on the table.
- He plays _____ tabla.



Q2. Underline the Odd One Out in each line



1. Cat dog plate hamster
2. Beans pea pencil potato
3. Bus van flower lorry



Q3. Match the opposite words



hot			slow
fast			cold
happy			sad
soft			old
young			hard
big			small

Q4. Where these animals live?

 An is a house for an ant. 

 A is a house for a bee. 

 A is a house for a spider. 

 A is a house for a rabbit. 

Q5. Complete these sentences with the correct verbs.

- The Sun _____ in the east. (rise / rises).
- Oil _____ on water. (float / floats)
- The children _____ in the playground. (play / plays)
- The cow _____ us milk. (give / gives)

Q6. Choose the correct words from the box to describe these pictures.

school

swarm

pride

flock



← A _____ of birds

A _____ of bees →



← A _____ of lions

A _____ of fish →



DELHI PUBLIC SCHOOL DHANBAD

MATHS ASSIGNMENT

CLASS II

July 2024

Name _____ Roll _____ Class _____ Sec _____

1.Fill in the blanks:

a) Words such as subtract,minus,take away,decrease,take from,reduce,fewer,left indicate_____

b) In subtraction the bigger number is known as _____ and the smaller number is known as_____

c) The answer of subtraction is known as_____

2.Subtract:

a) 86

b) 79

c) 57

$_61$

$_45$

$_43$

d) 47

e) 73

f) 57

$_39$

$_45$

$_39$

3.WORD PROBLEMS(Story Maths)

a) Tejas saw 35 butterflies . Some of the butterflies were yellow and others were blue.If 15 of the butterflies were yellow? How many of them were blue?

b) Aarya baked 43 cookies .Vansh ate 24 of them.How many cookies are left now?
