

DELHI PUBLIC SCHOOL, DHANBAD

CLASS V

SCIENCE HOLIDAY ASSIGNMENT

NAME : _____ SEC : _____ ROLL NO.

I. DEFINE THE FOLLOWING TERMS:-

1. Dispersal –
2. Monocot plants-
3. Grafting –
4. Migration –
5. Agriculture -
6. Adaptation -

II. GIVE REASONS FOR THE FOLLOWING:-

1. Proper fencing of farming areas is necessary.
2. Ostrich and emu are called flightless birds.
3. Dispersal is essential.
4. Herbivore birds have curved, pointed and strong beak.

III. COMPETENCY BASED QUESTIONS:-

1. Microbes : _____ :: Rodents : Moles.
2. Cotton : Air :: Pine : _____.
3. Fish : gills :: _____ : Spiracles.
4. _____ : Insects : : Frogs : Long sticky tongue.
5. Swans : _____ :: Penguins : Flippers.

IV. DRAW NEATLY A WELL LABELLED DIAGRAM OF THE FOLLOWING:-

1. Germination of a seed
2. Structure of a seed

3. Rib Cage

4. A plant that reproduces through

a. Stem, b. roots, and c. leaves.

V. ACTIVITY:-

1. Grow a rose plant through stem cutting.

2. Find out more information about any 5 migratory birds and the names of country through which these birds travel. Also use a world map to show their movements. (PROJECT WORK)

Note : GIVE THOROUGH READING TO CH- 1, 2 & 3.

Delhi Public School, Dhanbad

Summer Holiday Assignment 2024

English – Std V, Section----

Q1. Refer to the Buzzword English Workbook, Std 5, and read the **Comprehension Passage, of Ch 2 “William Buys some sweets”** on page 8 and 9. Then answer the questions given below in the workbook itself :-

A1. What did William do when Mr. Moss nodded at him?

A2. What did William ask Mr Moss?

A3. Why was William disappointed?

A4. How did William convince Mr. Moss to give him some sweets?

A5. What opinion do you form of Mr. Moss from the passage?

B. Write the meanings of these words from the passage:-

1. encouraged 2. Hesitated

3. grateful

Word- Family (to be done on Page 13 of the Workbook)

1.Ornaments-----, -----, ----,-----

2. information-----,-----,-----,-----

Grammar (page 11 of the Workbook)

Complete the passage with the correct words from the passage:-

The old toys are kept in-----(this / these) cabinet. -----(This/ The) new toys are kept downstairs, in -----(the/ these) cupboard beside------(this/ the) television. Can you see-----(the / this)toys on ------(that/ a) shelf? My brother often plays with (those/ a) toys.

Grammar Book (page 34, to be done in the Grammar Book itself)

Analytical Thinking

Learn with Fun

Ria is talking to her cat. The cat is puzzled whether Ria is stating something, asking something ,praising heror ordering her. Help the cat decide by writing—Declarative, Interrogative, Imperative or Exclamatory for each sentence in the given spaces:-

-----, -----, -----,-----

Competency Based questions (to be done on page q3 of the Workbook):-

Circle the odd ones out :-

- 1. pen, laptop, man, house**
- 2. hostess, hero, maid , poetess**
- 3. child, bird, iron , doctor**
- 4. bouquet, milk, bunch, brood**
- 5. honesty, truth, book, generosity**

MATHS SUMMER HOLIDAY ASSIGNMENT

CLASS - V

- 1) Write the place value of all the digit 6,19,42,173
- 2) Write the numbers in the short form:- (a) $70000 + 30000 + 40 + 2$
(b) $60\ 000 + 70\ 000 + 4000 + 600 + 9$
- 3) Arrange the following in ascending order:-
4827564 , 30134578 , 21146098 , 2315000146
- 4) write the largest and the smallest number using digits once:- 4, 0, 3, 7, 6, 5, 1, 7
- 5) By how much is the difference between 32467209 and 21638945 less than 6 crore?
- 6) Multiply:- (a) 328451 by 683 (b) 96259 by 1894
- 7) Divide :- (a) $32365737 \div 473$ (b) $74568 \div 28$
- 8) 182 water tanks of the same capacity can hold 1633450 litres of water. What is the capacity of each tank?
- 9) Simplify :- (a) $252 - 30 \times 9 \div 3 + 11$
(b) $18 + 36 \div 18 \times 4 - 5$
- 10) ACTIVITY:-
-----> Write your parents mobile phone number in your notebook and then write the numbers in Indian place value system as well as international place value system and rearrange them in greatest and smallest digit numbers.
- 11) Learn tables till 20. Memorise everyday

[NOTE:- To do in a fresh page and submit after reopening of the school.]

Social Studies Holiday Assignment
Session 2024-25
Class 5

Q1. Activity based learning:

Step:1 I like _____ (Choose any continent).

Step:2 Give geographical details of that continent.

Step:3 Choose a country of your choice from the continent.

Step:4 Now collect information related to its:

i. Geographical lay out

ii. Occupation of people living in that country

iii. Climate of that country

iv. Languages spoken, currency of that country

v. Details of the Prime-Minister/President of that country

vi. Trade details

All these details along with the map of the continent and the country of your choice to be pasted on a chart paper .

Q2. Fill in the blanks:

a. _____ is the busiest ocean.

b. India was known as the _____ .

c. _____ made the earliest globe around the _____

d. _____ invented the television.

e. Televisor was unveiled in a Department store at _____.

f. _____ invented the radio.

g. We make _____ call to talk to people living in different countries.

h. _____ was awarded the Nobel Prize for Physics in 1909.

Q3. Competency based questions:

a. Postal system : Lord Clive:: _____ : Charles Babbage

b. Electric light: _____ :: movable printing press: Johannes Gutenberg

c. large land masses : _____ : large water bodies: oceans

d. Research station : _____ : coral reef : Australia

Q4. Define:

1. Rotation 2. Revolution 3. Continents 4. Fascinated 5. Satellite

Q5. If A:1 ,B:2,C:3 and so on then decode the word:

a. 6,12,15,2,5 _____

b. 15,18,2,9,20 _____

c. 20,19,1,9 _____

d. 3,11,12,9,7,18,1,16,8,25 _____

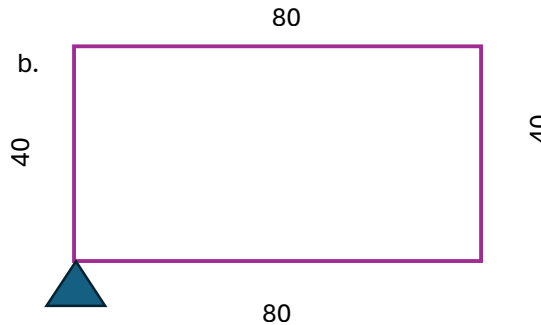
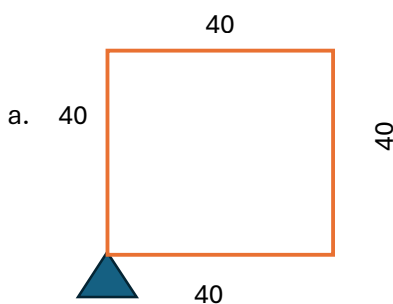
e. 8,1,18,11,1,18,1 _____



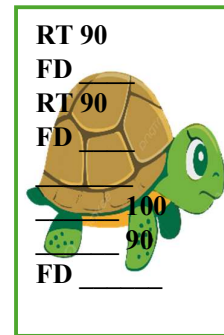
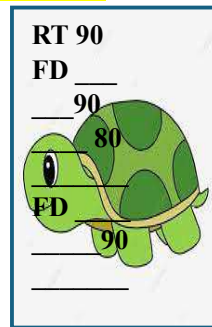

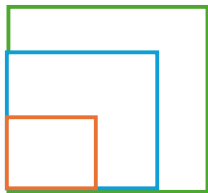
Q1. Write the full form of the following primitives

- a.FD- _____
- b.BK- _____
- c.LT- _____
- d.RT - _____
- e.HT- _____
- f.ST- _____
- g.CS- _____
- h.CT- _____

Q2. Write the commands for the following figures:



Q3. Complete the steps of the given figure of size 40,80,100



Q4. Explore the directions through LOGO commands.



a. Write the Logo commands for the turtle to move from Bus Stop to Library.

b. Write the LOGO commands for William to reach Bus Stop from Stadium.

c. Let the distance be 100

Eg: FD 100





Delhi Public School, Dhanbad

Summer Holiday Assignment

Subject: Computer

Std: V



Q1. Fill in the blanks:

- A computer _____ is a set of instructions or statements that are arranged in a specific order.
- An _____ is a set of sequential steps written in a simple language to perform a particular task.
- A _____ is a graphical or pictorial representation of the logic to solve a particular problem.
- A _____ structure is the simplest flowchart structure.
- The concept of _____ in a flowchart/algorithm is good for repeating a set of instructions until a particular condition is met.
- A loop in a flowchart is represented by connecting _____ between the repeated steps.
- A _____ can be drawn using the three basic structures: _____, decision and _____.

Q2. Write an Algorithm to prepare a cup of coffee.

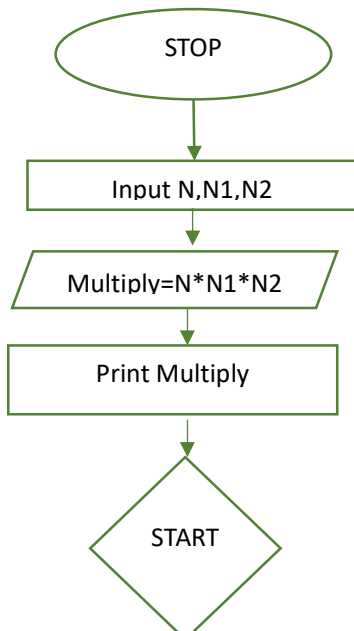
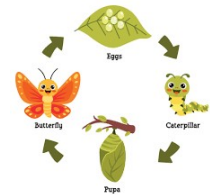
Q3. Write an Algorithm to explain the life cycle of a butterfly

Q4. Arrange the instructions in correct order to find the area of the square .

- START
- STOP
- Calculate the area: Area= Side*Side
- Input Side

Q5. Draw a Flowchart to multiply two numbers.

Q6. Redraw the flowchart to multiply three numbers correctly.




Activity Time
Pg 23 QA and QB to be done in coding Book

Solve it:

1		2		5
	5	4		1
	3		1	6
5			2	6
	6	1		2
3			4	5

Have a wonderful Summer Vacation



दिल्ली पब्लिक स्कूल 2024-25
मासिक गृहकार्यम् (मई)
कक्षा- पञ्चमी- संस्कृतम्

1. संयुक्त व्यंजनानि लिखत ।

1. क् + ष् + अ =

2. त् + र् + इ =

3. ज् + ज् + आ =

4. श् + र् + ई =

2. संयुक्त-व्यंजनैः निर्मितान् शब्दान् चित्वा लिखत ।

"कक्षा राजन् द्वारा, दान्त्रः, भयम्, बुद्धिः, श्री, नदी, न्यायः, लेखनी, श्रमिकः, प्रिया, बकः, रम्भा, धटः, क्षमा, अद्य, विच्छेदः, कमलम्, रक्तः, क्षणः।

3. वर्ण विच्छेदं कुरुत ।

गुरुः = - + - + - + - ।

दान्त्र = - + - + - + - + - ।

क्षमा = - + - + - + - + - ।

4. वर्ण-संयोजनं कुरुत ।

1. ग् + अ + ज् + अः =

2. प् + उ + ष् + ष् + अ + म् =