

English Assignment
August - 2023- 2024
Class 2

Name : _____ **Roll:** ____

Answer the following questions.

Q1.What did Fly promise to do for Moon?

A) _____
_____.

Q2.Why was Theodore sad?

A _____
_____.

Q3. What crawled away?

A _____
_____.

Q4. Write the meaning of the following words.

Honest : _____
_____.

Nectar : _____
_____.

Set off : _____

_____.

Q5. Make a Word Family with "Planted".

_____.

Q6. Choose the correct word to complete the sentences.

1 Many animals live in the _____ (sea / see)

2 I shall _____ a letter to my uncle. (right / write)

Q7. Read the clues and complete these words with double letters.

1 You eat this with bread.

B U _ _ E R

2 You rest your head on
this.

P I _ _ O W.

Q8. Underline the Nouns in the following sentences

1. That is a beautiful flower.

2. She is a good girl.

3. He is a fat man.

4. The crow is looking at the mouse.

Q9. Circle the adjectives.

1. The girl has two books.

2. He is a poor man.

3. Arpita likes red car.



DELHI PUBLIC SCHOOL , DHANBAD

STD II EVS MONTHLY ASSIGNMENT

AUGUST 2023 – 2024

NAME _____ SEC ____ ROLL NO. ____

NAME THEM

1) Two items bought from the chemist.

a) _____ b) _____

2) Two outdoor games .

a) _____ b) _____

3) Two joints of your body .

a) _____ b) _____

4) Two indoor games .

a) _____ b) _____

5) Two items in a confectionery shop .

a) _____ b) _____

6) Two religious festivals .

a) _____ b) _____

7) Two items bought from the post office.

a) _____ b) _____

8) Two neighbourhood places .

a) _____ b) _____

9) Two national festivals .

a) _____ b) _____

10) Two items bought from a grocery store .

a) _____ b) _____

UNSCRAMBLE THE WORDS

1) T O N L E S K E _____

2) L E S S C U M _____

3) T U R E P O S _____

4) S A M T S I R H C _____

5) I W I A L D _____

TRUE AND FALSE

1) We splash colours on Diwali . _____

2) Republic Day is celebrated on 15th August every year . _____

3) A new born baby has about 306 bones. _____

4) We cannot bend our body at the joints . _____

5) A van of fire brigade has bells and sirens . _____

6) Wrist joint is present in knee . _____

FILL IN THE BLANKS

1) Heart and lungs are protected by _____.

2) _____ helps to put out the fire .

3) There are more than _____ muscles in our body .

- 4) Police helps to maintain _____.
- 5) _____ is a harvest festival.
- 6) The area around our house is called our _____.
- 7) _____ is the way we sit, stand or move.
- 8) _____ is called the "Land of Festivals".
- 9) Common kitchens called _____ are organised in gurudwaras.
- 10) _____ is the holy book of Sikhs.

LET'S DRAW

Draw , name and colour

- 1) Any two joints found in our body.
- 2) Any two religious festivals .

Delhi Public School, Dhanbad

Assignment- August

Class - 2

Subject - Hindi

1. कविता की पंक्तियां पूरी करें।

क. फूलों से..... हंसना सीखें

भौरों से..... गाना

.....की झुकी डालियों से नित

सीखो..... झुकाना

ख. जी होता चिड़िया जाऊं

मैं में उड़कर सुख पाऊं

..... फुदक-फुदककर डाली पर

डोलू तरू की हरियाली

2. तुकांत शब्द लिखें।

क. नील.....

ख. भालू.....

ग. दानी.....

घ. जगत.....

3. सही मिलान करें।

महीने का नाम सर्दी

दिन का नाम मई

नदी का नाम गंगा

मौसम का नाम रविवार

4. दिए गए शब्दों के एकवचन और बहुवचन के जोड़े बनाएं।

घोड़ा, अलमारी, कुर्सी, जूते, घोड़े, कुर्सियां, जूता, अलमारियां

एकवचन

बहुवचन

.....

.....

.....

.....

.....

.....

.....

.....

5. योग्यता पर आधारित प्रश्न हल करें।

क. पेड़ - (फल, मिठाई)

ख. सूरज- (रोशनी, गेंद)

ग. नदी - (छाया, फल)

ग. फूल - (पेन, खुशबू)



Computer Monthly Assignment [August]

Std II




Fill in the blanks:-

1. _____ is used to draw, color pictures and play games.
2. _____ is called the brain of the computer.
3. All the work we do the computer is displayed on the _____.
4. The printed paper is called the _____ or printout.
5. _____ is used to listen to music without disturbing others.
6. A pen drive is also called _____ drive.

Learn and write the following full forms:-

1. CPU—Central Processing Unit
2. CD—Compact Disc
3. DVD--- Digital video disc
4. USB---Universal serial Bus
5. UPS---Uninterrupted Power Supply.

Draw four main parts of the computer:-



DELHI PUBLIC SCHOOL, DHANBAD

MATHS ASSIGNMENT (AUGUST) 2023-2024

NAME _____ CLASS – 2 _____ ROLL NO. _____

A. SOLVE:-


H T O	H T O	H T O	H T O
	○ ○ ○		○ ○ ○
2 4 6	6 8 9	7 8 9	3 1 5
+ 2 5 2	+ 5 4 3	- 4 2 1	- 2 7 7
<input type="text"/>	<input type="text"/>	<input type="text"/>	<input type="text"/>

B. WORD PROBLEMS (write statements):-


1. A fruit stall sells 354 apples, 217 oranges and 264 bananas. How many pieces of fruits have been sold altogether?

2. Tina has a collection of 672 coins. She gave 127 coins to her friend. How many coins does she have left now.

3. A parking lot has capacity for 725 cars. There are 357 cars in the parking lot. How many empty spaces are there?



4. Shinnchan and Himawari go spider hunting. Shinnchan finds 439 spiders. Himawari finds 588 spiders. How many spiders did they find altogether?



5. 256 birds were sitting in a tree. 32 more birds flew up to the tree. How many birds were there altogether in the tree?

