

DELHI PUBLIC SCHOOL, DHANBAD  
Monthly Assignment (JANUARY)2024  
CONVERSATION  
CLASS - PREP

## WINTER SEASON

1. Winter season is the coldest season of the year.
2. This season starts from November and lasts till February .
3. We wear woollen clothes and like to have hot drinks in this season.
4. We like to sit under the sun.
5. Festivals like Christmas and New year are celebrated in this season.

Colour the picture





DELHI PUBLIC SCHOOL DHANBAD

Monthly Assignment(January 2024)

Class- Prep

Name \_\_\_\_\_

Sec \_\_\_\_\_

Fill in the missing letters.

Ap\_\_L\_\_



J\_\_r



Bana\_\_a



Ke\_\_



ch\_\_co\_\_ate



L\_\_mon



Dra\_\_on



Mo\_\_n



E\_\_gle



No\_\_e



Fla\_\_



O\_\_top\_\_s



Giraf\_\_e



Pen\_\_uin



Ho\_\_se



Q\_\_een



Ig\_\_oo



Ri\_\_g





## Circle The Rhyming Words

fun

top

ten

hat

sun

top

fit

pop

mob

set

cat

tin

rat

nut

bun

tin

sail

cat

pin

road

vet

cat

set

pop

bit

fog

dog

bed

man

sat

cow

fee

dog

how

ran

mad


lip

top

how

sad

## Color and Name the Fruit



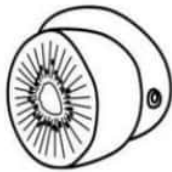
Apple



Banana



Orange




Kiwi



Papaya




Mango



Grapes



Pineapple



Pear



DELHI PUBLIC SCHOOL, DHANBAD

MONTHLY ASSIGNMENT (DECEMBER )

CLASS – PREP

SUBJECT- DRAWING

NAME - \_\_\_\_\_ SEC - \_\_\_\_\_

COLOR THE " CHRISTMAS TREE"



COLOR THE " SANTA CLAUSE"



**COLOR THE "WINTER SCENERY"**





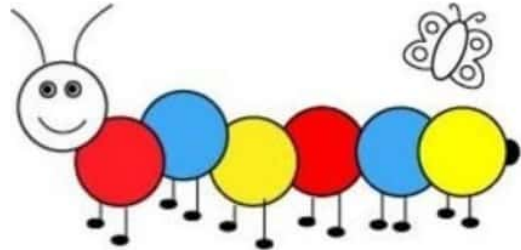
# Delhi Public School, Dhanbad

## Monthly Assignment ( January)

Class-Prep

Name \_\_\_\_\_ Sec \_\_\_ Date \_\_\_\_\_

### 1. Subtraction



$$\begin{array}{r} 3 \\ - 2 \\ \hline \end{array}$$

$$\begin{array}{r} 7 \\ - 1 \\ \hline \end{array}$$

$$\begin{array}{r} 5 \\ - 4 \\ \hline \end{array}$$

$$\begin{array}{r} 9 \\ - 0 \\ \hline \end{array}$$

$$\begin{array}{r} 9 \\ - 4 \\ \hline \end{array}$$

$$\begin{array}{r} 8 \\ - 5 \\ \hline \end{array}$$

$$\begin{array}{r} 8 \\ - 3 \\ \hline \end{array}$$

$$\begin{array}{r} 9 \\ - 4 \\ \hline \end{array}$$

$$\begin{array}{r} 6 \\ - 2 \\ \hline \end{array}$$

$$\begin{array}{r} 4 \\ - 2 \\ \hline \end{array}$$

$$\begin{array}{r} 6 \\ - 3 \\ \hline \end{array}$$

$$\begin{array}{r} 7 \\ - 3 \\ \hline \end{array}$$

$$\begin{array}{r} 2 \\ - 1 \\ \hline \end{array}$$

$$\begin{array}{r} 9 \\ - 5 \\ \hline \end{array}$$

$$\begin{array}{r} 5 \\ - 3 \\ \hline \end{array}$$

$$\begin{array}{r} 9 \\ - 7 \\ \hline \end{array}$$

2. Trace and write the number words.

**51**

Fifty One

Fifty One

**52**

Fifty Two

**53**

Fifty Three

**54**

Fifty Four

**55**

Fifty Five

**56**

Fifty Six

**57**

Fifty Seven

**58**

Fifty Eight

**59**

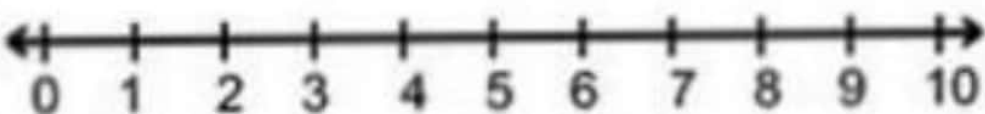
Fifty Nine

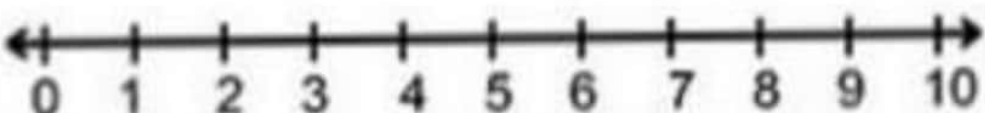
**60**

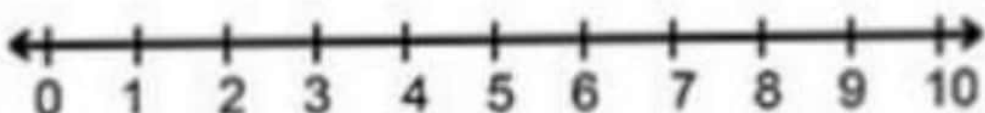
Sixty




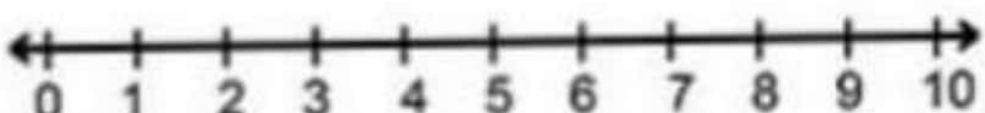
### 3. Number line addition:-

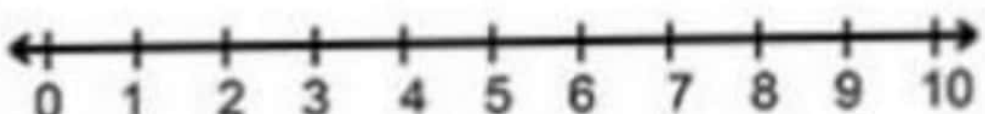
$7+2=$   A horizontal number line with arrows at both ends, marked with integers from 0 to 10.

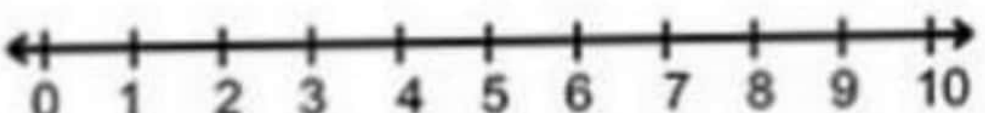
$5+1=$   A horizontal number line with arrows at both ends, marked with integers from 0 to 10.

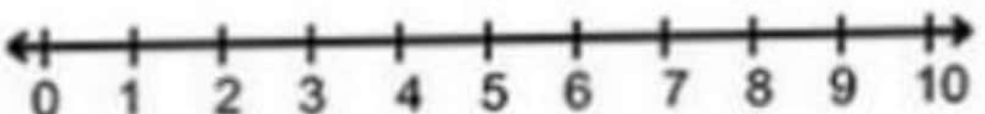
$4+4=$   A horizontal number line with arrows at both ends, marked with integers from 0 to 10.

$9+1=$   A horizontal number line with arrows at both ends, marked with integers from 0 to 10.

$3+4=$   A horizontal number line with arrows at both ends, marked with integers from 0 to 10.

$8+1=$   A horizontal number line with arrows at both ends, marked with integers from 0 to 10.

$3+2=$   A horizontal number line with arrows at both ends, marked with integers from 0 to 10.

$1+6=$   A horizontal number line with arrows at both ends, marked with integers from 0 to 10.

4. Complete the tables:-

$5 \times 1 = \underline{\quad}$

$5 \times 2 = \underline{\quad}$

$5 \times 3 = \underline{\quad}$

$5 \times 4 = \underline{\quad}$

$5 \times 5 = \underline{\quad}$

$5 \times 6 = \underline{\quad}$

$5 \times 7 = \underline{\quad}$

$5 \times 8 = \underline{\quad}$

$5 \times 9 = \underline{\quad}$

$5 \times 10 = \underline{\quad}$

$6 \times 1 = \underline{\quad}$

$6 \times 2 = \underline{\quad}$

$6 \times 3 = \underline{\quad}$

$6 \times 4 = \underline{\quad}$

$6 \times 5 = \underline{\quad}$

$6 \times 6 = \underline{\quad}$

$6 \times 7 = \underline{\quad}$

$6 \times 8 = \underline{\quad}$

$6 \times 9 = \underline{\quad}$

$6 \times 10 = \underline{\quad}$

$7 \times 1 = \underline{\quad}$

$7 \times 2 = \underline{\quad}$

$7 \times 3 = \underline{\quad}$

$7 \times 4 = \underline{\quad}$

$7 \times 5 = \underline{\quad}$

$7 \times 6 = \underline{\quad}$

$7 \times 7 = \underline{\quad}$

$7 \times 8 = \underline{\quad}$

$7 \times 9 = \underline{\quad}$

$7 \times 10 = \underline{\quad}$

Wish you a very happy and  
prosperous new year



# DELHI PUBLIC SCHOOL

## HINDI MONTHLY ASSIGNMENT (JANUARY)

Name\_\_\_\_\_Sec\_\_\_\_\_

### 1. मिलान करें



पंडित



पंकज



पंखा



बंदर



मंदिर

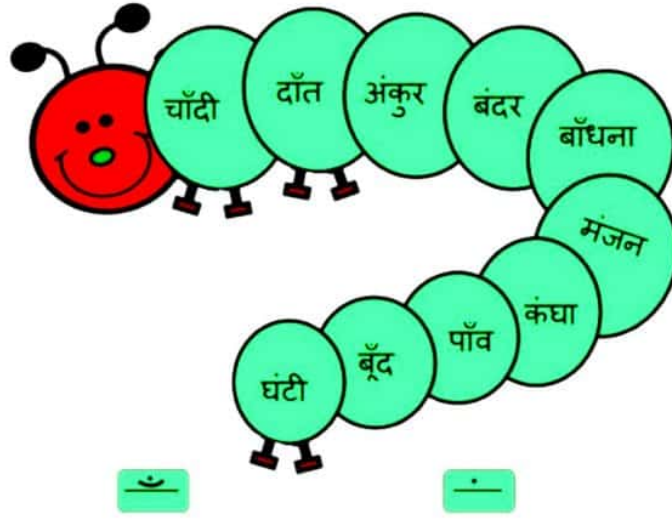


रंग

### 2 . अनुस्वार की मात्रा से सही शब्द चुनें

ऊँट			
मुँह			
दाँत			
आँधी			

### 3. शब्द चुनें



### 4. मिलान करें

बाँसुरी

पूँछ

साँप

बूँद

कुआँ

पाँच

मछलियाँ

दाँत





## 5 रेफ़ की मात्रा लगाएँ



पवत



वषा



फश



पाक



माग



काय



धम



कक



बतन

## 6 . सही शब्द चुनकर खाली स्थान भरें

1. \_\_\_\_\_ आ रहा है। ( टुक / तर्क )
2. बड़ो को \_\_\_\_\_ करना चाहिए। ( प्रनाम / प्रणाम )
3. यह \_\_\_\_\_ की आवाज है। ( ड्रम / दाम )