

# DELHI PUBLIC SCHOOL DHANBAD


## MONTHLY ASSIGNMENT (JULY) 2024

### CLASS - PREP

NAME - \_\_\_\_\_

SEC - \_\_\_\_\_

DRAW AND COLOUR THE PICTURES BY FOLLOWING  
THE STEPS GIVEN

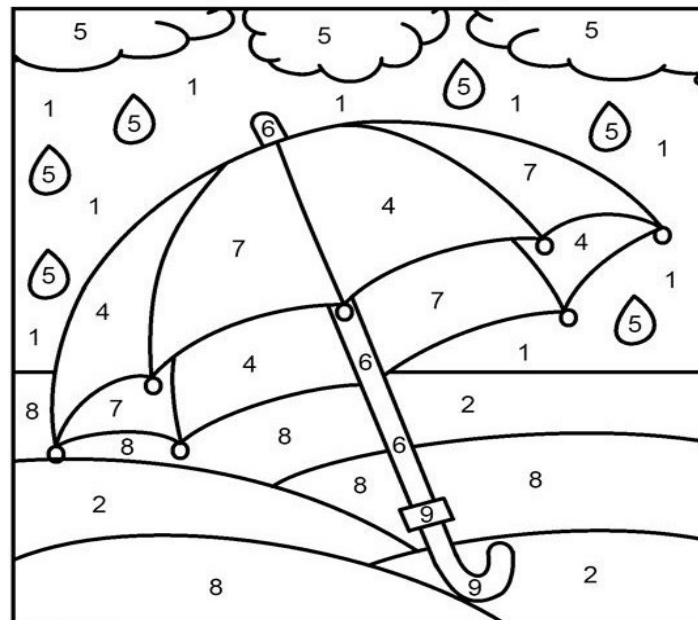


**Colour the pictures given below**



# COLOR BY NUMBER

## UMBRELLA



Color Key

1 LIGHT BLUE

2 LIGHT GREEN

4 ORANGE

5 DEEP BLUE

6 LIGHT GREY

7 YELLOW

8 DEEP GREEN

9 PURPLE

**Join the dots to complete the picture and colour it**





DELHI PUBLIC SCHOOL DHANBAD


Monthly Assignment ( July 2024)

Class- Prep

Name \_\_\_\_\_ . Section \_\_\_\_\_

Fill in the blanks with **This** or **That**.


1. \_\_\_\_\_ is a cat.



2. \_\_\_\_\_ is a dog.



3. \_\_\_\_\_ is an apple.



4. \_\_\_\_\_ is a bag.



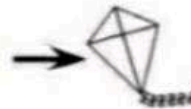
5. \_\_\_\_\_ is a rocket.



6. \_\_\_\_\_ is a duck.



7. \_\_\_\_\_ is a kite.



8. \_\_\_\_\_ is a hat.



9. \_\_\_\_\_ is a boy.










10. \_\_\_\_\_ is a house.





Change the following words from one to many:

One	Many
1. Cap 	 _____
2. Top 	 _____
3. Pin 	 _____
4. Egg 	 _____

Q2. Match the following :

One






Many







Write these or those.

..... are flowers.



..... are trees.



..... are bags.



..... are houses.



..... are balls.



..... are dogs.





**DELHI PUBLIC SCHOOL, DHANBAD**  
**MONTHLY ASSIGNMENT ( JULY)**  
**CLASS - PREP**

Name : \_\_\_\_\_

Score : \_\_\_\_\_

*Heavy vs Light*


Tick the correct choice that best describes the weight of each object.

1)



☐ Heavy ☐ Light

2)



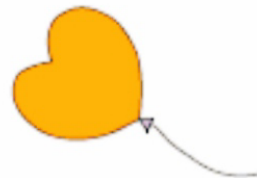
☐ Heavy ☐ Light

3)



☐ Heavy ☐ Light

4)




☐ Heavy ☐ Light

5)



☐ Heavy ☐ Light

6)



☐ Heavy ☐ Light



Match the following with the correct number of pictures.  
One has been done for you.

$$(2 \times 3)$$



$$(2 \times 4)$$



$$(2 \times 2)$$



$$(2 \times 5)$$



Fill in the boxes with the correct numbers.

$$2 \times 6 = \square$$

$$2 \times 1 = \square$$

$$2 \times \square = 16$$

$$2 \times 4 = \square$$

$$2 \times \square = 20$$

$$2 \times 3 = \square$$

$$2 \times 9 = \square$$

$$2 \times \square = 10$$



$3 \times 1 = \underline{\hspace{2cm}}$

$3 \times 2 = \underline{\hspace{2cm}}$

$3 \times 3 = \underline{\hspace{2cm}}$

$3 \times 4 = \underline{\hspace{2cm}}$

$3 \times 5 = \underline{\hspace{2cm}}$

$3 \times 6 = \underline{\hspace{2cm}}$

$3 \times 7 = \underline{\hspace{2cm}}$

$3 \times 8 = \underline{\hspace{2cm}}$

$3 \times 9 = \underline{\hspace{2cm}}$

$3 \times 10 = \underline{\hspace{2cm}}$



DELHI PUBLIC SCHOOL DHANBAD

CONVERSATION SHEET

CLASS PREP

### RAINY SEASON

1. Rainy season is also known as the queen of the seasons.
2. It comes after the hot summer.
3. We see rainbow in the sky.
4. Farmers grow crops in this season.
5. We use raincoat, umbrella and rain boots etc.
6. We like to drink hot soup, milk and coffee very much.

Colour the picture





# DELHI PUBLIC SCHOOL, DHANBAD

CLASS- PREP B

## Hindi Monthly Assignment (July)

Name\_\_\_\_\_.

Sec\_\_\_\_\_

### 1. चित्र पहचाने : -



.....



.....



.....



.....



.....



.....

### 2. खाली स्थान भरे: -

(क) राधा \_\_\_\_\_ पढ़ । ( अखबार / आम )

(ख) लाल लाल \_\_\_\_\_ खा । ( टमाटर / गमला )

(ग) राम \_\_\_\_\_ चख । ( आम / गमला )

(घ) आसमान पर \_\_\_\_\_ छाया ।  
( छाता / बादल )

(ङ) अपना \_\_\_\_\_ याद कर । ( पाठ / मामा )

### 3. दिए गए चित्रों के लिए सही शब्द चुने :-



खत घर



मटर कलम



पल नल



बरगद सरकस



शहर शहद



अदरक अचकन



फल हल

10

दस बस



यह तब

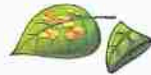


कलम कमल

### 4 . मिलान करें :-



माला



जाल



पान



बादल



गाजर



नाव



तबला



कान

दवात



छाता

5 शब्दों को चित्रों से मिलाएँ :-



काटना



गाजर



गमला



चावल



दवात



सारस

6 . "आ" की मात्रा लगा कर लिखे :-

1. छ + आ =

2. ख + आ =

3. ग + आ =

4. ठ + आ =

5. च + आ =

6. क + आ =

7. ज + आ =

8. झ + आ =

9. ट + आ =

10. घ + आ =