

Delhi Public School

Half yearly revision assignment

subject Hindi

class 3

1 निम्न प्रश्नों के उत्तर दें ।

क) लड़के ने रुपए किस तरह कमाए थे ?

ख) पेड़ पौधे हमें क्या-क्या देते हैं?

ग) नदी ने बकरी और मेमने को क्या सूचना दी ?

घ) तेनालीरामन के दरबारी क्यों खुश हो गए?

ड) पशु पक्षी खरगोश का सम्मान क्यों करते थे?

च) हंसों ने कछुए को क्या समझाया?

प्रश्न 2 शब्दार्थ लिखे ।

पावन ,अवसर, सहज, सीख ,उदास, शीतल,हानि, सत्य

प्रश्न 3 कविता के माध्यम से रिक्त की पूर्ति करें

क) एक----- में कितने दो हैं

----- को देखो जितने वह हैं ।

ख) सभी----- से बढ़कर हैं

-----को जाकर छूता।

ग) ऊंचे हैं नीचे हैं -----

मगर -----अपना

देख----- है अब भी बढ़ते

जाने का ही----- ।

प्रश्न 4 किसने, किससे कहा?

क) "हाय मैं थक गईं"

ख) "ठीक है मैं ना बोलने का वचन देता हूँ ।"

ग) "तेरी गाय ने जो बछड़ा दिया है वह कैसा है "

घ) "मगर कैसे हम तो राजमहल में थे"

प्रश्न 5 सही विकल्प चुने ।

क) कछुआ स्वभाव से कैसा था? घमंडी बातूनी झगडालू

ख) अंबरों को क्या अर्थ है?

आंख पैर भौहें

प्रश्न 6 निम्न राज्यों में कौन सी भाषाएं बोली जाती है ?

महाराष्ट्र, बिहार ,उत्तर प्रदेश ,बंगाल

प्रश्न 7 सही पर सही गलत पर गलत का निशान लगाए।

क) एक सप्ताह में 8 दिन होते हैं ।

ख) शुक्रवार के बाद शनिवार आता है।

ग) लड्डू खाते हुए खटास के भाव आते हैं ।

घ) लीप वर्ष में 366 दिन होते हैं ।

ड) लोहड़ी का त्योहार मार्च महीने में आता है।

प्रश्न 8 दिए गए शब्दों को वर्ण विच्छेद करें।

बदन, कमल, कब ,भजन।

प्रश्न 9 लिंग बदले ।

मोर ,रानी ,लड़का ,गाय,दादा ,शेरनी।

प्रश्न 10 वचन बदले ।

मालाएं, बात ,बिल्ली, चम्मचें, थाली, कुत्ते ।

प्रश्न 11 निम्न मुहावरों का अर्थ लिखें। जी ललचाना ,नौ दो ग्यारह होना, पीठ थपथपाना ,आंखों का तारा ।

प्रश्न 12 दो दो पर्यायवाची शब्द लिखे। धरती ,फूल ,बादल, पेड़।

प्रश्न 13 विलोम शब्द लिखे ।

आगे ,सुबह ,दिन ,उठना, लेना ,नया, ऊंचा ।

प्रश्न 14 अनेक शब्दों के लिए एक शब्द लिखे।

जो लिखता है ,जो डरता है, जो डाक बांटता है ,जो सेवा करता है, जो चित्र बनाता है।

प्रश्न 15 दो दिनों के अवकाश हेतु प्रधानाचार्य को प्रार्थना पत्र लिखें।

प्रश्न 16 'रक्षाबंधन' और 'व्यायाम के लाभ' पर अनुच्छेद लिखें ।

प्रश्न 17 अपठित गद्यांश।

किसी गांव में एक राजा राज्य करता था ।वह बड़ा ही प्रतापी और दयालु था उसके दरवाजे से कोई भी निराश होकर नहीं लौटता था। परंतु यह सब बातें उसकी रानी को अच्छी नहीं लगती थी वह न तो पूजा पाठ करती थी न ही किसी को दान देती थी।

नीचे दिए गए प्रश्नों के उत्तर गद्यांश में से ढूंढकर दे।

क) राजा कैसा था?

ख) यह सब बातें किसे अच्छी नहीं लगती थी ?

ग) विलोम शब्द लिखे ।

निर्दयी ×-----

शहर ×-----

घ) वाक्य पूरा करें ।

किसी राज्य में----- ।

Delhi Public School

Revision Assignment

Class-3

SCIENCE

A) Fill in the blanks:-

1. The flat part of a leaf is called the _____.
2. A _____ is the most attractive part of the shoot.
3. A _____ connects the leaf to the stem.
4. _____ plants have tap root.
5. The process of producing one's own kind is called _____.
6. Sponges are _____ animals.
7. The process by which our body takes in and out air is called _____.
8. The smallest bird in the world is the _____.
9. A _____ bird has a long and slender beak.
10. _____ are sharp and curved claws.

B) Answer the following questions:-

1. What is wading? Give two examples of wading birds.
2. Describe different types of feathers that birds have.
3. How do muscles help us?
4. What is the function of the respiratory system in our body?
5. What are the function of stem?
6. What is germination? What does a seed require to germinate?
7. What is photosynthesis?
8. What is respiration? How do fish reproduce?
9. Why do animals move from one place to another?
10. How is duck's beak different from that of sparrow?

C) Draw, label and colour:-

1. Parts of a plant
2. Feathers of the bird
3. Respiratory system
4. Excretory system
5. Fruit has one seed/ many seeds
6. Two natural / living/ Non- living things.

Delhi Public School

Revision Assignment

Class3

SOCIAL SCIENCE

A) Write 'True' and 'False':-

- 1.The festival which makes the bond between brother and sister _____
2. The Earth is a third planet from the Sun. _____
3. Most relatives are of two types _____
- 4 Landmarks help us to locate a place easily _____
5. People use compasses to find the right direction _____
6. Earth has its own light. _____
7. In watery areas people build wooden houses _____
8. People in town live in bungalows _____
9. Maternal grandparents are Nana and Nani. _____
10. Peasants live in mud houses. _____

B) Answer the following question:-

1. Write five things you can do to help your family members.
2. What is a nuclear family?
3. Why do people with heavy rainfall have houses of slanting Roof?
4. Why do people living in watery areas build houses on a Stilts?
5. Write four lines describing the Earth.
6. Why do we use symbols in a sketch?
7. What is sketch?

C) Draw ,label and colour:-

1. Houseboat
2. Caravans
3. Earth rotates on axis
4. Globe
5. wigwams
6. tents .

DELHI PUBLIC SCHOOL DHANBAD

ENGLISH REVISION ASSIGNMENT

Q1. Read the passage carefully and answer the following questions:-

One day, a man was going to a distant town. On the way he was attacked by robbers. They beat him up, took everything he had and left him wounded on the roadside . After a short while ,a man came along . He did not know the wounded man. So he did not bother to help him . A little later , another man passed by . He also went away without trying to do anything to help the wounded man.

A third man came along. He was from another country. When he saw the wounded man, he stopped. He sat near the man , cleaned his wound and bandaged them. He took the man to a small roadside inn and looked after him till he was able to move again.

The stranger didn't know the wounded man, yet he helped him. Never hesitate to help others.

a) How did the man get wounded?

b) What did the first passer by do?

Q2. Complete the sentence

a) One day , a man was going to a distant _____.

b) _____ hesitate to help others.

Q3. State whether the following statements are True or False:

a) The third man from another country helped the wounded man. _____

b) The second passer-by bandaged the wounded man . _____

Q4. Answer the following questions:

a) What are the different things the queen sees?

b) Why did Aunt Ruby stopped liking the parrot?

c) The sister said 'sorry' for what she had done . But that did not make the brother happy. Why?

d) Who was Arachne and why did people come to see her work?

e) What did Corduroy do later that evening?

Q5. Make a Word Tree of three words with :

a) it _____, _____, _____

b) of _____, _____, _____

c) me _____, _____, _____

Q6. Make a Word Family of three words with :

a) wonderful _____, _____, _____

b) astonished _____, _____, _____

Q7. Frame meaningful sentences with:

a) piece

b) trip

c) mango

d) greedy

Q8. Who said to whom?

a) " I've always wanted a friend"

b) " The most beautiful thing can not be brought to you"

Q9. Fill in the blanks:

- a) "Yes", I said , we're _____ again.
- b) Bommai means _____.
- c) I _____ really loud and felt a lot _____.
- d) _____ celebrates the victory of good over evil.
- e) The queen said she needed a different sort of _____.

Q10. State whether the following statements are True or False:

- a) The Japanese Festival of Dolls is called Hina Madari . _____
- b) The Japanese Festival of Dolls is celebrated twice a year . _____
- c) The parrot had learnt to talk after all. _____
- d) The bearded man waited for three hours in the line to talk to the queen. _____

Q11. Complete the lines of the poem:

I _____ a leg

Or skin a _____

And everything a climb a tree

I find some _____

Or _____ a bee.

And get the _____

All over me.

Q12. Write a proper noun for each of the common noun

- a) country _____
- b) river. _____
- c) city. _____
- d) day. _____

Q13. Write the plurals of:

Sheep, deer , child , mouse, oasis , cactus, syllabus, knife, fly , tooth

Q14. Write the opposite gender of :

God, nephew, uncle, hero, lion, fox, bull, horse, king, son

Q15. Fill in the blanks with apostrophe 's

- a) _____ hat is very colourful. (Priya)
- b) Look at _____ shoes. (Jack)
- c) The _____ nose is red. (clown)

Q16. Unscramble the words and write meaningful sentences

- a) Opens door Ankita the
- b) Stars many are sky there in the
- c) Interested music dance she was in and

Q17. Fill in the blanks with a/ an/ the

- a) Mr. Verma reached office in _____ hour.
- b) I saw _____ eagle and _____ Camel.
- c) _____ chair is broken. Don't sit on it.
- d) _____ Earth is the thid planet of our solar system.

Q18. Fill in the blanks with question words (who/ when/ how/ what)

- a) _____ is Raja wearing?
Raja is wearing a raincoat.
- b) _____ is she?
She is Radhika.
- c) _____ old are you?
I am nine years old.

Q19. Write an essay on any one topic :

Autobiography of a pencil. [OR]
Books are our best friends.

Q20. Write an application to the Principal of your school asking for three days leave.

Q21. COMPETENCY BASED QUESTIONS

- a) Select the word which is related to the word written in block letter "STETHOSCOPE"
Police, Doctor, Artist, Player
- b) How many VOWELS are there in the word "ESCALATOR"
3, 5, 9
- c) Your mother's daughter is your _____
Sister, niece, cousin
- d) Rearrange the letters to form correct word "KANB"
NBAK, BANK, ANKB

DELHI PUBLIC SCHOOL, DHANBAD

MONTHLY ASSIGNMENT FOR AUGUST – SEPTEMBER (Revision Assignment)

CLASS III

SUBJECT - MATHS

1. *FILL IN THE BLANKS* :-

- a) Write the successor of XI - _____
- b) Write the predecessor of XIX - _____
- c) $6 + 6 + 6 = 3 \times$ _____
- d) $7 \times$ _____ = 0
- e) $6 \times 8 =$ _____
- f) $VI + IX =$ _____ (In Roman numeral)
- g) $XX - XI =$ _____ (In Roman numeral)
- h) A triangle has _____ corners.
- i) III = _____ (In Hindu Arabic number)
- j) $7654 -$ _____ = 0
- k) $8122 +$ _____ = 8123
- l) XII _____ 15 (Put > , < or = sign)
- m) Write the Hindu Arabic Number of XIII - _____
- n) _____ figures have same shape and size.
- o) A book is _____ in shape.

2. Add the following:-

a) Th H T O	b) Th H T O
5 3 4 6	6 7 5 4
+ 2 5 3 3	+ 5 4 3 6
_____	_____
_____	_____

3. Find the sum of ;-

(a) $2752 + 51463$

4. Subtract the following :-

(a) Th H T O	b) Th H T O
9 7 4 7	8 6 7 9

$$\begin{array}{r} -7516 \\ \hline \\ \hline \end{array} \quad \begin{array}{r} -5890 \\ \hline \\ \hline \end{array}$$

5. Find the difference and check your answer :-

$$8700 - 4975$$

6. Multiply the following :-

a) Th H T O b) Th H T O

$$\begin{array}{r} 46 \\ \times 32 \\ \hline \\ \hline \end{array} \quad \begin{array}{r} 260 \\ \times 43 \\ \hline \\ \hline \end{array}$$

7. Fill in the boxes :-

a) $8 \times 9 = \underline{\quad}$ b) $9 \times 9 = \underline{\quad}$

c) $7 \times 0 = \underline{\quad}$ d) $4 \times 1 = \underline{\quad}$

e) $6 \times 5 = \underline{\quad} \times 6$ f) $7 \times \underline{\quad} = 5 \times 7$

8. Draw a line segment of 6 cm .

9. The shape of a dice is _____.

10. Word Problems :-

a) A vendor sells 2114 eggs in one day. How many eggs he sells in 5 days ?

b) In a school there are 1680 students. Among them 786 are boys. Find out the number of girls in the school.

c) In a library, there are 2785 books in English and 3250 books in Hindi .How many books are there in the library in both the languages ?

d) A pencil costs Rs

5. How much will 9 pencils cost ?

e) There are 2 wheels in a bike .How many wheels are there in 345 bikes ?

Delhi Public School, Dhanbad

Std.III

Half Yearly Revision Assignment

Computer

NAME _____

ROLL _____

SEC _____

I. Fill in the blanks using help box:

- a) A computer _____ gets tired with work.
- b) A computer cannot work without our _____.
- c) A computer is of no use without the _____ stored in it.
- d) _____ refers to a collection of programs.
- e) The _____ tool helps us to reverse the last action.
- f) Stamp tool acts like a _____.
- g) The first screen which appears after loading Windows is called _____.
- h) _____ are small pictures that represent a program, a file or a folder.

II. Name the following:

- a) Two components of computer _____
- b) Two hardware inside the CPU _____
- c) Two popular Operating systems _____
- d) Two versions of Windows Operating System _____
- e) Founders of Microsoft company _____
- f) Two icons on the Desktop _____

III. Write 'T' for True and 'F' for False:

- a) Output devices are used to process the input. _____
- b) Computer is of no use without the programs stored in it. _____
- c) The Open tool is used to see all our saved picture. _____
- d) To start a new drawing, click on Quit tool. _____
- e) The Window of a program cannot be shrinked. _____
- f) It is not important to shut down Windows properly. _____

V. Answer the following questions:

- a) What do you understand by information?
- b) Write any two advantages of computers.
- c) What is hardware?
- d) Give two examples each of hardware and software.
- e) Write the steps to use the Stamp tool.
- f) How will you open your drawing in Tux Paint?
- g) What are the different ways to start an app in Windows 10?
- h) What is Cortana?

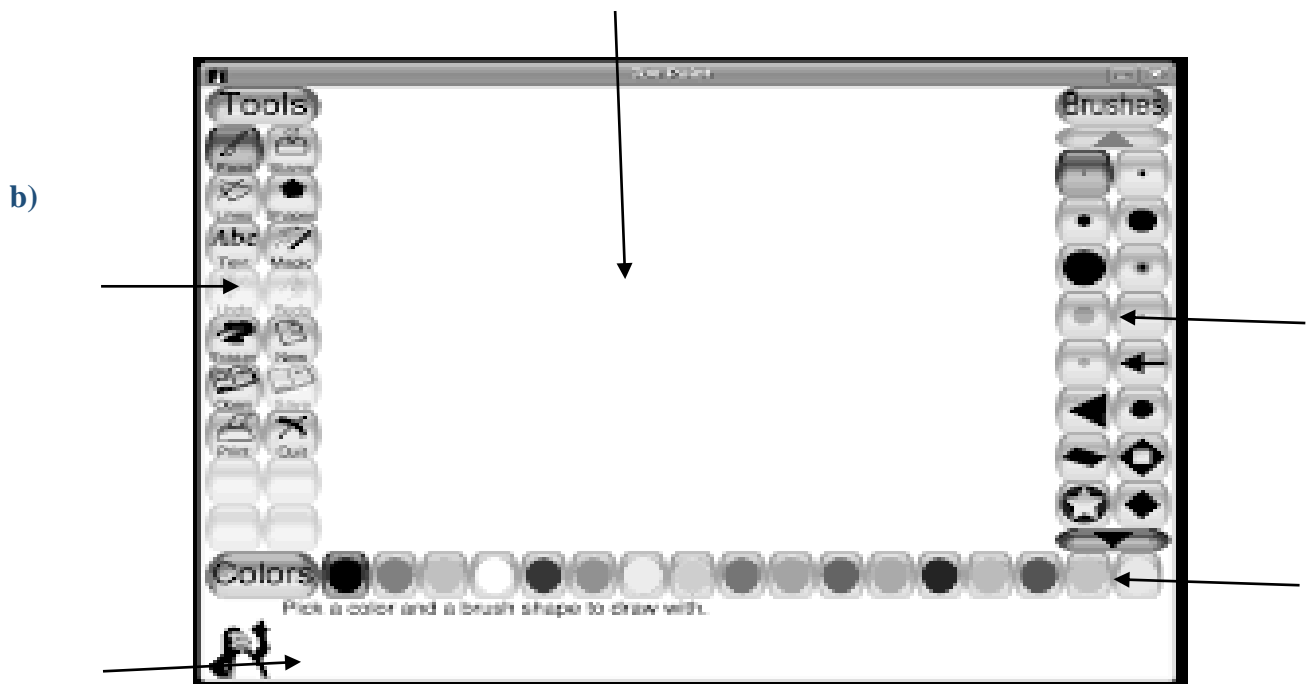
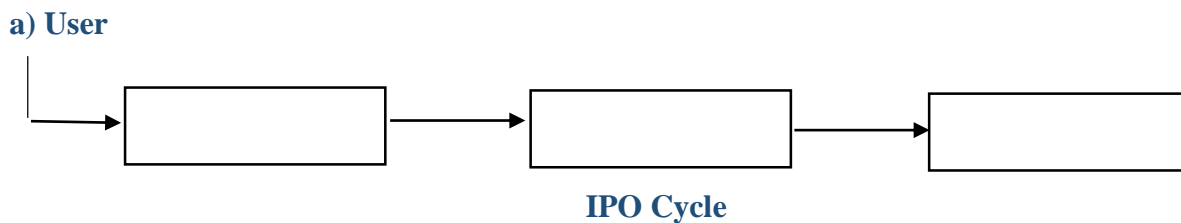
VI. Write the full forms:

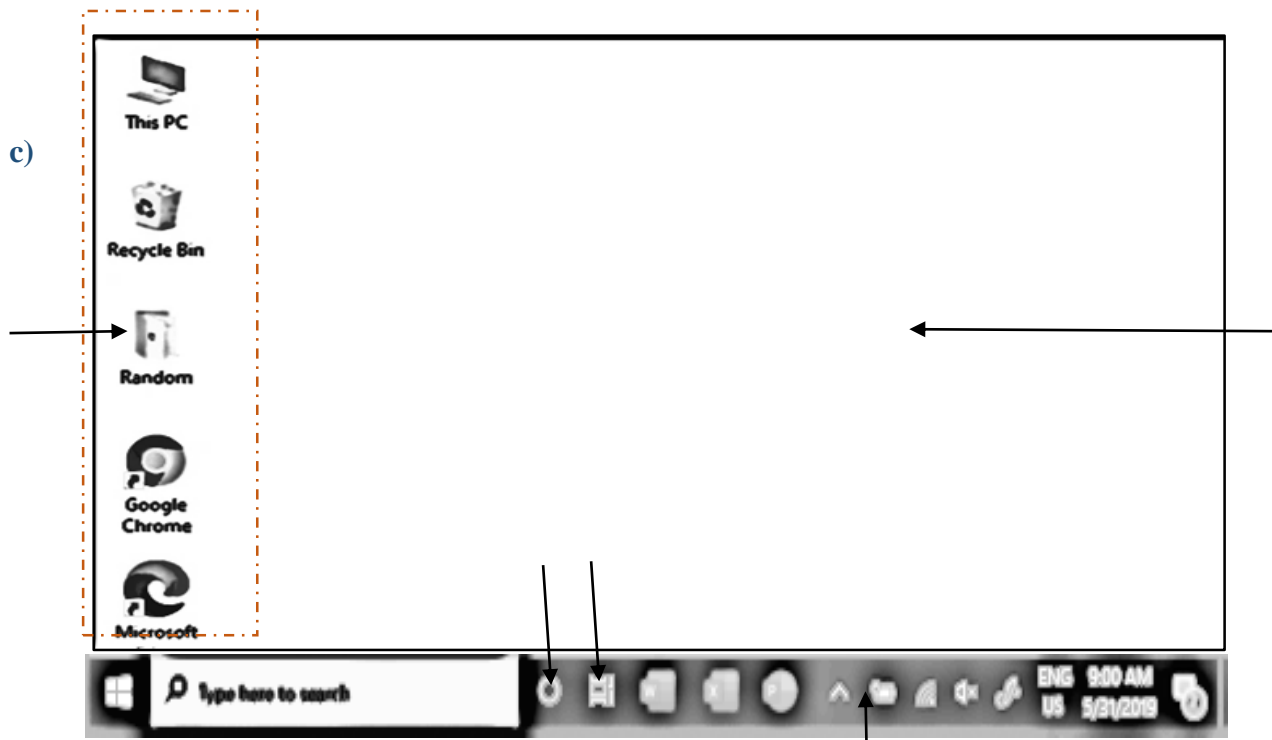
- a) IPO _____
- b) OS _____
- c) CUI _____
- d) GUI _____

VII. Draw the following:

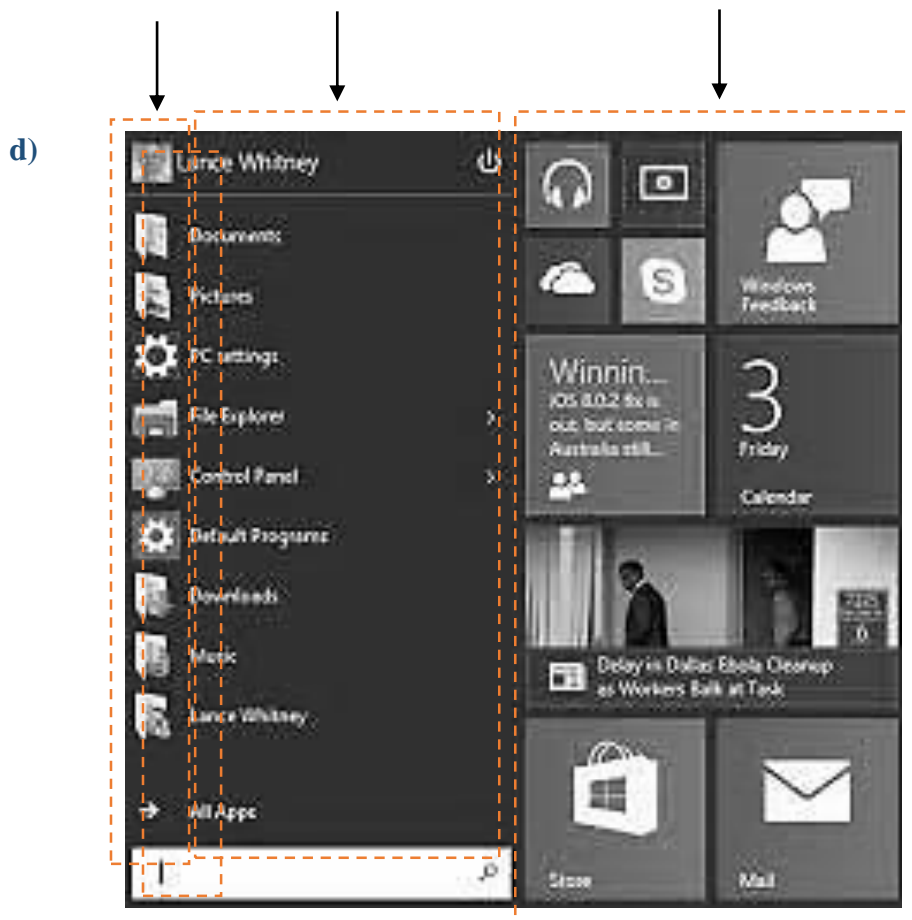
- a) Two output devices
- b) Two Magical Effects
- c) Windows logo
- d) Linux logo
- e) Android logo
- f) This PC icon
- g) Recycle Bin icon
- h) Task View icon
- i) Buttons to the right side of Title bar – Minimize, Maximize, Restore Down, Close

VIII. Label the parts of the following:





Windows 10 Desktop



Different parts of Start menu

IX. Problems based on logical and computational skills:

a) Observe the pattern and tick the correct option from answer set that comes next

Problem Set

A	C	E	G
---	---	---	---

Answer Set

H	J	K	I
---	---	---	---

(a) (b) (c) (d)

Z	Y	X	W
---	---	---	---

U	V	A	T
---	---	---	---

(a) (b) (c) (d)

b) Cross (X) the odd one out:

i)

Pizza	Chowmin	Newspaper	Sandwich	Burger	Pasta
-------	---------	-----------	----------	--------	-------

ii)

Onion	Pineapple	Banana	Grapes	Apple	Peach
-------	-----------	--------	--------	-------	-------

iii) Windows, Mouse, Keyboard, Monitor

c) Give the next three:

∩	∪	∧	∩	∪	∧			
△	○	□	△	○	□			

d) Tick the right choice:

Apple : Apple Juice :: Data : ?

Information (a)	User (b)	Input (c)	Process (d)
--------------------	-------------	--------------	----------------