

**DELHI PUBLIC SCHOOL, DHANBAD**

**COMPUTER ASSIGNMENT (MARCH) 2024-2025**

NAME \_\_\_\_\_ CLASS – 1 \_\_\_\_\_ ROLL NO. \_\_\_\_\_

Q1. Tick (✓) the correct answer :

1. The keys with numbers 0-9 marked on it are called \_\_\_\_\_
  - a. Alphabet keys
  - b. Number keys
  - c. Special keys
  - d. Backspace key
2. Which is the longest key on a keyboard?
  - a. Spacebar key
  - b. Backspace key
  - c. Enter key
  - d. None of these
3. Which key helps in erasing a letter to the left of the cursor?
  - a. Enter key
  - b. Backspace key
  - c. Spacebar key
  - d. None of these
4. What are the many small buttons on the keyboard called?
  - a. Rings
  - b. Buttons
  - c. Keys
  - d. None of thee
5. What is the other name of Enter key?
  - a. Return key
  - b. Backspace key
  - c. Spacebar key
  - d. Enter key

**Q2. Match the picture with their name.**



•

• line



•

• rectangle



•

• fill with color



•

• eraser



•

• brush



•

• oval

**Q3. Circle the correct answer.**

1) Which tool is used to draw a circle?

• Circle

• Oval

• Line

2) Which tool is used to draw a square?

• Square

• Triangle

• Rectangle

3) Pressing the left button of the mouse once is called?

• Double clicking

• Clicking

• Dragging

4) What is used to move an item from one place to another with the help of a mouse?

• Left-click

• Right click

• Drag and drop

**Q4. Write True or False.**

1) The spacebar key is the shortest key on the keyboard.

\_\_\_\_\_


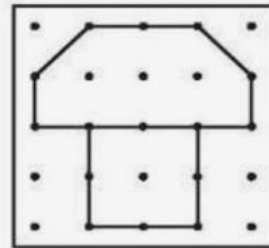

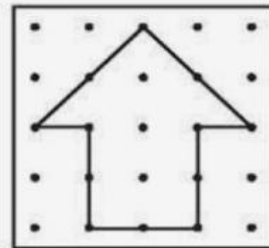

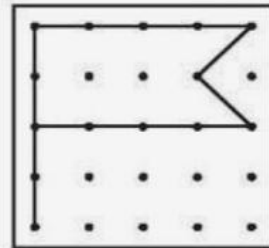

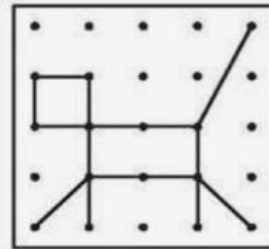

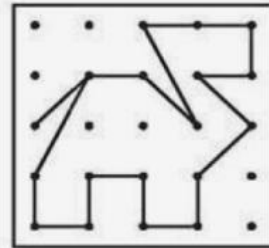

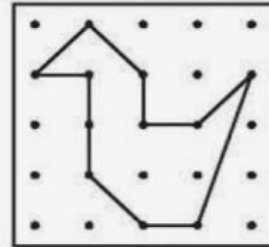

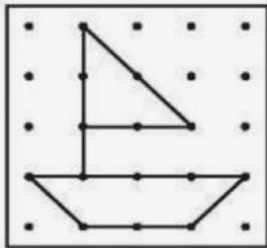

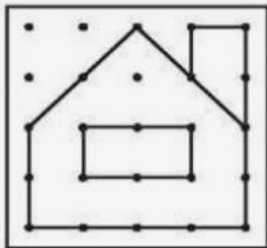

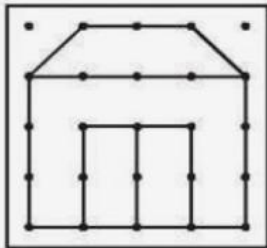

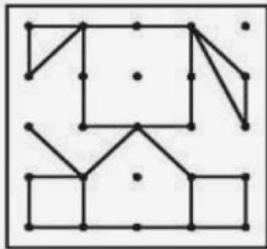

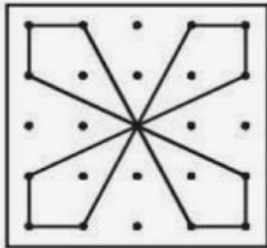

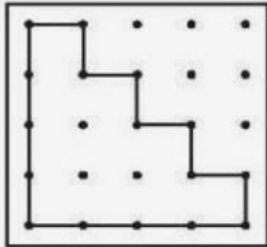
2) Place your index finger on the right button of the mouse.

\_\_\_\_\_

3) The Caps Lock key is used to type capital letters.

\_\_\_\_\_

Q5. Carefully examine the given patterns and Draw the same patterns on the empty tables on the side.



**DELHI PUBLIC SCHOOL**  
**MONTHLY ASSIGNMENT (MARCH)**  
**SUB:-ENGLISH**

CLASS : I

NAME : \_\_\_\_\_

SEC : \_\_\_\_\_

I . Tick the correct option and write in the blanks given below :-

- a. He \_\_\_\_\_ a pencil. (have/has)
- b. I \_\_\_\_\_ a new dress.(has/have)
- c. We \_\_\_\_\_ in the market. (is/are)
- d. She \_\_\_\_\_ a water bottle.(has/have)
- e. They \_\_\_\_\_ many books. (have/has)
- f. I \_\_\_\_\_ watching a movie.(is/am)
- g. The girls \_\_\_\_\_ afraid of the dog.(is/are)

II. Write two(2) naming words in :-

<u>PERSON</u>	<u>PLACE</u>	<u>ANIMAL</u>	<u>THING</u>
*	*	*	*
*	*	*	*

III. Circle the describing words :-

- a. There are many puppies in the kennel .
- b. I have a brown chair.
- c. Rahul eats a fresh apple.
- d. She is a tall girl.
- e. My mother has long hair.

IV. Fill in with a or an.

- |                  |                  |
|------------------|------------------|
| 1. _____ ox      | 6. _____ box     |
| 2. _____ axe     | 7. _____ owl     |
| 3. _____ chalk   | 8. _____ lion    |
| 4. _____ house   | 9. _____ igloo   |
| 5. _____ village | 10. _____ camera |

V. Draw and colour two(2) pictures whose name begins with a vowel sound.

VI. Give the opposite of :-

Light X

In X

Open X

White X

Up X

Day X

Fat X

Eyes X

Old X

Front X

VII. Give the plural of :-

Glass \_\_\_\_\_

Chair \_\_\_\_\_

Match \_\_\_\_\_

Friend \_\_\_\_\_

Class \_\_\_\_\_

Mango \_\_\_\_\_

Fox \_\_\_\_\_

Colour \_\_\_\_\_

# DELHI PUBLIC SCHOOL, DHANBAD

## Hindi Assignment (March 2024-25)

Name ..... Class 1 Sec .... Roll no .....

(क) सर्वनाम शब्द चुनकर रिक्त स्थानों की पूर्ति कीजिए।

तुम्हारा इससे क्या हम मैं तुम्हें मुझे मेरी मैंने हमें

- (1) ..... नाम ..... है ? ..... तो .  
..... आज पहली बार स्कूल में देखा है।
- (2) ..... पहले कहाँ पढ़ते थे ? ..... चंडीगढ़  
में रहता था।
- (3) कल ही ..... सब मुंबई आए है।
- (4) घर में ..... मम्मी पढ़ाती हैं।
- (5) चलो! स्कूल की घंटी बज गई ..... अब कक्षा में जाना  
चाहिए।






(ख) निम्नलिखित वाक्यों में सही लिंग शब्द चुनकर लिखिए।

- (1) ..... जंगल का राजा है। (शेर / शेरनी)
- (2) ..... जी बारह घूमने जा रही है। (नानी / नाना)
- (3) राज एक अच्छा ..... है। (लड़का / लड़की)
- (4) ..... जी कहानी सुना रही हैं। (मामा / मामी)
- (5) पेड़ की डाल पर ..... बैठा था। (बंदर / बंदरिया)
- (6) किशन मेरा ..... है। (भाई / बहन)
- (7) राधा की ..... जी ने मिठाई खिलाई। (चाची / चाचा)



(ग) चित्रों को देखकर उनके उचित पर्यायवाची शब्द खाली स्थान में लिखिए।

दीपक, बारिश, माँ, फूल, धरती, भूमि, बरसात, दीया, पुष्प,  
वर्षा, सुमन, माता, दीप, जननी, धरा

(1)				
(2)				
(3)				
(4)				
(5)				

घ) नीचे दिए गए वाक्यों में संज्ञा शब्दों को रेखांकित कीजिए।

- (1) बगीचे में हरियाली है।
- (2) आज मैं झूला झूलकर आया हूँ।
- (3) आकाश में पतंग उड़ रही है।
- (4) यह मेरी कक्षा है।
- (5) सागर बहुत गहरा है।
- (6) गंगा एक पवित्र नदी है।
- (7) वह बड़ी गरीबी में रहता है।

# DELHI PUBLIC SCHOOL, DHANBAD

## EVS ASSIGNMENT (MARCH) 2024-2025

NAME \_\_\_\_\_ CLASS – 1 \_\_\_\_\_ ROLL NO. \_\_\_\_\_

1. Read the description and tick the correct Answer.

- 1 This season has the longest days. It is hot. Everything is green.



Spring



Summer

- 2 This season has the longest nights. It is cold. Some animals fall asleep.



autumn



winter

- 3 Leaves on trees turn yellow, orange, and red. Animals collect food for winter.



Spring



autumn

- 4 It gets sunnier and warmer. Birds build their nests. All is in bloom.












Spring



winter

2. Colour the transport pictures. Where do they move ?

Write air, water or land below it.

 <input type="text"/>	 <input type="text"/>	 <input type="text"/>
 <input type="text"/>	 <input type="text"/>	 <input type="text"/>
 <input type="text"/>	 <input type="text"/>	 <input type="text"/>

3. Name the transport.



a. \_\_\_\_\_



b. \_\_\_\_\_



c. \_\_\_\_\_



d. \_\_\_\_\_



e. \_\_\_\_\_



f. \_\_\_\_\_



g. \_\_\_\_\_



h. \_\_\_\_\_



i. \_\_\_\_\_

4. Complete the dialogues with the words from the box.

television      computer      magazine      radio      cellphone  
 newspaper      telephone      letter      fax machine      notebook



1. Dina : What is it?  
 Voni : It is **telegram**



2. Lisa : What is it?  
 Adi : It is .....



3. John : What is it?  
 Tika : It is .....



4. Ica : What is it?  
 Eni : It is .....



5. Nina : What is it?  
 Joko : It is .....



6. Ana : What is it?  
 Ani : It is .....



7. Ria : What is it?  
 Edo : It is .....



8. Miki : What is it?  
 Mini : It is .....



9. Feli : What is it?  
 Isal : It is .....



10. Yuli : What is it?  
 Nani : It is .....



11. Billy : What is it?  
 Nunu : It is .....



5. Choose the correct word from the box and write under the picture.

Spring

Summer

Autumn


Winter



6. Match the pictures of each means of transport to its name.



train



airplane



boat



hot-air balloon



motorbike



helicopter



ship



truck



bus



car

# DELHI PUBLIC SCHOOL, DHANBAD

## MATHS MONTHLY ASSIGNMENT (MARCH'2025)

Name: \_\_\_\_\_ Class: 1 \_\_\_\_\_ Roll No: \_\_\_\_\_

Q1.a) Tick (✓) the object which is thick :-



b) Tick (✓) the object which is thin :-




c) Cross (✗) the taller one:-






d) Cross ( ✕ ) the shorter one:-



Q2. Fill in the blanks with ordinal numbers :-



First



1.The  is in the 1<sup>st</sup> position.

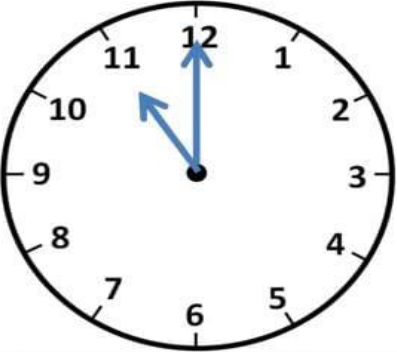
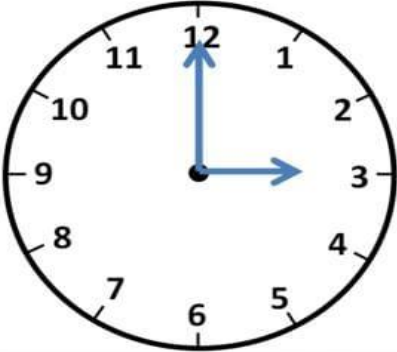
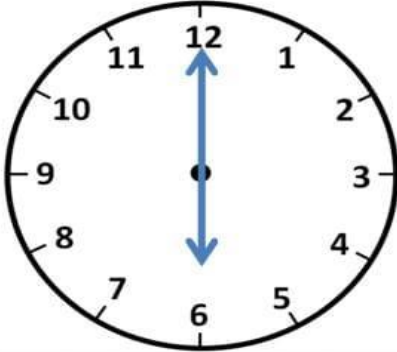
2.The  is in the \_\_\_\_\_ position.

3.The  is in the \_\_\_\_\_ position.


4.The  is in the \_\_\_\_\_ position.

5.The  is in the \_\_\_\_\_ position.

**Q3. Tell the time –**

		
___ o'clock	___ o'clock	___ o'clock

**Q4. Count the number of shapes in and colour the given picture:-**



**CIRCLE – \_\_\_\_\_**

**TRIANGLE – \_\_\_\_\_**

**OVAL – \_\_\_\_\_**

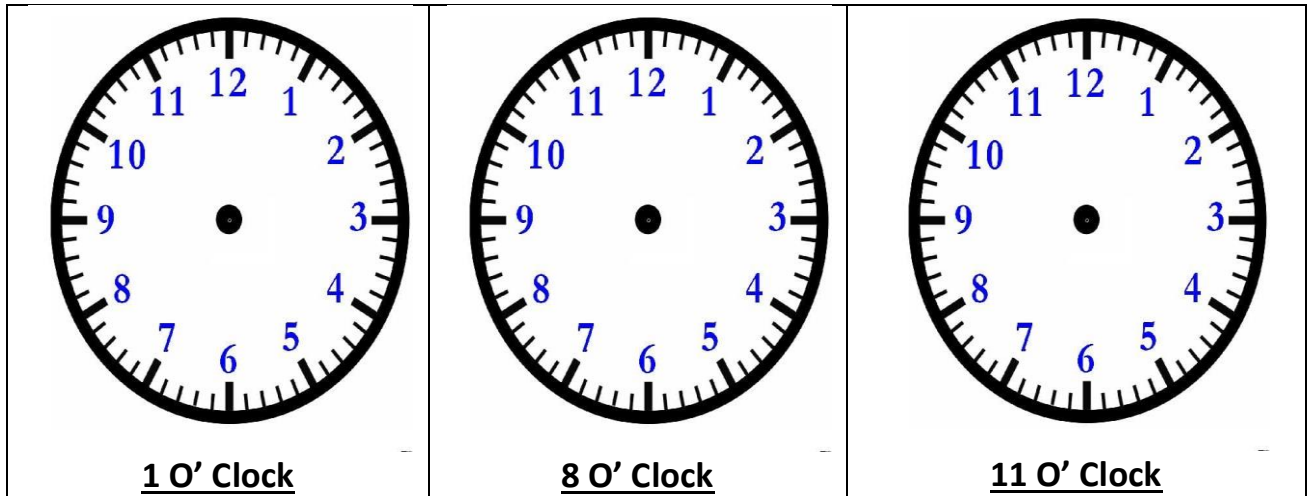
**SQUARE - \_\_\_\_\_**

**TRIANGLE - \_\_\_\_\_**

**CIRCLE - \_\_\_\_\_**

**RECTANGLE - \_\_\_\_\_**

Q5. Draw the hands of the clock:-



Q6. Word Problems:-

There are 20 students in Grade 1. 12 of them are Girls.  
How many Boys are in Grade 1?



I had 30 Marbles, I gave 21 of them to John. How many Marbles are left with me now?

