

Delhi Public School, Dhanbad

Revision Assignment

Class- 2

Subject - Hindi

Name-

Roll-

1. निम्नलिखित प्रश्नों के उत्तर लिखिए।
क. अध्यापिका जी में छड़ी घुमा कर अपने कोर्ट से कौन-कौन से खिलौने निकले?

.....
.....

- ख. अकबर के दरबार के अन्य दरबारी क्या चाहते थे?

.....
.....
.....

2. किसने कहा?

क. "तो फिर दूसरा बर्तन लो।"

.....
ख. "आप सब चिंता ना करें। मैं इस निर्दय शेर को सबक सिखाऊंगी।"

3. तुकांत शब्द लिखिए।

नील भालू
दानी जगत

4. लिंग बदलें।

राजा मामा
सेठ फूफा

5. दिए गए शब्दों के एकवचन और बहुवचन के जोड़े बनाकर लिखिए।

घोड़ा अलमारी कुर्सी जूते घोड़े अलमारियां कुर्शियां जूते

एकवचन

बहुवचन

.....
.....
.....
.....

.....
.....
.....
.....



Revision Assignmet

Class : 2 Sub: English

Name : _____ Roll : ____

Q1. Answer the following Questions.

1 What did Ping do when he got the seed?

Ans: _____

_____.

2 What did Tinku and his friends do?

A _____

_____.

3 Why did King Chang want to choose a new king?

A _____

_____.

Q2 Write the "er" form of the following adjectives.

Young _____

Weak _____

Tall _____

Short _____

Stronger _____

Q3 Write the opposite of the following words.

Small × _____

Hot × _____

Near × _____

Long × _____

Sad × _____

Q4 Tick the correct answer.

1 Who was smiling down at Tinku?

Ma Moon Furry

2 Chang was the king of _____

Japan China India

3 Who could not sleep?

Ma Pa Tinku

Q5 Who said to whom?

1 " The night is beautiful".

2 " I will teach you a secret spell"

3 " Amma,look here!"

Q6 Underline the Nouns in the following sentences.

1 The mouse is running away.

2 We are buying mangoes.

3 The Ganges is a river.

4 Rani is playing with her toys.

Q7 Frame Sentences with :

Time : _____

Friend : _____

Happy: _____

Hurt : _____

Q8 Write the word meaning of :-

Spell _____

Honest _____

Sprout _____

Q9 Make a Word Family with the word "Something " (3 words)

Q10 Write an essay on "Cleanliness " .



DELHI PUBLIC SCHOOL , DHANBAD

STD II EVS REVISION ASSIGNMENT(SEPTEMBER – 2023)

NAME _____ CLASS & SEC _____ ROLL NO. _____

FILL IN THE BLANKS

- 1) Kutcha house : villages :: Pucca house : _____.
- 2) Roofs of _____ are semicircular in shape .
- 3) An _____ house should have proper arrangement for sunlight and air .
- 4) Independence Day is celebrated on _____ every year.
- 5) Sticky juice from _____ plant is used to make gum.
- 6) We have _____ bones in our body .
- 7) Elephant : land animal :: Whale : aquatic animal :: Squirrel : _____.
- 8) Sugarcane plants are used for making _____.
- 9) The largest animal on the Earth is _____.
- 10) Clove is a _____.
- 11) _____ is a miracle food as it never gets spoiled .
- 12) The bones together make a _____.
- 13) We should drink at least _____ glasses of water.
- 14) Green leafy vegetables are an example of _____ food.
- 15) We should avoid eating _____ food like burgers, chips and cold drinks.

WHO AM I

- 1) I am a foldable house made up of cloth . _____
- 2) I am known as a miracle food. _____
- 3) I am known as the festival of colours . _____
- 4) I am known as the kitchen of the plant. _____
- 5) I bake bread for you . _____

- 6) I am the largest organ of the body . _____
- 7) I am a house on wheels and I can be parked anywhere . _____
- 8) I am known as the festival of lights. _____
- 9) I am a house made up of wood . I float on water. _____
- 10) I help you to eat and speak . _____
- 11) I protect your heart and lungs. _____
- 12) I sell notebook, pen , pencil, paper etc. _____
- 13) I am a national festival , celebrated with great pomp and show all over India every year on 26th January. _____
- 14) I keep people's money and jewellery safe. I help people by giving them loan . _____
- 15) I am a place where two bones meet . _____
- 16) I sell medicines . I am a _____.
- 17) I am the soft and fleshy part of the plant and I contain seeds. _____
- 18) I am soft and fleshy . I am present between the bone and the skin. _____

UNSCRAMBLE THE WORDS

- 1) SEUOHTA O B _____
- 2) HACNIPS _____
- 3) EUNSR _____
- 4) NMIWSMIG _____
- 5) RESVONICAR _____
- 6) QUEMOS _____
- 7) LIATPSOH _____
- 8) RWROUB _____
- 9) NOTLESKE _____
- 10) NERTIOSTA _____
- 11) REALARBO _____

ANSWER THE FOLLOWING

Q1) Where do aquatic animals live ?

Ans _____

Q2) What will happen if there is no leaf on a plant ?

Ans _____

Q3) Why should we play outdoor games?

Ans _____

Q4) Why do you think doctors always advise to eat fruits and green vegetables?

Ans _____

Q5) What is the use of beeswax?

Ans _____

Q6) Why is India called the " Land of Festivals" ?

Ans _____

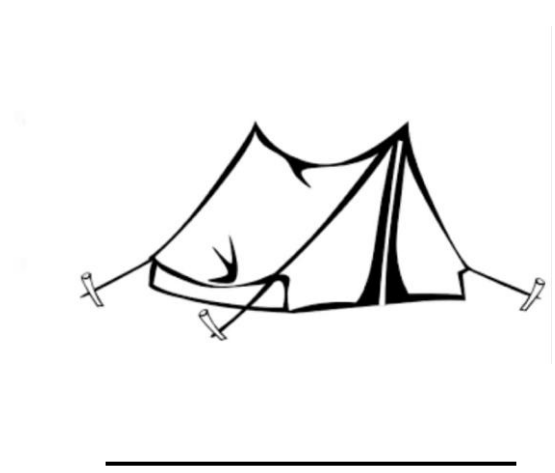
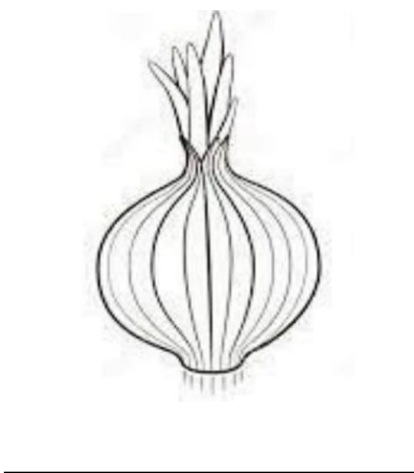
Q7) How does protective food help us?

Ans _____

Q8) Why are hyena and vulture useful to a forest ?

Ans _____

IDENTIFY THE PICTURES



Computer Revision Assignment Std II

1. Fill in the blanks:-

- a) ATMs have _____ inside them.
- b) Computers help children in doing their _____.
- c) Teachers use computer to prepare _____.
- d) Computers are used at billing _____ at shops.
- e) We can listen to _____ music on a computer.
- f) A _____ works directly on electricity.
- g) _____ can store a lot of information.
- h) _____ do calculation very fast.
- i) _____ have feelings.
- j) All the parts of the computer work together as a _____.
- k) The printed paper is called the _____.
- l) A _____ displays the work done on a computer.
- m) UPS keeps the computer ON when the _____ goes OFF.
- n) The work saved in the computer is called a _____.
- o) While drawing a filled shape, Color 2 is the _____.

2. Answer the following questions:-

- a) How will you draw filled shapes?
- b) How will you save a file?
- c) What is the use of Text tool?
- d) Which option is used to open a saved file?
- e) Name any two types of brushes available in Paint.
- f) Name any two filled style option?
- g) What is a Printer?
- h) Name the parts of the computer which are used to store work.
- i) What is CPU?
- j) Write two things that computer do better than us?
- k) Write any two ways in which computers are useful to us.
- l) Name the computers that work on battery.
- m) Which one is the most powerful computer?


3. Draw the following:-

- a) Any two types of computer
- b) Four main parts of the computer.
- c) CD, Pen drive, Speakers, Headphone, UPS
- d) Icons of save, open, New of MS Paint

4. Complete the following:-

- a) H ----- R D C----- P Y
- b) P----N D R ----- V -----
- c) SMA-----T MA----- H---- N -----
- d) BRU----- H -----S TOO -----

5.



Write the name of the tools used to draw the above figure:-

- 1. TREE-----
- 2. CLOUD-----
- 3. HUT-----
- 4. HILLS-----
- 5. SUN-----
- 6. RIVER-----
- 7. COLOUR THE PICTURE-----

DELHI PUBLIC SCHOOL, DHANBAD

MATHS REVISION ASSIGNMENT (SEPTEMBER) 2023-2024

NAME _____ CLASS – 2 _____ ROLL NO. _____

A. Fill in the blanks:-

1. Number names of 345 = _____

2. Number names of 222 = _____

3. Write the number :- Five hundred twenty = _____

4. Write the number :- Seven hundred thirty two = _____

5. 140 = _____ Hundreds + _____ Tens + _____ Ones

6. 573 = _____ Hundreds + _____ Tens + _____ Ones

7. 60 tens = _____ Hundreds

8. 90 tens = _____ Hundreds

9. Write the place value of underline digit 139 = _____

10. Write the place value of underline digit 967 = _____

11. Count by 2's 30, 32, _____

12. Count by 3's 73, 76, _____

B. Match the following :-

a) 11

1) 50

b) $40 + 38$

2) 78

c) $50 + 0$

3) odd number

d) $300 + 30 + 3$

4) 417

e) Four hundred seventeen

5) 333

f) 


7) cube

g) Dice

8) cylinder

h) 

9) vertical lines

i) 

10) curved line

C. Add:-

$$\begin{array}{cc} \bigcirc & \bigcirc \\ 2 & 2 \end{array}$$

$$\begin{array}{cc} 2 & 3 \\ + 2 & 7 \end{array}$$

$$\begin{array}{cc} \bigcirc & \bigcirc \\ 4 & 6 \end{array}$$

$$\begin{array}{cc} 2 & 3 \\ + 1 & 2 \end{array}$$

$$\begin{array}{cc} \bigcirc & \bigcirc \\ 6 & 7 \end{array}$$

$$\begin{array}{cc} + 1 & 4 \end{array}$$

$$\begin{array}{cc} \bigcirc & \bigcirc \\ 8 & 5 \end{array}$$

$$\begin{array}{cc} + 3 & 9 \end{array}$$

D. Subtract:-

| | | | | | | | |
|----------------------|----------------------|----------------------|----------------------|----------------------|----------------------|----------------------|----------------------|
| \bigcirc | \bigcirc | \bigcirc | \bigcirc | \bigcirc | \bigcirc | \bigcirc | \bigcirc |
| 7 | 0 | 6 | 9 | 8 | 3 | 4 | 5 |
| - 3 | 3 | -2 | 5 | -4 | 5 | -2 | 7 |
| <input type="text"/> | <input type="text"/> | <input type="text"/> | <input type="text"/> | <input type="text"/> | <input type="text"/> | <input type="text"/> | <input type="text"/> |

E. Multiply:-

| | | | | | | | |
|----------------------|----------------------|----------------------|----------------------|----------------------|----------------------|----------------------|----------------------|
| \bigcirc | \bigcirc | \bigcirc | \bigcirc | \bigcirc | \bigcirc | \bigcirc | \bigcirc |
| 1 | 4 | 5 | 3 | 8 | 5 | 3 | 6 |
| x 3 | x 4 | x 5 | x 6 | | | | |
| <input type="text"/> | <input type="text"/> | <input type="text"/> | <input type="text"/> | <input type="text"/> | <input type="text"/> | <input type="text"/> | <input type="text"/> |

F. Problem Sums:-

1. Reena has 42 marbles, Rahul has 23 marbles, and Saily has 30 marbles. How many marbles do they have in total ?

2. Kiran has 95 flowers, she gave 37 of them to her friend.

How many flowers does she have now ?

3. There are 8 apples in a basket. How many apples are there in 5 baskets.

G. Colour the beads of Abacus to show the numbers given.

| | | | | | | | |
|----|--|----|--|----|--|----|--|
| 1. | | 2. | | 3. | | 4. | |
|----|--|----|--|----|--|----|--|

H. Colour the 3rd, 5th and 11th beads.

1st

12th