

DELHI PUBLIC SCHOOL, DHANBAD

ASSIGNMENT – October'22/November'22

CLASS: TWO

SUBJECT: HINDI

प्रश्न 1- वाक्य बनाएं।

- क - भारत-----
- ख- अध्यापक-----
- ग- त्योहार-----
- घ - दुर्गा पूजा-----
- ङ- महान-----

प्रश्न 2- अलग शब्द को रेखांकित करें।

- क- चांद तारे आसमान धरती
- ख- बैगन आलू भिंडी रसगुल्ला
- ग- कॉपी कलम पुस्तक खिलौना
- घ- पूरब पश्चिम दक्षिण किताब

प्रश्न 3- विलोम शब्द लिखें।

- क- रात x -----
- ख- ऊपरx-----
- ग- अंधकारx-----
- घ- गोराx -----

प्रश्न 4 - समान अर्थ वाले शब्द लिखें।

- क- गगन -----
- ख- फूल -----
- ग- पानी -----
- घ- आग -----

प्रश्न 5- दिए गए वाक्यों में सर्वनाम शब्द को रेखांकित करें।

- क- तुम क्या कर रहे हो?
- ख- मैं रोज विद्यालय जाता हूँ।
- ग- उन्होंने मुझे खिलौने दिए।
- घ- उसने मोहन को मारा।
- ङ- हमें बड़ों का आदर करना चाहिए।

प्रश्न 6. गृह कार्य 'टेसू मांगे चना चबेना' 'कविता को याद करें।

Computer Science Monthly Assignment [Oct—Nov]

Std II



[HINTS-→ Start button, Taskbar, CPU, Desktop, Icons, Minimize, close, maximize]

1. Fill in the blanks:-

- The first screen that appears on the monitor is called the _____.
- When we click on the _____ a Start menu appears.
- _____ are the small pictures on the desktop.
- The _____ is located at the bottom of the desktop.
- We use the _____, _____ and _____ buttons to resize or close the windows.
- The _____ switches itself off when you shut down a computer.

2. Identify the buttons of windows:-



Three empty rectangular boxes with green borders, each with a blue arrow pointing to it from the button above.



3. Write the steps to start a computer.

Four horizontal lines for writing the steps to start a computer.

4. Draw any one icon of the desktop and a START Button.

A large empty rectangular box with a green border for drawing a desktop icon.

A large empty rectangular box with a green border for drawing a START button.

DELHI PUBLIC SCHOOL, DHANBAD





STD-II EVS ASSIGNMENT

(OCT/NOV 2022)

1) Fill in the blanks

- i) Accident and injuries can happen when we are not _____.(careful/climbing)
- ii) Do not play on the _____.(road/play ground)
- iii) Cross the road at the _____ crossing only.(deer/zebra)
- iv) We should not _____ alone in the pool.(swim/walk)
- v) Injured people are taken to a _____.(hospital/school)

2) Identify the road signs

- i)  _____ ii)  _____
- iii)  _____ iv)  _____

3) Match the following

i) Dessert



ii) Mountain



iii) Ocean



iv) Lake



HOLIDAY HOMEWORK

- 1) Draw a diagram of the Earth showing the land and water (using coloured sand,marble paper etc)
- 2) Draw the traffic light and colour it.

Do both in your scrap book

DELHI PUBLIC SCHOOL , DHANBAD

HOLIDAY HOMEWORK , 2022

Std – 2. Subject – English

Q1. Write the 'Masculine gender' for the 'feminine gender' :-

- a. sister. b. vixen. c. nanny goat
- d. empress. e. mare f. cow
- g. wife h. waitress

Q2. Change the following Singular nouns to Plural nouns :-

- a. story. b. loaf. c. ox
- d. deer. e. bush. f. Puppy
- g. foot. h. bat

Q3. Underline the adjectives in the given sentences :-

- a. Suresh is a good boy.
- b. Kolkata is a big city.
- c. Anita is a lazy girl.
- d. I saw a beautiful lady.

Q4. Write 'C' for countable nouns and 'U' for uncountable nouns :-

- a. honey
- b. coffee
- c. pencils
- d. cheese
- e. flower.
- f. dogs
- g. ghee
- h. friends

Q5 . Circle the Proper Nouns :-

- a. city , town , Delhi , village
- b. Colgate , oil , doll , shampoo
- c. river , sea , mountain , Ganga

DELHI PUBLIC SCHOOL , DHANBAD

Monthly Assignment , 2022 October - November

Std – 2. Subject – English

Q1. Write the meanings of the given words :-

- a. pound –
- b. sturdy –
- c. grove –
- d. chowkidar –
- e. creep –

Q2. Make meaningful sentences with the given words :-

- a. sturdy
- b. fruit
- c. birds
- d. dry
- e. town

Q3. Make a word family : (six words)

Spreading

Q4. Make a word tree : (six words)

To

Delhi Public School Dhanbad

Class 2 Holiday Assignment(November)

1. Write division facts for each of the following-

$5 \times 8 = 40$ _____

$7 \times 4 = 28$ _____

$2 \times 9 = 18$ _____

$6 \times 5 = 30$ _____

Word problem

3 girls share 27 toys equally. How many toys does each girl get?

|

Delhi Public School Dhanbad

CLASS II Maths Assignment (October/November)

Name - _____ Class- ____ Sec- ____

1.Fill in the blanks-

- a) The number to be divided is called the_____
- b)The number by which we divide is called the_____
- c)The answer we get after the division is called the _____
- d) $14 \div 1 = \underline{\quad}$
- e) $0 \div 8 = \underline{\quad}$
- f) $23 \div 23 = \underline{\quad}$
- g) $5 \div \underline{\quad} = 5$
- h) $\underline{\quad} \div 14 = 0$

2.Find the quotient

- a. 5) 45 (b. 4) 36(c. 8) 72(

- d. 3) 15 (e. 2)17(f. 6) 57 (