

DELHI PUBLIC SCHOOL, DHANBAD

CLASS -1

EVS ASSIGNMENT (November)

Name:-\_\_\_\_\_ Roll-\_\_\_\_\_

Q1. Fill in the blanks:-

1. We must eat \_\_\_\_\_ meals in a day.
2. We have \_\_\_\_\_ in the night.
3. We must \_\_\_\_\_ our hands before and after eating.
4. We should not \_\_\_\_\_ our meals.
5. We should drink \_\_\_\_\_ every day.
6. \_\_\_\_\_ gives us energy to carry our daily activity.
7. We get \_\_\_\_\_ and \_\_\_\_\_ from herbs.
8. We get mangoes and apples from \_\_\_\_\_.

Q2. What are the main sources of food?

A2. \_\_\_\_\_  
\_\_\_\_\_

Q3. Write (T) for true and (F) for false:-

- a. We get amul butter from plants. \_\_\_\_\_
- b. We get grapes from climbers. \_\_\_\_\_
- c. We get egg and milk from animals. \_\_\_\_\_

d. We get pulses from plants. \_\_\_\_\_

e. We should not drink water. \_\_\_\_\_

Q4. Draw and colour two food items that you like to eat.

**DELHI PUBLIC SCHOOL, DHANBAD**  
**ENGLISH ASSIGNMENT(NOVEMBER) 2021-2022**

**CLASS – 1**

**1. Fill in the blanks with missing letters: -**

**a. short 'a'**

i) p \_\_\_ n

ii) c \_\_\_ r

iii) b \_\_\_ t

iv) m \_\_\_ n

**b. short 'e'**

i) j \_\_\_ t

ii) p \_\_\_ n

iii) h \_\_\_ n

iv) n \_\_\_ t

**c. short 'i'**

i) sh \_\_\_ p

ii) f \_\_\_ sh

iii) p \_\_\_ g

iv) r \_\_\_ ng

**d. short 'o'**

i) d \_\_\_ g

ii) p \_\_\_ t

iii) l \_\_\_ g

iv) d \_\_\_ ll

**e. short 'u'**

i) h \_\_\_ t

iii) c \_\_\_ p

ii) S \_\_\_ n

iv) j \_\_\_ g

## 2. Fill in the blanks with missing letters:-

### a. long 'a'

- i) s \_\_\_ le
- ii) g \_\_\_ te
- iii) c \_\_\_ ke
- iv) b \_\_\_ ke

### b. long 'e'

- i) b \_\_\_ \_
- ii) j \_\_\_ \_ p
- iii) ch \_\_\_ \_ se
- iv) sh \_\_\_ \_ p

### d. long 'i'

- i) \_\_\_ ce
- ii) k \_\_\_ te
- iii) n \_\_\_ ne
- iv) m \_\_\_ ce

### d. long 'o'

- i) c \_\_\_ ne
- ii) ph \_\_\_ ne
- iii) b \_\_\_ ne
- iv) t \_\_\_ \_ l

### f. long 'u'

- i) c \_\_\_ te
- ii) t \_\_\_ be
- iii) c \_\_\_ be
- iv) m \_\_\_ te

DELHI PUBLIC SCHOOL, DHANBAD

MATHS ASSIGNMENT







FOR NOVEMBER 2021-2022

CLASS-1

Name \_\_\_\_\_ Section \_\_\_\_\_

Roll Number \_\_\_\_\_

1. Solve the following word problems

		WORKING OUT
1)	There are 25  in one pond. There are 23  in another pond. How many  in total? _____	
2)	Peter sees 31  in one tree. He sees 16  in another tree. How many  did he see in all? _____	
3)	There are 44  in one tree. There are 21  more in another tree. How many  are there in all? _____	
4)	Jasmine counts 51  going to school. She counts 23  coming back home. How many does she count in all? _____	

2. Subtract the following numbers

$$\begin{array}{r} 18 \\ - 5 \\ \hline \end{array}$$

$$\begin{array}{r} 13 \\ - 12 \\ \hline \end{array}$$

$$\begin{array}{r} 18 \\ - 13 \\ \hline \end{array}$$

$$\begin{array}{r} 17 \\ - 1 \\ \hline \end{array}$$

$$\begin{array}{r} 17 \\ - 6 \\ \hline \end{array}$$

$$\begin{array}{r} 19 \\ - 9 \\ \hline \end{array}$$

$$\begin{array}{r} 9 \\ - 5 \\ \hline \end{array}$$

$$\begin{array}{r} 15 \\ - 2 \\ \hline \end{array}$$

$$\begin{array}{r} 15 \\ - 3 \\ \hline \end{array}$$

$$\begin{array}{r} 13 \\ - 2 \\ \hline \end{array}$$

$$\begin{array}{r} 12 \\ - 11 \\ \hline \end{array}$$

$$\begin{array}{r} 19 \\ - 8 \\ \hline \end{array}$$

$$\begin{array}{r} 16 \\ - 12 \\ \hline \end{array}$$

$$\begin{array}{r} 11 \\ - 1 \\ \hline \end{array}$$

$$\begin{array}{r} 14 \\ - 2 \\ \hline \end{array}$$

$$\begin{array}{r} 18 \\ - 4 \\ \hline \end{array}$$

3. Add the following numbers:

$\begin{array}{r} 16 \\ + 22 \\ \hline \end{array}$	$\begin{array}{r} 53 \\ + 33 \\ \hline \end{array}$	$\begin{array}{r} 10 \\ + 19 \\ \hline \end{array}$	$\begin{array}{r} 24 \\ + 71 \\ \hline \end{array}$	$\begin{array}{r} 52 \\ + 42 \\ \hline \end{array}$
$\begin{array}{r} 25 \\ + 31 \\ \hline \end{array}$	$\begin{array}{r} 20 \\ + 46 \\ \hline \end{array}$	$\begin{array}{r} 11 \\ + 8 \\ \hline \end{array}$	$\begin{array}{r} 16 \\ + 13 \\ \hline \end{array}$	$\begin{array}{r} 36 \\ + 31 \\ \hline \end{array}$
$\begin{array}{r} 84 \\ + 13 \\ \hline \end{array}$	$\begin{array}{r} 11 \\ + 11 \\ \hline \end{array}$	$\begin{array}{r} 43 \\ + 34 \\ \hline \end{array}$	$\begin{array}{r} 15 \\ + 10 \\ \hline \end{array}$	$\begin{array}{r} 66 \\ + 31 \\ \hline \end{array}$
$\begin{array}{r} 21 \\ + 16 \\ \hline \end{array}$	$\begin{array}{r} 36 \\ + 21 \\ \hline \end{array}$	$\begin{array}{r} 13 \\ + 13 \\ \hline \end{array}$	$\begin{array}{r} 31 \\ + 51 \\ \hline \end{array}$	$\begin{array}{r} 31 \\ + 16 \\ \hline \end{array}$

# Computer Monthly Assignment (November)

## STD 1

### 1. Fill in the blanks:-

- Keyboard has small buttons on it called \_\_\_\_\_.
- Keyboard consists of \_\_\_\_\_ or \_\_\_\_\_ keys.
- The keys on which A—Z letters are written are called \_\_\_\_\_ keys.
- A \_\_\_\_\_ is a small blinking line on the screen.
- \_\_\_\_\_ is the only key on the keyboard on which nothing is written.
- The enter key is also known as the \_\_\_\_\_ key.

### 2. Identify the keys of the keyboard:-




### Colour the keys of the keyboard as follows:-

Alphabet keys ----- green

Number keys ---Red

Enter key --- Blue

Spacebar key--- yellow





# Delhi Public School, Dhanbad

## Hindi Assignment November 2021

Name \_\_\_\_\_ Class 1 Sec \_\_\_\_\_ Roll no. \_\_\_\_\_

1) संयुक्त व्यंजन शब्दों को उनके चित्रों से मिलाएं।

पक्षी आश्रम नेत्र यज्ञ पत्र



2) मिलान करो

त् + र

ज् + ज

क् + ष

श् + र

ज

क्ष

श्र

त्र

3.

चित्र देखकर निम्न संयुक्त वर्णों के शब्द लिखो और तीन शब्द स्वयं लिखो

क्ष - (क + ष)



---

---

---

\_\_\_\_\_

\_\_\_\_\_

\_\_\_\_\_

त्र - (त + र)



---

---


---

\_\_\_\_\_

\_\_\_\_\_

\_\_\_\_\_

4.



दी गई कहानी के चित्रों को देख और सही विकल्पों को चुन कर कहानी को पूरा करिये :

दवा चिड़ियों सैर साथियों चोट चिड़िया  
रमन ठीक पिंजरें खाना और पानी खोल

एक दिन रमन \_\_\_\_\_ पर जा रहा था। उसे रास्ते में एक \_\_\_\_\_ दिखी। चिड़िया को \_\_\_\_\_ लगी थी।  
\_\_\_\_\_ उस चिड़िया को अपने साथ घर ले आया। उस चिड़िया को उसने \_\_\_\_\_ लगाई और एक \_\_\_\_\_ में रख दिया। वह चिड़िया को समय से \_\_\_\_\_ देता था। कुछ दिनों में चिड़िया \_\_\_\_\_ हो गई।  
एक दिन रमन ने बहुत सी \_\_\_\_\_ को उड़ते हुए देखा। उसने अपनी चिड़िया का पिंजरा \_\_\_\_\_ कर उसको भी उड़ा दिया ताकि वह अपने \_\_\_\_\_ के साथ खुश रह सके।