

## ENGLISH MONTHLY ASSIGNMENT [JANUARY]

CLASS -- II

1. Frame meaningful sentences.

- a. lady - \_\_\_\_\_
- b. angry - \_\_\_\_\_.
- c. smoke - \_\_\_\_\_.
- d. adjust- \_\_\_\_\_.

2. Answer the following questions in one word.

a. Who was shorter than Chitra's friends ?

Ans. \_\_\_\_\_.

b. When did Chitra used to cry quietly?

Ans. \_\_\_\_\_.

c. Who suggested Chitra to adjust?

Ans. \_\_\_\_\_.

d. Did Chitra wear the red cap at last?

Ans. \_\_\_\_\_.

3. Fill in the blanks with correct conjunctions from those given in the brackets.

a. Would you like to wear a cap \_\_\_\_ a hat? (and ,or)

b. My aunt is old \_\_\_\_ she is fit. (or,but)

c. Ria \_\_\_\_\_ Sia are playing badminton. ( but,and)

d. Mohit is smart \_\_\_\_\_ obedient. ( but ,and)

4. Write the opposites of the following.


a. small \_\_\_\_\_




b. cold \_\_\_\_\_



c. short \_\_\_\_\_



d. laugh \_\_\_\_\_



\*\*\*\*\*

## Computer Assignment [January]

### STD II

#### 1. Fill in the blanks:-[ using the Hints]

[ ESC, Play Alone, Comets, TUX Maths ]

- \_\_\_\_\_ is a computer game that helps you to practice Math facts while playing.
- Clicking on \_\_\_\_\_ you will see many types of mini games to play.
- The games start with \_\_\_\_\_ carrying addition problems falling from the sky.
- To quit the game press the \_\_\_\_\_ key on the keyboard.

#### 2. Rewrite the following:-

1. Q. What will happen to the igloos if you can't type the correct answer?

A. If we cannot type the correct answer the penguins lose their houses (igloos), it will melt.

---

---




2. Q) Which colour comets move fast?

A) Yellow colour comet move fast.

---

---

#### 3. Identify the picture:-

-   
EDUCATIONAL SOFTWARE ALTERNATIVES
- 
- 

DELHI PUBLIC SCHOOL , DHANBAD  
EVS ASSIGNMENT ( JAN 2021),STD -2

1. Fill in the blanks :

i) \_\_\_\_\_are vehicles used by farmers in the field.



ii) Always cross the road at the \_\_\_\_\_.



iii )Never lean out of a \_\_\_\_\_ bus, car or train.



iv A \_\_\_\_\_ van carries letters and parcels.



v) The \_\_\_\_\_ Brothers invented the first aeroplane.



2.Match the following:




A




- i) Fastest means of transport
- ii) Delhi, Mumbai and Kolkata
- iii) Villages
- iv) Carries sick people to hospital
- v) Water transport




B



3. Tick the odd one out :

i) Rocket  Helicopter  Auto rickshaw 

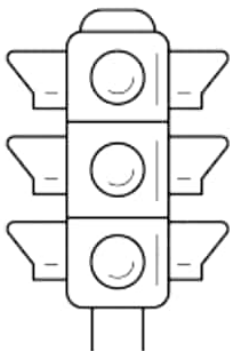
ii) Scooter  Car  Boat 

iii) Bus  Rickshaw  Train 

4. Complete the words :

- I) T \_ \_ A N S P \_ \_ \_ T
- II) S \_ \_ E A M \_ \_ R
- III) C \_ \_ R R \_ \_ A G \_ \_ S
- IV) T \_ \_ N N \_ \_ L

5. Colour , label and name the diagram :



CLASS II MATHS ASSIGNMENT OF JANUARY

- 1) Find the missing numbers in the following patterns.
  - a) 2,4,6,8 \_\_ \_\_
  - b) 5,7,9,11,\_\_ \_\_
  - c) 13,17,21,25 \_\_ \_\_
- 2) Make any three different patterns using the given shapes. Make sure that each shape should be used in the pattern.



Pattern 1 –

Pattern 2-

Pattern 3 -

- 3) Fill in the blanks :-

(a) Height of a tree is measured in \_\_\_\_\_

(b) Length of a ribbon is measured in \_\_\_\_\_

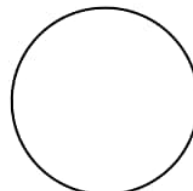

(c) Distance across a river is measured in \_\_\_\_\_

(d) We measure the amount of rice in \_\_\_\_\_

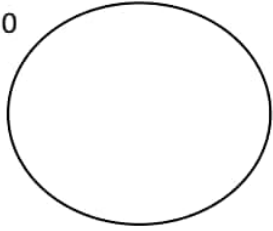
(e) We measure the glass full of fruit juice in \_\_\_\_\_

- 4) Time

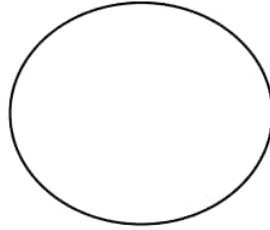
Draw clocks showing.



(a) 9 : 30



(b) 7:45



(c) Quarter to 5

(d) 10: 15

5) What is the time by the watch.

(a)

(b)



\_\_\_\_\_



\_\_\_\_\_

ASSIGNMENT - JANUARY  
CLASS II - HINDI

1. दिशे गए विकल्पों में से उचित विकल्प पर (✓) का चिह्न लगाइए :

(क) [ 1 ] चिह्न को क्या कहते हैं ?

पूर्णविशम  , अल्पविशम  , प्रश्नसूचक

(ख) [ ? ] कौन-सा विशम चिह्न है ?

अल्पविशम  , प्रश्नसूचक  , पूर्णविशम

(ग) [ 2 ] चिह्न को क्या कहते हैं ?

प्रश्नसूचक  , पूर्णविशम  , अल्पविशम

2. रेखांकित शब्द का विलीन शब्द लिखकर वाक्य पूरा करें :

च) मेरा स्कूल पास नहीं , \_\_\_\_\_ है ।

छ) आम का पेड़ छोटा नहीं , \_\_\_\_\_ है ।

ज) कौश का रंग सफेद नहीं , \_\_\_\_\_ होता है ।

झ) माताजी बाहर नहीं , \_\_\_\_\_ है ।

3. वाक्य पूरा करें :

ट) एक दिन ऋषि अपनी \_\_\_\_\_ के बाहर बैठा  
तप कर रहा था ।

ठ) पानी की छींटे पड़ते ही \_\_\_\_\_ एक मोटी व  
काली बिल्ली बन गया ।

ड) मदद किशु जानें पर हमें व्यक्ति का \_\_\_\_\_ प्रकट  
करना चाहिए ।