

DELHI PUBLIC SCHOOL

JANUARY MONTHLY ASSIGNMENT

CLASS--4

SUB-SST

Q1. Write 2 renewable energy and 2 non- renewable energy.

Q2. Define-1) Alloy

2) Quartz

3) Minerals

4) Natural gas.

5) Mining

Q3. Rearrange the letters and write the names of these minerals:

A) LOCA___

B) MENTEC_____

C) SLTEE___

D) RNOI___

E) LGOD___

Hindi Assignment (January)

Class 4

1. निम्नलिखित प्रश्नों के उत्तर लिखिए।

क) सोनू के गाँव का कुआँ कैसा था?

ख) चालू कुएँ में कार्बन- डाइऑक्साइड गैस क्यों नहीं जामती?

ग) बंटी की क्या परेशानी थी?

घ) विज्ञान की परीक्षा से एक दिन पहले बंटी के साथ क्या घटना घटी?

2. किसने कहा?

क) "केवल अंधविश्वास ही लोगों को डरा रहा है।

"ख) "तो क्या हम ऐसे कुओं का उपयोग फिर से नहीं कर सकते?"

ग) "मां, मैं अब सही तरीके से पढ़ाई लिखाई करूंगा।"

3. शब्दार्थ लिखें।

क) पर्याप्त

ख) ताल

ग) निर्मम

घ) निर्भर

4. विलोम शब्द लिखिए।

क) सत्य

ख) डर

ग) भारी

घ) गंदा

5. बहुवचन बनाएँ।

क) कलम

ख) पुस्तक

ग) लड़की

घ) खुशी

6. नीचे लिखे वाक्यों का काल लिखिए।

क) कल मेरा जन्मदिन था।

ख) कल मैं घूमने जाऊँगी।

ग) मैं पढ़ रही हूँ।



DELHI PUBLIC SCHOOL, DHANBAD

STD. IV

Computer Assignment – January

Ch-8 Introduction to Internet



Guidelines: Only answers should be written in the HW copy. Copying down the questions or taking printout of the same is not required.

Q1. Fill in the following blanks with suitable words or phrases:

- Two or more computers connected to each other form a computer _____.
- _____ is an international network of millions of computers.
- A website is a collection of related _____.
- _____ is the largest collection of information in the form of websites on the internet.
- A _____ is a special software that allows users to access and view web pages.
- _____ button in Internet Explorer is used to reload the webpage from the internet.
- _____ bar is used for typing the address of a web page or web site in the web browser.







Q2. State whether the following statements are True or False:

- A modem is a device used for connecting a computer to the internet.
- A website is a part of a web page.
- Internet Explorer is a popular website.
- Back button is used to go back to previous page opened in Internet Explorer.
- Home page is the last page of a website.
- Google Chrome is one of the most popular web browsers.
- WWW stands for World Wide Websites.

Q3. Answer the following Questions:

- a) Write any five uses of the Internet.
- b) Write any four requirements for an internet connection.

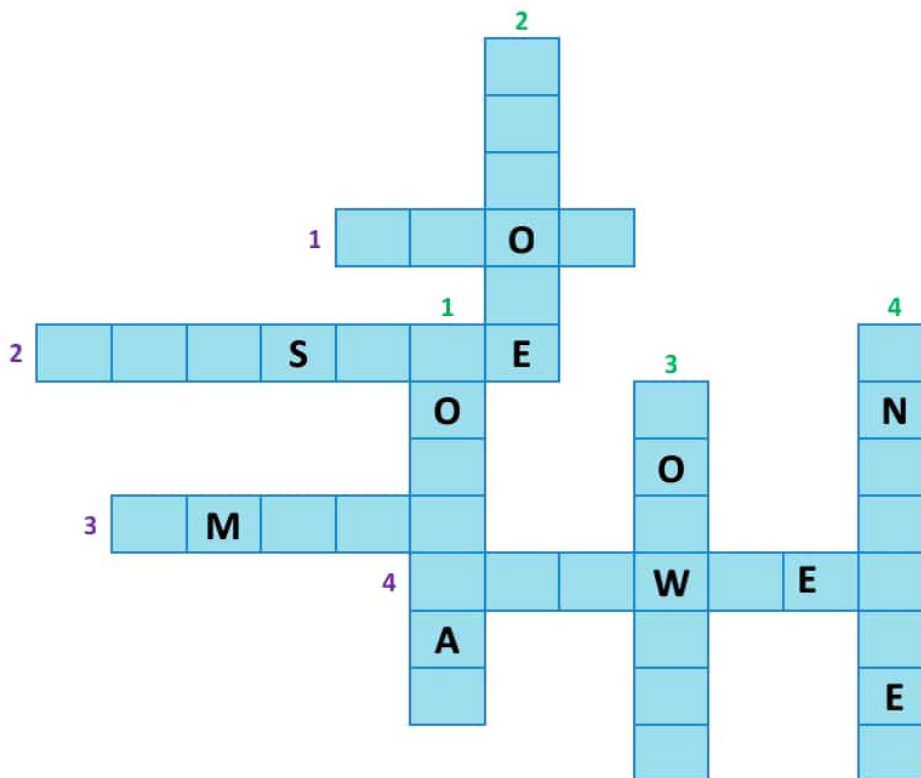
Q4. Match the Following:

Column A	Column B
1. 	a. Stop button
2. 	b. Google Chrome
3. 	c. Back button
4. 	d. Mozilla Firefox
5. 	e. Forward button
6. 	f. Refresh button

Q5. Identify the following parts of the Internet Explorer window:



Q6. Solve the puzzle with the help of the clues given:



Across →

1. Button that stops loading of a webpage.
2. Related webpages.
3. Message we send and receive through internet.
4. Mozilla Firebox is a web _____.

Down ↓

1. A part of Internet Explorer with shortcut buttons for various operations.
2. A popular web browser.
3. This button takes you to the next page.
4. The largest computer network.

Science monthly assignment

STD-IV

1. Define

A. Filtration-

B. Fog-

C. Frost-

2. Fill in the blanks

A. Change of water vapour into water on cooling is called_____.

B. Evaporation is faster when the temperature is _____.

C. The _____ causes all weather changes.

3. Distinguish between.

A. Land breeze and sea breeze.

MATHS MONTHLY ASSIGNMENT
(January 2021)

CLASS IV

Q.1. Add: (a) $18 + 0.24$ (b) $14.23 + 19.2$

Q.2. Subtract:

(a) $64.12 - 49.984$ (b) $493 - 200.2$

Q.3. Add together: 3.64, 100 and 33.965

Q.4. Write in decimal form:

(a) $20 + 2 + \frac{3}{100}$ (b) $1000 + 7 + \frac{6}{10} + \frac{9}{1000}$

Q.5. Write in the expanded form:

(a) 802.06 (b) 77.238

Q.6. Fill in the blanks with $>$, $<$ or $=$.

(a) 32 _____ 13.98 (b) 4.9 _____ 4.824

(c) 12.00 _____ 12 (d) 282.9 _____ 282.09

Q.7. Write as decimal fraction

(a) $28 \frac{2}{1000}$ (b) $5 \frac{5}{100}$

(c) $140 \frac{16}{10}$ (d) $\frac{40028}{1000}$

Q.8. Make a chart and write the place values of all the digits:

(a) 606.42 (b) 2.906 (c) 43.117

Q.9. Arrange in descending order:

(a) 3.431 3.26 13.09 13.43 13

(b) 0.009 0.019 0.002 0.108 0.9

Q.10 Arrange in ascending order:

(a) 3.431 3.26 13.09 13.43 13

(b) 0.009 0.019 0.002 0.108 0.9
