

# English Monthly Assignment: October, 2021

## LIVEWORKSHEETS

### Std: IV

Read the story "The Jackal and the Iguana" from your workbook and do as instructed:-

#### 1. Choose the correct option:-

a) The turtle and the iguana always went ----- together.

i) hunting

ii) fishing

iii) to an old man's home

b) The ----- owned the pond.

i) turtle

ii) iguana

iii) old man

c) The ----- escaped but the ----- was caught.

i) iguana, turtle

ii) turtle, iguana

iii) old man, turtle

d) The turtle was tied to a -----

i) bench

ii) chair

iii) post

#### 2. Select the correct antonyms of the given words:-

a) small

i) tiny

ii) big

b) dropped



### 1. उचित विशेषण शब्द चुनें।

- क) युद्ध से भाग जाने वाला  
वीर / कायर कहलाता है।  
ख) गिलास में थोड़ा/ कुछ  
पानी रखा है।  
ग) हिमालय, सबसे बड़ा/  
ऊँचा पर्वत है।

### 2. सही कारक चिह्न चुनकर वाक्य पूरे करें।

- क) भयंकर सूखे का/ के कारण सब परेशान हैं।  
ख) मेरा भंडार तो आप सबके घरों में/ की भरा पड़ा है।  
ग) आपकी दया की/ के बल पर ही भगवान बुद्ध की आज्ञा पूरी होगी।

### 3. निम्नलिखित शब्दों के विलोम शब्द चुनें।

- क) पास X (नजदीक/ दूर)  
ख) वीर X (कायर/ परिश्रमी)  
ग) सत्य X (सच्चा/ असत्य)  
घ) सच्चा X (झूठा/ सत्य)



### 4. सही उत्तर चुनें।

- क) नगरवासी कहाँ एकत्रित हुए थे?  
नगर के बीचो बीच/ महात्मा बुद्ध के आश्रम में  
ख) किसके खेत सूख गए थे?  
धर्मपाल के/ महात्मा बुद्ध के  
ग) भीषण का क्या अर्थ है?  
भयंकर/ छोटा



DELHI PUBLIC SCHOOL

OCTOBER' 21, MATHS ASSIGNMENT

CLASS – IV

1) Multiply: -  $2089 \times 9$

2)  $58 \times \underline{\hspace{2cm}} = 86362$

3)  $464418 \div 18 = \underline{\hspace{2cm}}$

4)  $40698 + 3654 = \underline{\hspace{2cm}}$

5)  $800012 - 3871 = \underline{\hspace{2cm}}$

6) Place value of 3 in 40386 (in digits)

7)  $\underline{\hspace{2cm}} + 1639 = 50369$

8)  $(8260 \times 945) \times 74 = (\underline{\hspace{2cm}} \times 74) \times 8260$

9)  $4030 \times 90 = \underline{\hspace{2cm}}$

10)  $1743042 \div 47 = \underline{\hspace{2cm}}$

**I. Choose the correct option:**

1. The process by which an insect sheds off its old skin is called

a) Moulting b) Hatching c) Sucking 

2. The process of growing into an adult from the tadpole is called

a) incubation b) metamorphosis c) moulting 

3. The group of animals that takes the best care of the young ones is

a) reptiles b) aquatic animals c) mammals 

4. Insects reproduce by

a) laying eggs b) regeneration 

c) giving birth to

young ones **II. Write 'T' for True and 'F' for false:**

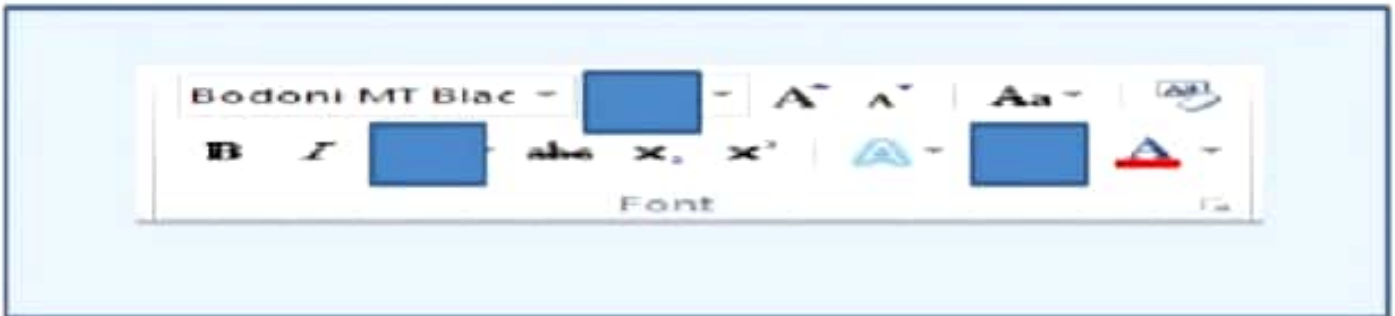
1. All animals feed their babies with their own milk.

2. Larva of a butterfly is called nymph.

3. In the centre of the egg is a yellow portion called the Yolk.

4. Cockroaches pass through four stages in their life cycle.

Q1. Drag and drop the icons from the Help box to complete the Font and Paragraph groups in the MS Word ribbon:



**Q2. Choose the correct label for the given icons:**

a. 



b. 

c. 

d. 

c. 

**Q3. Draw lines to match the following icons with their functions:**

<u>A</u>	<u>B</u>
	<b>Make text darker</b>
<b>B</b>	<b>Change Font</b>
	<b>Align Text right</b>

SST ASSIGNMENT

CLASS 4

October Month

Q1. Tick the correct option:

A. About --- of the total area is under forests.

1) one- fourth

2) two- third.

B. Forests in India are classified into ---- type.

1) 5

2) 6

C. National parks and wild life in India is to protect

1) wild animals.

2) pet animals

D. Jim Corbett National Park is in

1) Asia

2) India.

E) Gir National Park is in

1) Patna

2) Gujrat.

F) Sunderbans are in

1) Sri Lanka

2) West Bengal

G) Manas National Park is in

1) Assam

2) Nagaland

H. Thorns Forests are found in

1) keria

2) Gujarat.

I. Mangrove is also called

1) Tidal forests

2) Mountain Forest.

J. Fir is the example of

1) Mountain Forest.

2) Thorn Forest.